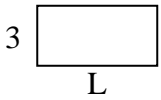




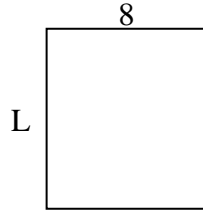
Determine the value of 'L'. Lengths are in cm (not to scale).

**Answers**

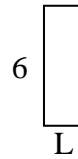
1) perimeter = 18



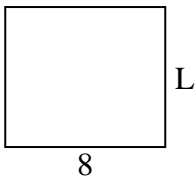
2) perimeter = 34



3) perimeter = 16



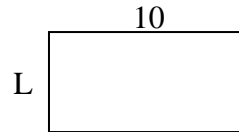
4) perimeter = 30



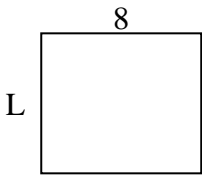
5) perimeter = 10



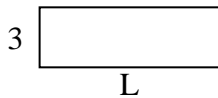
6) perimeter = 30



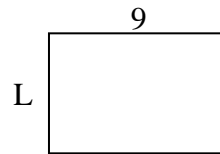
7) perimeter = 30



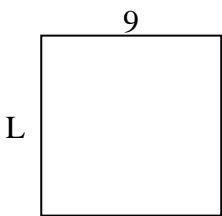
8) perimeter = 24



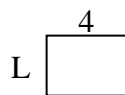
9) perimeter = 30



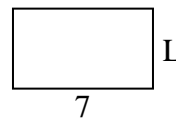
10) perimeter = 36



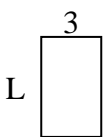
11) perimeter = 14




12) perimeter = 22



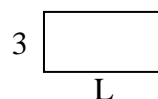
13) perimeter = 16



14) perimeter = 24



15) perimeter = 18

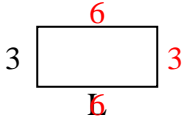


1. \_\_\_\_\_
2. \_\_\_\_\_
3. \_\_\_\_\_
4. \_\_\_\_\_
5. \_\_\_\_\_
6. \_\_\_\_\_
7. \_\_\_\_\_
8. \_\_\_\_\_
9. \_\_\_\_\_
10. \_\_\_\_\_
11. \_\_\_\_\_
12. \_\_\_\_\_
13. \_\_\_\_\_
14. \_\_\_\_\_
15. \_\_\_\_\_

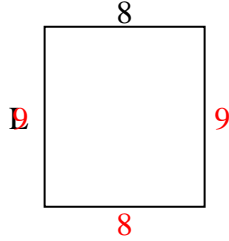


Determine the value of 'L'. Lengths are in cm (not to scale).

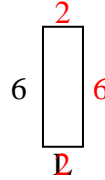
1) perimeter = 18



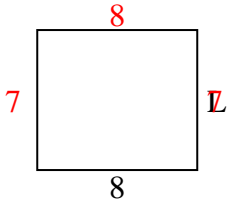
2) perimeter = 34



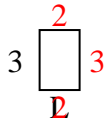
3) perimeter = 16



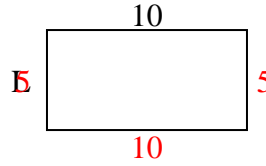
4) perimeter = 30



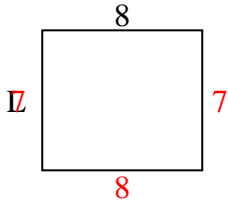
5) perimeter = 10



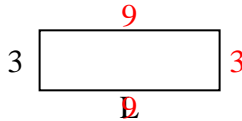
6) perimeter = 30



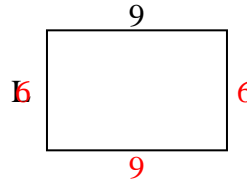
7) perimeter = 30



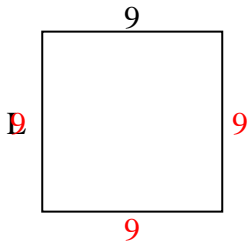
8) perimeter = 24



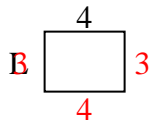
9) perimeter = 30



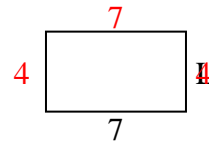
10) perimeter = 36



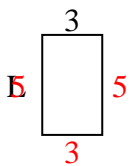
11) perimeter = 14



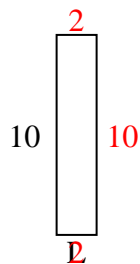
12) perimeter = 22



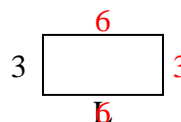
13) perimeter = 16



14) perimeter = 24



15) perimeter = 18



Answers

1. 6 cm

2. 9 cm

3. 2 cm

4. 7 cm

5. 2 cm

6. 5 cm

7. 7 cm

8. 9 cm

9. 6 cm

10. 9 cm

11. 3 cm

12. 4 cm

13. 5 cm

14. 2 cm

15. 6 cm