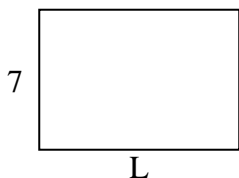




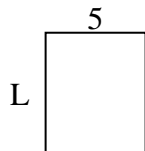
Determine the value of 'L'.

Answers

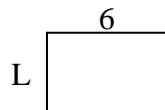
1) Area = $70u^2$



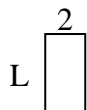
2) Area = $30u^2$




3) Area = $24u^2$




4) Area = $8u^2$



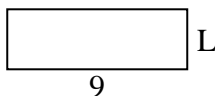
5) Area = $60u^2$



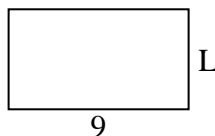
6) Area = $40u^2$



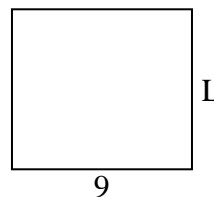
7) Area = $27u^2$



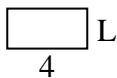
8) Area = $45u^2$



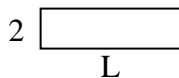
9) Area = $72u^2$



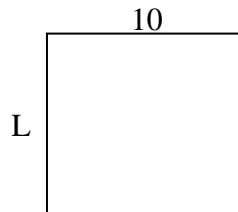
10) Area = $8u^2$



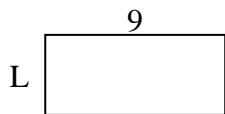
11) Area = $14u^2$



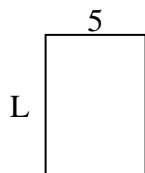
12) Area = $90u^2$




13) Area = $36u^2$



14) Area = $35u^2$



15) Area = $24u^2$

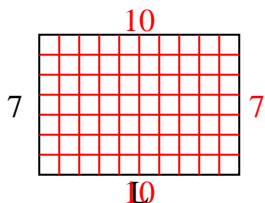


1. _____
2. _____
3. _____
4. _____
5. _____
6. _____
7. _____
8. _____
9. _____
10. _____
11. _____
12. _____
13. _____
14. _____
15. _____

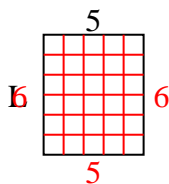


Determine the value of 'L'.

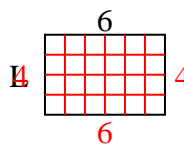
1) Area = $70u^2$



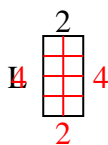
2) Area = $30u^2$



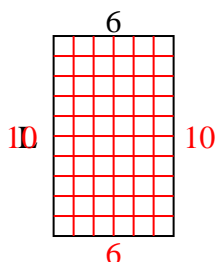
3) Area = $24u^2$



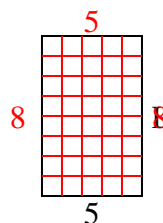
4) Area = $8u^2$



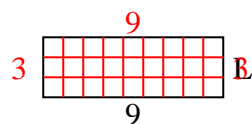
5) Area = $60u^2$



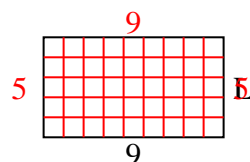
6) Area = $40u^2$



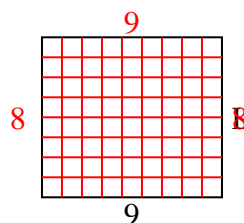
7) Area = $27u^2$



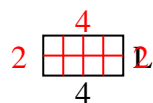
8) Area = $45u^2$



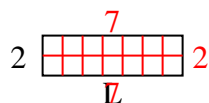
9) Area = $72u^2$



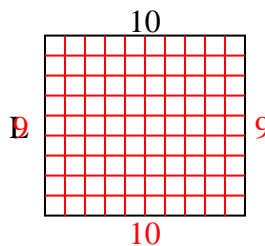
10) Area = $8u^2$



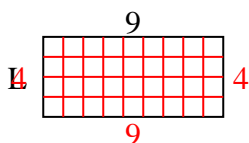
11) Area = $14u^2$



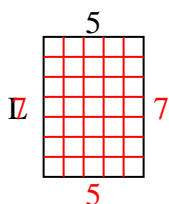
12) Area = $90u^2$



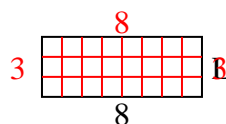
13) Area = $36u^2$



14) Area = $35u^2$



15) Area = $24u^2$



Answers

1. 10

2. 6

3. 4

4. 4

5. 10

6. 8

7. 3

8. 5

9. 8

10. 2

11. 7

12. 9

13. 4

14. 7

15. 3