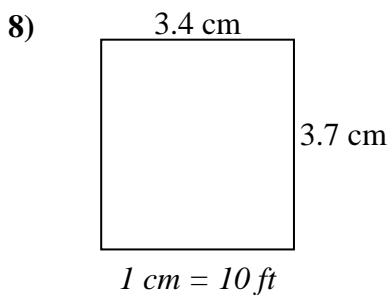
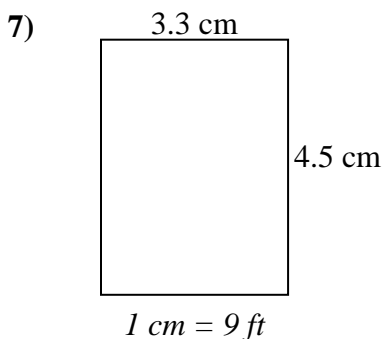
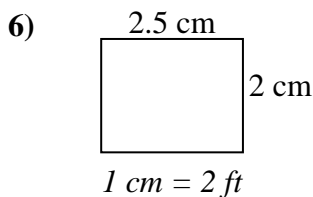
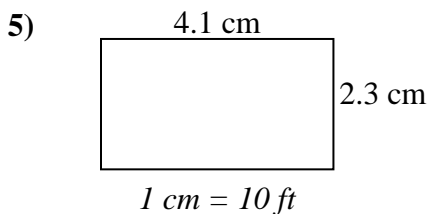
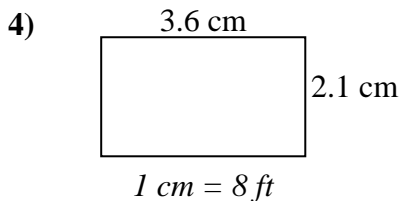
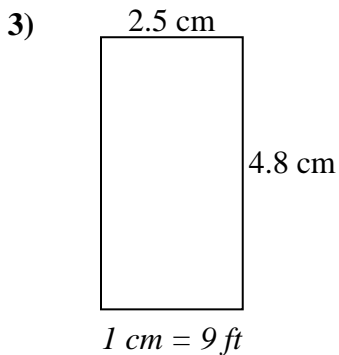
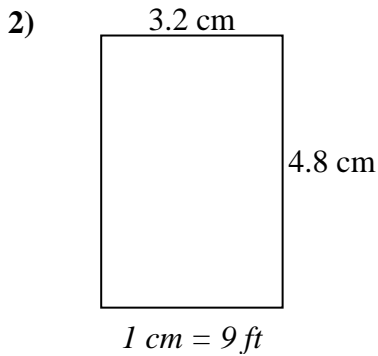
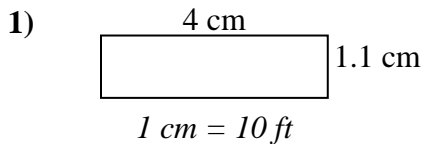




Determine the actual width, height and area of each scale rectangle.

Round the area to the nearest whole number.



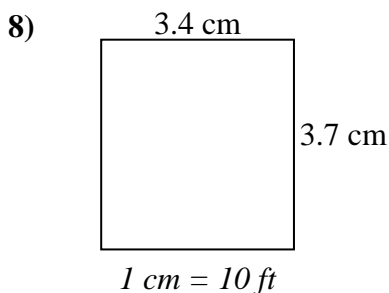
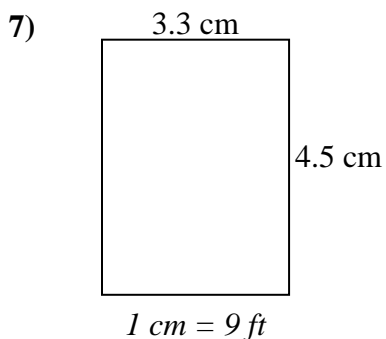
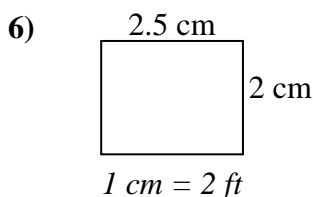
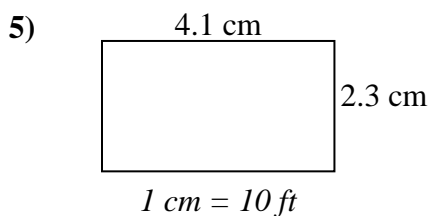
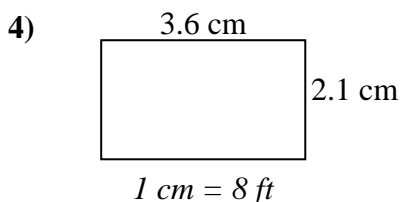
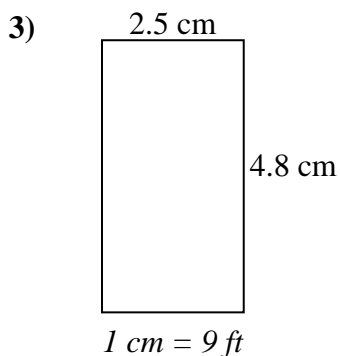
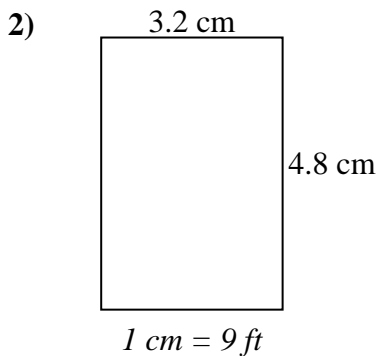
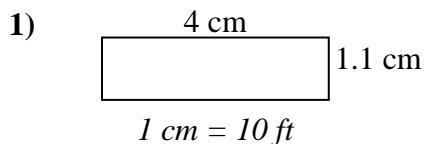
Answers

- 1. _____
- 2. _____
- 3. _____
- 4. _____
- 5. _____
- 6. _____
- 7. _____
- 8. _____



Determine the actual width, height and area of each scale rectangle.

Round the area to the nearest whole number.



Answers

- | | | | |
|----|-------------|-------------|--------------|
| 1. | <u>40</u> | <u>11</u> | <u>440</u> |
| 2. | <u>28.8</u> | <u>43.2</u> | <u>1,244</u> |
| 3. | <u>22.5</u> | <u>43.2</u> | <u>972</u> |
| 4. | <u>28.8</u> | <u>16.8</u> | <u>484</u> |
| 5. | <u>41</u> | <u>23</u> | <u>943</u> |
| 6. | <u>5</u> | <u>4</u> | <u>20</u> |
| 7. | <u>29.7</u> | <u>40.5</u> | <u>1,203</u> |
| 8. | <u>34</u> | <u>37</u> | <u>1,258</u> |