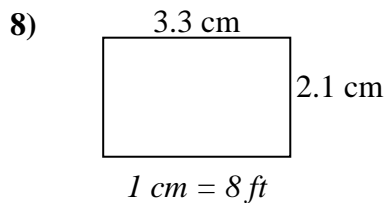
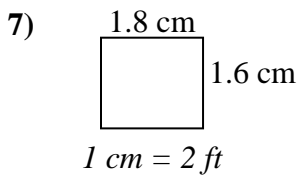
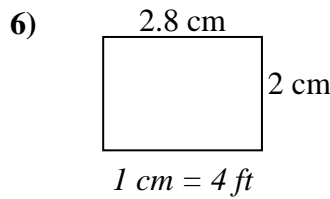
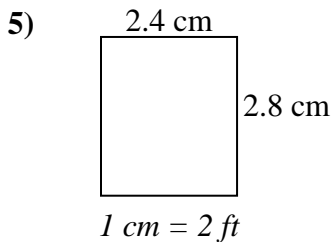
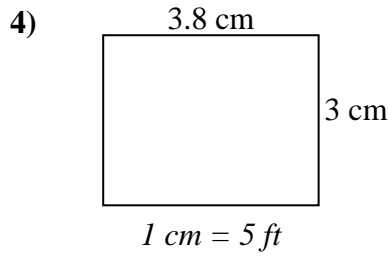
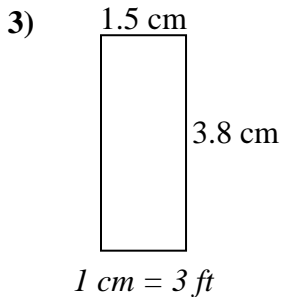
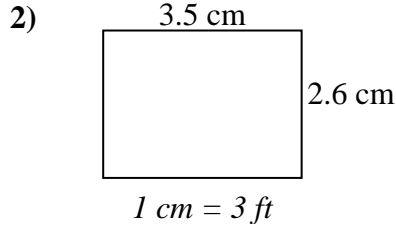
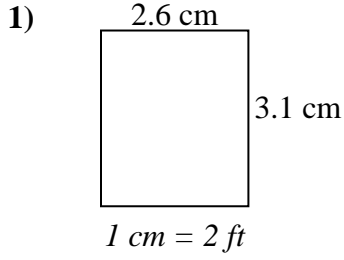




Determine the actual width, height and area of each scale rectangle.

Round the area to the nearest whole number.



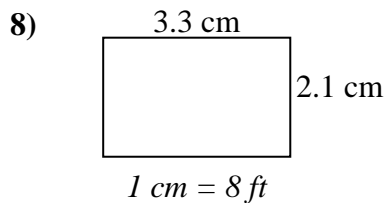
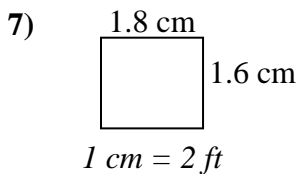
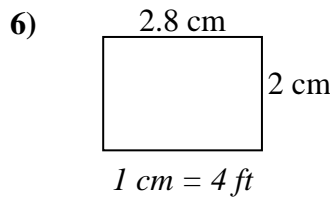
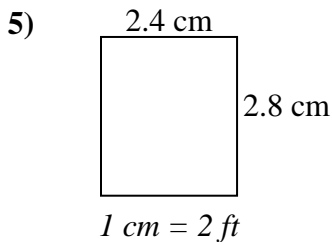
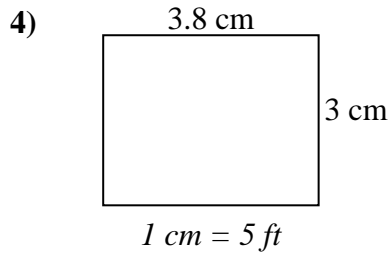
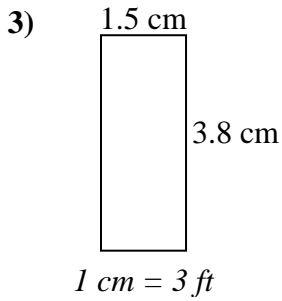
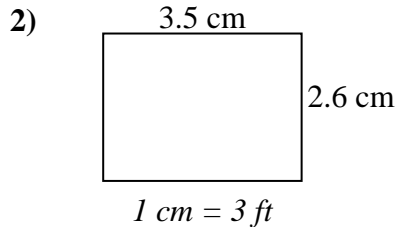
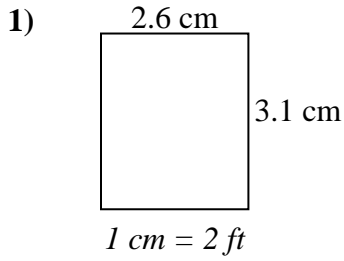
Answers

- 1. _____
- 2. _____
- 3. _____
- 4. _____
- 5. _____
- 6. _____
- 7. _____
- 8. _____



Determine the actual width, height and area of each scale rectangle.

Round the area to the nearest whole number.



Answers

| | | | |
|----|-------------|-------------|------------|
| 1. | <u>5.2</u> | <u>6.2</u> | <u>32</u> |
| 2. | <u>10.5</u> | <u>7.8</u> | <u>82</u> |
| 3. | <u>4.5</u> | <u>11.4</u> | <u>51</u> |
| 4. | <u>19</u> | <u>15</u> | <u>285</u> |
| 5. | <u>4.8</u> | <u>5.6</u> | <u>27</u> |
| 6. | <u>11.2</u> | <u>8</u> | <u>90</u> |
| 7. | <u>3.6</u> | <u>3.2</u> | <u>12</u> |
| 8. | <u>26.4</u> | <u>16.8</u> | <u>444</u> |