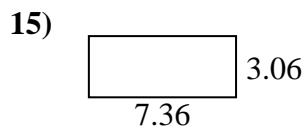
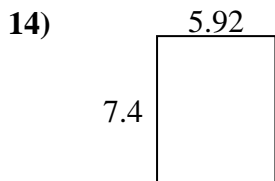
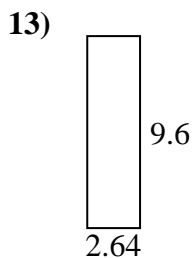
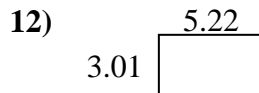
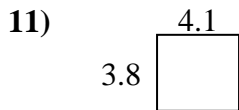
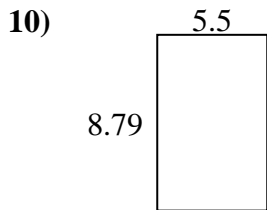
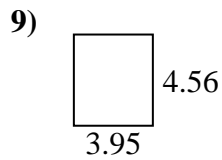
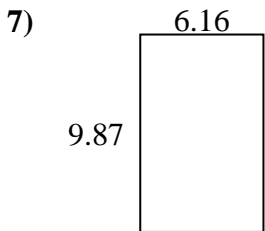
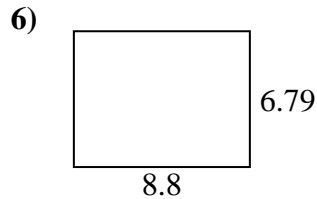
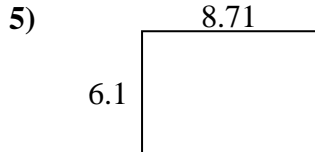
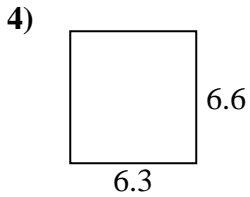
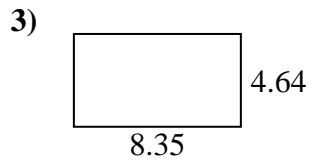
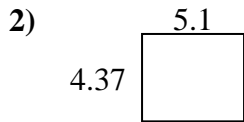
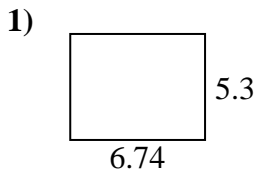




Find the perimeter and area of each figure. Answer to the nearest 10th.

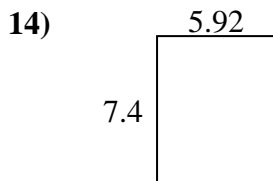
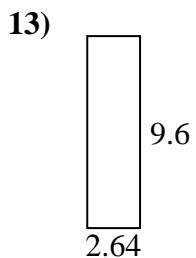
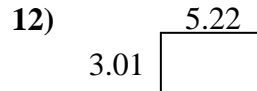
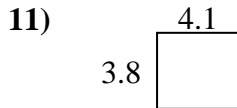
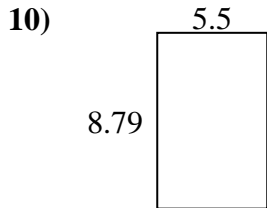
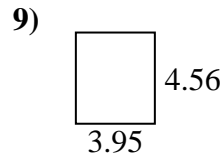
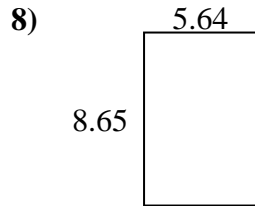
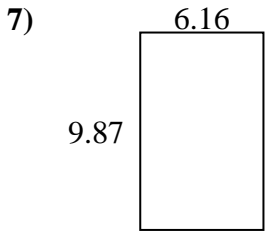
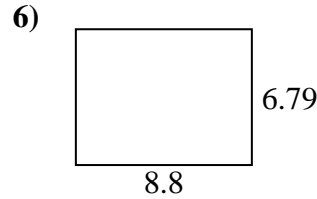
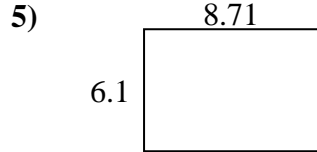
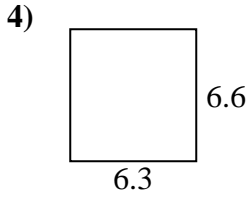
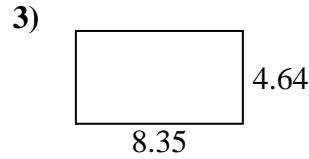
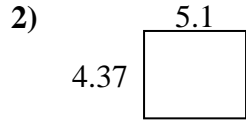
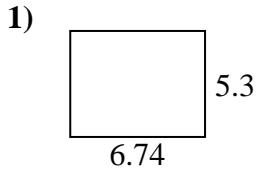


Answers

1. \_\_\_\_\_
2. \_\_\_\_\_
3. \_\_\_\_\_
4. \_\_\_\_\_
5. \_\_\_\_\_
6. \_\_\_\_\_
7. \_\_\_\_\_
8. \_\_\_\_\_
9. \_\_\_\_\_
10. \_\_\_\_\_
11. \_\_\_\_\_
12. \_\_\_\_\_
13. \_\_\_\_\_
14. \_\_\_\_\_
15. \_\_\_\_\_



Find the perimeter and area of each figure. Answer to the nearest 10th.



Answers

1.	<u>35.7</u>	<u>24.1</u>
2.	<u>22.3</u>	<u>18.9</u>
3.	<u>38.7</u>	<u>26.0</u>
4.	<u>41.6</u>	<u>25.8</u>
5.	<u>53.1</u>	<u>29.6</u>
6.	<u>59.8</u>	<u>31.2</u>
7.	<u>60.8</u>	<u>32.1</u>
8.	<u>48.8</u>	<u>28.6</u>
9.	<u>18.0</u>	<u>17.0</u>
10.	<u>48.3</u>	<u>28.6</u>
11.	<u>15.6</u>	<u>15.8</u>
12.	<u>15.7</u>	<u>16.5</u>
13.	<u>25.3</u>	<u>24.5</u>
14.	<u>43.8</u>	<u>26.6</u>
15.	<u>22.5</u>	<u>20.8</u>