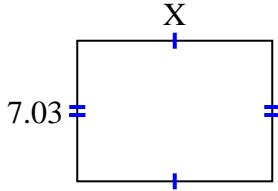


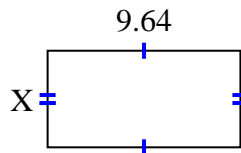


Find the value of X for each figure. Each figure is in centimeters (cm). Not to scale.

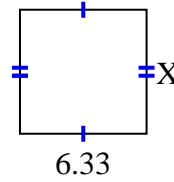
1) area = 68.5425 cm^2



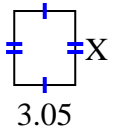
2) area = 46.5612 cm^2



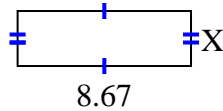
3) area = 39.246 cm^2



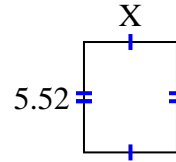
4) area = 11.285 cm^2



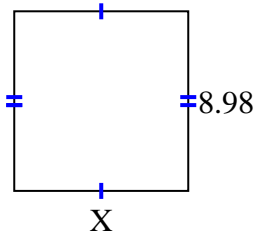
5) area = 23.8425 cm^2



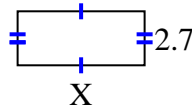
6) area = 25.668 cm^2



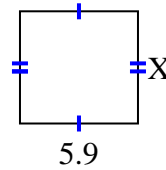
7) area = 78.126 cm^2



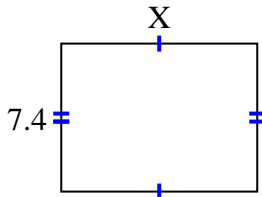
8) area = 17.145 cm^2



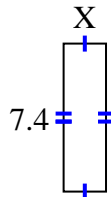
9) area = 33.099 cm^2



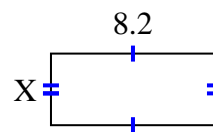
10) area = 72.52 cm^2



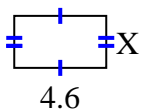
11) area = 15.688 cm^2



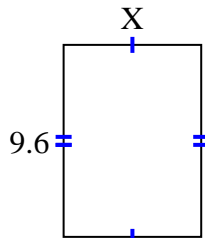
12) area = 29.356 cm^2



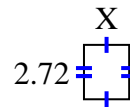
13) area = 11.96 cm^2



14) area = 66.048 cm^2



15) area = 6.1472 cm^2



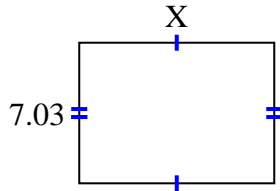
Answers

1. _____
2. _____
3. _____
4. _____
5. _____
6. _____
7. _____
8. _____
9. _____
10. _____
11. _____
12. _____
13. _____
14. _____
15. _____

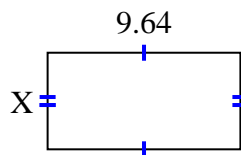


Find the value of X for each figure. Each figure is in centimeters (cm). Not to scale.

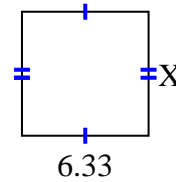
1) area = 68.5425 cm^2



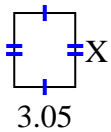
2) area = 46.5612 cm^2



3) area = 39.246 cm^2



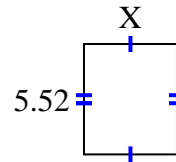
4) area = 11.285 cm^2



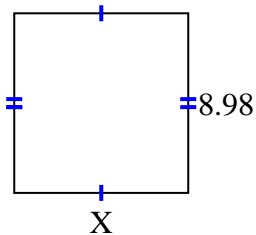
5) area = 23.8425 cm^2



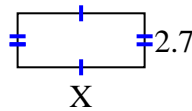
6) area = 25.668 cm^2



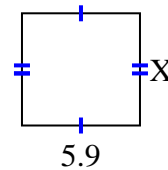
7) area = 78.126 cm^2



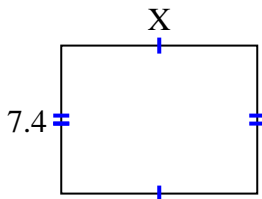
8) area = 17.145 cm^2



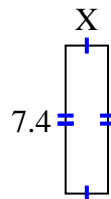
9) area = 33.099 cm^2



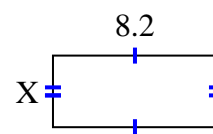
10) area = 72.52 cm^2



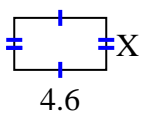
11) area = 15.688 cm^2



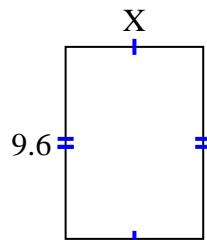
12) area = 29.356 cm^2



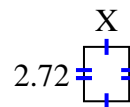
13) area = 11.96 cm^2



14) area = 66.048 cm^2



15) area = 6.1472 cm^2



Answers

1. 9.75

2. 4.83

3. 6.2

4. 3.7

5. 2.75

6. 4.65

7. 8.7

8. 6.35

9. 5.61

10. 9.8

11. 2.12

12. 3.58

13. 2.6

14. 6.88

15. 2.26