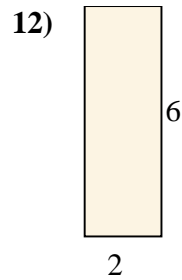
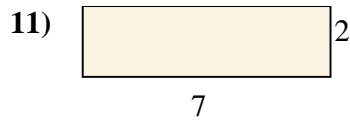
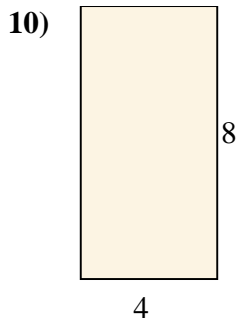
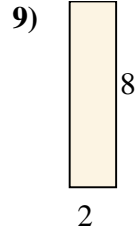
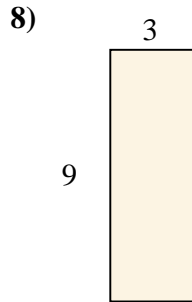
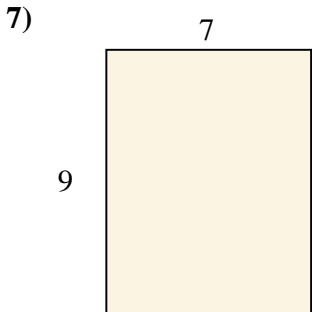
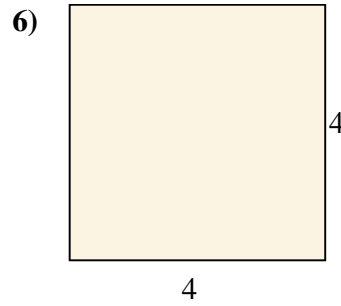
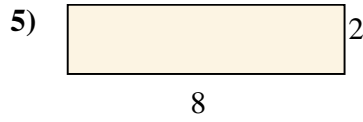
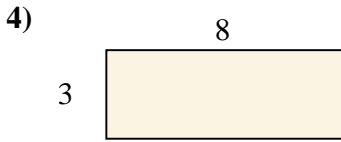
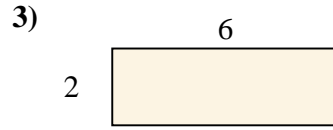
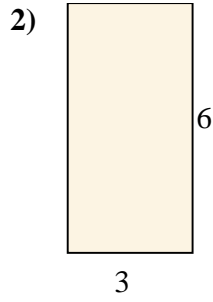
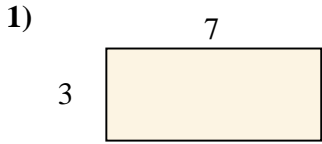




Find the area (in cm) of the rectangle shown.

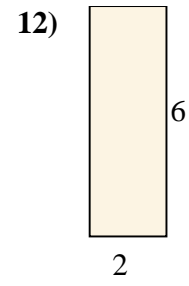
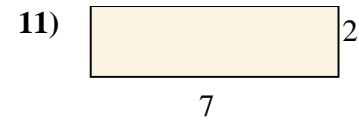
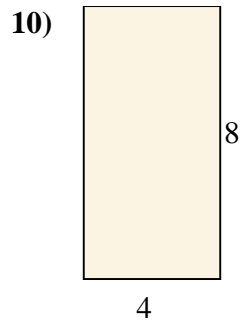
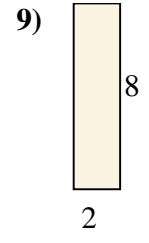
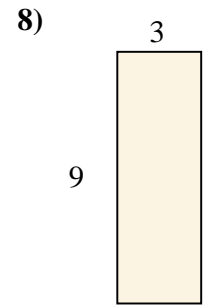
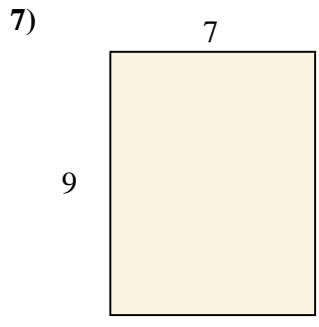
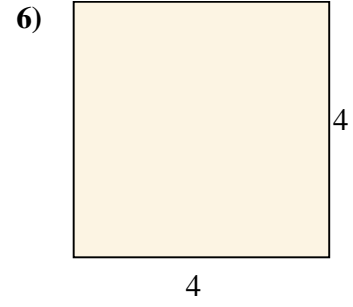
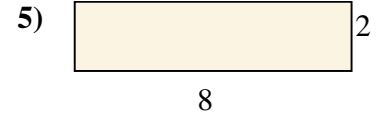
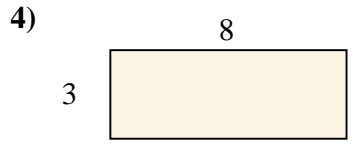
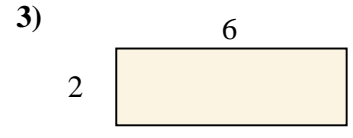
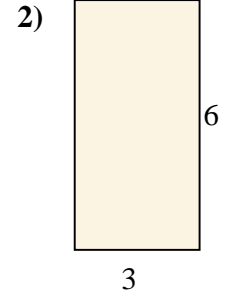
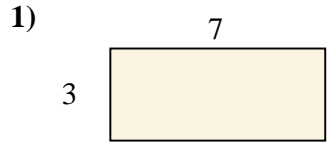


Answers

- 1. \_\_\_\_\_
- 2. \_\_\_\_\_
- 3. \_\_\_\_\_
- 4. \_\_\_\_\_
- 5. \_\_\_\_\_
- 6. \_\_\_\_\_
- 7. \_\_\_\_\_
- 8. \_\_\_\_\_
- 9. \_\_\_\_\_
- 10. \_\_\_\_\_
- 11. \_\_\_\_\_
- 12. \_\_\_\_\_



Find the area (in cm) of the rectangle shown.



Answers

- 1. 21
- 2. 18
- 3. 12
- 4. 24
- 5. 16
- 6. 16
- 7. 63
- 8. 27
- 9. 16
- 10. 32
- 11. 14
- 12. 12