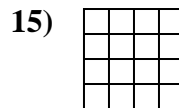
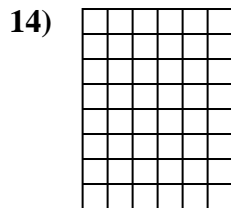
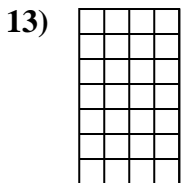
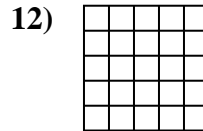
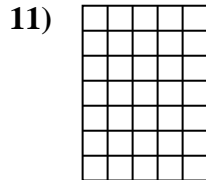
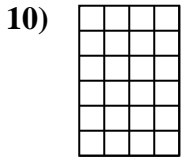
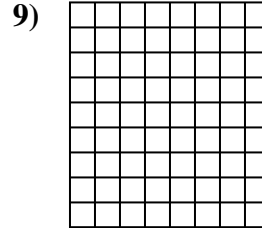
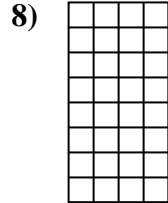
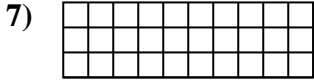
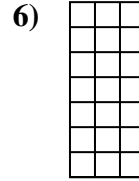
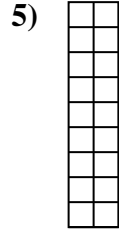
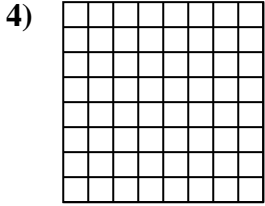
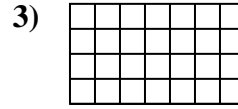
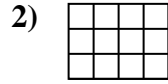
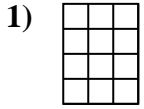




Determine the area. Each **SVGREPLACE** = 1 square unit (u^2).

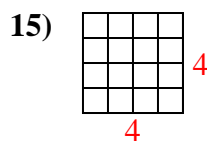
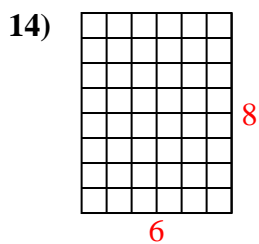
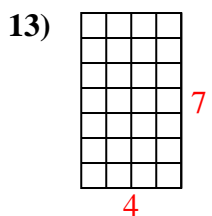
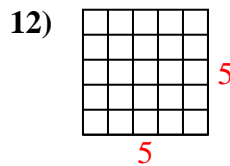
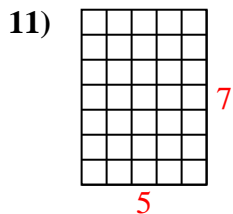
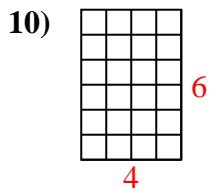
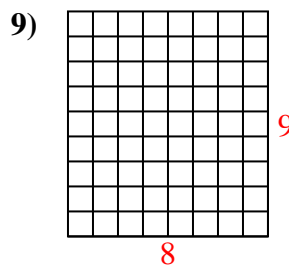
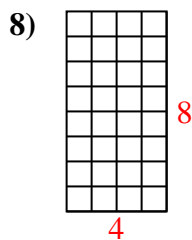
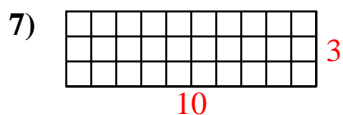
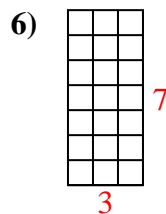
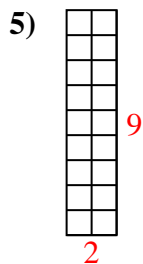
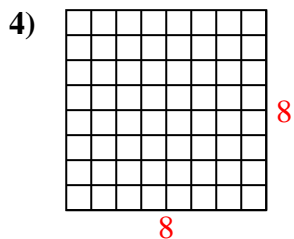
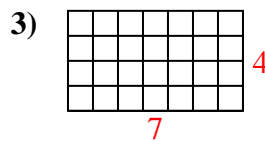
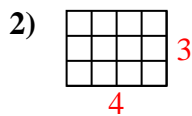
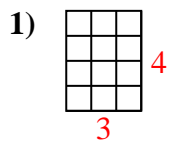


Answers

- 1. _____
- 2. _____
- 3. _____
- 4. _____
- 5. _____
- 6. _____
- 7. _____
- 8. _____
- 9. _____
- 10. _____
- 11. _____
- 12. _____
- 13. _____
- 14. _____
- 15. _____



Determine the area. Each SVGREPLACE = 1 square unit (u^2).



Answers

1. 12 u^2

2. 12 u^2

3. 28 u^2

4. 64 u^2

5. 18 u^2

6. 21 u^2

7. 30 u^2

8. 32 u^2

9. 72 u^2

10. 24 u^2

11. 35 u^2

12. 25 u^2

13. 28 u^2

14. 48 u^2

15. 16 u^2