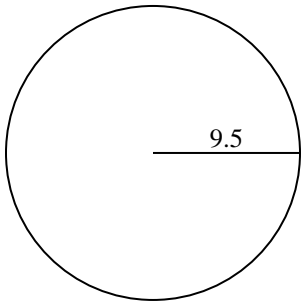


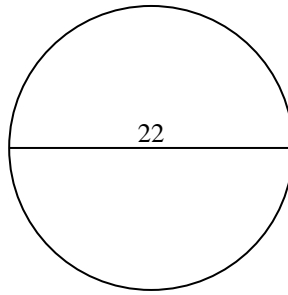


Find the circumference (in cm) of the circle. Circles are not to scale.

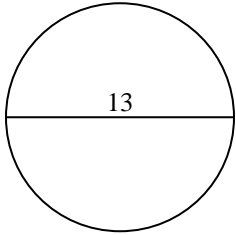
1)



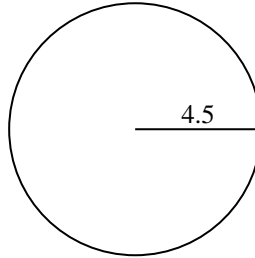
2)



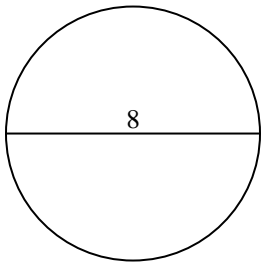
3)



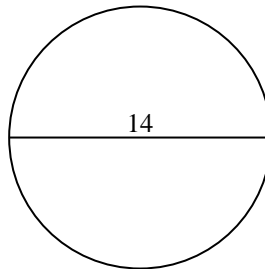
4)



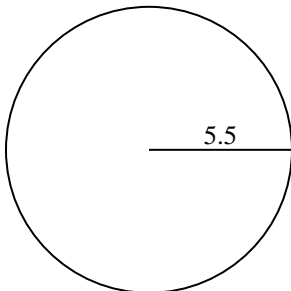
5)



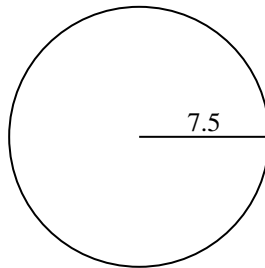
6)



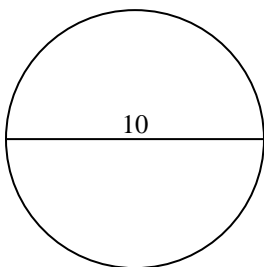
7)



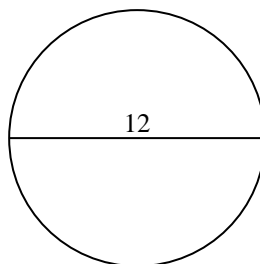
8)



9)



10)



Answers

1. _____

2. _____

3. _____

4. _____

5. _____

6. _____

7. _____

8. _____

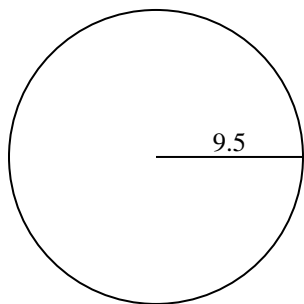
9. _____

10. _____

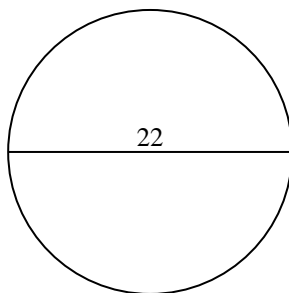


Find the circumference (in cm) of the circle. Circles are not to scale.

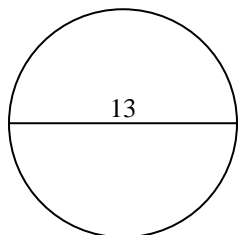
1)



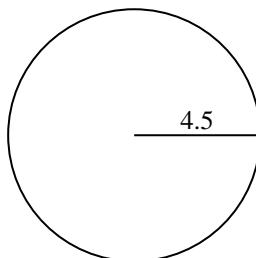
2)



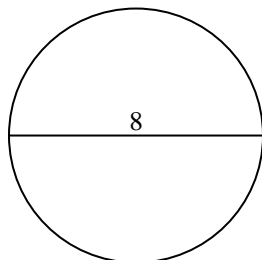
3)



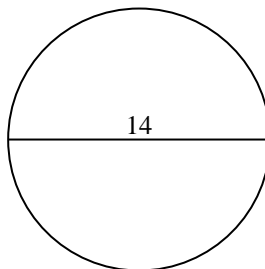
4)



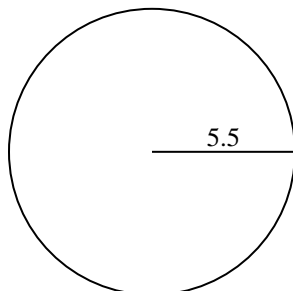
5)



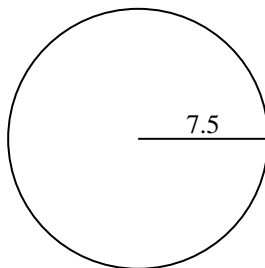
6)



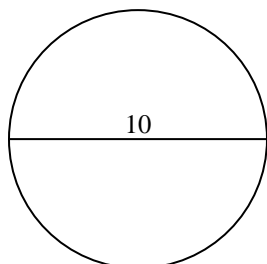
7)



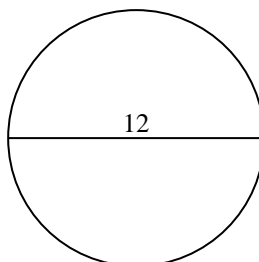
8)



9)



10)

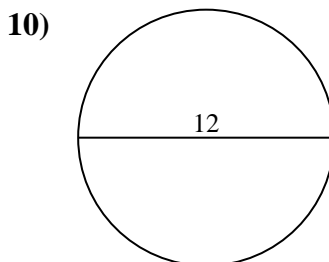
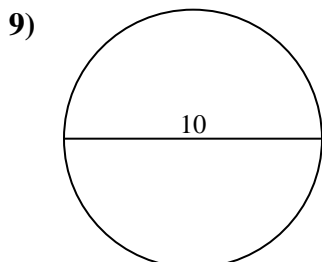
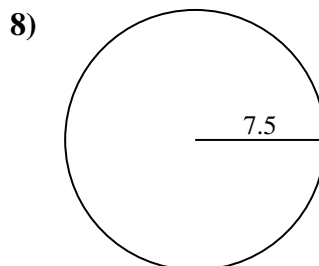
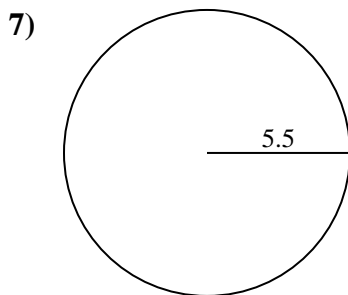
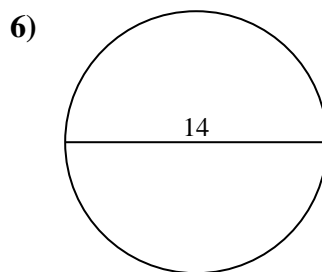
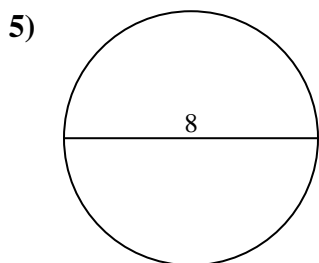
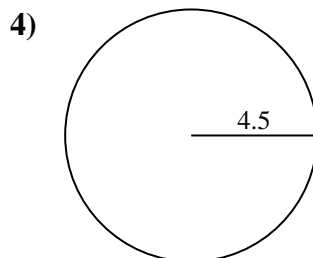
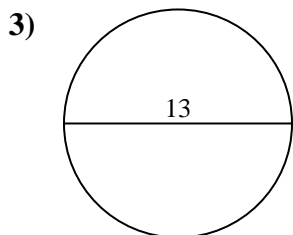
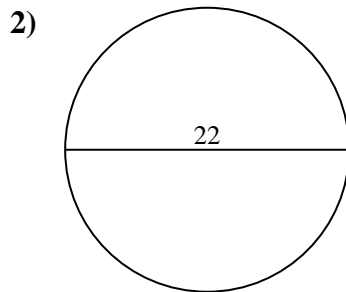
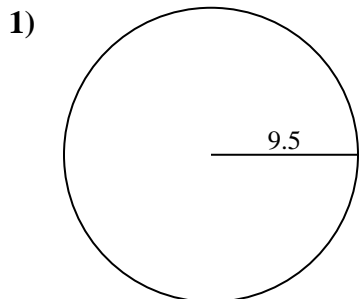
**Answers**

1. **59.69 cm**
2. **69.12 cm**
3. **40.84 cm**
4. **28.27 cm**
5. **25.13 cm**
6. **43.98 cm**
7. **34.56 cm**
8. **47.12 cm**
9. **31.42 cm**
10. **37.7 cm**



Find the circumference (in cm) of the circle. Circles are not to scale.

- | | | | | |
|----------|----------|----------|----------|----------|
| 59.69 cm | 25.13 cm | 31.42 cm | 40.84 cm | 34.56 cm |
| 28.27 cm | 37.7 cm | 69.12 cm | 47.12 cm | 43.98 cm |



Answers

- _____
- _____
- _____
- _____
- _____
- _____
- _____
- _____
- _____
- _____