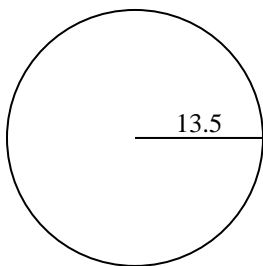


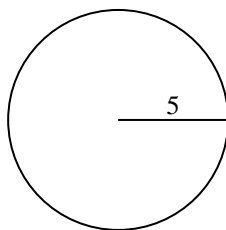


Find the circumference (in cm) of the circle. Circles are not to scale.

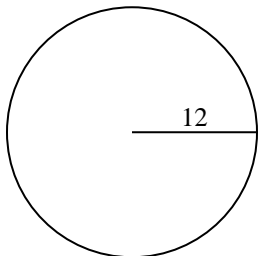
1)



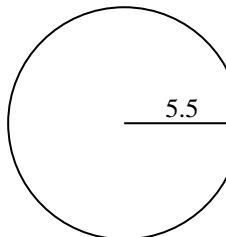
2)



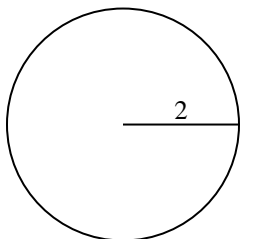
3)



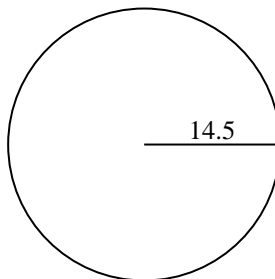
4)



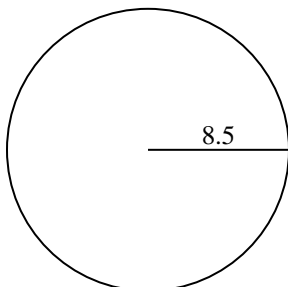
5)



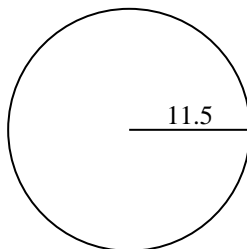
6)



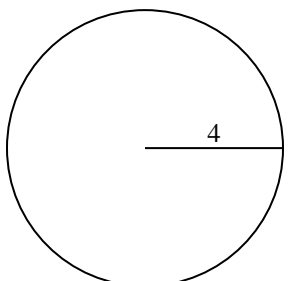
7)



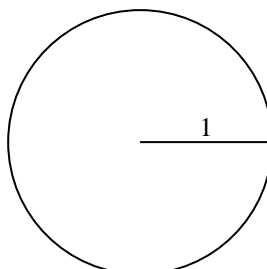
8)



9)



10)



Answers

1. _____

2. _____

3. _____

4. _____

5. _____

6. _____

7. _____

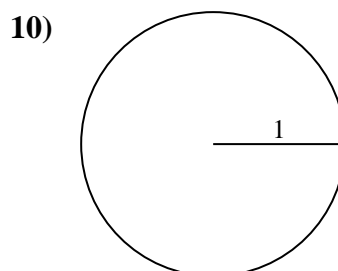
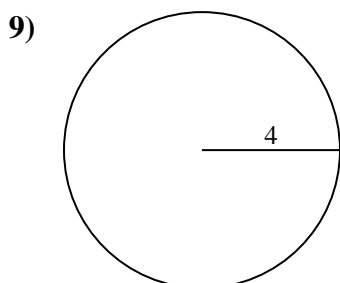
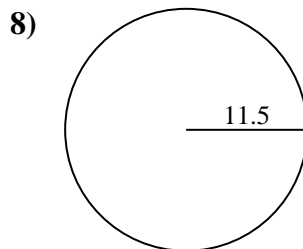
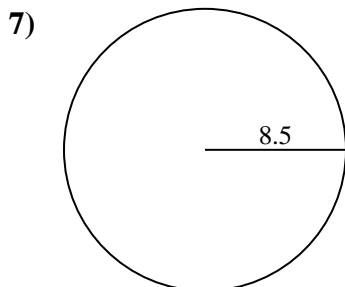
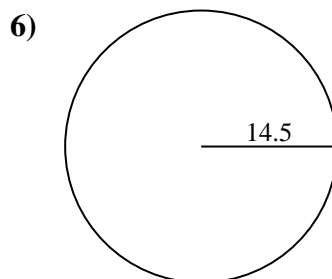
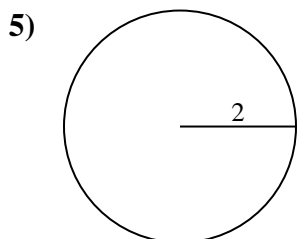
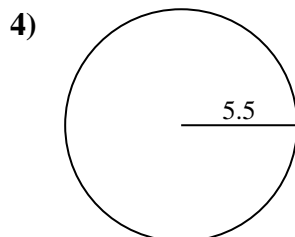
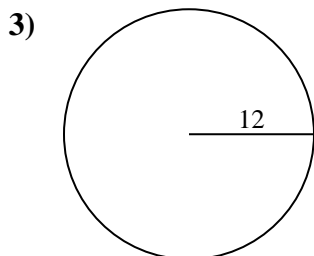
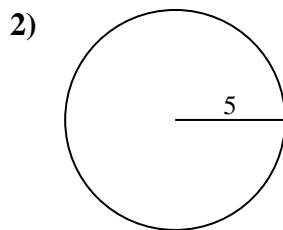
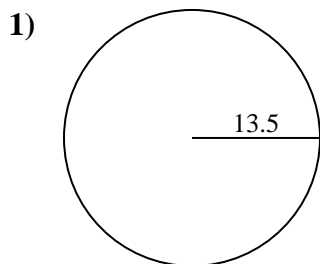
8. _____

9. _____

10. _____



Find the circumference (in cm) of the circle. Circles are not to scale.

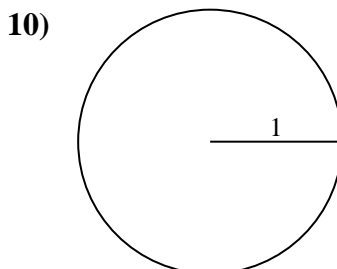
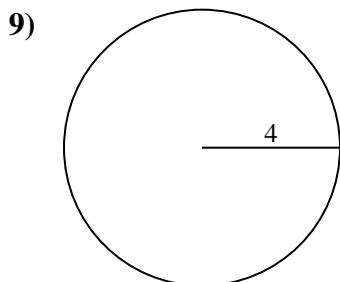
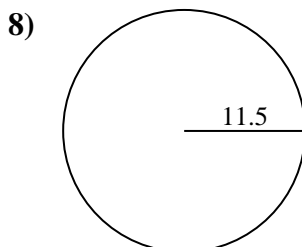
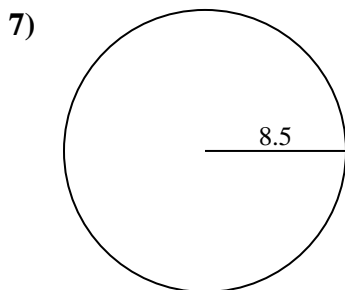
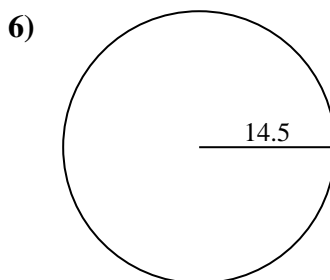
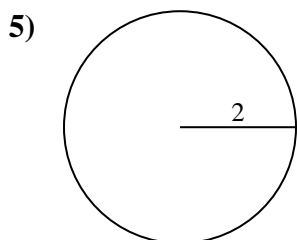
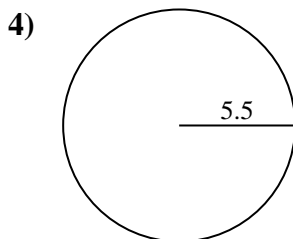
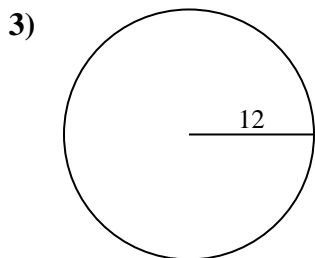
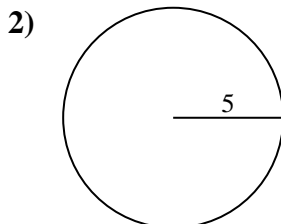
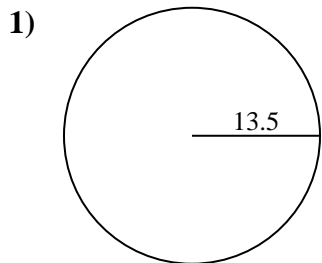
Answers

1. 84.82 cm
2. 31.42 cm
3. 75.4 cm
4. 34.56 cm
5. 12.57 cm
6. 91.11 cm
7. 53.41 cm
8. 72.26 cm
9. 25.13 cm
10. 6.28 cm



Find the circumference (in cm) of the circle. Circles are not to scale.

- | | | | | |
|----------|----------|----------|----------|----------|
| 53.41 cm | 84.82 cm | 31.42 cm | 72.26 cm | 34.56 cm |
| 12.57 cm | 75.4 cm | 91.11 cm | 6.28 cm | 25.13 cm |



Answers

1. _____
2. _____
3. _____
4. _____
5. _____
6. _____
7. _____
8. _____
9. _____
10. _____