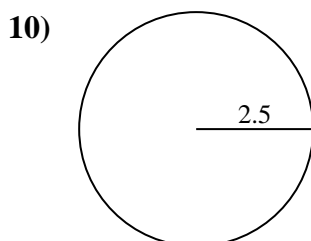
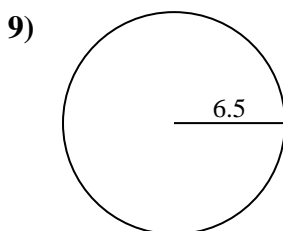
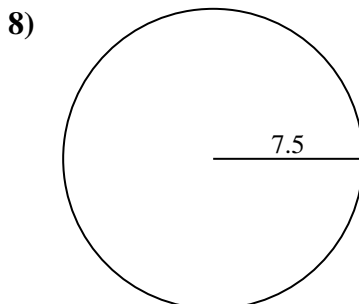
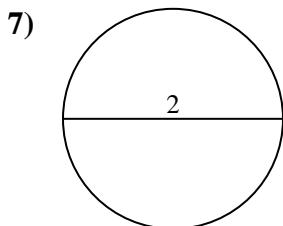
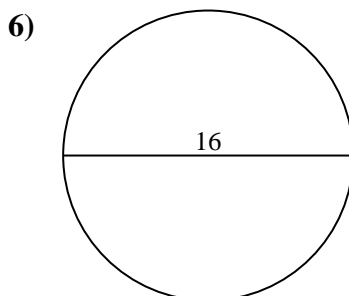
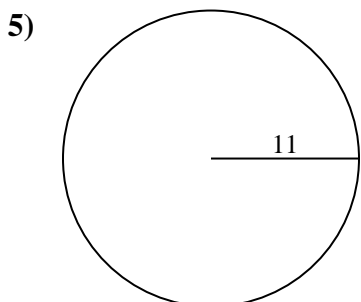
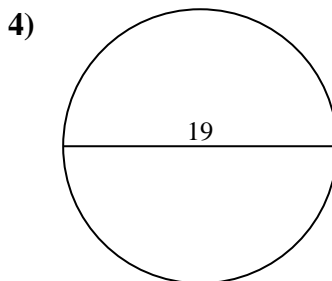
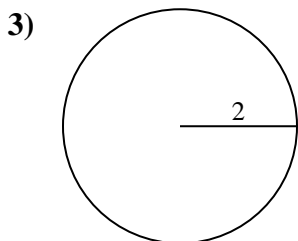
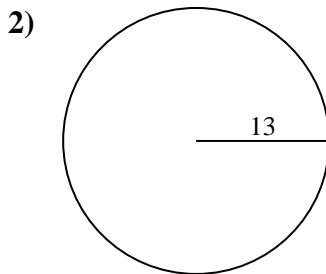
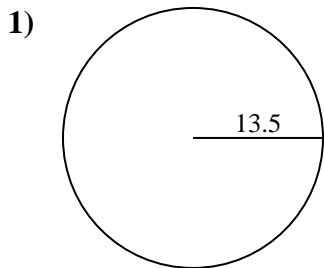




Find the circumference (in cm) of the circle. Circles are not to scale.



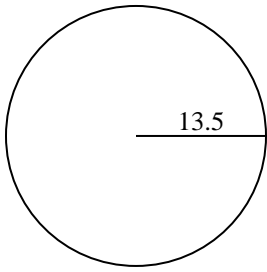
Answers

- 1. _____
- 2. _____
- 3. _____
- 4. _____
- 5. _____
- 6. _____
- 7. _____
- 8. _____
- 9. _____
- 10. _____

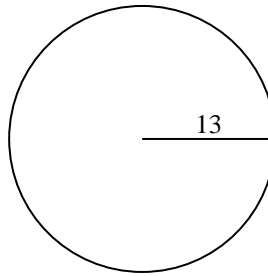


Find the circumference (in cm) of the circle. Circles are not to scale.

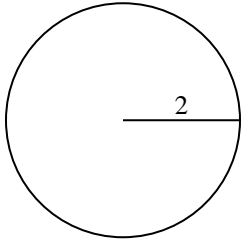
1)



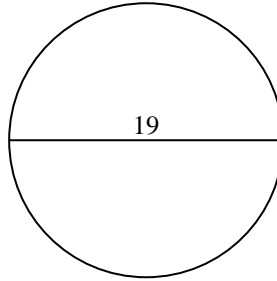
2)



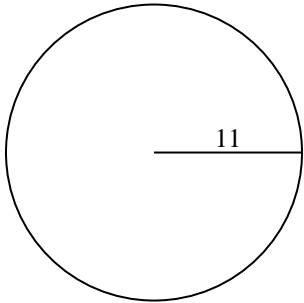
3)



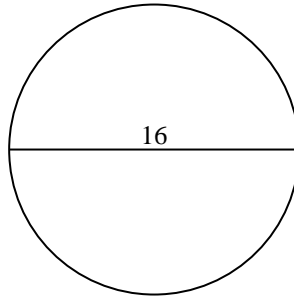
4)



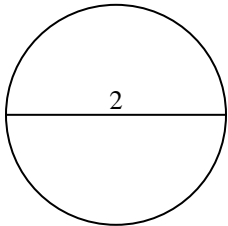
5)



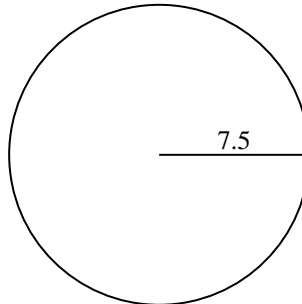
6)



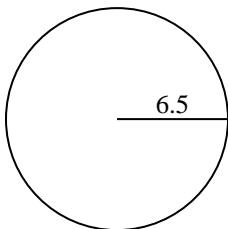
7)



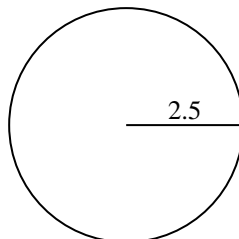
8)



9)



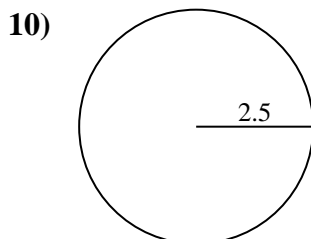
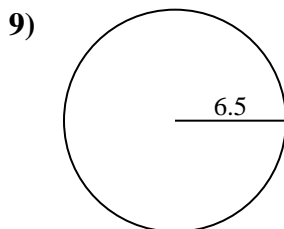
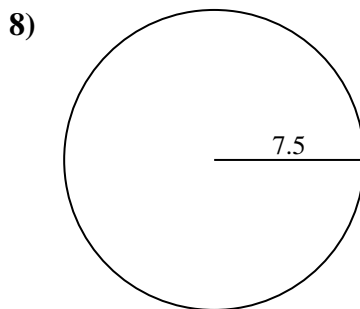
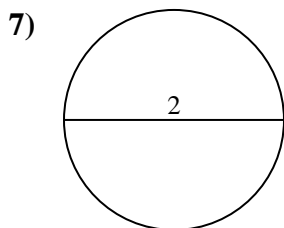
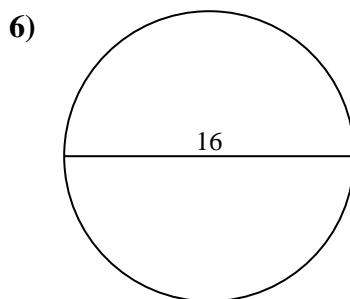
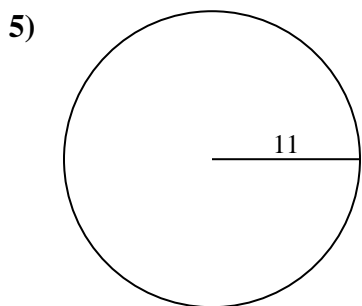
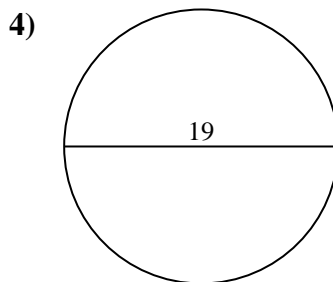
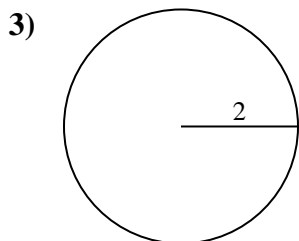
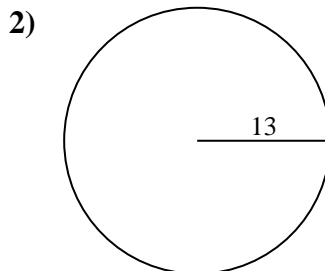
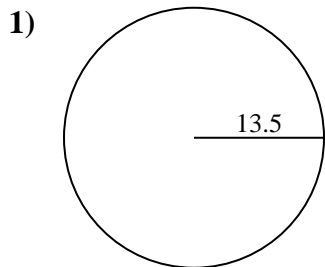
10)

**Answers**1. **84.82 cm**2. **81.68 cm**3. **12.57 cm**4. **59.69 cm**5. **69.12 cm**6. **50.27 cm**7. **6.28 cm**8. **47.12 cm**9. **40.84 cm**10. **15.71 cm**



Find the circumference (in cm) of the circle. Circles are not to scale.

- | | | | | |
|----------|----------|----------|----------|----------|
| 69.12 cm | 6.28 cm | 81.68 cm | 15.71 cm | 12.57 cm |
| 50.27 cm | 47.12 cm | 84.82 cm | 59.69 cm | 40.84 cm |



Answers

- _____
- _____
- _____
- _____
- _____
- _____
- _____
- _____
- _____
- _____