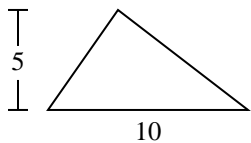


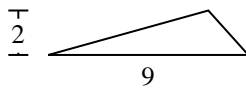


Find the area of the triangle. Round your answer to the nearest 10th.

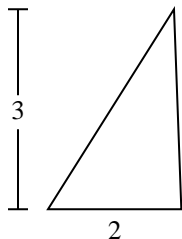
1)



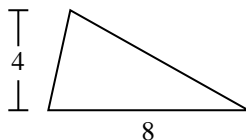
2)



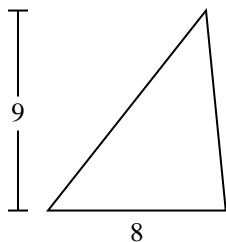
3)



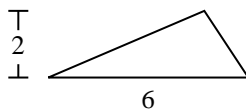
4)



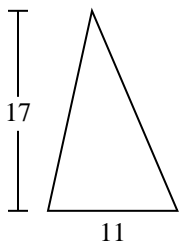
5)



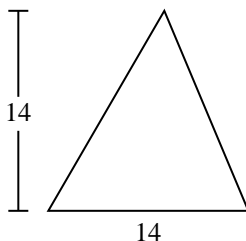
6)



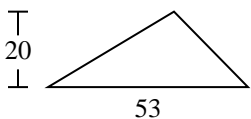
7)



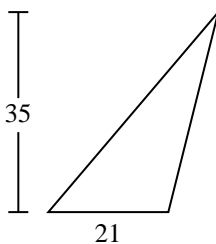
8)



9)



10)



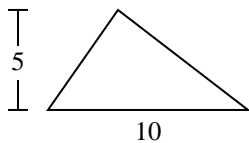
Answers

1. _____
2. _____
3. _____
4. _____
5. _____
6. _____
7. _____
8. _____
9. _____
10. _____

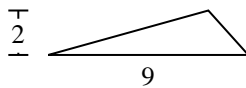


Find the area of the triangle. Round your answer to the nearest 10th.

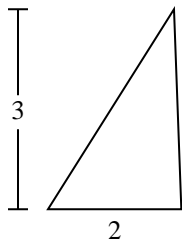
1)



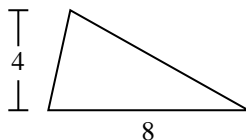
2)



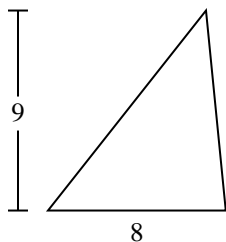
3)



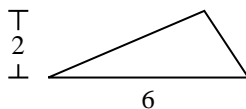
4)



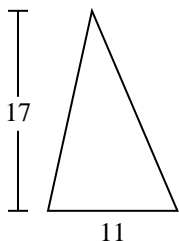
5)



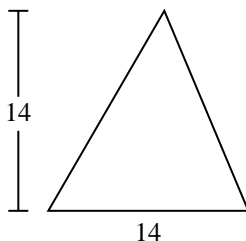
6)



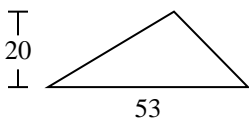
7)



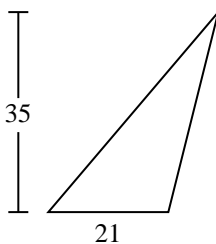
8)



9)



10)



Answers

1. 25

2. 9

3. 3

4. 16

5. 36

6. 6

7. 93.5

8. 98

9. 530

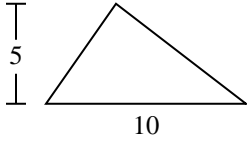
10. 367.5



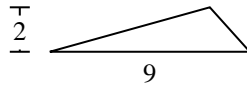
Find the area of the triangle. Round your answer to the nearest 10th.

93.5	98	530	25	9
6	36	16	3	

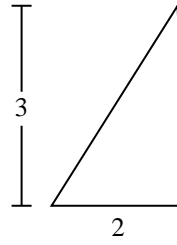
1)



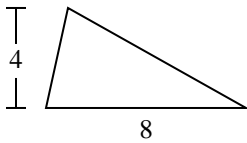
2)



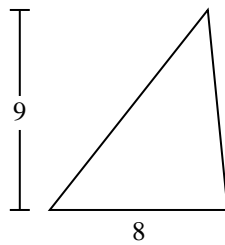
3)



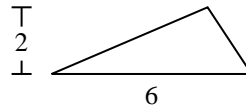
4)



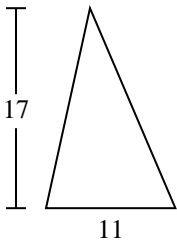
5)



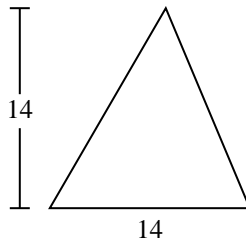
6)



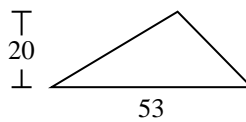
7)



8)



9)



Answers

1. _____
2. _____
3. _____
4. _____
5. _____
6. _____
7. _____
8. _____
9. _____