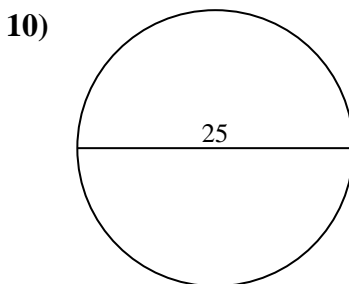
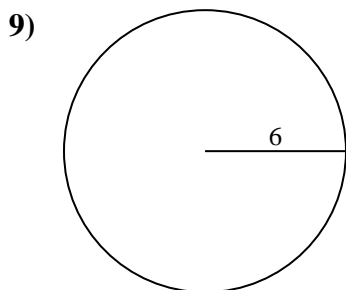
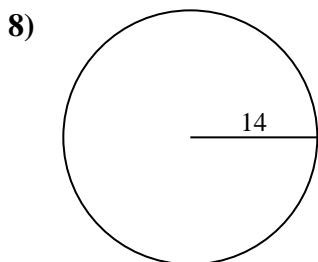
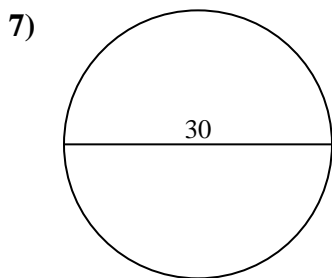
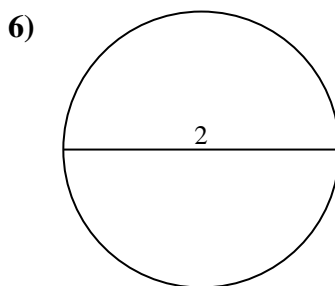
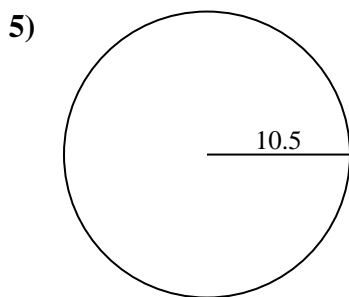
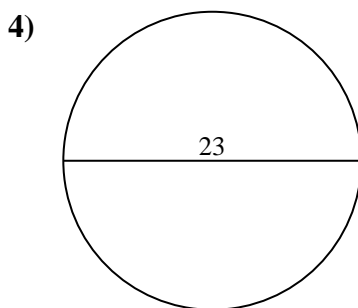
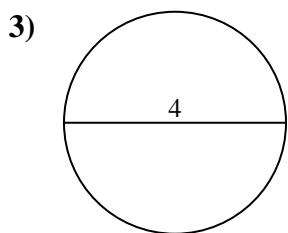
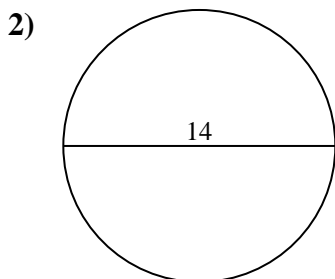
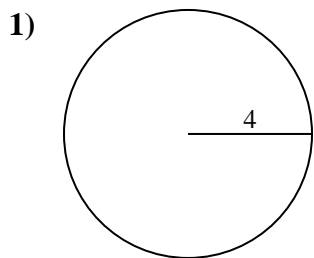




Find the area of the circle. Round to the nearest 10th.

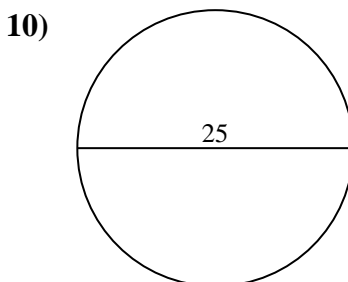
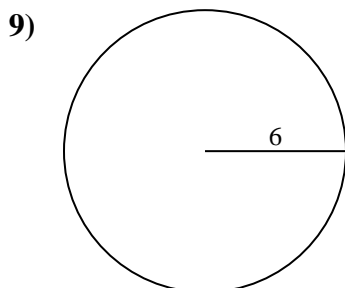
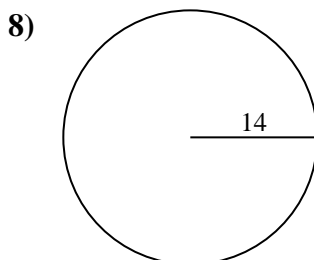
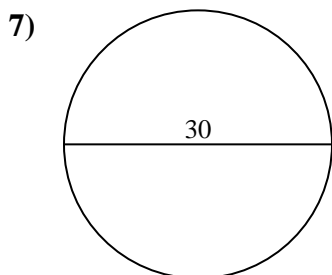
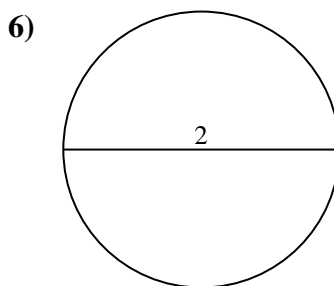
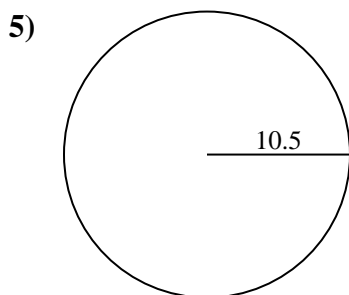
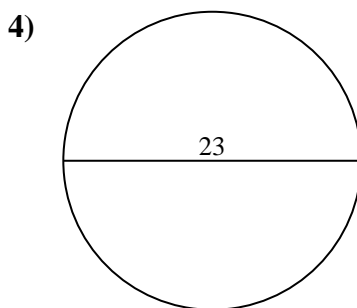
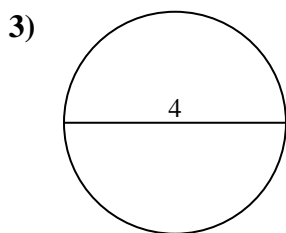
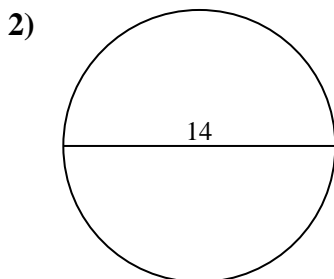
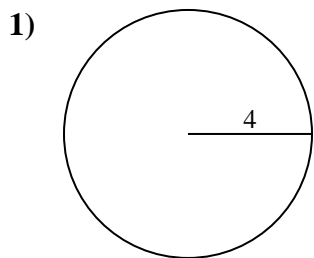
Answers



- 1. \_\_\_\_\_
- 2. \_\_\_\_\_
- 3. \_\_\_\_\_
- 4. \_\_\_\_\_
- 5. \_\_\_\_\_
- 6. \_\_\_\_\_
- 7. \_\_\_\_\_
- 8. \_\_\_\_\_
- 9. \_\_\_\_\_
- 10. \_\_\_\_\_



Find the area of the circle. Round to the nearest 10th.



Answers

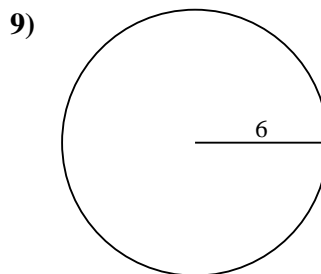
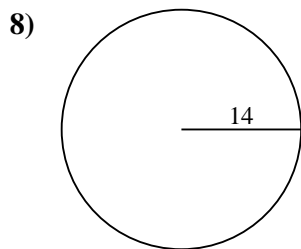
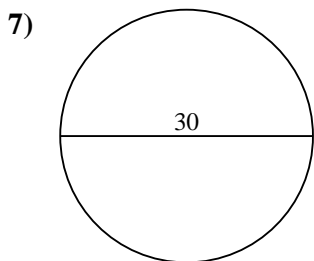
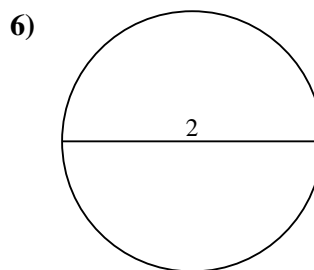
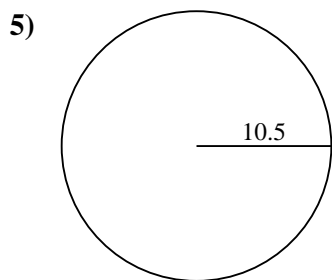
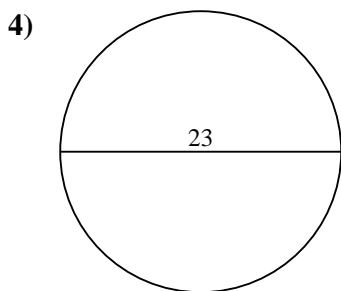
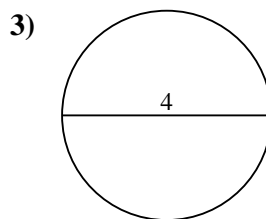
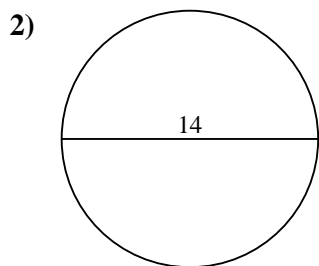
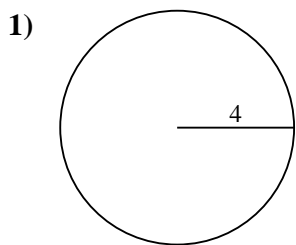
- 1. 50.3
- 2. 153.9
- 3. 12.6
- 4. 415.5
- 5. 346.4
- 6. 3.1
- 7. 706.9
- 8. 615.8
- 9. 113.1
- 10. 490.9



Find the area of the circle. Round to the nearest 10th.

|       |       |       |      |       |
|-------|-------|-------|------|-------|
| 706.9 | 615.8 | 12.6  | 3.1  | 415.5 |
| 346.4 | 153.9 | 113.1 | 50.3 |       |

Answers



- 1. \_\_\_\_\_
- 2. \_\_\_\_\_
- 3. \_\_\_\_\_
- 4. \_\_\_\_\_
- 5. \_\_\_\_\_
- 6. \_\_\_\_\_
- 7. \_\_\_\_\_
- 8. \_\_\_\_\_
- 9. \_\_\_\_\_