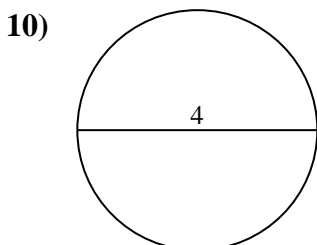
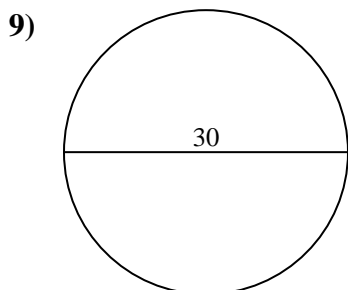
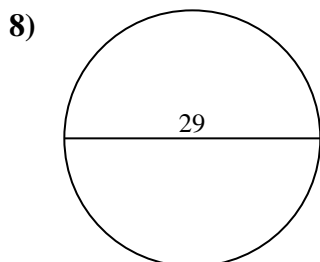
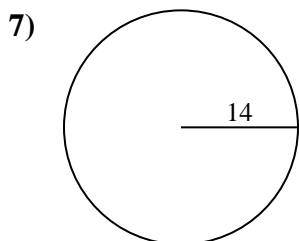
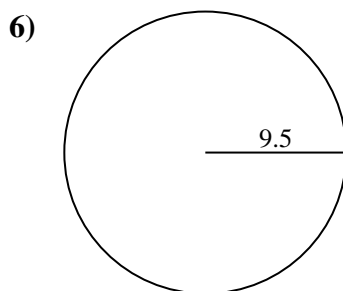
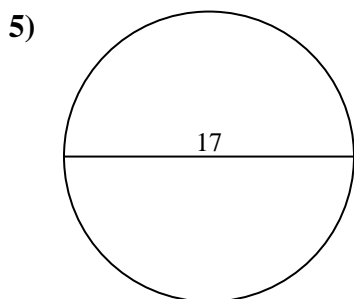
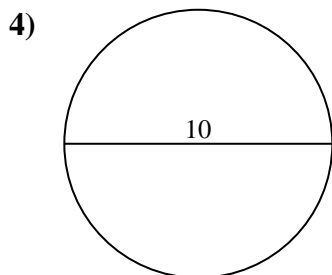
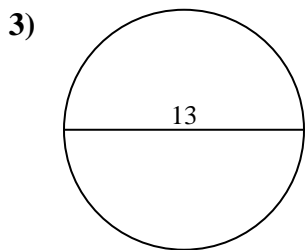
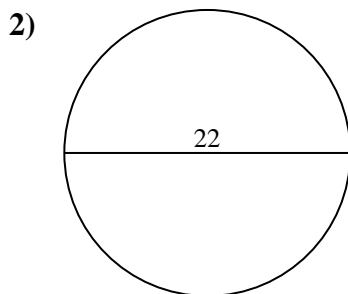
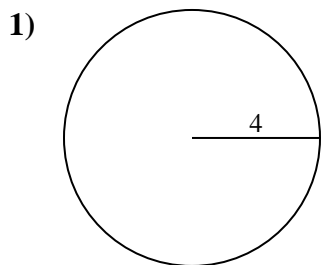




Find the area of the circle. Round to the nearest 10th.

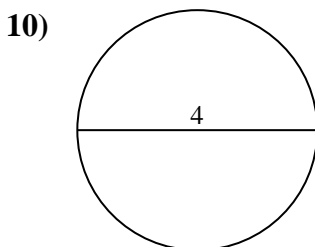
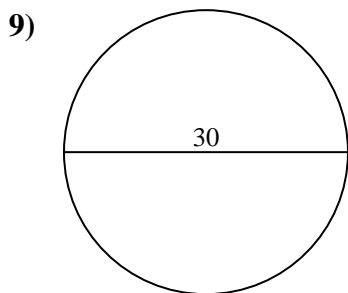
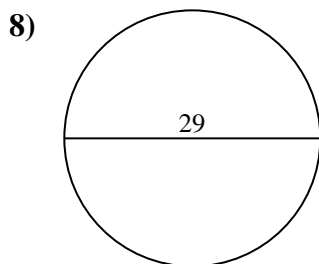
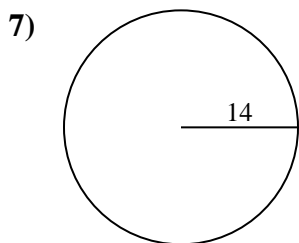
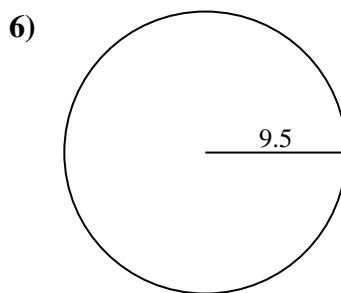
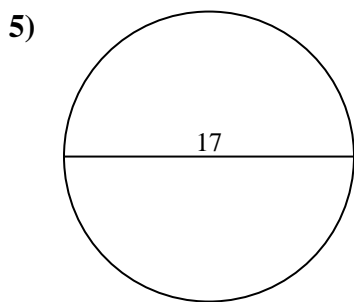
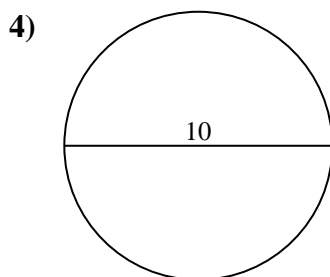
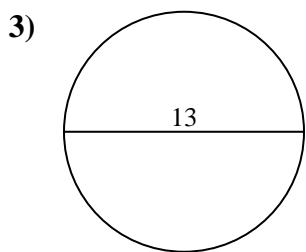
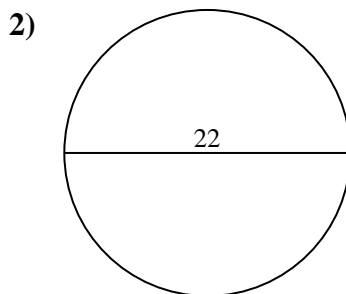
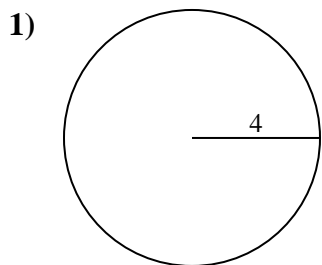
Answers



- 1. \_\_\_\_\_
- 2. \_\_\_\_\_
- 3. \_\_\_\_\_
- 4. \_\_\_\_\_
- 5. \_\_\_\_\_
- 6. \_\_\_\_\_
- 7. \_\_\_\_\_
- 8. \_\_\_\_\_
- 9. \_\_\_\_\_
- 10. \_\_\_\_\_



Find the area of the circle. Round to the nearest 10th.



Answers

- 1. 50.3
- 2. 380.1
- 3. 132.7
- 4. 78.5
- 5. 227
- 6. 283.5
- 7. 615.8
- 8. 660.5
- 9. 706.9
- 10. 12.6



Find the area of the circle. Round to the nearest 10th.

|       |       |       |       |       |
|-------|-------|-------|-------|-------|
| 78.5  | 227   | 660.5 | 615.8 | 380.1 |
| 283.5 | 132.7 | 50.3  | 706.9 |       |

Answers

1. \_\_\_\_\_
2. \_\_\_\_\_
3. \_\_\_\_\_
4. \_\_\_\_\_
5. \_\_\_\_\_
6. \_\_\_\_\_
7. \_\_\_\_\_
8. \_\_\_\_\_
9. \_\_\_\_\_

