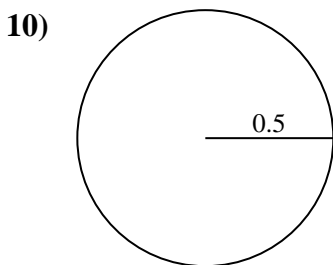
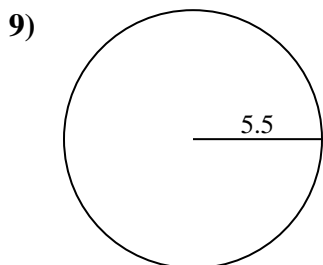
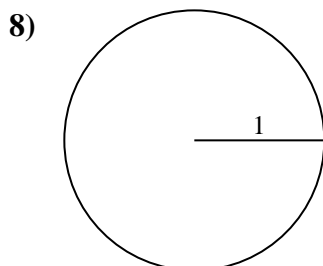
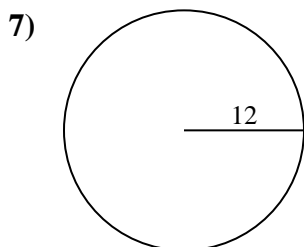
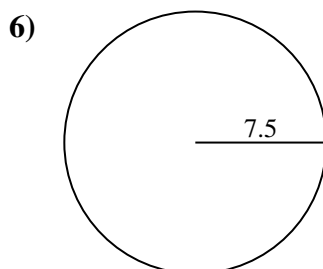
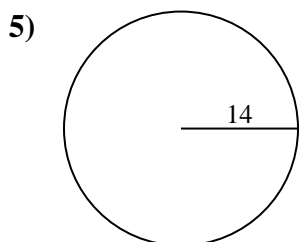
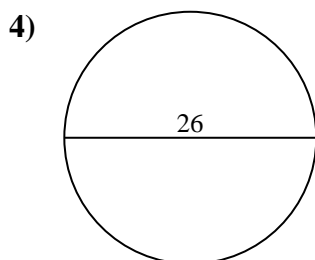
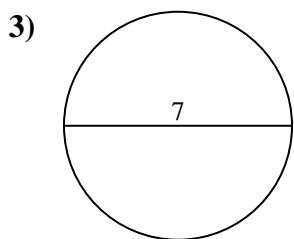
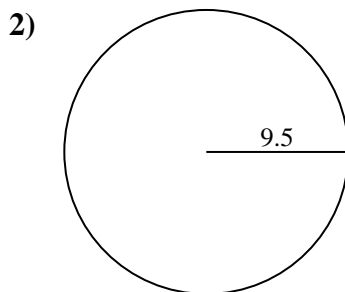
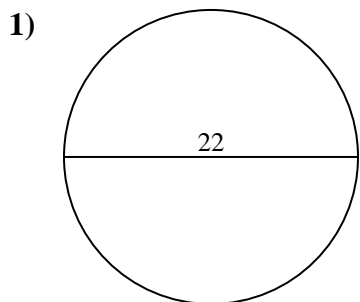




Find the area of the circle. Round to the nearest 10th.

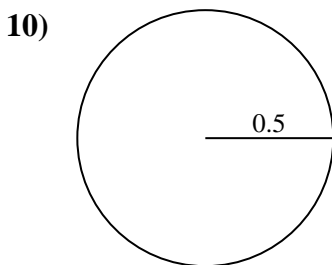
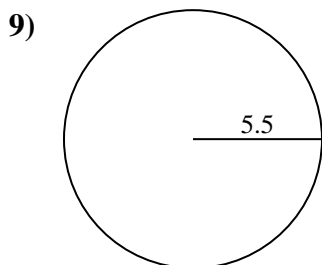
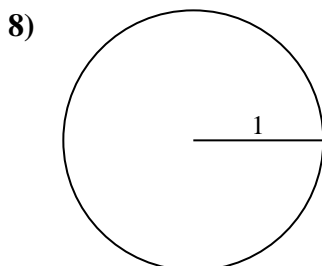
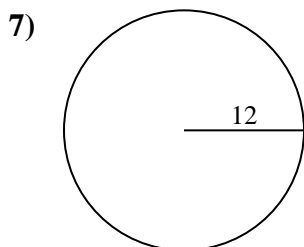
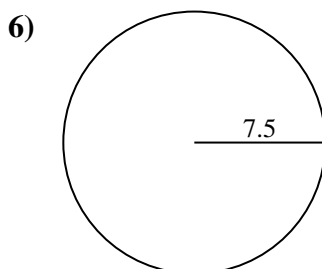
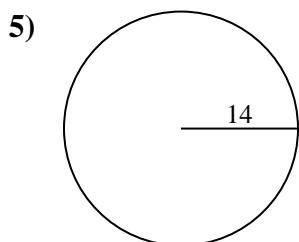
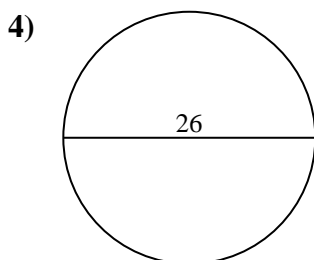
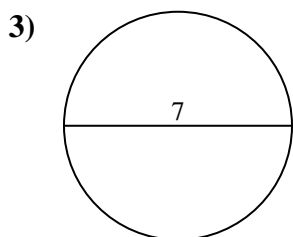
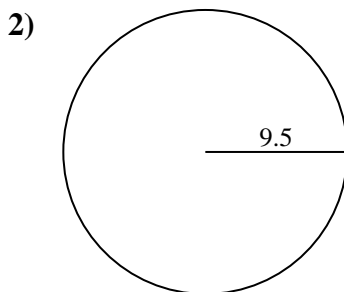
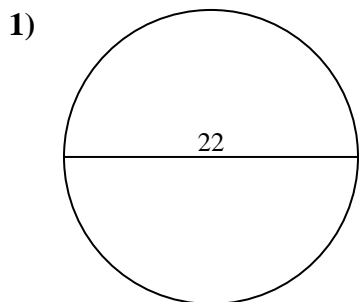
Answers



- 1. _____
- 2. _____
- 3. _____
- 4. _____
- 5. _____
- 6. _____
- 7. _____
- 8. _____
- 9. _____
- 10. _____



Find the area of the circle. Round to the nearest 10th.



Answers

- 1. 380.1
- 2. 283.5
- 3. 38.5
- 4. 530.9
- 5. 615.8
- 6. 176.7
- 7. 452.4
- 8. 3.1
- 9. 95
- 10. 0.8



Find the area of the circle. Round to the nearest 10th.

176.7	38.5	530.9	283.5	95
615.8	3.1	452.4	380.1	

Answers

1. _____
2. _____
3. _____
4. _____
5. _____
6. _____
7. _____
8. _____
9. _____

