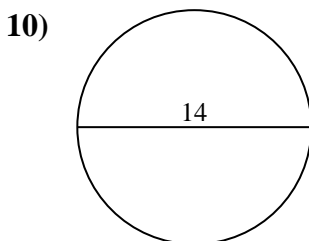
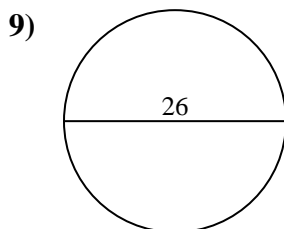
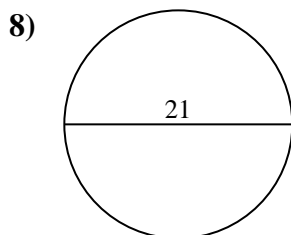
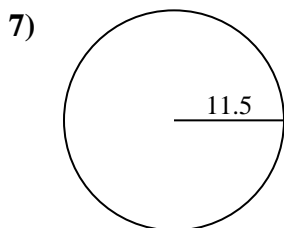
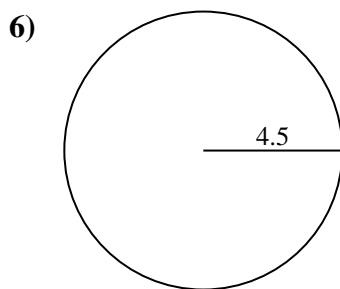
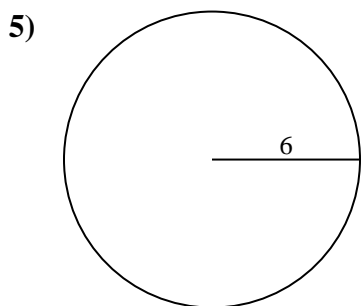
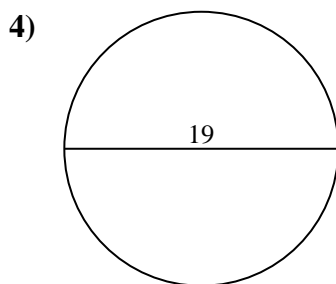
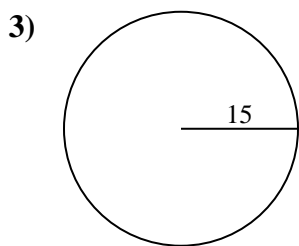
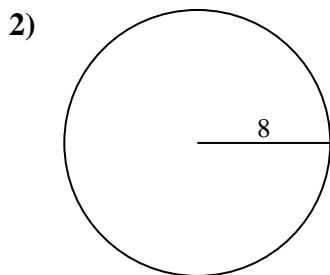
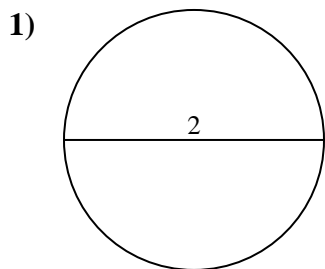




Find the area of the circle. Round to the nearest 10th.

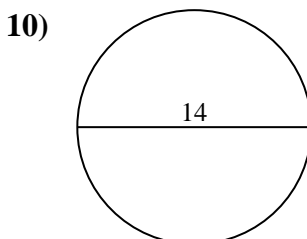
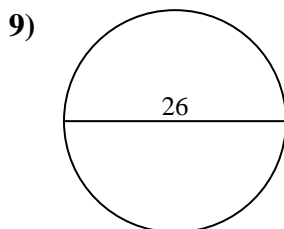
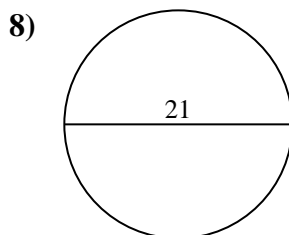
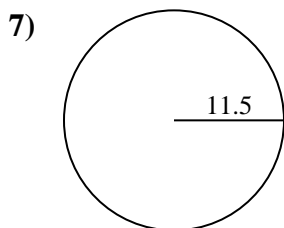
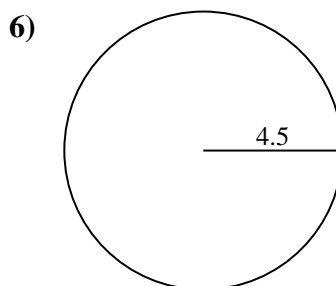
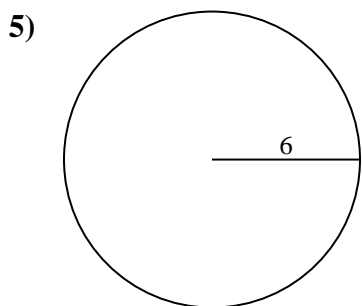
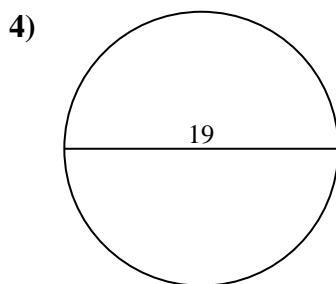
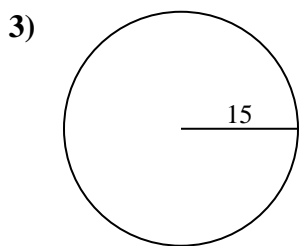
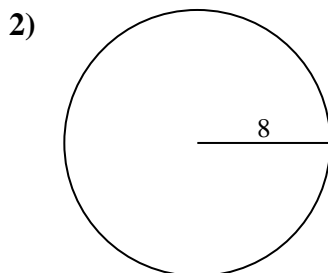
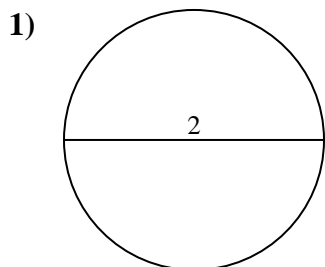
Answers



- 1. _____
- 2. _____
- 3. _____
- 4. _____
- 5. _____
- 6. _____
- 7. _____
- 8. _____
- 9. _____
- 10. _____



Find the area of the circle. Round to the nearest 10th.



Answers

- 1. 3.1
- 2. 201.1
- 3. 706.9
- 4. 283.5
- 5. 113.1
- 6. 63.6
- 7. 415.5
- 8. 346.4
- 9. 530.9
- 10. 153.9



Find the area of the circle. Round to the nearest 10th.

201.1	3.1	283.5	346.4	63.6
706.9	113.1	530.9	415.5	

Answers

1. _____
2. _____
3. _____
4. _____
5. _____
6. _____
7. _____
8. _____
9. _____

