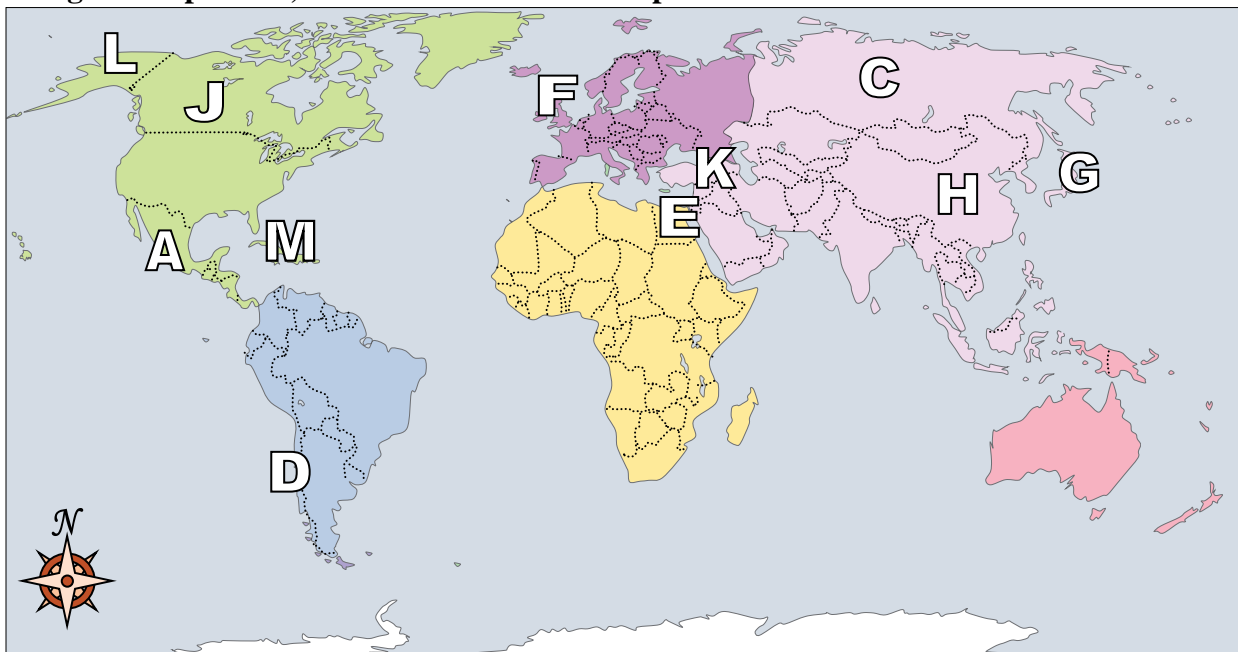




Using the map below, determine which letter represents each location.



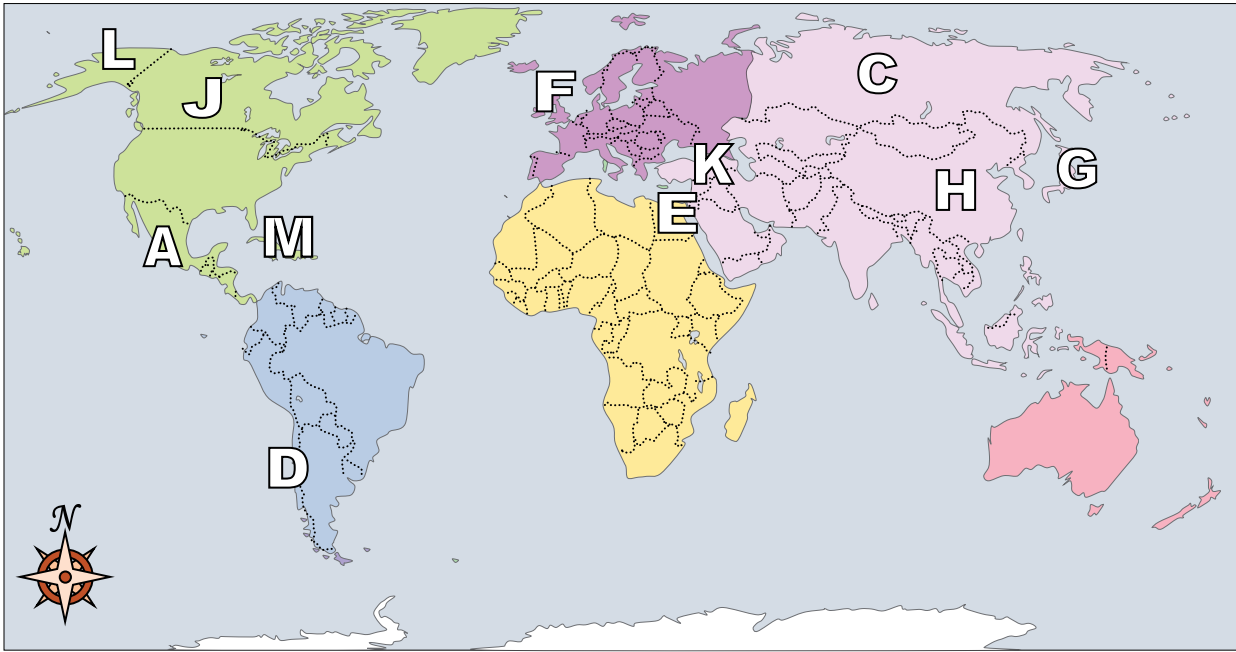
**Answers**

1. \_\_\_\_\_
2. \_\_\_\_\_
3. \_\_\_\_\_
4. \_\_\_\_\_
5. \_\_\_\_\_
6. \_\_\_\_\_
7. \_\_\_\_\_
8. \_\_\_\_\_
9. \_\_\_\_\_
10. \_\_\_\_\_
11. \_\_\_\_\_
12. \_\_\_\_\_
13. \_\_\_\_\_
14. \_\_\_\_\_
15. \_\_\_\_\_
16. \_\_\_\_\_
17. \_\_\_\_\_

- 1) Iraq \_\_\_\_\_
- 2) Canada \_\_\_\_\_
- 3) Mexico \_\_\_\_\_
- 4) Chile \_\_\_\_\_
- 5) Russia \_\_\_\_\_
- 6) Egypt \_\_\_\_\_
- 7) Alaska (State) \_\_\_\_\_
- 8) Cuba \_\_\_\_\_
- 9) United Kingdom \_\_\_\_\_
- 10) Japan \_\_\_\_\_
- 11) Britain \_\_\_\_\_
- 12) China \_\_\_\_\_
- 13) Which country is the largest in Asia?  
 A. Russia      B. Canada      C. China      D. Egypt
- 14) If you wanted to see pyramids where should you go?  
 A. Egypt      B. Mexico      C. Japan      D. France
- 15) Which country touches the USA's northern border?  
 A. China      B. Japan      C. Canada      D. Mexico
- 16) Which country attacked the United State's base at Pearl Harbor during World War 2?  
 A. Britain      B. Japan      C. France      D. Egypt
- 17) The state of Alaska is touching which country?  
 A. Russia      B. China      C. Canada      D. Egypt



Using the map below, determine which letter represents each location.



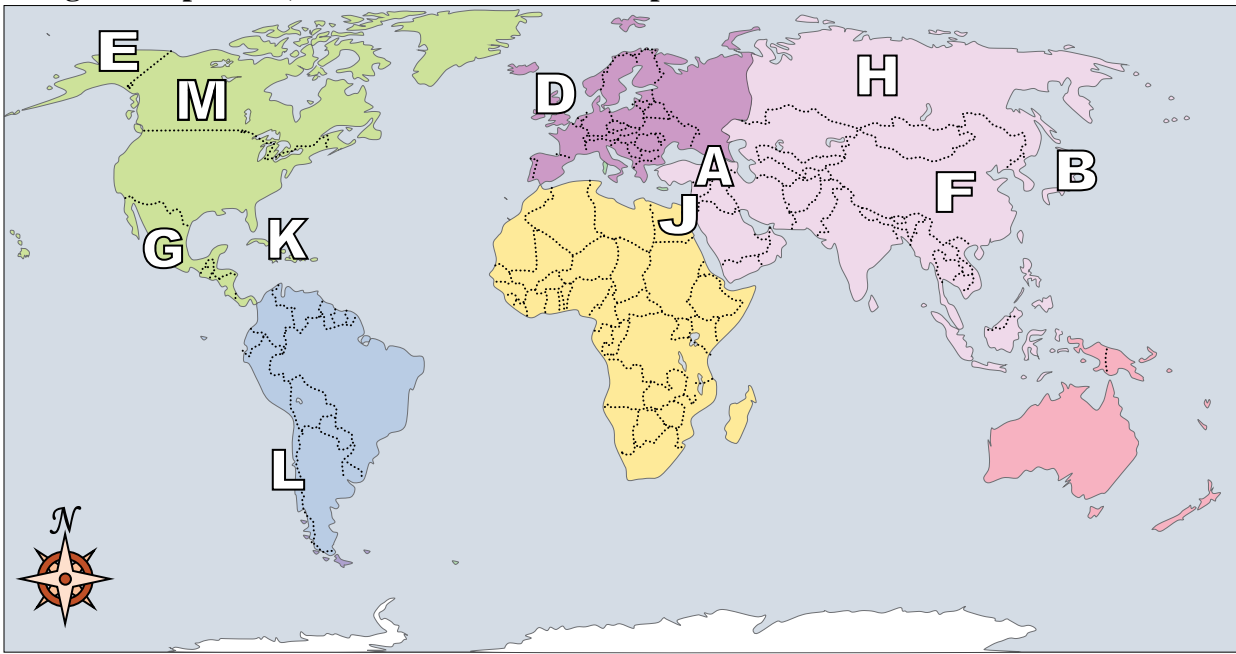
**Answers**

- 1) Iraq   K
- 2) Canada   J
- 3) Mexico   A
- 4) Chile   D
- 5) Russia   C
- 6) Egypt   E
- 7) Alaska (State)   L
- 8) Cuba   M
- 9) United Kingdom   F
- 10) Japan   G
- 11) Britain   B
- 12) China   H
- 13) Which country is the largest in Asia?  
A. Russia            B. Canada            C. China            D. Egypt
- 14) If you wanted to see pyramids where should you go?  
A. Egypt            B. Mexico            C. Japan            D. France
- 15) Which country touches the USA's northern border?  
A. China            B. Japan            C. Canada            D. Mexico
- 16) Which country attacked the United State's base at Pearl Harbor during World War 2?  
A. Britain            B. Japan            C. France            D. Egypt
- 17) The state of Alaska is touching which country?  
A. Russia            B. China            C. Canada            D. Egypt

- 1.   K
- 2.   J
- 3.   A
- 4.   D
- 5.   C
- 6.   E
- 7.   L
- 8.   M
- 9.   F
- 10.   G
- 11.   B
- 12.   H
- 13.   A
- 14.   A
- 15.   C
- 16.   B
- 17.   C



Using the map below, determine which letter represents each location.



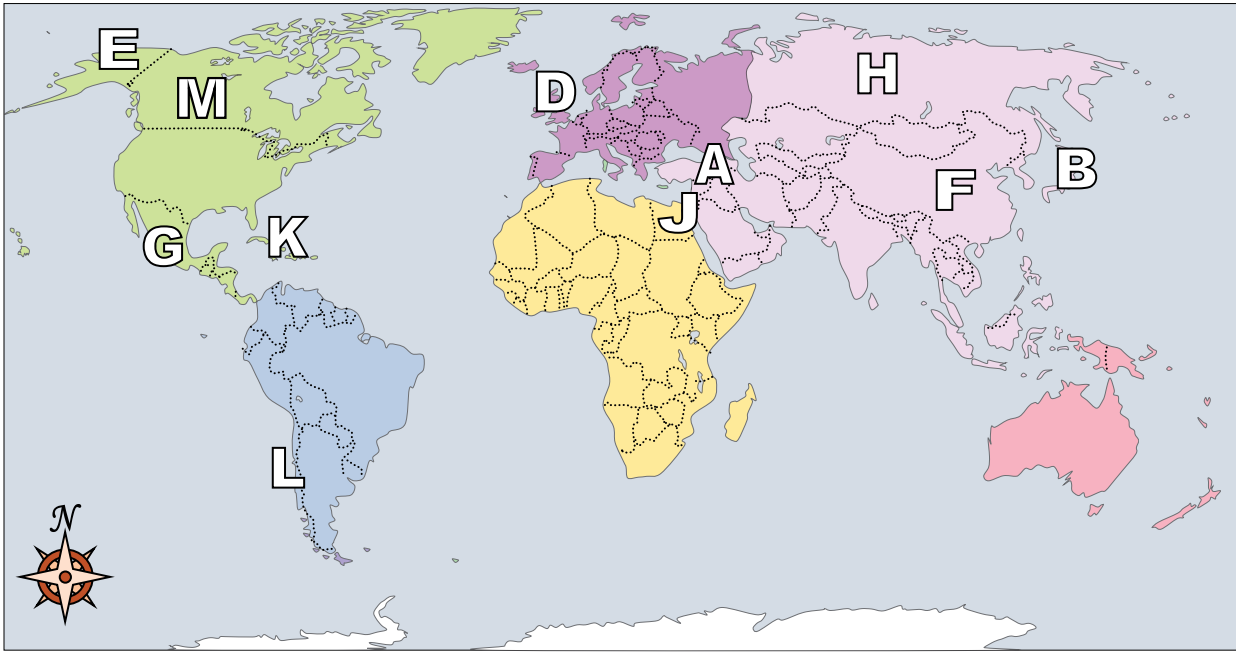
**Answers**

1. \_\_\_\_\_
2. \_\_\_\_\_
3. \_\_\_\_\_
4. \_\_\_\_\_
5. \_\_\_\_\_
6. \_\_\_\_\_
7. \_\_\_\_\_
8. \_\_\_\_\_
9. \_\_\_\_\_
10. \_\_\_\_\_
11. \_\_\_\_\_
12. \_\_\_\_\_
13. \_\_\_\_\_
14. \_\_\_\_\_
15. \_\_\_\_\_
16. \_\_\_\_\_
17. \_\_\_\_\_

- 1) China \_\_\_\_\_
- 2) United Kingdom \_\_\_\_\_
- 3) Cuba \_\_\_\_\_
- 4) Britain \_\_\_\_\_
- 5) Russia \_\_\_\_\_
- 6) Iraq \_\_\_\_\_
- 7) Mexico \_\_\_\_\_
- 8) Canada \_\_\_\_\_
- 9) Chile \_\_\_\_\_
- 10) Japan \_\_\_\_\_
- 11) Alaska (State) \_\_\_\_\_
- 12) Egypt \_\_\_\_\_
- 13) Which country is the largest in Asia?  
 A. Russia      B. Britain      C. France      D. Canada
- 14) Which country touches the USA's northern border?  
 A. Japan      B. Canada      C. Mexico      D. Britain
- 15) If you wanted to see pyramids where should you go?  
 A. Egypt      B. France      C. Canada      D. Mexico
- 16) Which country attacked the United State's base at Pearl Harbor during World War 2?  
 A. Japan      B. Canada      C. Mexico      D. Egypt
- 17) Which country is closest to the state of Florida?  
 A. Cuba      B. Mexico      C. Britain      D. Egypt



Using the map below, determine which letter represents each location.



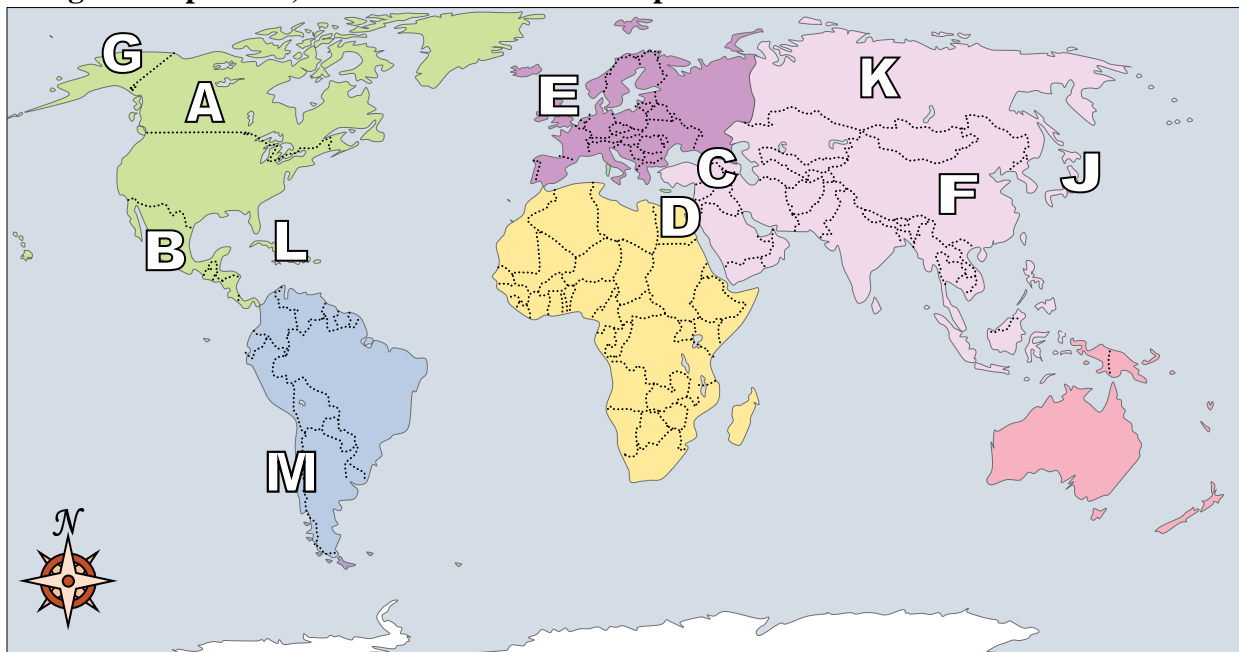
**Answers**

- 1.   **F**
- 2.   **D**
- 3.   **K**
- 4.   **C**
- 5.   **H**
- 6.   **A**
- 7.   **G**
- 8.   **M**
- 9.   **L**
- 10.   **B**
- 11.   **E**
- 12.   **J**
- 13.   **A**
- 14.   **B**
- 15.   **A**
- 16.   **A**
- 17.   **A**

- 1) China   **F**
- 2) United Kingdom   **D**
- 3) Cuba   **K**
- 4) Britain   **C**
- 5) Russia   **H**
- 6) Iraq   **A**
- 7) Mexico   **G**
- 8) Canada   **M**
- 9) Chile   **L**
- 10) Japan   **B**
- 11) Alaska (State)   **E**
- 12) Egypt   **J**
- 13) Which country is the largest in Asia?  
A. Russia            B. Britain            C. France            D. Canada
- 14) Which country touches the USA's northern border?  
A. Japan            B. Canada            C. Mexico            D. Britain
- 15) If you wanted to see pyramids where should you go?  
A. Egypt            B. France            C. Canada            D. Mexico
- 16) Which country attacked the United State's base at Pearl Harbor during World War 2?  
A. Japan            B. Canada            C. Mexico            D. Egypt
- 17) Which country is closest to the state of Florida?  
A. Cuba            B. Mexico            C. Britain            D. Egypt



Using the map below, determine which letter represents each location.



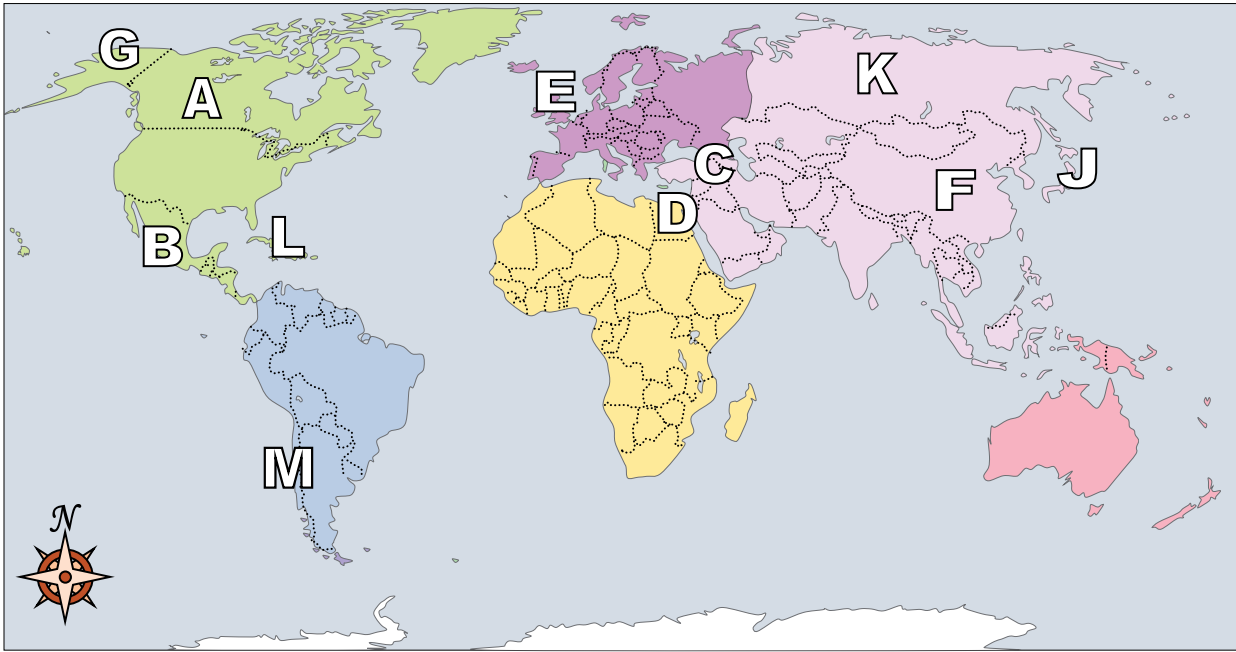
**Answers**

1. \_\_\_\_\_
2. \_\_\_\_\_
3. \_\_\_\_\_
4. \_\_\_\_\_
5. \_\_\_\_\_
6. \_\_\_\_\_
7. \_\_\_\_\_
8. \_\_\_\_\_
9. \_\_\_\_\_
10. \_\_\_\_\_
11. \_\_\_\_\_
12. \_\_\_\_\_
13. \_\_\_\_\_
14. \_\_\_\_\_
15. \_\_\_\_\_
16. \_\_\_\_\_
17. \_\_\_\_\_

- 1) Russia \_\_\_\_\_
- 2) Japan \_\_\_\_\_
- 3) Alaska (State) \_\_\_\_\_
- 4) Chile \_\_\_\_\_
- 5) China \_\_\_\_\_
- 6) Britain \_\_\_\_\_
- 7) Iraq \_\_\_\_\_
- 8) Canada \_\_\_\_\_
- 9) Egypt \_\_\_\_\_
- 10) Mexico \_\_\_\_\_
- 11) Cuba \_\_\_\_\_
- 12) United Kingdom \_\_\_\_\_
- 13) Alaska is \_\_\_\_\_ of the rest of the United States?  
A. east                      B. west                      C. south                      D. north
- 14) Which country touches the USA's southern border?  
A. Mexico                      B. Britain                      C. Canada                      D. Egypt
- 15) Which is not part of North America?  
A. Japan                      B. The United States                      C. Alaska                      D. Mexico
- 16) Which country is closest to the state of Florida?  
A. Egypt                      B. Cuba                      C. Japan                      D. Mexico
- 17) The state of Alaska is touching which country?  
A. Canada                      B. France                      C. Britain                      D. China



Using the map below, determine which letter represents each location.



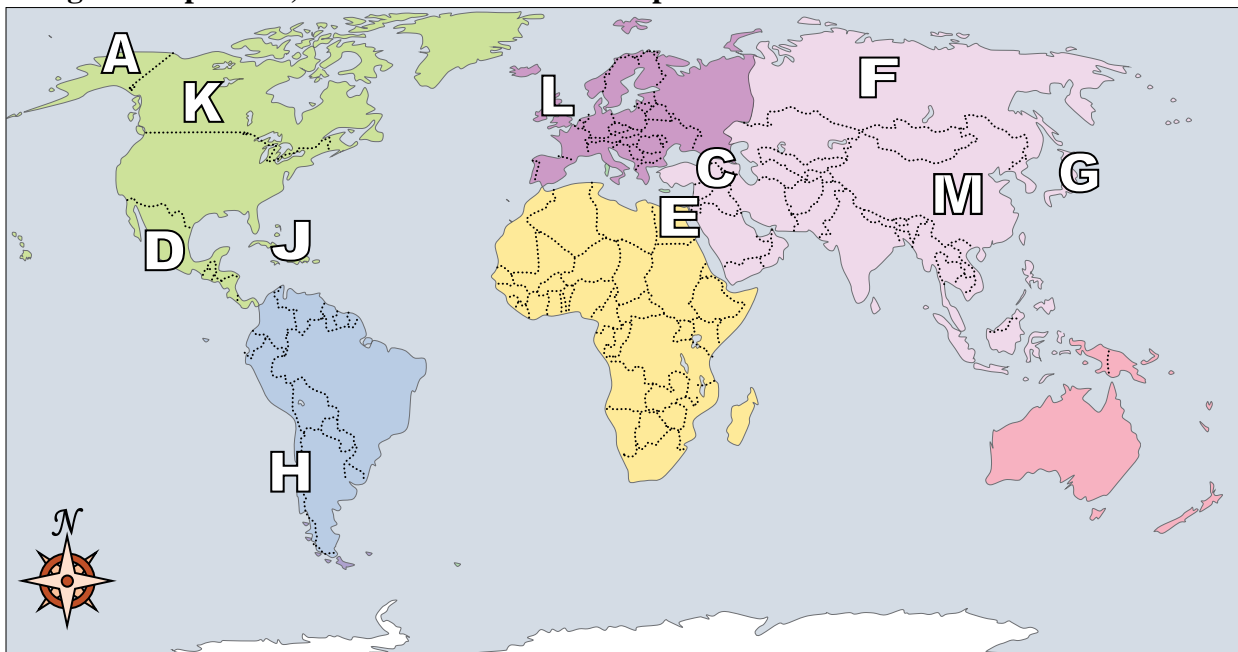
**Answers**

- 1) Russia   K
- 2) Japan   J
- 3) Alaska (State)   G
- 4) Chile   M
- 5) China   F
- 6) Britain   H
- 7) Iraq   C
- 8) Canada   A
- 9) Egypt   D
- 10) Mexico   B
- 11) Cuba   L
- 12) United Kingdom   E
- 13) Alaska is \_\_\_\_\_ of the rest of the United States?  
A. east                      B. west                      C. south                      D. north
- 14) Which country touches the USA's southern border?  
A. Mexico                      B. Britain                      C. Canada                      D. Egypt
- 15) Which is not part of North America?  
A. Japan                      B. The United States      C. Alaska                      D. Mexico
- 16) Which country is closest to the state of Florida?  
A. Egypt                      B. Cuba                      C. Japan                      D. Mexico
- 17) The state of Alaska is touching which country?  
A. Canada                      B. France                      C. Britain                      D. China

- 1.   K
- 2.   J
- 3.   G
- 4.   M
- 5.   F
- 6.   H
- 7.   C
- 8.   A
- 9.   D
- 10.   B
- 11.   L
- 12.   E
- 13.   D
- 14.   A
- 15.   A
- 16.   B
- 17.   A



Using the map below, determine which letter represents each location.



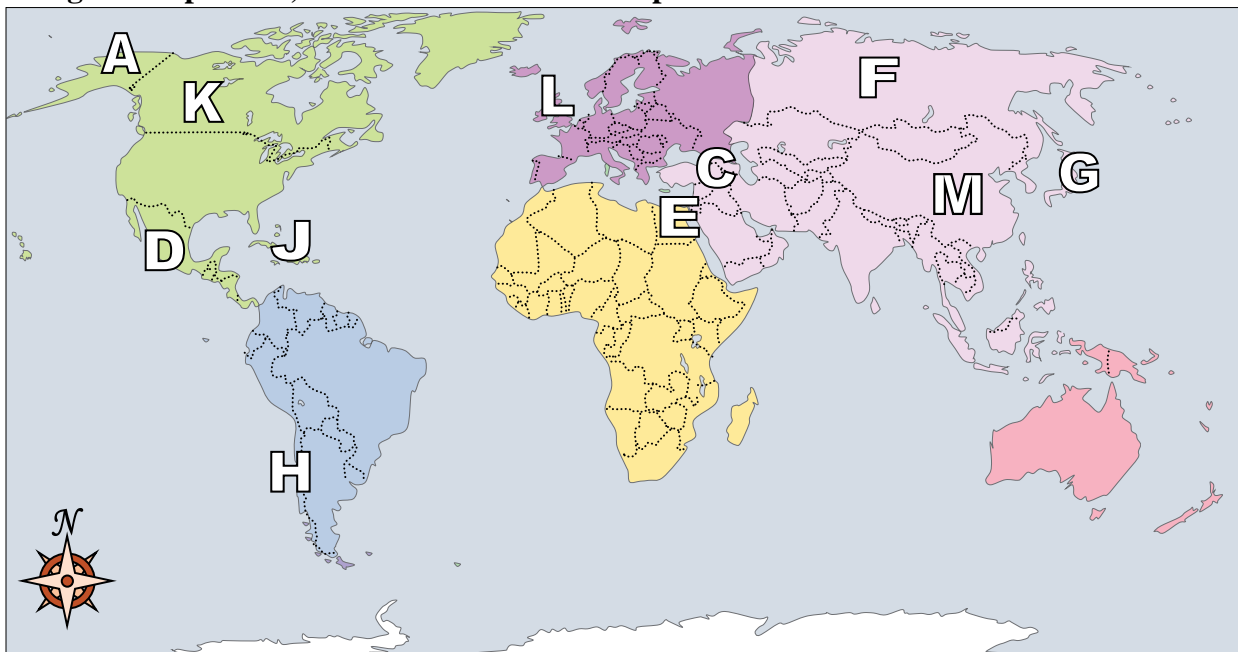
**Answers**

1. \_\_\_\_\_
2. \_\_\_\_\_
3. \_\_\_\_\_
4. \_\_\_\_\_
5. \_\_\_\_\_
6. \_\_\_\_\_
7. \_\_\_\_\_
8. \_\_\_\_\_
9. \_\_\_\_\_
10. \_\_\_\_\_
11. \_\_\_\_\_
12. \_\_\_\_\_
13. \_\_\_\_\_
14. \_\_\_\_\_
15. \_\_\_\_\_
16. \_\_\_\_\_
17. \_\_\_\_\_

- 1) Japan \_\_\_\_\_
- 2) Iraq \_\_\_\_\_
- 3) Chile \_\_\_\_\_
- 4) Alaska (State) \_\_\_\_\_
- 5) Mexico \_\_\_\_\_
- 6) Canada \_\_\_\_\_
- 7) Egypt \_\_\_\_\_
- 8) Britain \_\_\_\_\_
- 9) Russia \_\_\_\_\_
- 10) China \_\_\_\_\_
- 11) United Kingdom \_\_\_\_\_
- 12) Cuba \_\_\_\_\_
- 13) Alaska is \_\_\_\_\_ of the rest of the United States?  
A. south      B. west      C. north      D. east
- 14) Which country touches the USA's northern border?  
A. Japan      B. Mexico      C. France      D. Canada
- 15) If you wanted to see pyramids where should you go?  
A. China      B. Mexico      C. Egypt      D. France
- 16) The state of Alaska is touching which country?  
A. Russia      B. Canada      C. Japan      D. Britain
- 17) Which country is the largest in Asia?  
A. Egypt      B. Russia      C. Mexico      D. Britain



Using the map below, determine which letter represents each location.



**Answers**

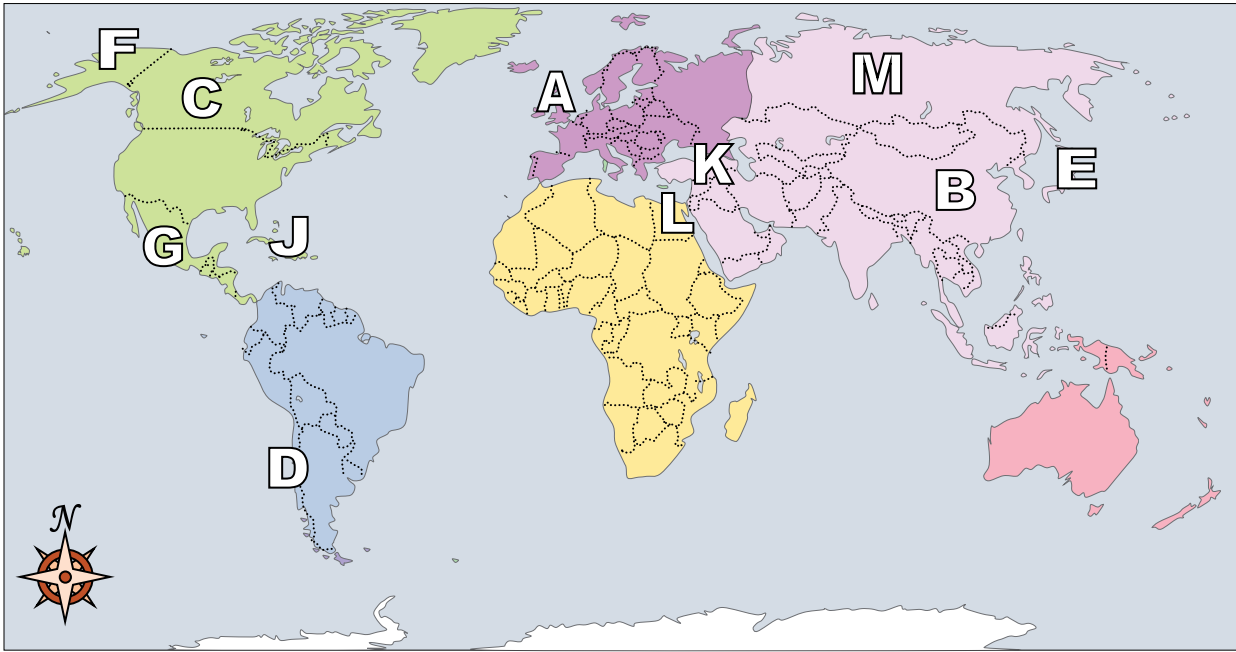
- 1.   **G**
- 2.   **C**
- 3.   **H**
- 4.   **A**
- 5.   **D**
- 6.   **K**
- 7.   **E**
- 8.   **B**
- 9.   **F**
- 10.   **M**
- 11.   **L**
- 12.   **J**
- 13.   **C**
- 14.   **D**
- 15.   **C**
- 16.   **B**
- 17.   **B**

- 1) Japan   **G**
- 2) Iraq   **C**
- 3) Chile   **H**
- 4) Alaska (State)   **A**
- 5) Mexico   **D**
- 6) Canada   **K**
- 7) Egypt   **E**
- 8) Britain   **B**
- 9) Russia   **F**
- 10) China   **M**
- 11) United Kingdom   **L**
- 12) Cuba   **J**
- 13) Alaska is \_\_\_\_\_ of the rest of the United States?  
A. south                      B. west                      C. north                      D. east
- 14) Which country touches the USA's northern border?  
A. Japan                      B. Mexico                      C. France                      D. Canada
- 15) If you wanted to see pyramids where should you go?  
A. China                      B. Mexico                      C. Egypt                      D. France
- 16) The state of Alaska is touching which country?  
A. Russia                      B. Canada                      C. Japan                      D. Britain
- 17) Which country is the largest in Asia?  
A. Egypt                      B. Russia                      C. Mexico                      D. Britain





Using the map below, determine which letter represents each location.



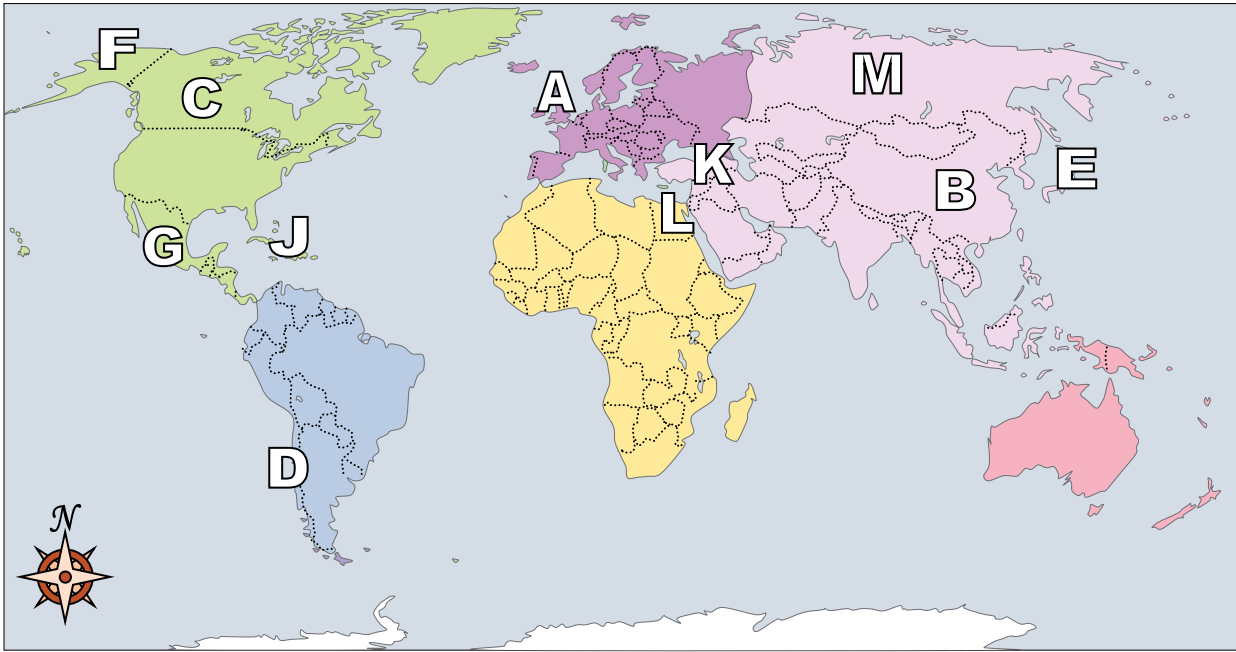
**Answers**

1. \_\_\_\_\_
2. \_\_\_\_\_
3. \_\_\_\_\_
4. \_\_\_\_\_
5. \_\_\_\_\_
6. \_\_\_\_\_
7. \_\_\_\_\_
8. \_\_\_\_\_
9. \_\_\_\_\_
10. \_\_\_\_\_
11. \_\_\_\_\_
12. \_\_\_\_\_
13. \_\_\_\_\_
14. \_\_\_\_\_
15. \_\_\_\_\_
16. \_\_\_\_\_
17. \_\_\_\_\_

- 1) Britain \_\_\_\_\_
- 2) Russia \_\_\_\_\_
- 3) Egypt \_\_\_\_\_
- 4) Mexico \_\_\_\_\_
- 5) Alaska (State) \_\_\_\_\_
- 6) Iraq \_\_\_\_\_
- 7) Chile \_\_\_\_\_
- 8) China \_\_\_\_\_
- 9) Cuba \_\_\_\_\_
- 10) Japan \_\_\_\_\_
- 11) United Kingdom \_\_\_\_\_
- 12) Canada \_\_\_\_\_
- 13) Which country touches the USA's northern border?  
A. Mexico      B. France      C. Egypt      D. Canada
- 14) Which country is closest to the state of Florida?  
A. Japan      B. Russia      C. Cuba      D. Mexico
- 15) The state of Alaska is touching which country?  
A. Egypt      B. Russia      C. Canada      D. France
- 16) If you wanted to see pyramids where should you go?  
A. Britain      B. China      C. Egypt      D. Mexico
- 17) Which country is the largest in Asia?  
A. Egypt      B. Russia      C. France      D. Britain



Using the map below, determine which letter represents each location.



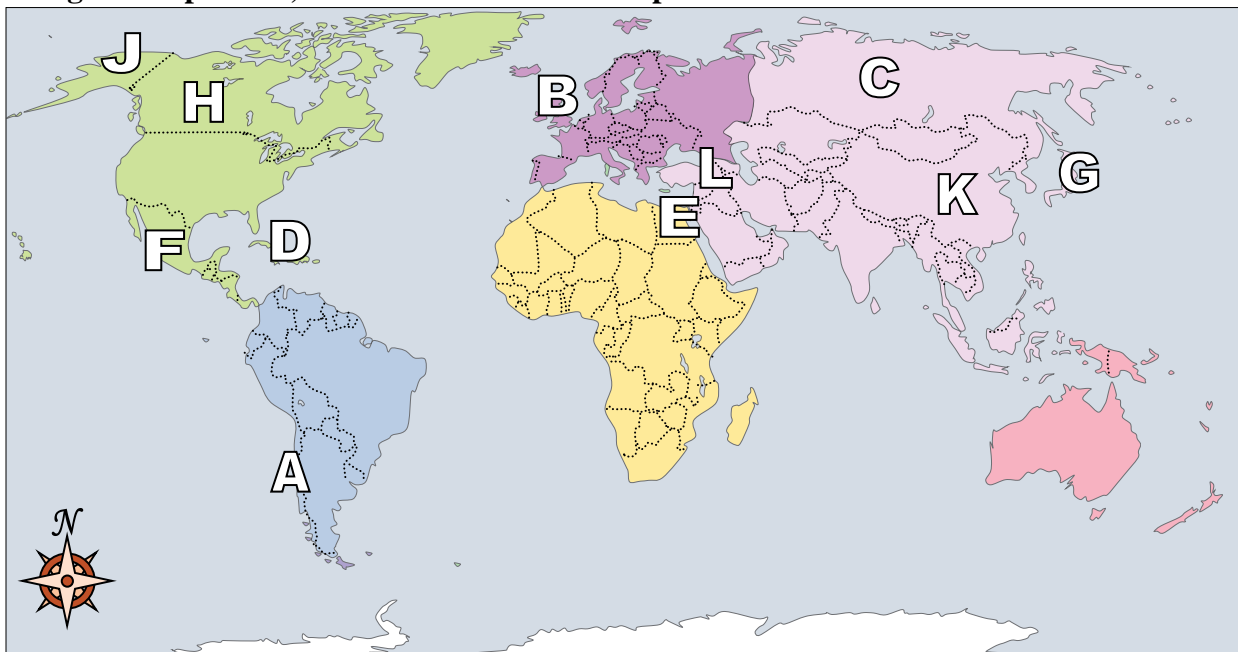
**Answers**

- 1.   **H**
- 2.   **M**
- 3.   **L**
- 4.   **G**
- 5.   **F**
- 6.   **K**
- 7.   **D**
- 8.   **B**
- 9.   **J**
- 10.   **E**
- 11.   **A**
- 12.   **C**
- 13.   **D**
- 14.   **C**
- 15.   **C**
- 16.   **C**
- 17.   **B**

- 1) Britain   **H**
- 2) Russia   **M**
- 3) Egypt   **L**
- 4) Mexico   **G**
- 5) Alaska (State)   **F**
- 6) Iraq   **K**
- 7) Chile   **D**
- 8) China   **B**
- 9) Cuba   **J**
- 10) Japan   **E**
- 11) United Kingdom   **A**
- 12) Canada   **C**
- 13) Which country touches the USA's northern border?  
A. Mexico            B. France            C. Egypt            D. Canada
- 14) Which country is closest to the state of Florida?  
A. Japan            B. Russia            C. Cuba            D. Mexico
- 15) The state of Alaska is touching which country?  
A. Egypt            B. Russia            C. Canada            D. France
- 16) If you wanted to see pyramids where should you go?  
A. Britain            B. China            C. Egypt            D. Mexico
- 17) Which country is the largest in Asia?  
A. Egypt            B. Russia            C. France            D. Britain



Using the map below, determine which letter represents each location.



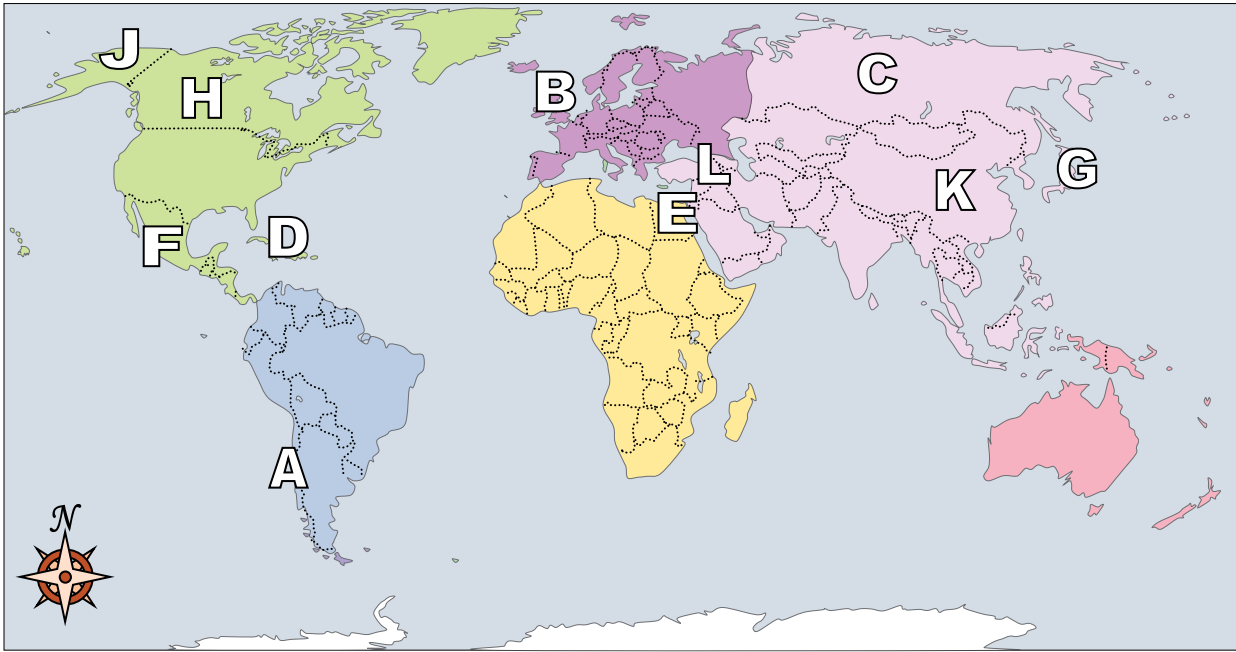
**Answers**

1. \_\_\_\_\_
2. \_\_\_\_\_
3. \_\_\_\_\_
4. \_\_\_\_\_
5. \_\_\_\_\_
6. \_\_\_\_\_
7. \_\_\_\_\_
8. \_\_\_\_\_
9. \_\_\_\_\_
10. \_\_\_\_\_
11. \_\_\_\_\_
12. \_\_\_\_\_
13. \_\_\_\_\_
14. \_\_\_\_\_
15. \_\_\_\_\_
16. \_\_\_\_\_
17. \_\_\_\_\_

- 1) Cuba \_\_\_\_\_
- 2) Britain \_\_\_\_\_
- 3) China \_\_\_\_\_
- 4) United Kingdom \_\_\_\_\_
- 5) Mexico \_\_\_\_\_
- 6) Canada \_\_\_\_\_
- 7) Russia \_\_\_\_\_
- 8) Alaska (State) \_\_\_\_\_
- 9) Japan \_\_\_\_\_
- 10) Chile \_\_\_\_\_
- 11) Egypt \_\_\_\_\_
- 12) Iraq \_\_\_\_\_
- 13) Which is not part of North America?  
 A. The United States    B. Alaska    C. Japan    D. Mexico
- 14) Which country attacked the United State's base at Pearl Harbor during World War 2?  
 A. Japan    B. France    C. Britain    D. China
- 15) The state of Alaska is touching which country?  
 A. China    B. Canada    C. Mexico    D. France
- 16) Alaska is \_\_\_\_\_ of the rest of the United States?  
 A. east    B. west    C. north    D. south
- 17) Which country is closest to the state of Florida?  
 A. Russia    B. Mexico    C. China    D. Cuba



Using the map below, determine which letter represents each location.



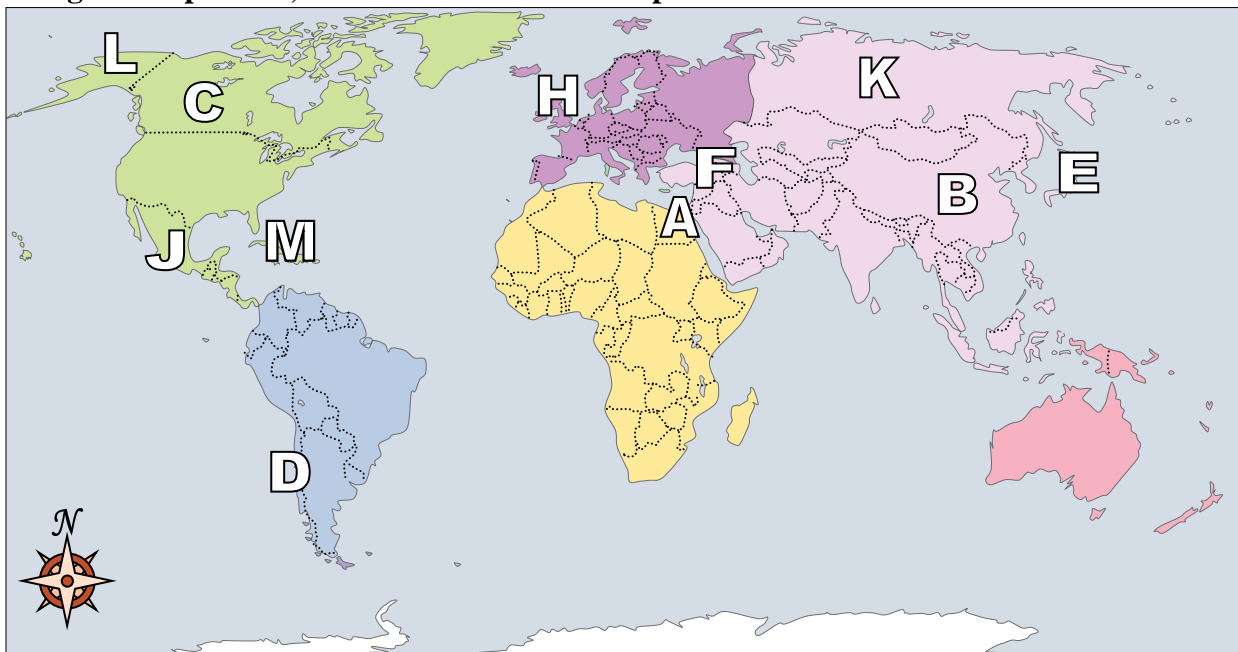
**Answers**

- 1.   **D**
- 2.   **M**
- 3.   **K**
- 4.   **B**
- 5.   **F**
- 6.   **H**
- 7.   **C**
- 8.   **J**
- 9.   **G**
- 10.   **A**
- 11.   **E**
- 12.   **L**
- 13.   **C**
- 14.   **A**
- 15.   **B**
- 16.   **C**
- 17.   **D**

- 1) Cuba   **D**
- 2) Britain   **M**
- 3) China   **K**
- 4) United Kingdom   **B**
- 5) Mexico   **F**
- 6) Canada   **H**
- 7) Russia   **C**
- 8) Alaska (State)   **J**
- 9) Japan   **G**
- 10) Chile   **A**
- 11) Egypt   **E**
- 12) Iraq   **L**
- 13) Which is not part of North America?  
A. The United States    B. Alaska    C. Japan    D. Mexico
- 14) Which country attacked the United State's base at Pearl Harbor during World War 2?  
A. Japan    B. France    C. Britain    D. China
- 15) The state of Alaska is touching which country?  
A. China    B. Canada    C. Mexico    D. France
- 16) Alaska is \_\_\_\_\_ of the rest of the United States?  
A. east    B. west    C. north    D. south
- 17) Which country is closest to the state of Florida?  
A. Russia    B. Mexico    C. China    D. Cuba



Using the map below, determine which letter represents each location.



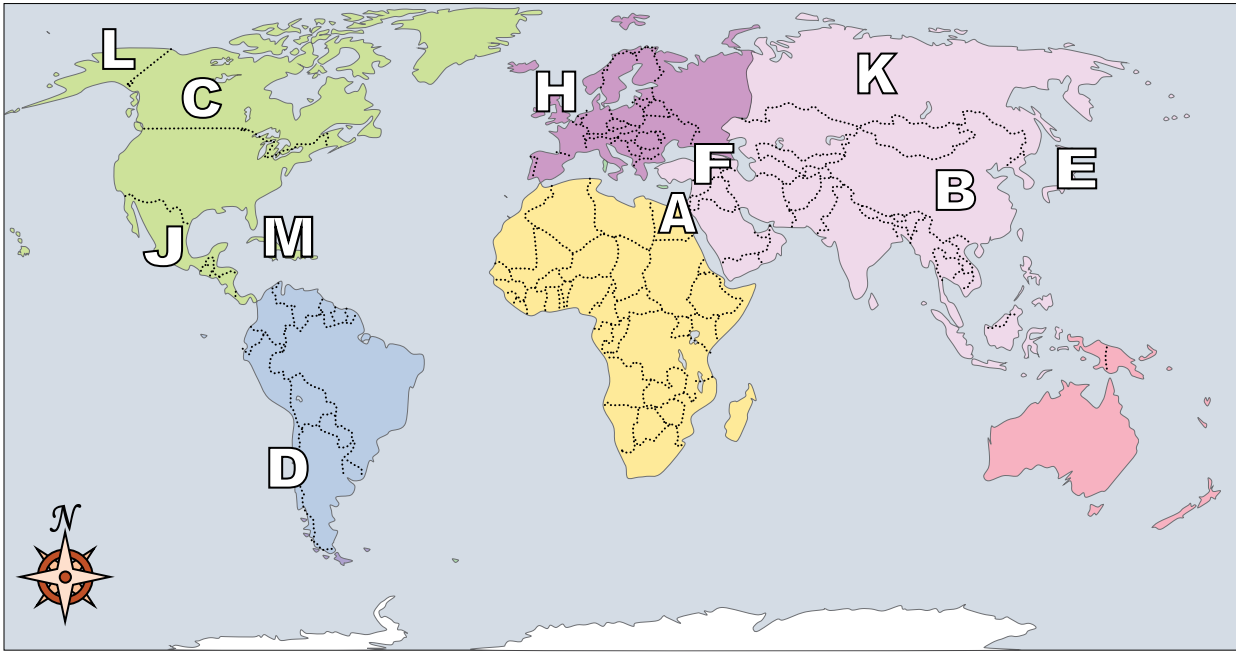
**Answers**

1. \_\_\_\_\_
2. \_\_\_\_\_
3. \_\_\_\_\_
4. \_\_\_\_\_
5. \_\_\_\_\_
6. \_\_\_\_\_
7. \_\_\_\_\_
8. \_\_\_\_\_
9. \_\_\_\_\_
10. \_\_\_\_\_
11. \_\_\_\_\_
12. \_\_\_\_\_
13. \_\_\_\_\_
14. \_\_\_\_\_
15. \_\_\_\_\_
16. \_\_\_\_\_
17. \_\_\_\_\_

- 1) Japan \_\_\_\_\_
- 2) Alaska (State) \_\_\_\_\_
- 3) Russia \_\_\_\_\_
- 4) United Kingdom \_\_\_\_\_
- 5) Iraq \_\_\_\_\_
- 6) Canada \_\_\_\_\_
- 7) China \_\_\_\_\_
- 8) Chile \_\_\_\_\_
- 9) Britain \_\_\_\_\_
- 10) Cuba \_\_\_\_\_
- 11) Mexico \_\_\_\_\_
- 12) Egypt \_\_\_\_\_
- 13) The state of Alaska is touching which country?  
 A. China                      B. Canada                      C. Japan                      D. Britain
- 14) Which country touches the USA's southern border?  
 A. Mexico                      B. France                      C. Japan                      D. Britain
- 15) Which country touches the USA's northern border?  
 A. Egypt                      B. Britain                      C. China                      D. Canada
- 16) Which country attacked the United State's base at Pearl Harbor during World War 2?  
 A. Britain                      B. Japan                      C. China                      D. Canada
- 17) Alaska is \_\_\_\_\_ of the rest of the United States?  
 A. west                      B. east                      C. south                      D. north



Using the map below, determine which letter represents each location.



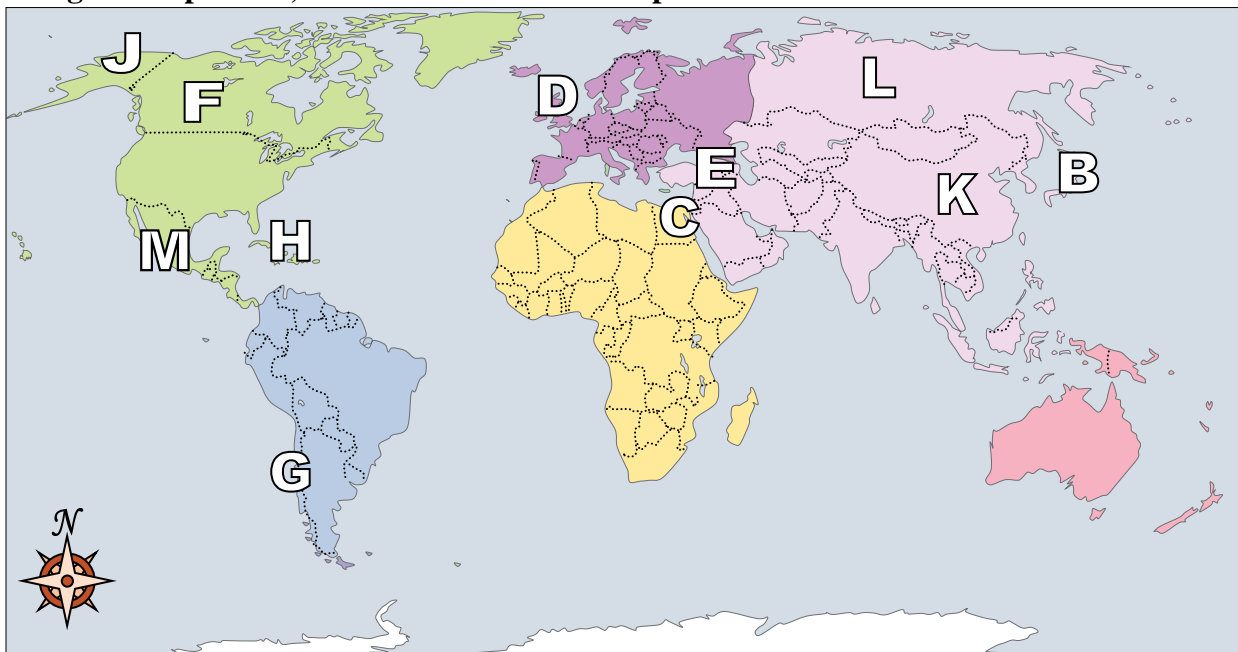
**Answers**

- 1) Japan  E
- 2) Alaska (State)  L
- 3) Russia  K
- 4) United Kingdom  H
- 5) Iraq  F
- 6) Canada  C
- 7) China  B
- 8) Chile  D
- 9) Britain  G
- 10) Cuba  M
- 11) Mexico  J
- 12) Egypt  A
- 13) The state of Alaska is touching which country?  
A. China                      B. Canada                      C. Japan                      D. Britain
- 14) Which country touches the USA's southern border?  
A. Mexico                      B. France                      C. Japan                      D. Britain
- 15) Which country touches the USA's northern border?  
A. Egypt                      B. Britain                      C. China                      D. Canada
- 16) Which country attacked the United State's base at Pearl Harbor during World War 2?  
A. Britain                      B. Japan                      C. China                      D. Canada
- 17) Alaska is \_\_\_\_\_ of the rest of the United States?  
A. west                      B. east                      C. south                      D. north

- 1.  E
- 2.  L
- 3.  K
- 4.  H
- 5.  F
- 6.  C
- 7.  B
- 8.  D
- 9.  G
- 10.  M
- 11.  J
- 12.  A
- 13.  B
- 14.  A
- 15.  D
- 16.  B
- 17.  D



Using the map below, determine which letter represents each location.



**Answers**

1. \_\_\_\_\_

2. \_\_\_\_\_

3. \_\_\_\_\_

4. \_\_\_\_\_

5. \_\_\_\_\_

6. \_\_\_\_\_

7. \_\_\_\_\_

8. \_\_\_\_\_

9. \_\_\_\_\_

10. \_\_\_\_\_

11. \_\_\_\_\_

12. \_\_\_\_\_

13. \_\_\_\_\_

14. \_\_\_\_\_

15. \_\_\_\_\_

16. \_\_\_\_\_

17. \_\_\_\_\_

1) United Kingdom \_\_\_\_\_

2) Russia \_\_\_\_\_

3) Egypt \_\_\_\_\_

4) Iraq \_\_\_\_\_

5) Alaska (State) \_\_\_\_\_

6) Cuba \_\_\_\_\_

7) Britain \_\_\_\_\_

8) Mexico \_\_\_\_\_

9) Chile \_\_\_\_\_

10) Canada \_\_\_\_\_

11) Japan \_\_\_\_\_

12) China \_\_\_\_\_

13) The state of Alaska is touching which country?

- A. Egypt
- B. China
- C. Japan
- D. Canada

14) Which country attacked the United State's base at Pearl Harbor during World War 2?

- A. China
- B. Mexico
- C. Japan
- D. Egypt

15) Which country touches the USA's northern border?

- A. France
- B. Canada
- C. Japan
- D. Britain

16) Which is not part of North America?

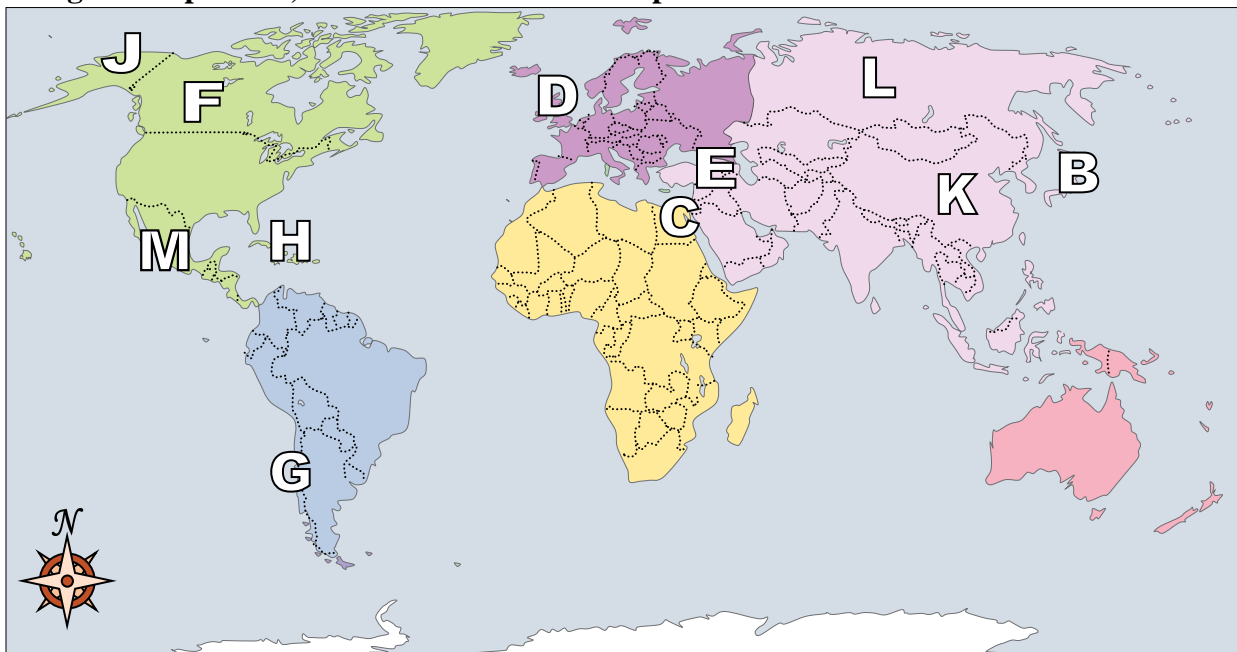
- A. Russia
- B. Mexico
- C. The United States
- D. Canada

17) If you wanted to see pyramids where should you go?

- A. Egypt
- B. Canada
- C. China
- D. Russia



Using the map below, determine which letter represents each location.



**Answers**

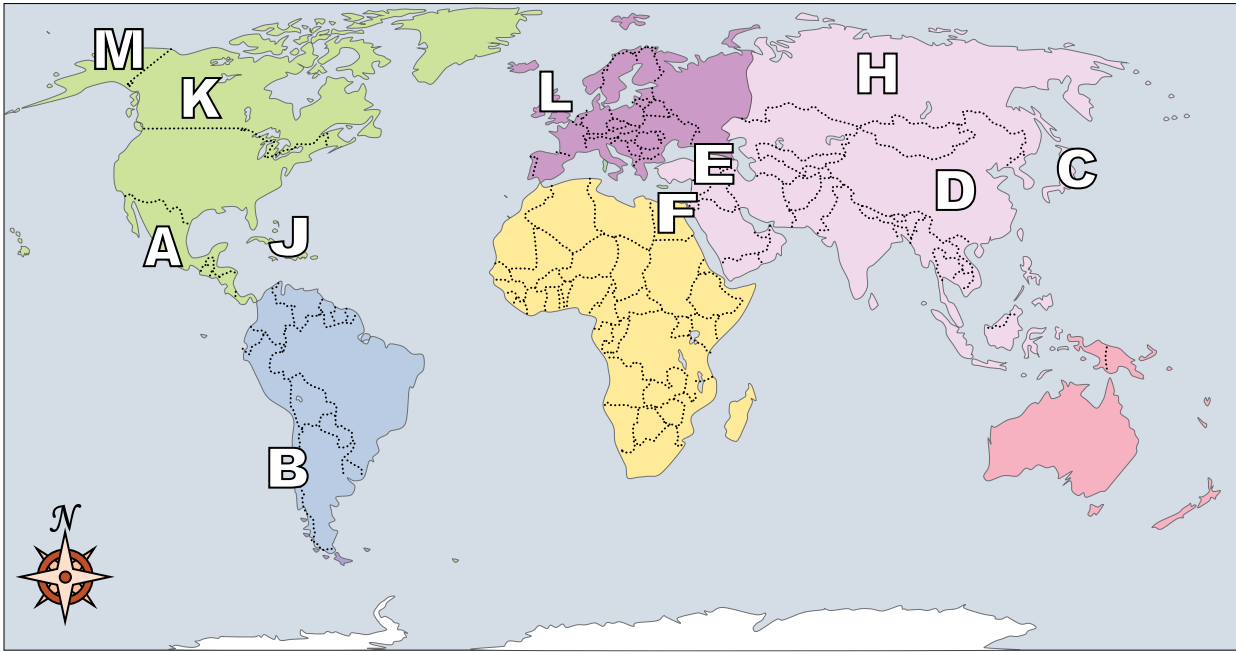
- 1.   **D**
- 2.   **L**
- 3.   **C**
- 4.   **E**
- 5.   **J**
- 6.   **H**
- 7.   **A**
- 8.   **M**
- 9.   **G**
- 10.   **F**
- 11.   **B**
- 12.   **K**
- 13.   **D**
- 14.   **C**
- 15.   **B**
- 16.   **A**
- 17.   **A**

- 1) United Kingdom   **D**
- 2) Russia   **L**
- 3) Egypt   **C**
- 4) Iraq   **E**
- 5) Alaska (State)   **J**
- 6) Cuba   **H**
- 7) Britain   **A**
- 8) Mexico   **M**
- 9) Chile   **G**
- 10) Canada   **F**
- 11) Japan   **B**
- 12) China   **K**
- 13) The state of Alaska is touching which country?  
A. Egypt                      B. China                      C. Japan                      D. Canada
- 14) Which country attacked the United State's base at Pearl Harbor during World War 2?  
A. China                      B. Mexico                      C. Japan                      D. Egypt
- 15) Which country touches the USA's northern border?  
A. France                      B. Canada                      C. Japan                      D. Britain
- 16) Which is not part of North America?  
A. Russia                      B. Mexico                      C. The United States      D. Canada
- 17) If you wanted to see pyramids where should you go?  
A. Egypt                      B. Canada                      C. China                      D. Russia





Using the map below, determine which letter represents each location.



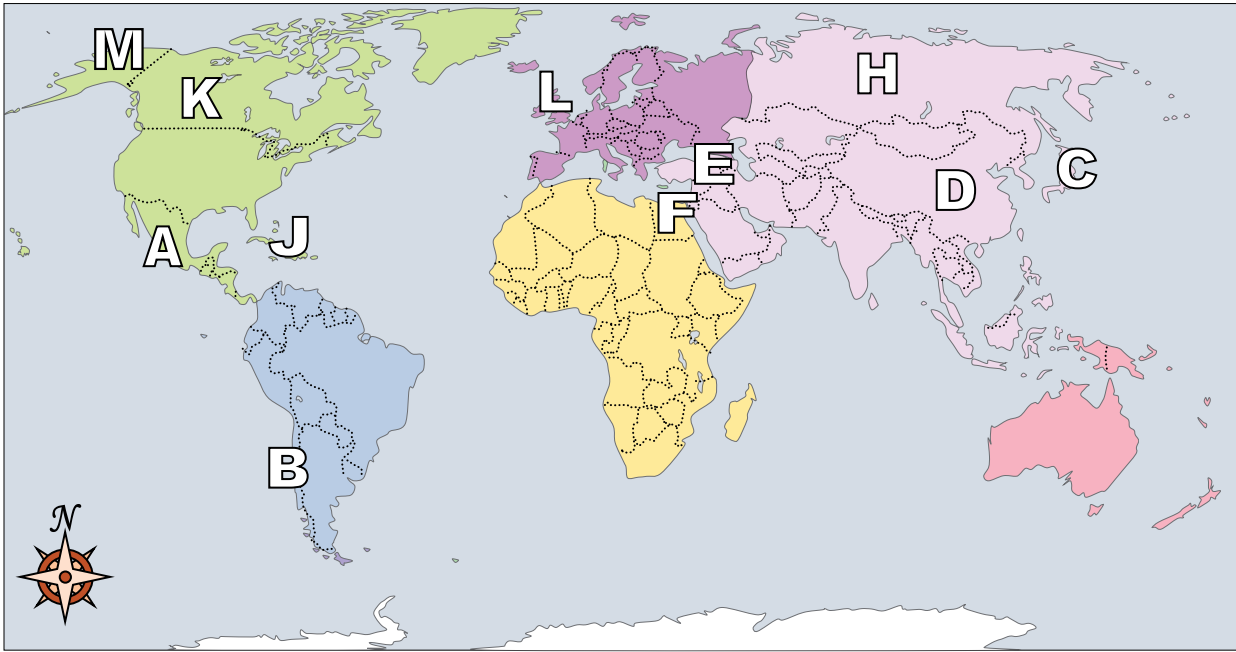
**Answers**

1. \_\_\_\_\_
2. \_\_\_\_\_
3. \_\_\_\_\_
4. \_\_\_\_\_
5. \_\_\_\_\_
6. \_\_\_\_\_
7. \_\_\_\_\_
8. \_\_\_\_\_
9. \_\_\_\_\_
10. \_\_\_\_\_
11. \_\_\_\_\_
12. \_\_\_\_\_
13. \_\_\_\_\_
14. \_\_\_\_\_
15. \_\_\_\_\_
16. \_\_\_\_\_
17. \_\_\_\_\_

- 1) Alaska (State) \_\_\_\_\_
- 2) Russia \_\_\_\_\_
- 3) United Kingdom \_\_\_\_\_
- 4) Cuba \_\_\_\_\_
- 5) Chile \_\_\_\_\_
- 6) Mexico \_\_\_\_\_
- 7) Japan \_\_\_\_\_
- 8) Iraq \_\_\_\_\_
- 9) Britain \_\_\_\_\_
- 10) China \_\_\_\_\_
- 11) Egypt \_\_\_\_\_
- 12) Canada \_\_\_\_\_
- 13) If you wanted to see pyramids where should you go?  
A. Russia      B. France      C. Mexico      D. Egypt
- 14) Which country attacked the United State's base at Pearl Harbor during World War 2?  
A. Japan      B. Mexico      C. Britain      D. Canada
- 15) Which country is the largest in Asia?  
A. Egypt      B. Russia      C. Mexico      D. France
- 16) Alaska is \_\_\_\_\_ of the rest of the United States?  
A. south      B. west      C. north      D. east
- 17) The state of Alaska is touching which country?  
A. Japan      B. Canada      C. China      D. Britain



Using the map below, determine which letter represents each location.



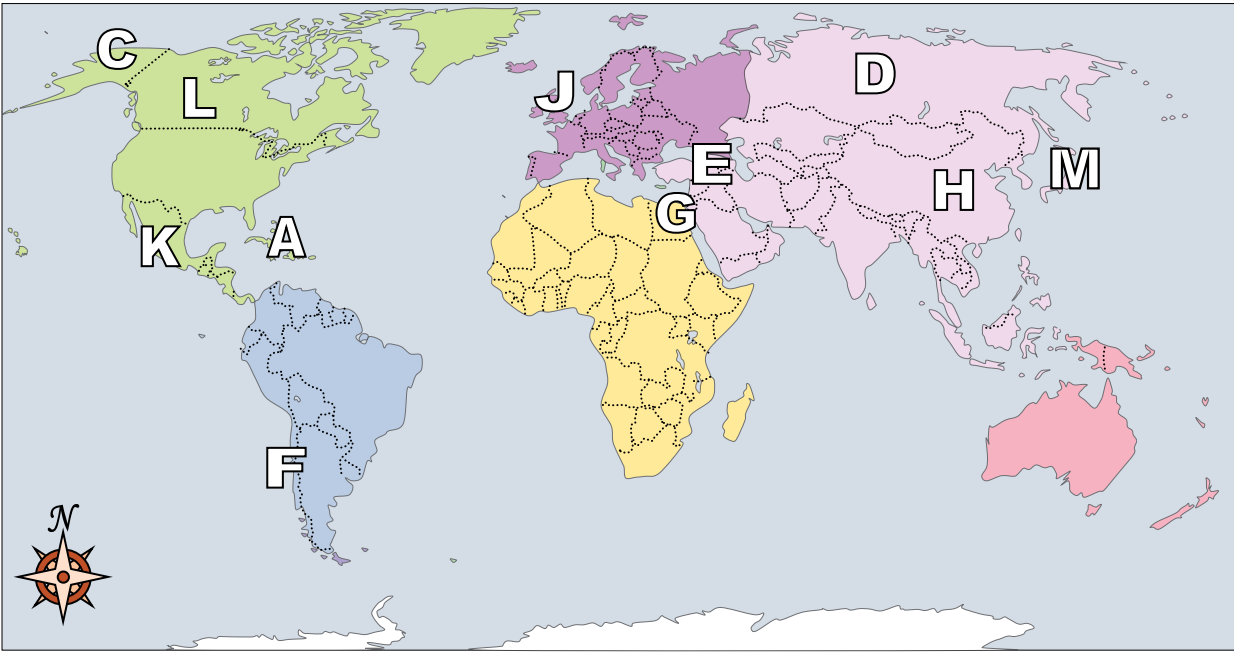
**Answers**

- 1.   **M**
- 2.   **H**
- 3.   **L**
- 4.   **J**
- 5.   **B**
- 6.   **A**
- 7.   **C**
- 8.   **E**
- 9.   **G**
- 10.   **D**
- 11.   **F**
- 12.   **K**
- 13.   **D**
- 14.   **A**
- 15.   **B**
- 16.   **C**
- 17.   **B**

- 1) Alaska (State)   **M**
- 2) Russia   **H**
- 3) United Kingdom   **L**
- 4) Cuba   **J**
- 5) Chile   **B**
- 6) Mexico   **A**
- 7) Japan   **C**
- 8) Iraq   **E**
- 9) Britain   **G**
- 10) China   **D**
- 11) Egypt   **F**
- 12) Canada   **K**
- 13) If you wanted to see pyramids where should you go?  
A. Russia                  B. France                  C. Mexico                  D. Egypt
- 14) Which country attacked the United State's base at Pearl Harbor during World War 2?  
A. Japan                  B. Mexico                  C. Britain                  D. Canada
- 15) Which country is the largest in Asia?  
A. Egypt                  B. Russia                  C. Mexico                  D. France
- 16) Alaska is \_\_\_\_\_ of the rest of the United States?  
A. south                  B. west                  C. north                  D. east
- 17) The state of Alaska is touching which country?  
A. Japan                  B. Canada                  C. China                  D. Britain



Using the map below, determine which letter represents each location.



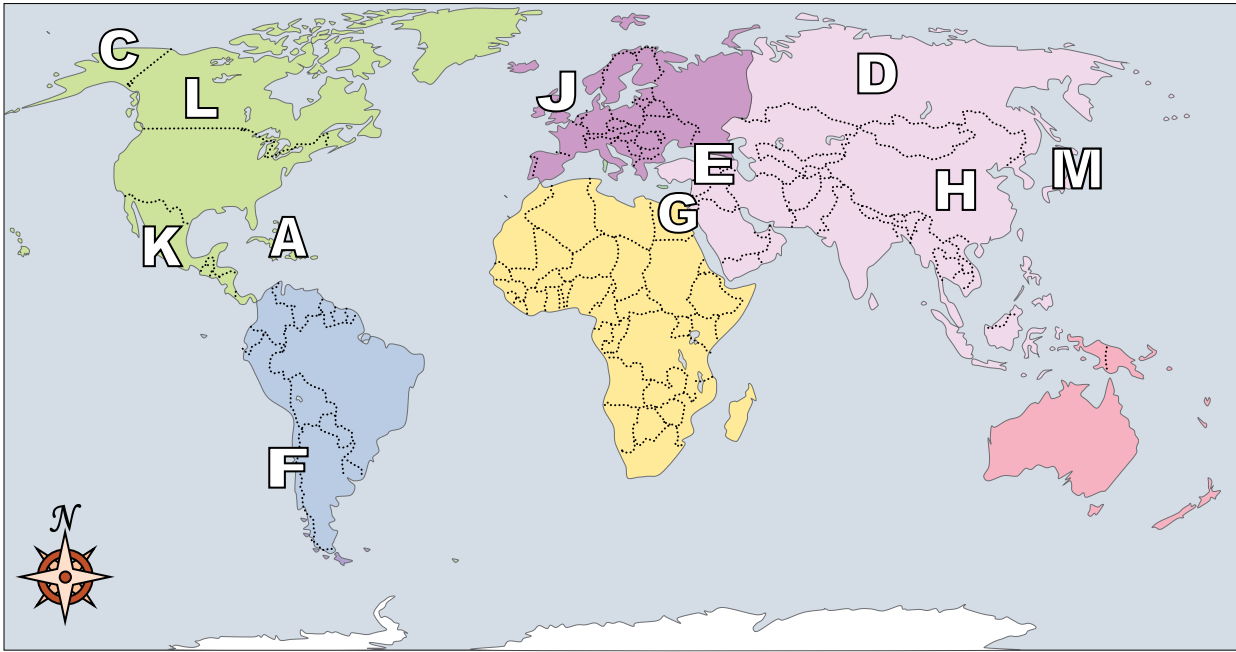
**Answers**

1. \_\_\_\_\_
2. \_\_\_\_\_
3. \_\_\_\_\_
4. \_\_\_\_\_
5. \_\_\_\_\_
6. \_\_\_\_\_
7. \_\_\_\_\_
8. \_\_\_\_\_
9. \_\_\_\_\_
10. \_\_\_\_\_
11. \_\_\_\_\_
12. \_\_\_\_\_
13. \_\_\_\_\_
14. \_\_\_\_\_
15. \_\_\_\_\_
16. \_\_\_\_\_
17. \_\_\_\_\_

- 1) Mexico \_\_\_\_\_
- 2) Chile \_\_\_\_\_
- 3) Cuba \_\_\_\_\_
- 4) Iraq \_\_\_\_\_
- 5) China \_\_\_\_\_
- 6) Egypt \_\_\_\_\_
- 7) Canada \_\_\_\_\_
- 8) Alaska (State) \_\_\_\_\_
- 9) Britain \_\_\_\_\_
- 10) United Kingdom \_\_\_\_\_
- 11) Russia \_\_\_\_\_
- 12) Japan \_\_\_\_\_
- 13) Which country touches the USA's northern border?  
A. France      B. Canada      C. China      D. Mexico
- 14) Alaska is \_\_\_\_\_ of the rest of the United States?  
A. north      B. west      C. east      D. south
- 15) Who was the United States of America at war with during the American Revolution?  
A. Britain      B. Japan      C. Mexico      D. Egypt
- 16) Which country touches the USA's southern border?  
A. Mexico      B. Egypt      C. Japan      D. France
- 17) Which country is the largest in Asia?  
A. Russia      B. Egypt      C. Japan      D. Mexico



Using the map below, determine which letter represents each location.



**Answers**

- 1.     **K**
- 2.     **F**
- 3.     **A**
- 4.     **E**
- 5.     **H**
- 6.     **G**
- 7.     **L**
- 8.     **C**
- 9.     **B**
- 10.    **J**
- 11.    **D**
- 12.    **M**
- 13.    **B**
- 14.    **A**
- 15.    **A**
- 16.    **A**
- 17.    **A**

- 1) Mexico     **K**
- 2) Chile     **F**
- 3) Cuba     **A**
- 4) Iraq     **E**
- 5) China     **H**
- 6) Egypt     **G**
- 7) Canada    **L**
- 8) Alaska (State)    **C**
- 9) Britain    **B**
- 10) United Kingdom    **J**
- 11) Russia    **D**
- 12) Japan    **M**
- 13) Which country touches the USA's northern border?  
A. France            B. Canada            C. China            D. Mexico
- 14) Alaska is \_\_\_\_\_ of the rest of the United States?  
A. north            B. west            C. east            D. south
- 15) Who was the United States of America at war with during the American Revolution?  
A. Britain            B. Japan            C. Mexico            D. Egypt
- 16) Which country touches the USA's southern border?  
A. Mexico            B. Egypt            C. Japan            D. France
- 17) Which country is the largest in Asia?  
A. Russia            B. Egypt            C. Japan            D. Mexico