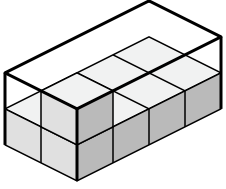


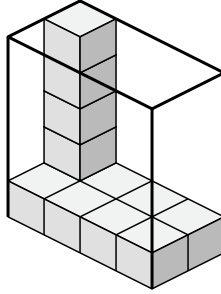


Determine the volume of each box. Each block is 1 cubic unit (u<sup>3</sup>).

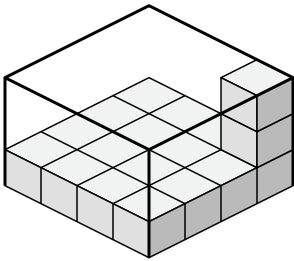
1)



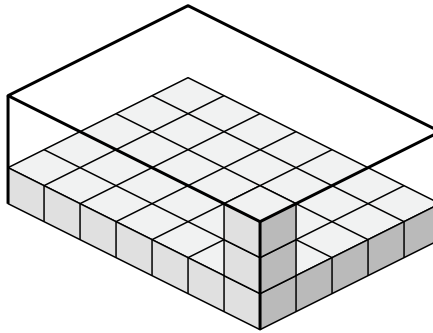
2)



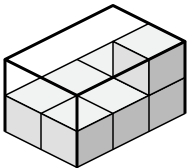
3)



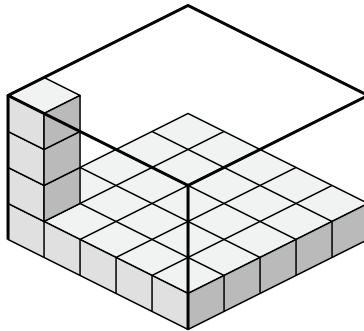
4)



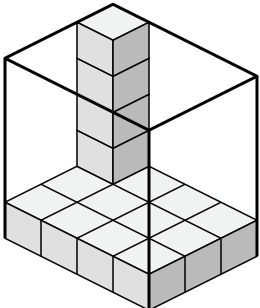
5)



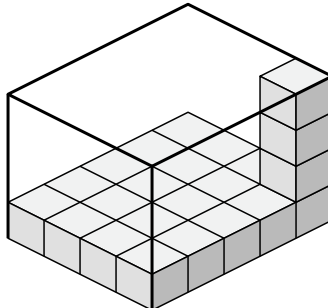
6)



7)



8)



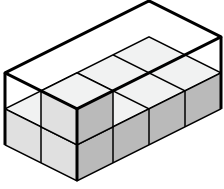
Answers

- 1. \_\_\_\_\_
- 2. \_\_\_\_\_
- 3. \_\_\_\_\_
- 4. \_\_\_\_\_
- 5. \_\_\_\_\_
- 6. \_\_\_\_\_
- 7. \_\_\_\_\_
- 8. \_\_\_\_\_

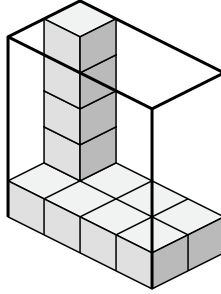


Determine the volume of each box. Each block is 1 cubic unit ( $u^3$ ).

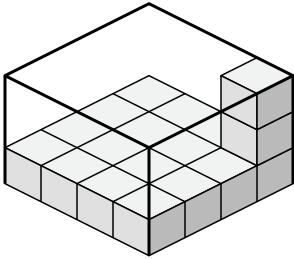
1)



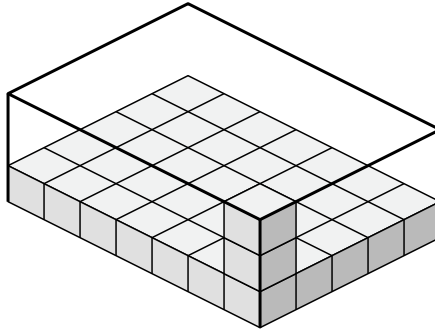
2)



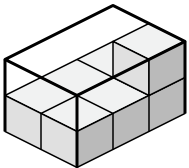
3)



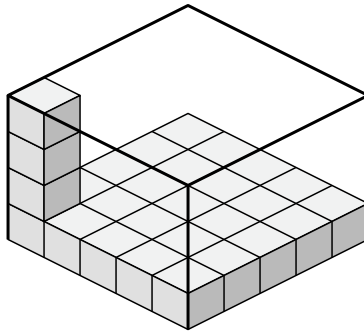
4)



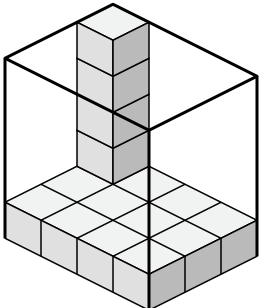
5)



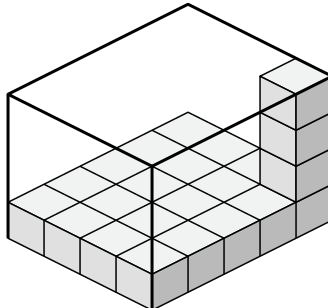
6)



7)



8)



Answers

1. 16  $u^3$

2. 40  $u^3$

3. 48  $u^3$

4. 105  $u^3$

5. 12  $u^3$

6. 100  $u^3$

7. 60  $u^3$

8. 80  $u^3$