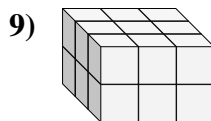
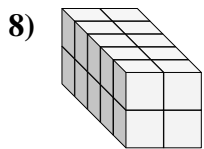
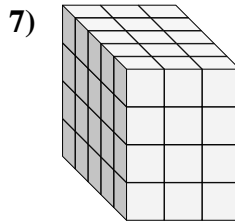
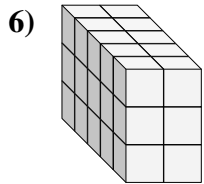
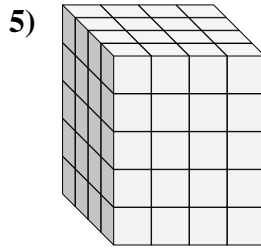
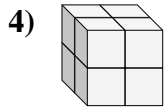
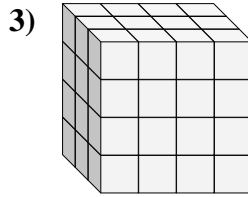
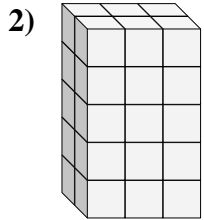
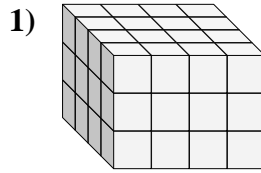
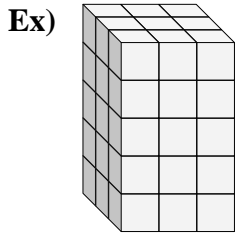




Find the length, width and height of the rectangular prism. Then find the volume.



Answers

Ex. 3 3 5 45

1. \_\_\_\_\_

2. \_\_\_\_\_

3. \_\_\_\_\_

4. \_\_\_\_\_

5. \_\_\_\_\_

6. \_\_\_\_\_

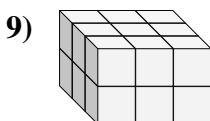
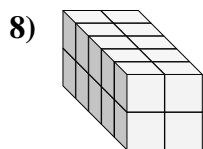
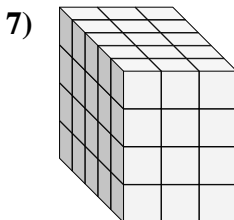
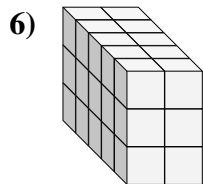
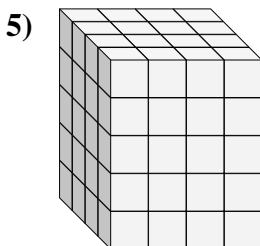
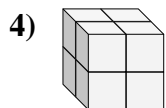
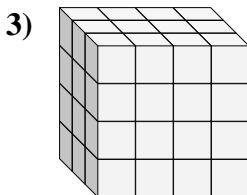
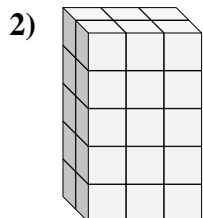
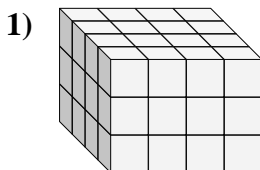
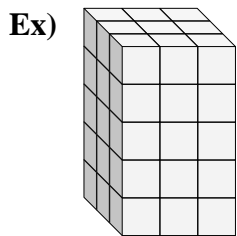
7. \_\_\_\_\_

8. \_\_\_\_\_

9. \_\_\_\_\_



Find the length, width and height of the rectangular prism. Then find the volume.



Answers

Ex. 3 3 5 45

1. 4 4 3 48

2. 2 3 5 30

3. 3 4 4 48

4. 2 2 2 8

5. 4 4 5 80

6. 5 2 3 30

7. 5 3 4 60

8. 5 2 2 20

9. 3 3 2 18