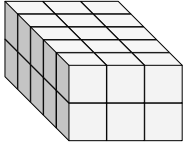


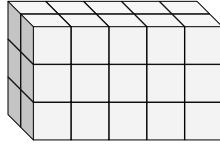


Find the length, width and height of the rectangular prism. Then find the volume.

Ex)



1)



Answers

Ex. 5 3 2 30

1. _____

2. _____

3. _____

4. _____

5. _____

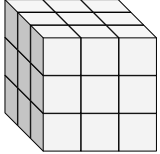
6. _____

7. _____

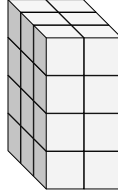
8. _____

9. _____

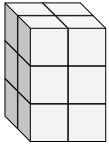
2)



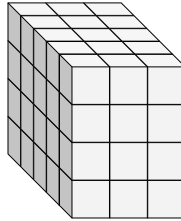
3)



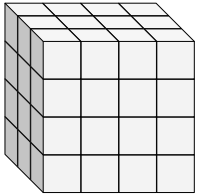
4)



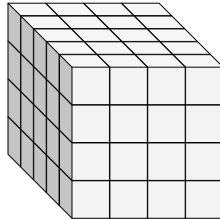
5)



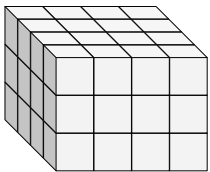
6)



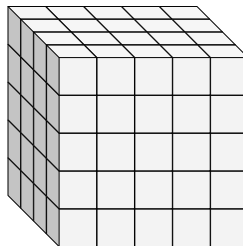
7)



8)

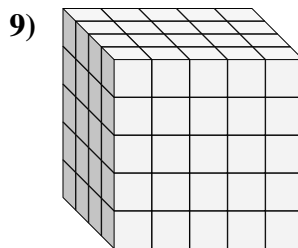
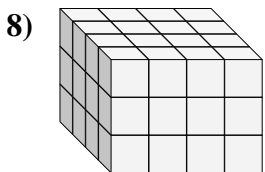
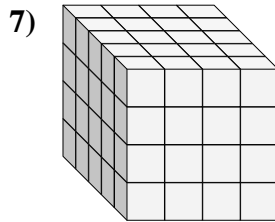
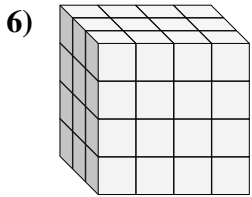
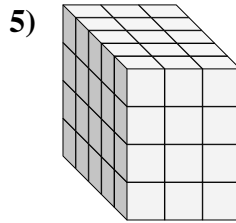
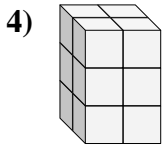
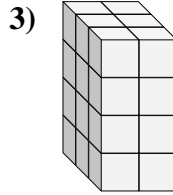
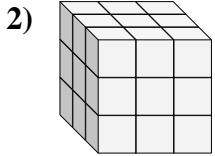
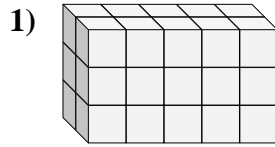
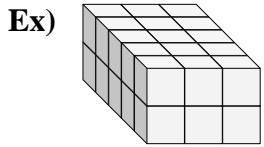


9)





Find the length, width and height of the rectangular prism. Then find the volume.



Answers

Ex. 5 3 2 30

1. 2 5 3 30

2. 3 3 3 27

3. 3 2 4 24

4. 2 2 3 12

5. 5 3 4 60

6. 3 4 4 48

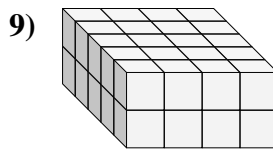
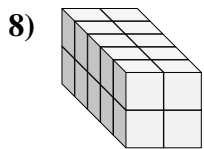
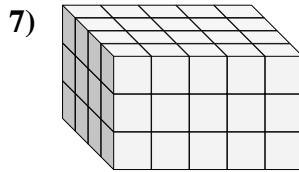
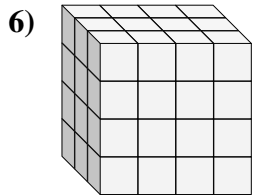
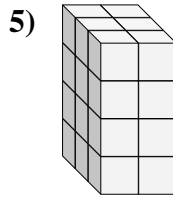
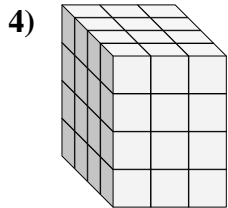
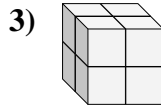
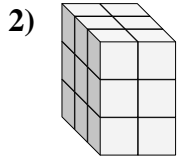
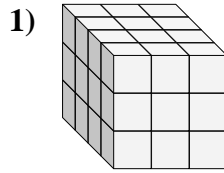
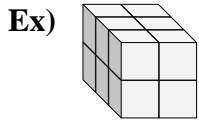
7. 5 4 4 80

8. 4 4 3 48

9. 4 5 5 100



Find the length, width and height of the rectangular prism. Then find the volume.



Answers

Ex. 3 2 2 12

1. _____

2. _____

3. _____

4. _____

5. _____

6. _____

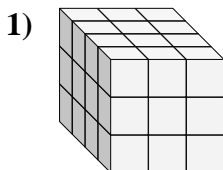
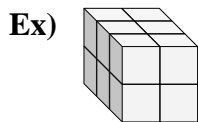
7. _____

8. _____

9. _____



Find the length, width and height of the rectangular prism. Then find the volume.



Answers
Ex. 3 2 2 12

1. 4 3 3 36

2. 3 2 3 18

3. 2 2 2 8

4. 4 3 4 48

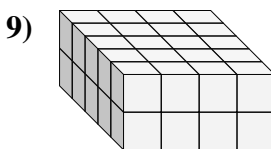
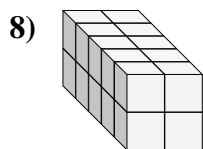
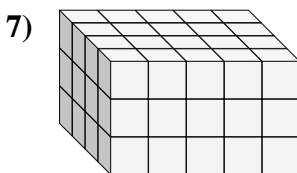
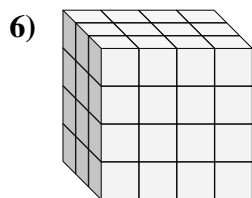
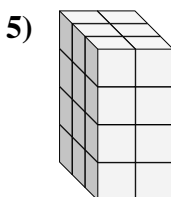
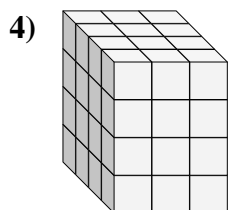
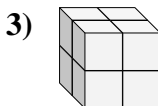
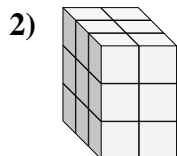
5. 3 2 4 24

6. 3 4 4 48

7. 4 5 3 60

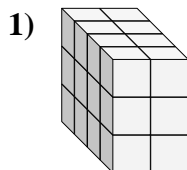
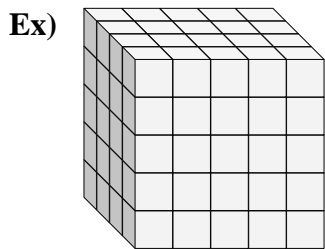
8. 5 2 2 20

9. 5 4 2 40





Find the length, width and height of the rectangular prism. Then find the volume.



Answers
Ex. 4 5 5 100

1. _____

2. _____

3. _____

4. _____

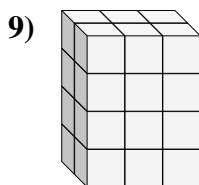
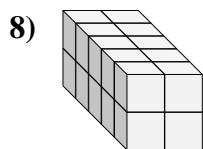
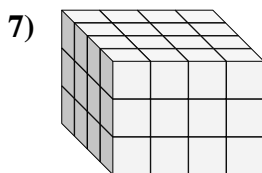
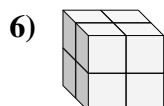
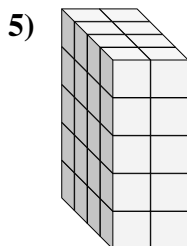
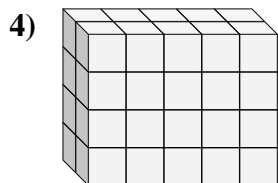
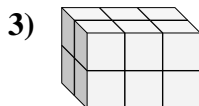
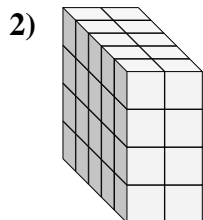
5. _____

6. _____

7. _____

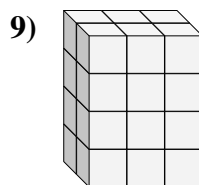
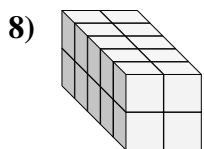
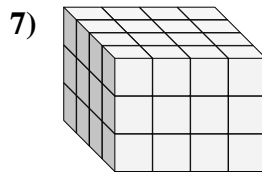
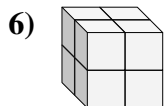
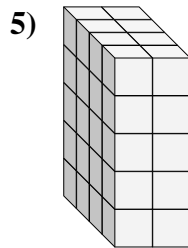
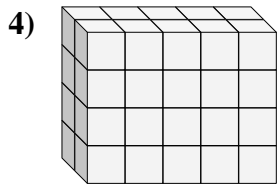
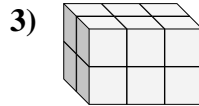
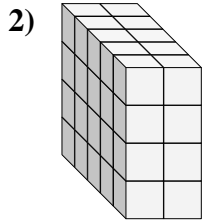
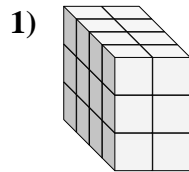
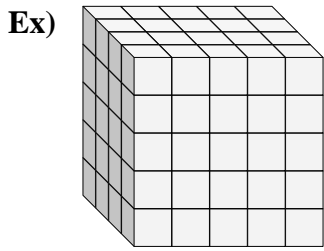
8. _____

9. _____





Find the length, width and height of the rectangular prism. Then find the volume.



Answers

Ex. 4 5 5 100

1. 4 2 3 24

2. 5 2 4 40

3. 2 3 2 12

4. 2 5 4 40

5. 4 2 5 40

6. 2 2 2 8

7. 4 4 3 48

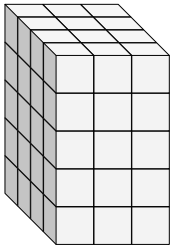
8. 5 2 2 20

9. 2 3 4 24

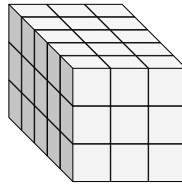


Find the length, width and height of the rectangular prism. Then find the volume.

Ex)



1)



Answers

Ex. 4 3 5 60

1. _____

2. _____

3. _____

4. _____

5. _____

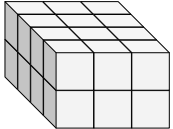
6. _____

7. _____

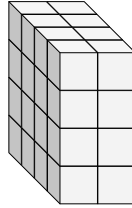
8. _____

9. _____

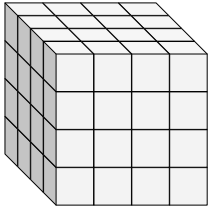
2)



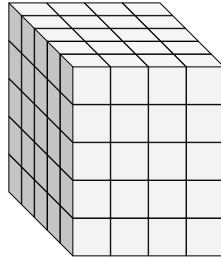
3)



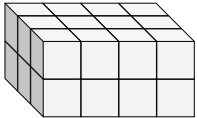
4)



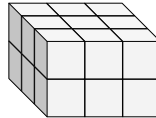
5)



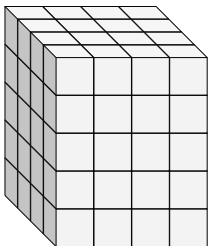
6)



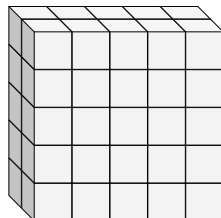
7)



8)

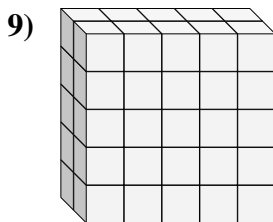
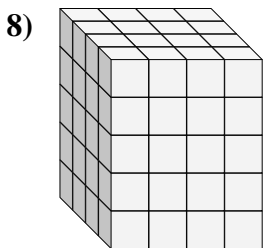
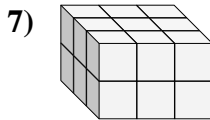
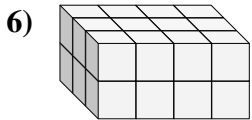
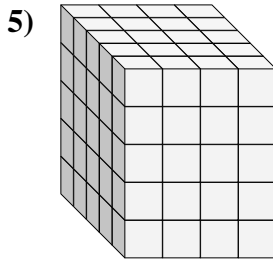
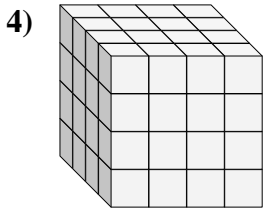
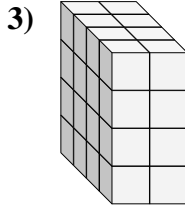
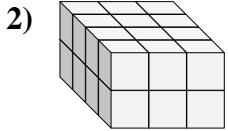
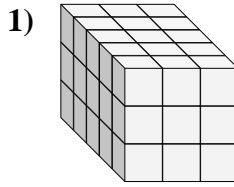
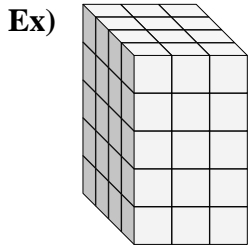


9)





Find the length, width and height of the rectangular prism. Then find the volume.



Answers

Ex. 4 3 5 60

1. 5 3 3 45

2. 4 3 2 24

3. 4 2 4 32

4. 4 4 4 64

5. 5 4 5 100

6. 3 4 2 24

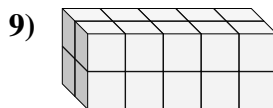
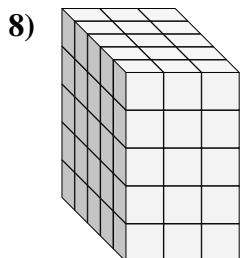
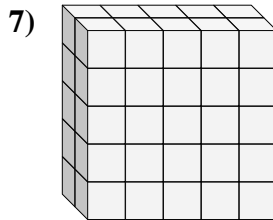
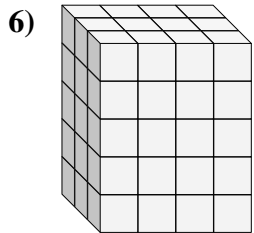
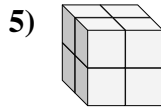
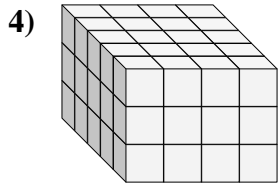
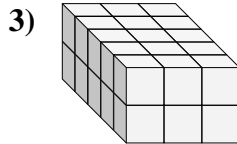
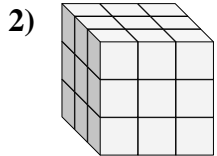
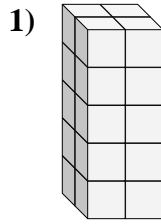
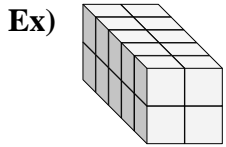
7. 3 3 2 18

8. 4 4 5 80

9. 2 5 5 50



Find the length, width and height of the rectangular prism. Then find the volume.



Answers

Ex. 5 2 2 20

1. _____

2. _____

3. _____

4. _____

5. _____

6. _____

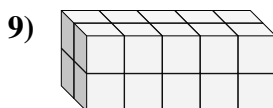
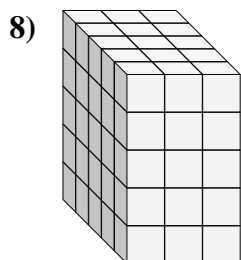
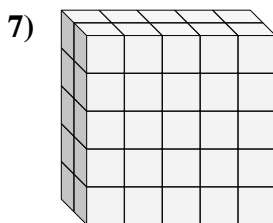
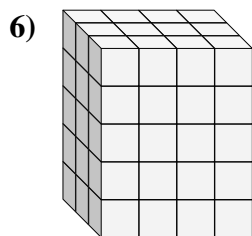
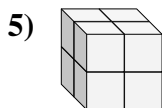
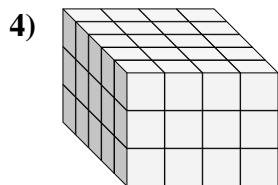
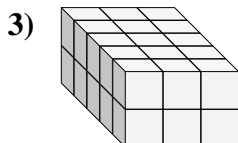
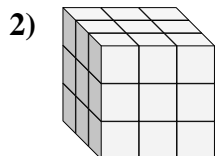
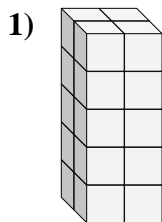
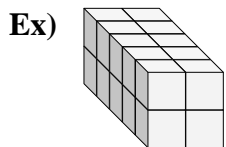
7. _____

8. _____

9. _____



Find the length, width and height of the rectangular prism. Then find the volume.



Answers

Ex. 5 2 2 20

1. 2 2 5 20

2. 3 3 3 27

3. 5 3 2 30

4. 5 4 3 60

5. 2 2 2 8

6. 3 4 5 60

7. 2 5 5 50

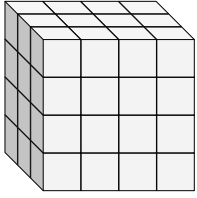
8. 5 3 5 75

9. 2 5 2 20

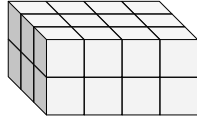


Find the length, width and height of the rectangular prism. Then find the volume.

Ex)



1)



Answers

Ex. 3 4 4 48

1. _____

2. _____

3. _____

4. _____

5. _____

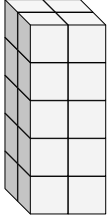
6. _____

7. _____

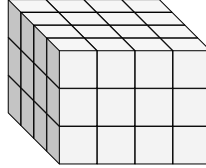
8. _____

9. _____

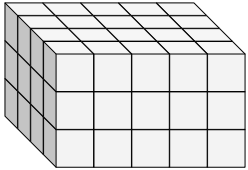
2)



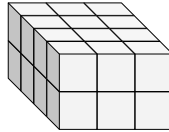
3)



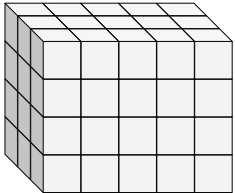
4)



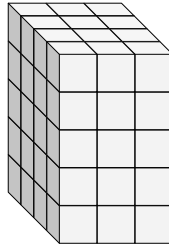
5)



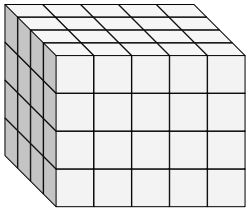
6)



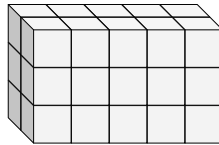
7)



8)

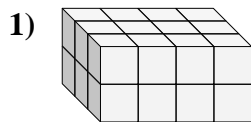
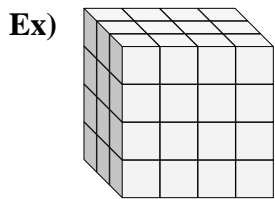


9)





Find the length, width and height of the rectangular prism. Then find the volume.



Answers
Ex. 3 4 4 48

1. 3 4 2 24

2. 2 2 5 20

3. 4 4 3 48

4. 4 5 3 60

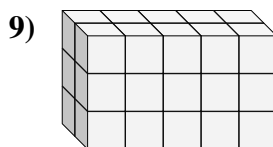
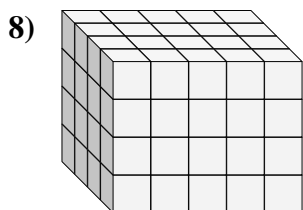
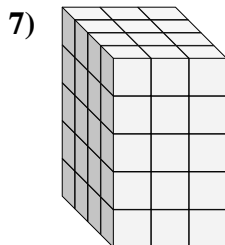
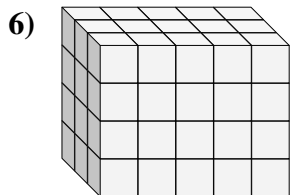
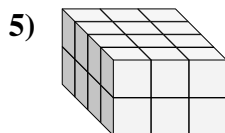
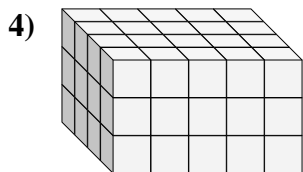
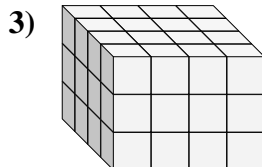
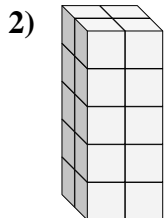
5. 4 3 2 24

6. 3 5 4 60

7. 4 3 5 60

8. 4 5 4 80

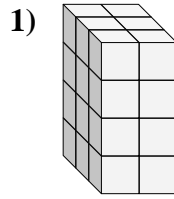
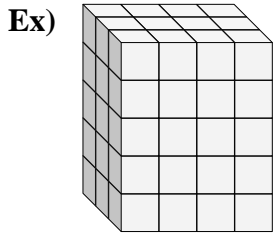
9. 2 5 3 30





Find the length, width and height of the rectangular prism. Then find the volume.

Answers



Ex. 3 4 5 60

1. _____

2. _____

3. _____

4. _____

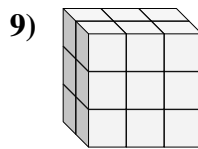
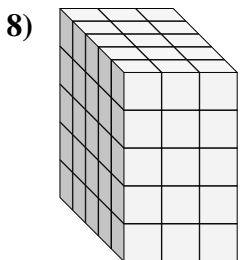
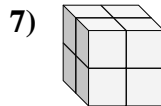
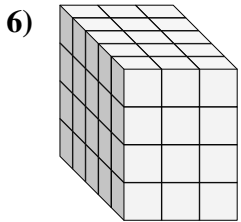
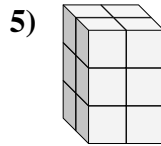
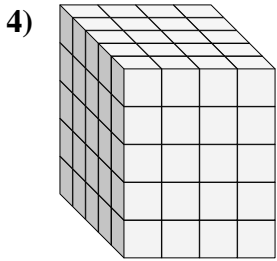
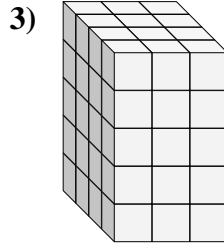
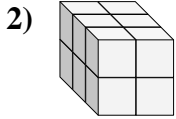
5. _____

6. _____

7. _____

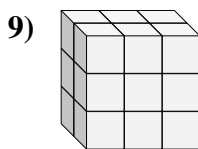
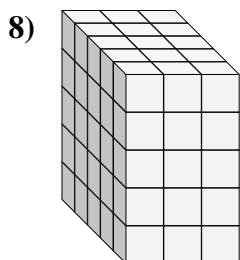
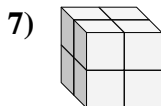
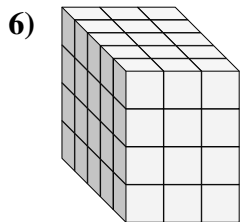
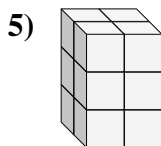
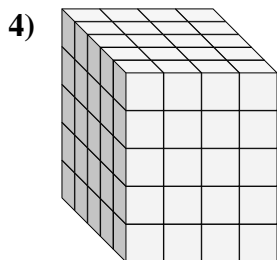
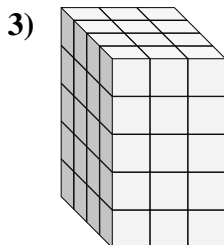
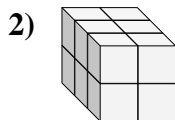
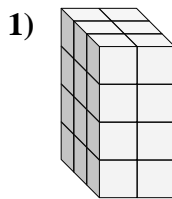
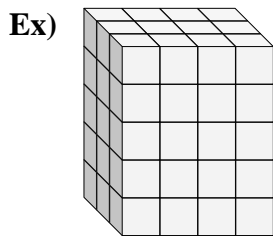
8. _____

9. _____





Find the length, width and height of the rectangular prism. Then find the volume.



Answers

Ex. 3 4 5 60

1. 3 2 4 24

2. 3 2 2 12

3. 4 3 5 60

4. 5 4 3 100

5. 2 2 3 12

6. 5 3 4 60

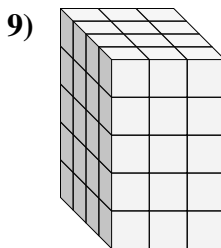
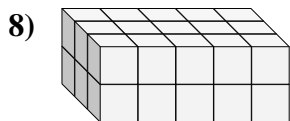
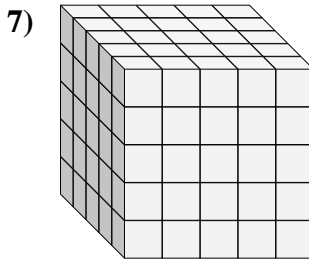
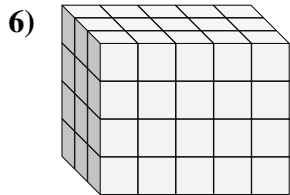
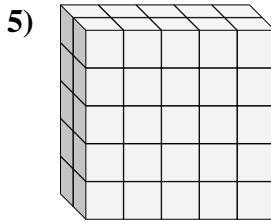
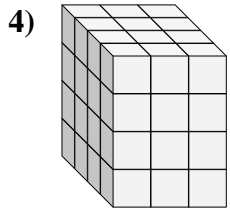
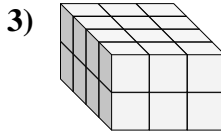
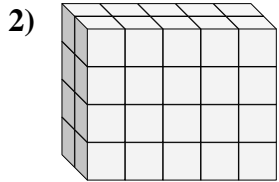
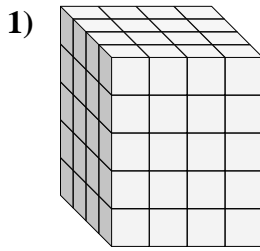
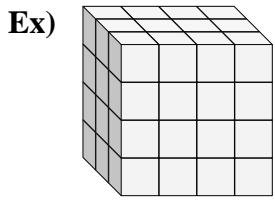
7. 2 2 2 8

8. 5 3 5 75

9. 2 3 3 18



Find the length, width and height of the rectangular prism. Then find the volume.



Answers

Ex. 3 4 4 48

1. _____

2. _____

3. _____

4. _____

5. _____

6. _____

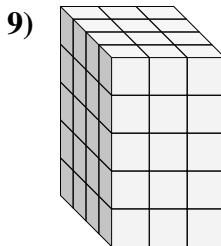
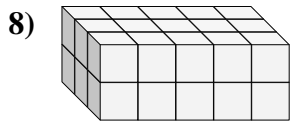
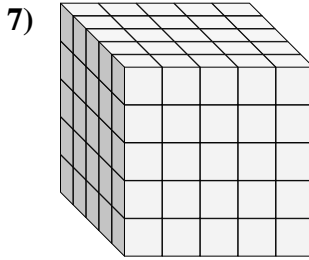
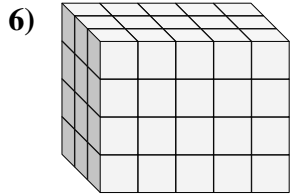
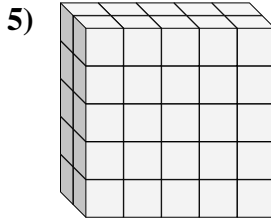
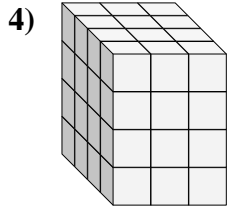
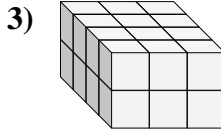
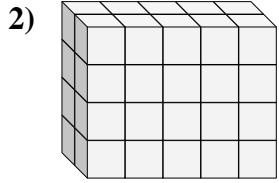
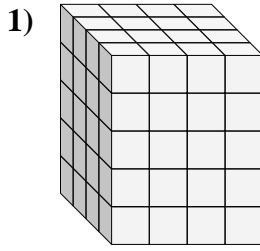
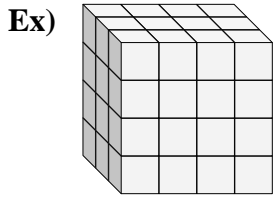
7. _____

8. _____

9. _____



Find the length, width and height of the rectangular prism. Then find the volume.



Answers

Ex. 3 4 4 48

1. 4 4 5 80

2. 2 5 4 40

3. 4 3 2 24

4. 4 3 4 48

5. 2 5 5 50

6. 3 5 4 60

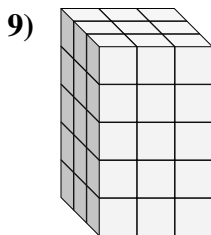
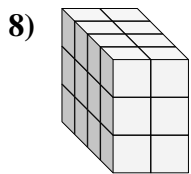
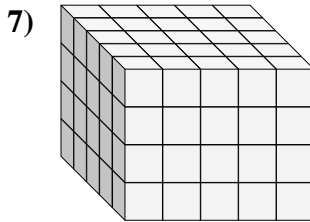
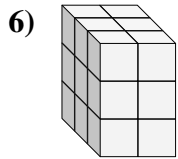
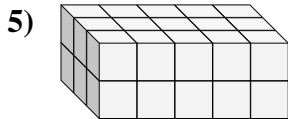
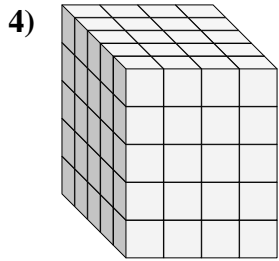
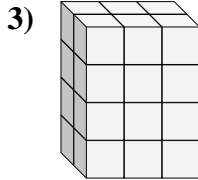
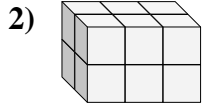
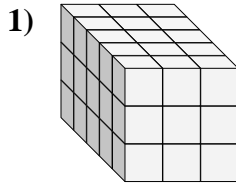
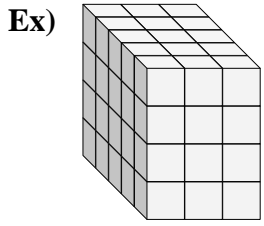
7. 5 5 5 125

8. 3 5 2 30

9. 4 3 5 60



Find the length, width and height of the rectangular prism. Then find the volume.



Answers

Ex. 5 3 4 60

1. _____

2. _____

3. _____

4. _____

5. _____

6. _____

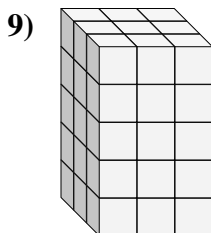
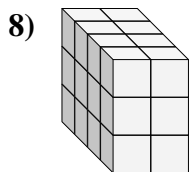
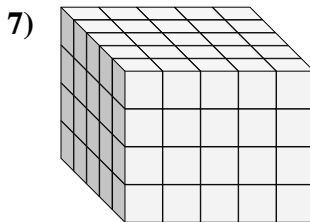
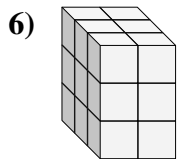
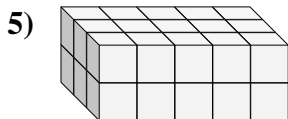
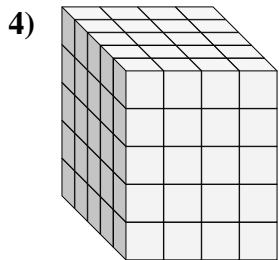
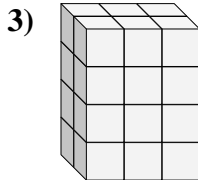
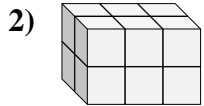
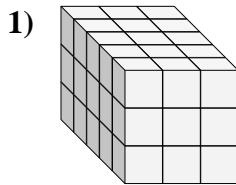
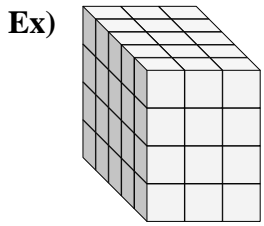
7. _____

8. _____

9. _____



Find the length, width and height of the rectangular prism. Then find the volume.



Answers

Ex. 5 3 4 60

1. 5 3 3 45

2. 2 3 2 12

3. 2 3 4 24

4. 5 4 5 100

5. 3 5 2 30

6. 3 2 3 18

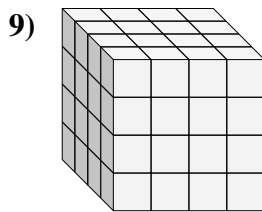
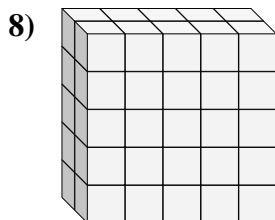
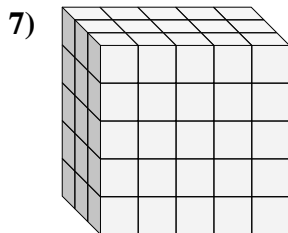
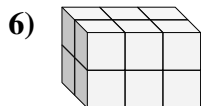
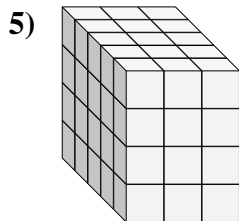
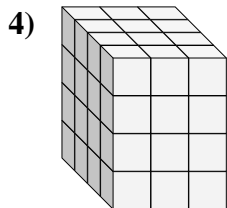
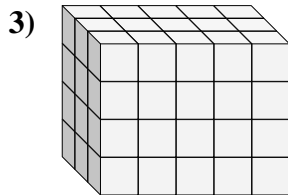
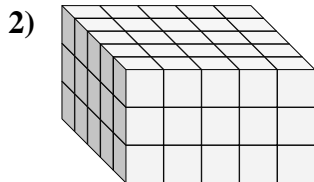
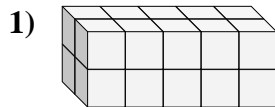
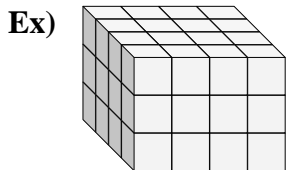
7. 5 5 4 100

8. 4 2 3 24

9. 3 3 5 45



Find the length, width and height of the rectangular prism. Then find the volume.



Answers

Ex. 4 4 3 48

1. _____

2. _____

3. _____

4. _____

5. _____

6. _____

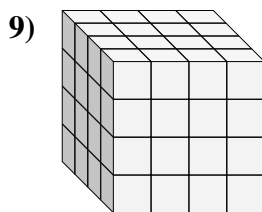
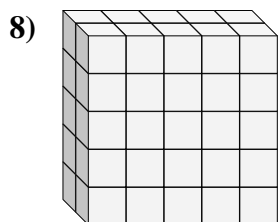
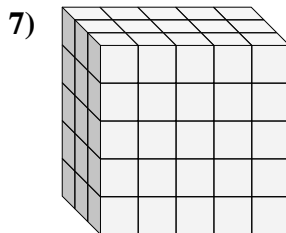
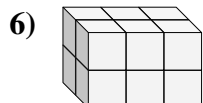
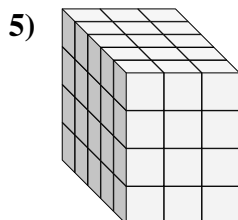
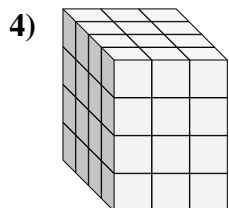
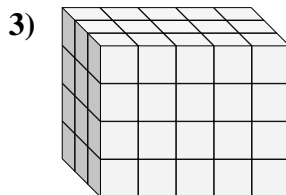
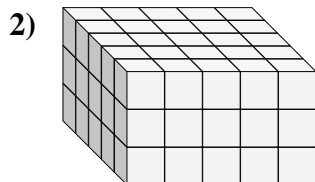
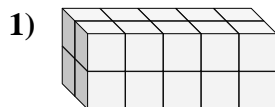
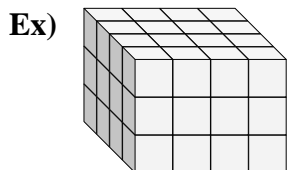
7. _____

8. _____

9. _____



Find the length, width and height of the rectangular prism. Then find the volume.



Answers

Ex. 4 4 3 48

1. 2 5 2 20

2. 5 5 3 75

3. 3 5 4 60

4. 4 3 4 48

5. 5 3 4 60

6. 2 3 2 12

7. 3 5 5 75

8. 2 5 5 50

9. 4 4 4 64