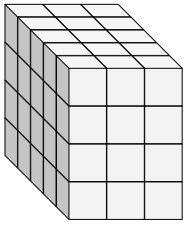


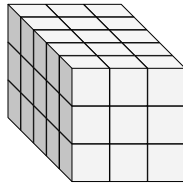


Find the length, width and height of the rectangular prism. Then find the volume.

Ex)



1)



Answers

Ex. 5 3 4 60

1. _____

2. _____

3. _____

4. _____

5. _____

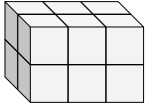
6. _____

7. _____

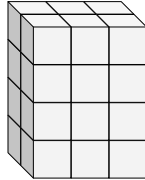
8. _____

9. _____

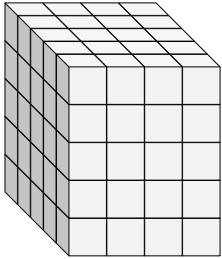
2)



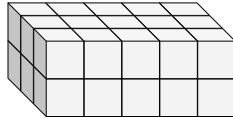
3)



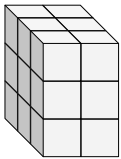
4)



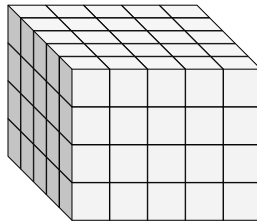
5)



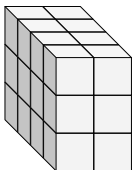
6)



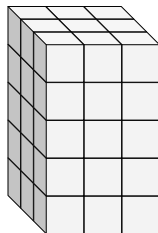
7)



8)

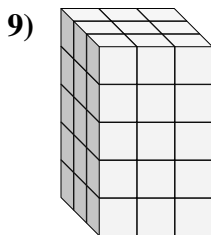
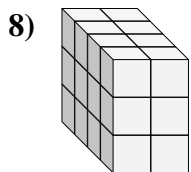
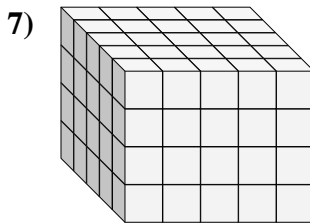
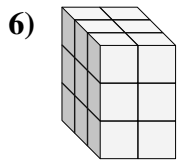
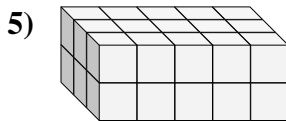
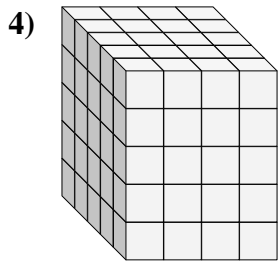
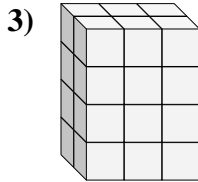
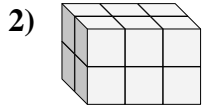
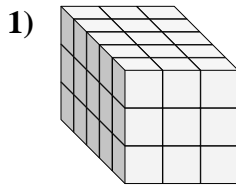
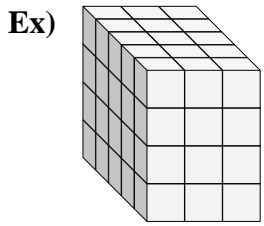


9)





Find the length, width and height of the rectangular prism. Then find the volume.



Answers

Ex. 5 3 4 60

1. 5 3 3 45

2. 2 3 2 12

3. 2 3 4 24

4. 5 4 5 100

5. 3 5 2 30

6. 3 2 3 18

7. 5 5 4 100

8. 4 2 3 24

9. 3 3 5 45