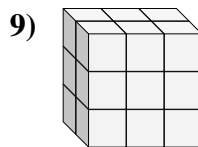
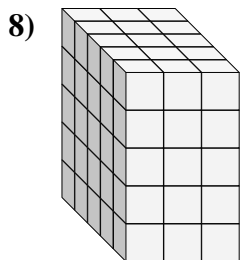
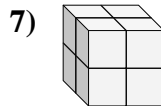
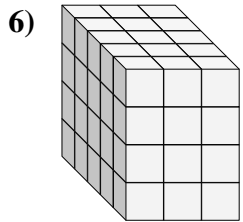
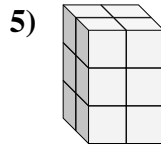
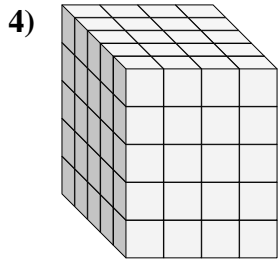
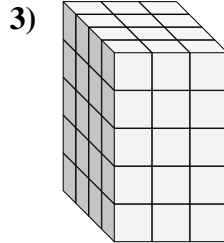
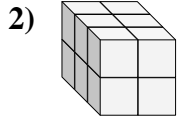
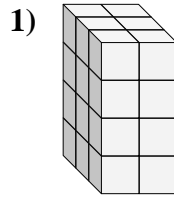
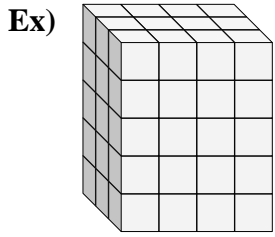




Find the length, width and height of the rectangular prism. Then find the volume.



Answers

Ex. 3 4 5 60

1. \_\_\_\_\_

2. \_\_\_\_\_

3. \_\_\_\_\_

4. \_\_\_\_\_

5. \_\_\_\_\_

6. \_\_\_\_\_

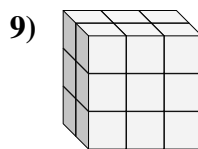
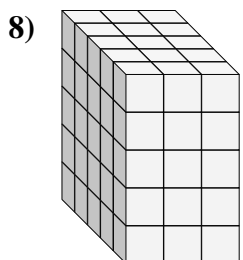
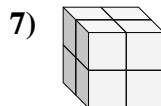
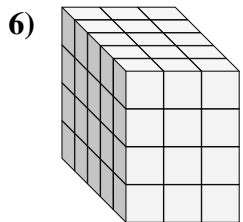
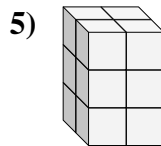
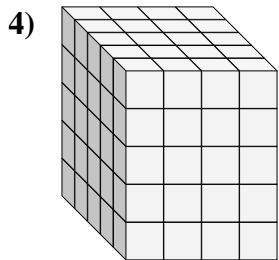
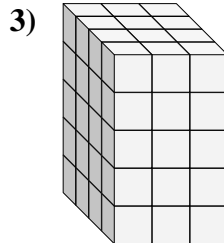
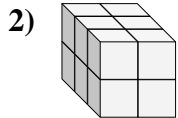
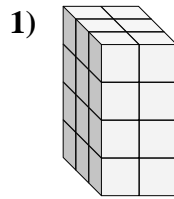
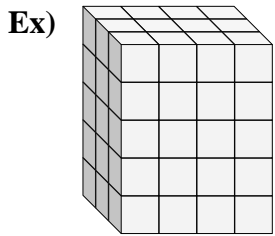
7. \_\_\_\_\_

8. \_\_\_\_\_

9. \_\_\_\_\_



Find the length, width and height of the rectangular prism. Then find the volume.



Answers

|     |          |          |          |            |
|-----|----------|----------|----------|------------|
| Ex. | <u>3</u> | <u>4</u> | <u>5</u> | <u>60</u>  |
| 1.  | <u>3</u> | <u>2</u> | <u>4</u> | <u>24</u>  |
| 2.  | <u>3</u> | <u>2</u> | <u>2</u> | <u>12</u>  |
| 3.  | <u>4</u> | <u>3</u> | <u>5</u> | <u>60</u>  |
| 4.  | <u>5</u> | <u>4</u> | <u>5</u> | <u>100</u> |
| 5.  | <u>2</u> | <u>2</u> | <u>3</u> | <u>12</u>  |
| 6.  | <u>5</u> | <u>3</u> | <u>4</u> | <u>60</u>  |
| 7.  | <u>2</u> | <u>2</u> | <u>2</u> | <u>8</u>   |
| 8.  | <u>5</u> | <u>3</u> | <u>5</u> | <u>75</u>  |
| 9.  | <u>2</u> | <u>3</u> | <u>3</u> | <u>18</u>  |