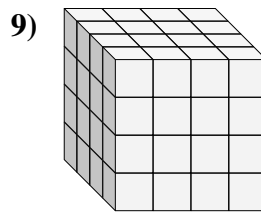
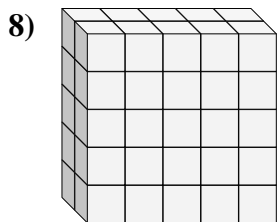
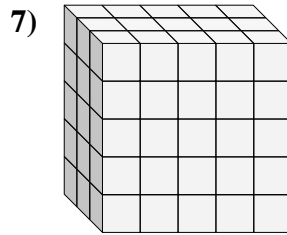
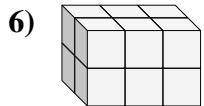
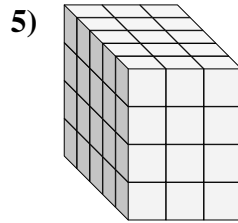
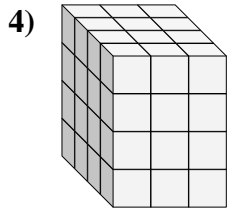
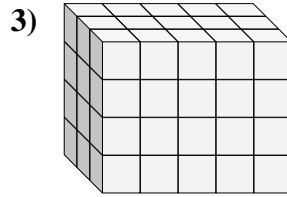
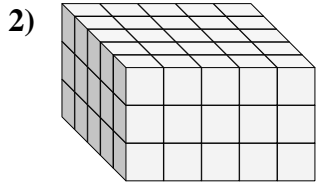
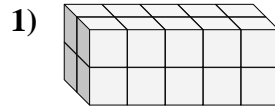
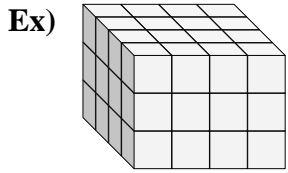




Find the length, width and height of the rectangular prism. Then find the volume.



Answers

Ex. 4 4 3 48

1. _____

2. _____

3. _____

4. _____

5. _____

6. _____

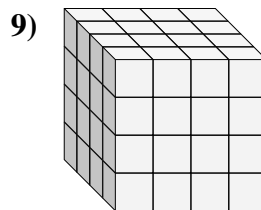
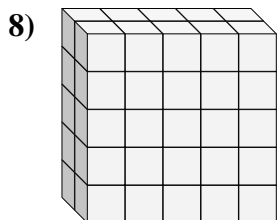
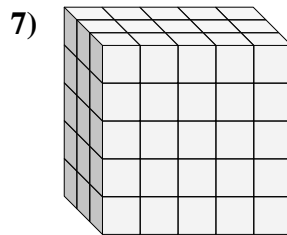
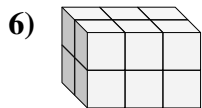
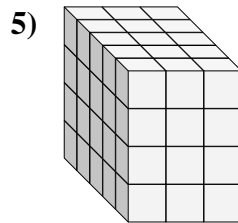
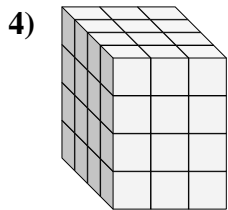
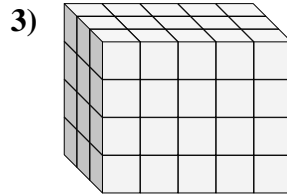
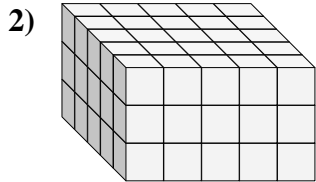
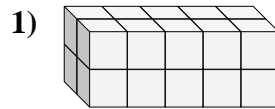
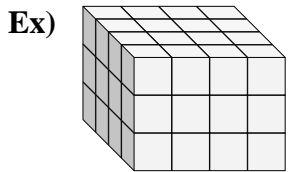
7. _____

8. _____

9. _____



Find the length, width and height of the rectangular prism. Then find the volume.



Answers

Ex. 4 4 3 48

1. 2 5 2 20

2. 5 5 3 75

3. 3 5 4 60

4. 4 3 4 48

5. 5 3 4 60

6. 2 3 2 12

7. 3 5 5 75

8. 2 5 5 50

9. 4 4 4 64