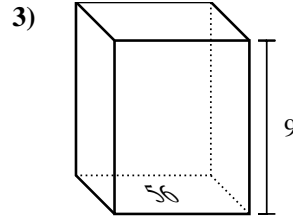
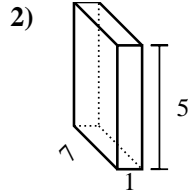
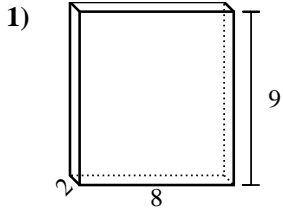




Find the volume of each rectangular prism. Units are in cm (not to scale). Remember $V = BH$ and $V = L \times W \times H$

Answers

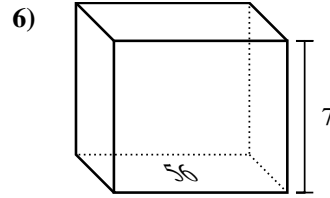
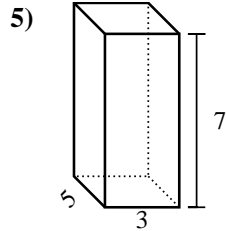
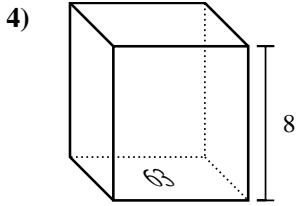


1. _____

2. _____

3. _____

4. _____

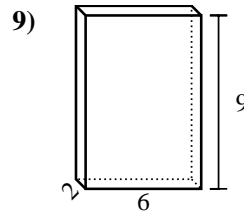
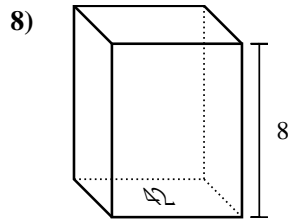
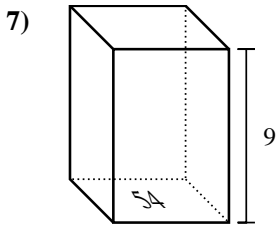


5. _____

6. _____

7. _____

8. _____

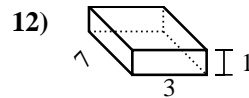
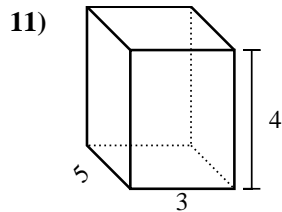
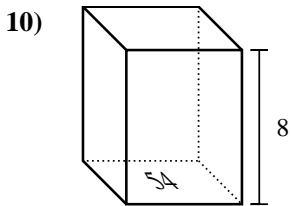


9. _____

10. _____

11. _____

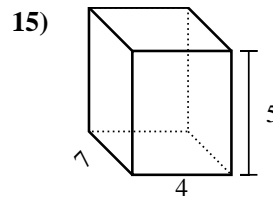
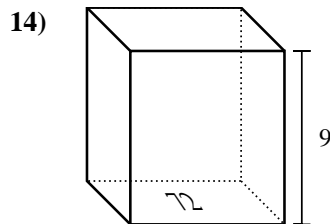
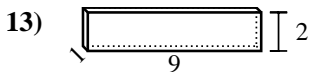
12. _____



13. _____

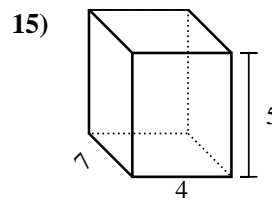
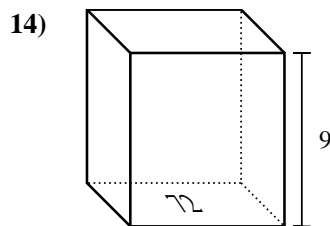
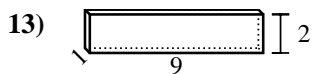
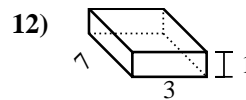
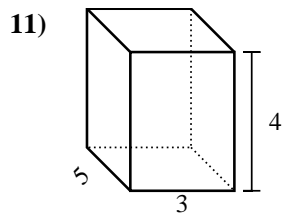
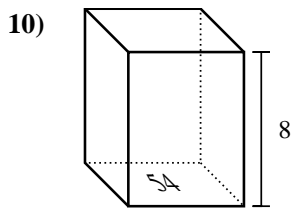
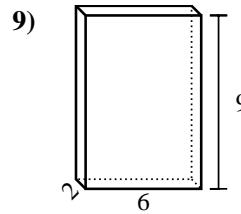
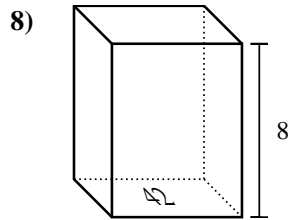
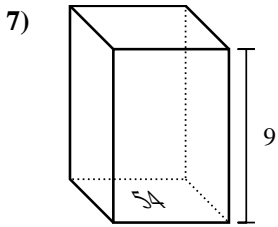
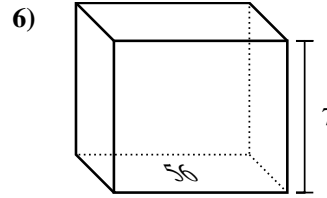
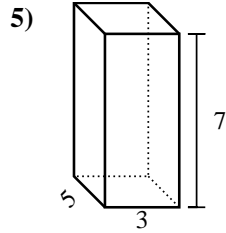
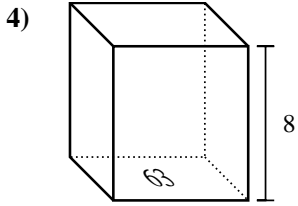
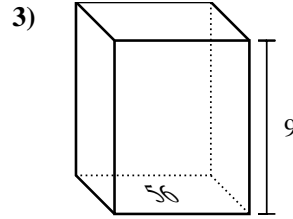
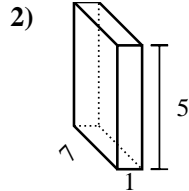
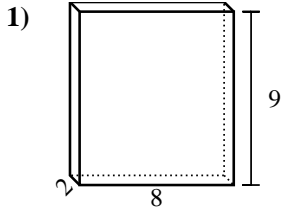
14. _____

15. _____





Find the volume of each rectangular prism. Units are in cm (not to scale). Remember $V = BH$ and $V = L \times W \times H$



Answers

1. 144 cm³

2. 35 cm³

3. 504 cm³

4. 504 cm³

5. 105 cm³

6. 392 cm³

7. 486 cm³

8. 336 cm³

9. 108 cm³

10. 432 cm³

11. 60 cm³

12. 21 cm³

13. 18 cm³

14. 648 cm³

15. 140 cm³