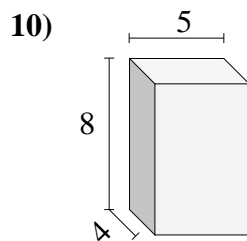
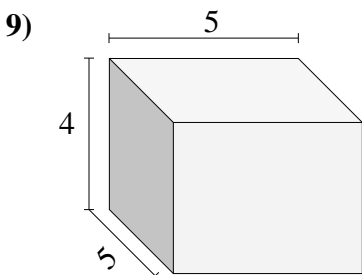
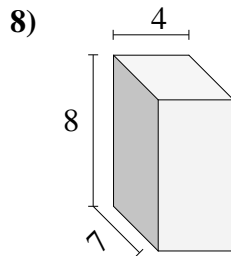
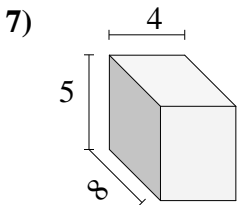
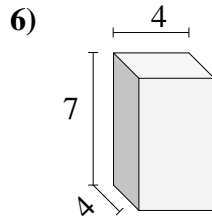
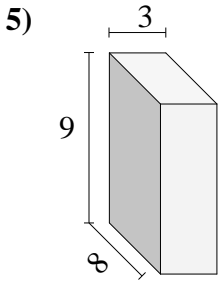
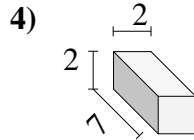
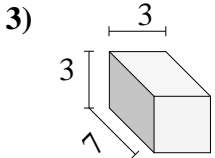
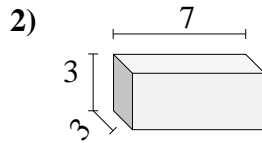
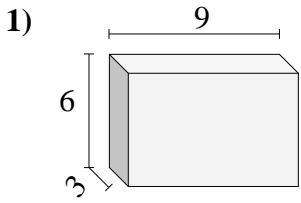




Find the volume of each of the rectangular prisms. Measured in cm (not to scale).

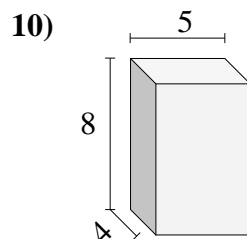
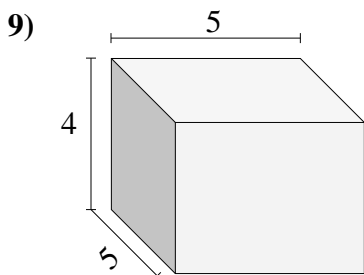
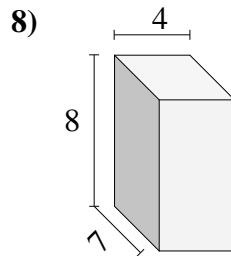
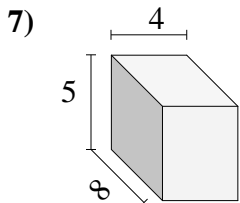
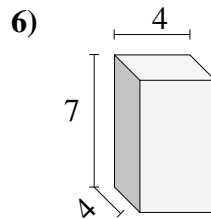
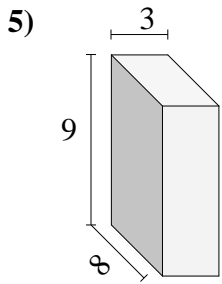
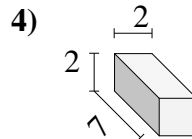
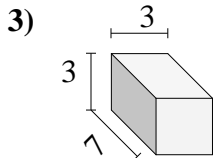
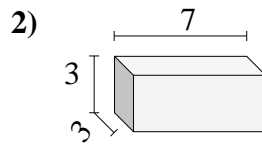
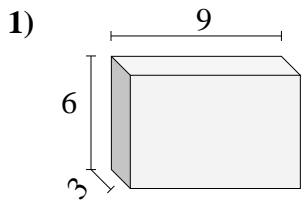


Answers

- 1. _____
- 2. _____
- 3. _____
- 4. _____
- 5. _____
- 6. _____
- 7. _____
- 8. _____
- 9. _____
- 10. _____

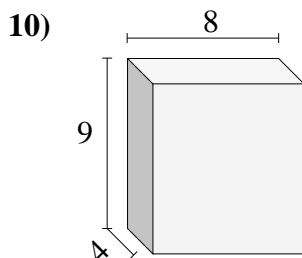
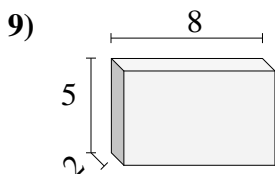
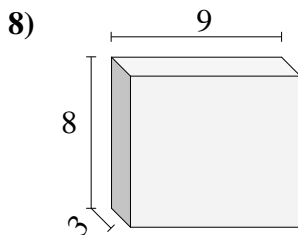
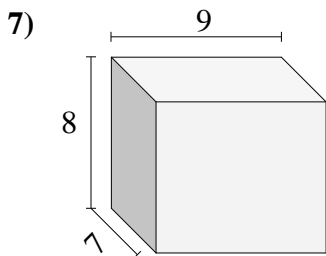
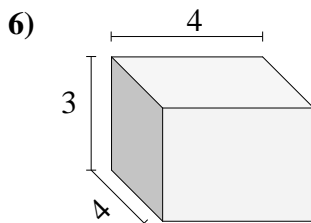
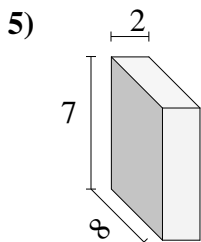
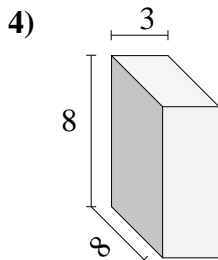
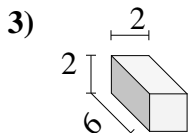
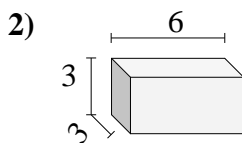
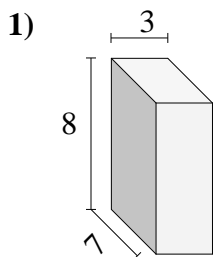


Find the volume of each of the rectangular prisms. Measured in cm (not to scale).

Answers1. 1622. 633. 634. 285. 2166. 1127. 1608. 2249. 10010. 160



Find the volume of each of the rectangular prisms. Measured in cm (not to scale).

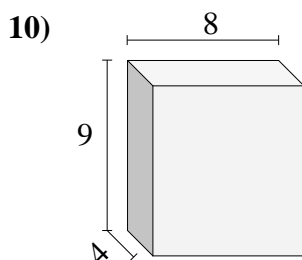
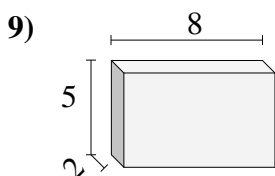
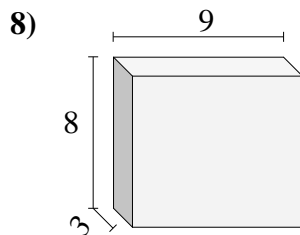
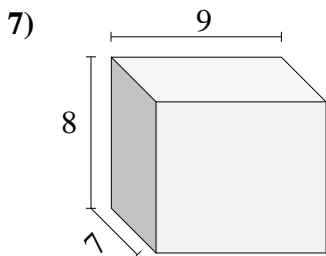
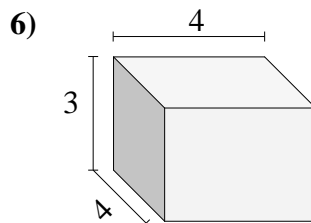
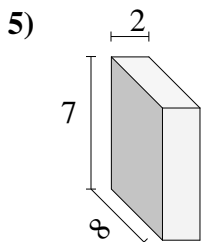
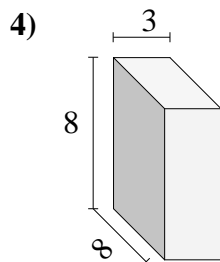
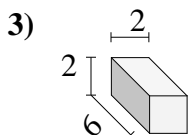
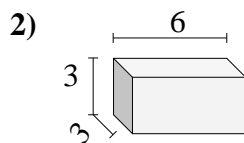
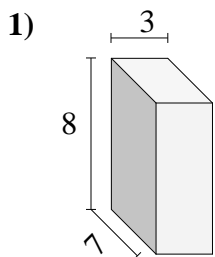


Answers

- 1. _____
- 2. _____
- 3. _____
- 4. _____
- 5. _____
- 6. _____
- 7. _____
- 8. _____
- 9. _____
- 10. _____

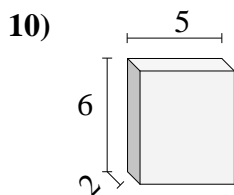
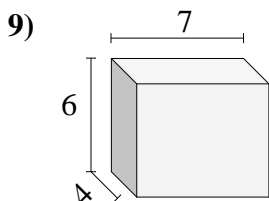
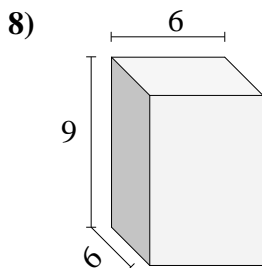
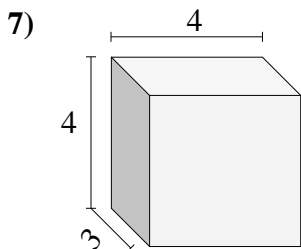
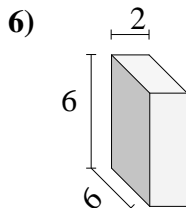
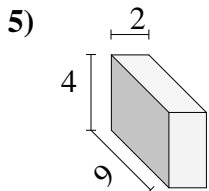
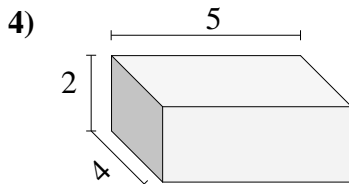
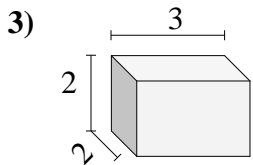
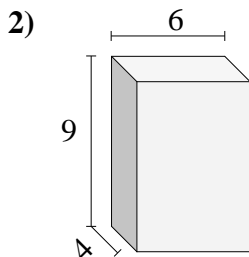
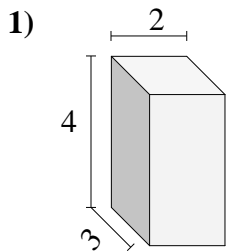


Find the volume of each of the rectangular prisms. Measured in cm (not to scale).

Answers1. 1682. 543. 244. 1925. 1126. 487. 5048. 2169. 8010. 288



Find the volume of each of the rectangular prisms. Measured in cm (not to scale).

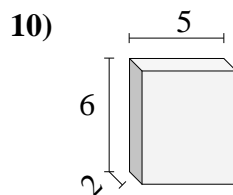
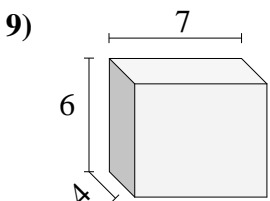
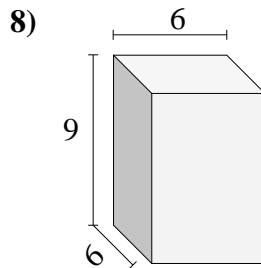
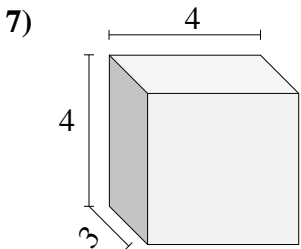
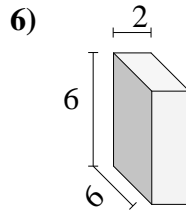
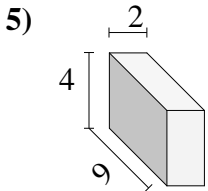
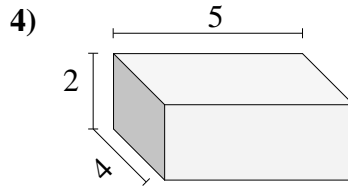
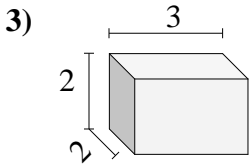
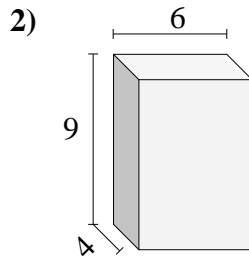
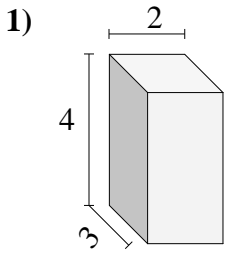


Answers

- 1. _____
- 2. _____
- 3. _____
- 4. _____
- 5. _____
- 6. _____
- 7. _____
- 8. _____
- 9. _____
- 10. _____



Find the volume of each of the rectangular prisms. Measured in cm (not to scale).



Answers

1. 24

2. 216

3. 12

4. 40

5. 72

6. 72

7. 48

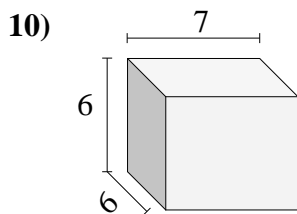
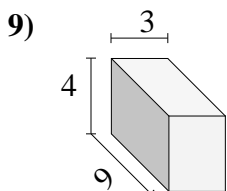
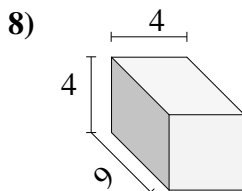
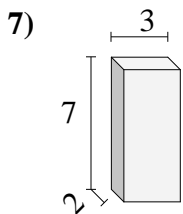
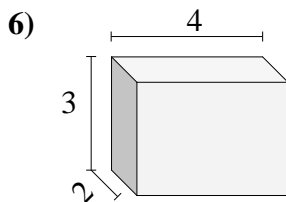
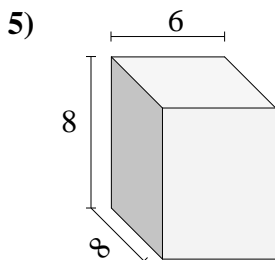
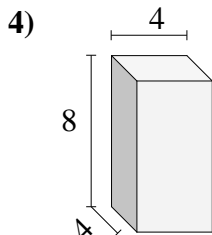
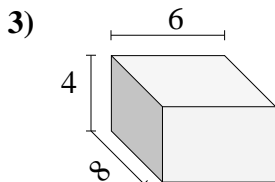
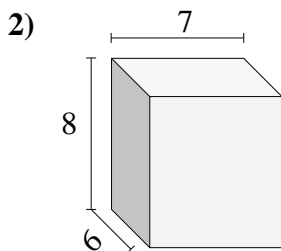
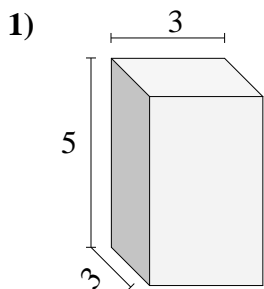
8. 324

9. 168

10. 60



Find the volume of each of the rectangular prisms. Measured in cm (not to scale).

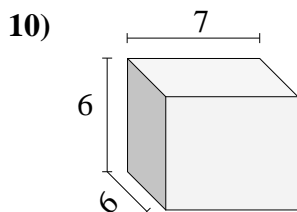
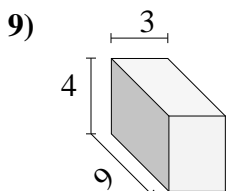
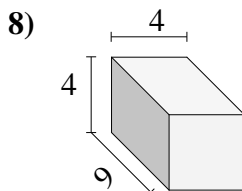
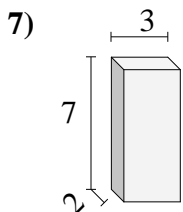
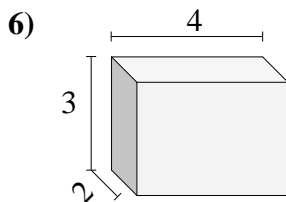
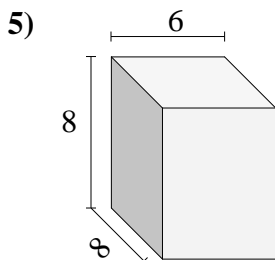
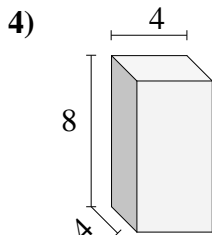
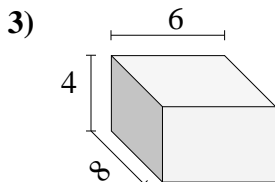
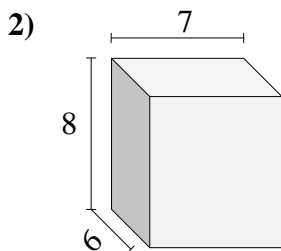
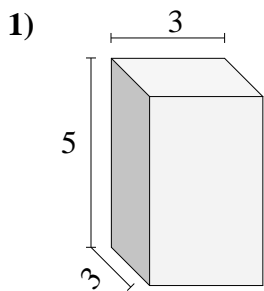


Answers

- 1. _____
- 2. _____
- 3. _____
- 4. _____
- 5. _____
- 6. _____
- 7. _____
- 8. _____
- 9. _____
- 10. _____



Find the volume of each of the rectangular prisms. Measured in cm (not to scale).



Answers

1. 45

2. 336

3. 192

4. 128

5. 384

6. 24

7. 42

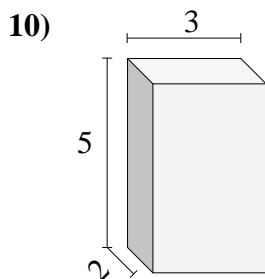
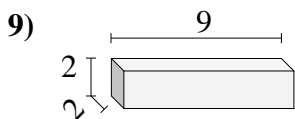
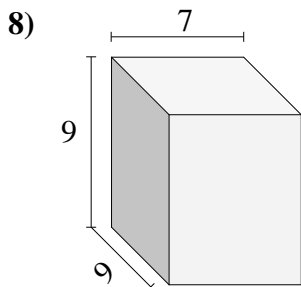
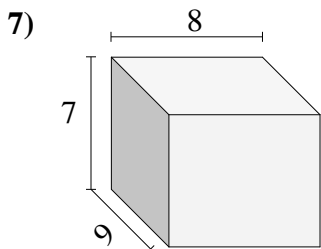
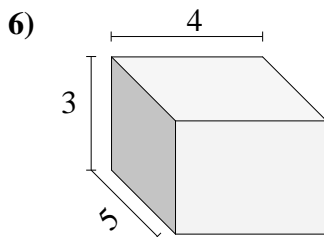
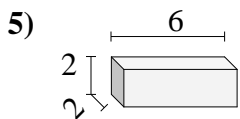
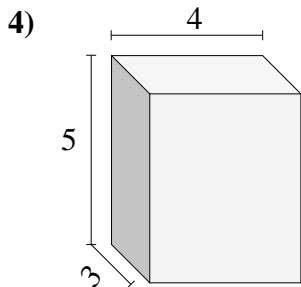
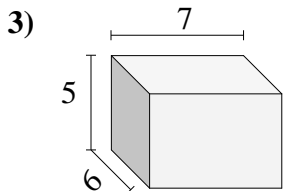
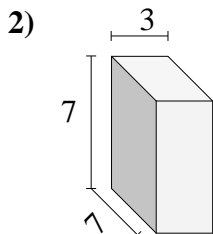
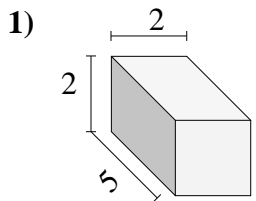
8. 144

9. 108

10. 252



Find the volume of each of the rectangular prisms. Measured in cm (not to scale).

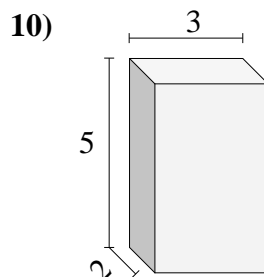
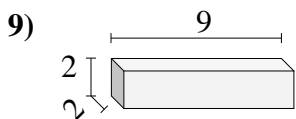
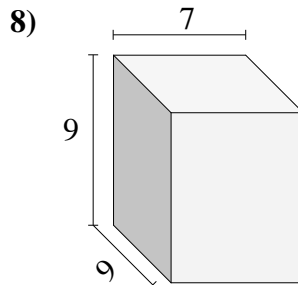
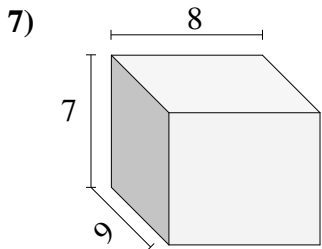
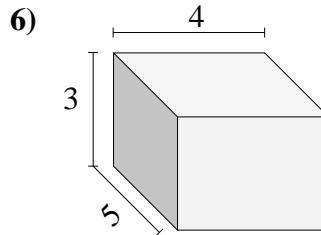
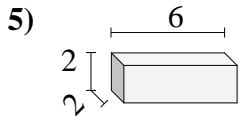
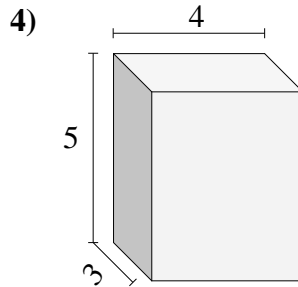
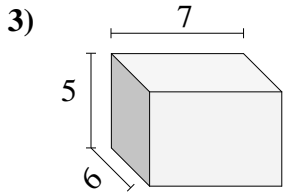
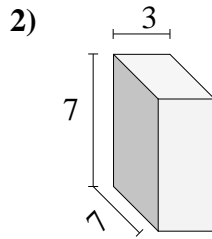
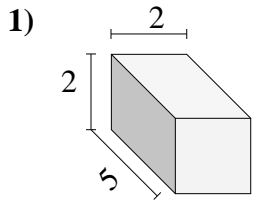


Answers

- 1. _____
- 2. _____
- 3. _____
- 4. _____
- 5. _____
- 6. _____
- 7. _____
- 8. _____
- 9. _____
- 10. _____



Find the volume of each of the rectangular prisms. Measured in cm (not to scale).

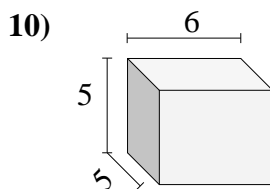
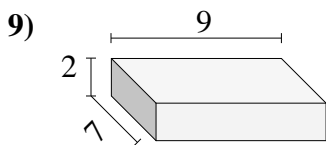
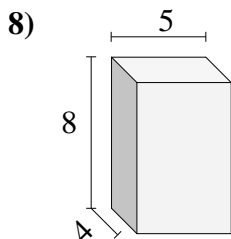
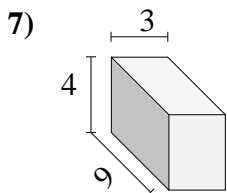
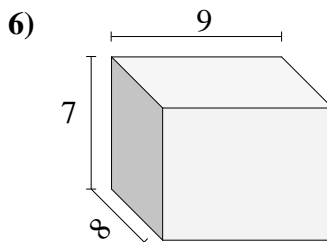
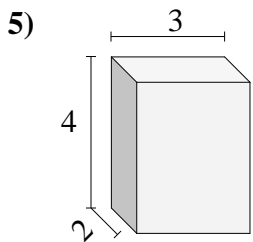
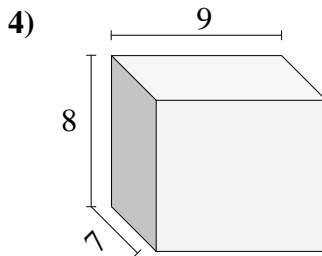
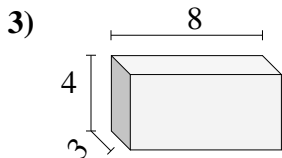
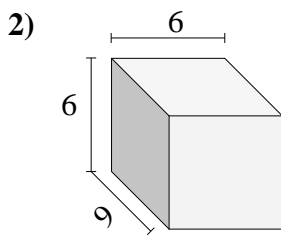
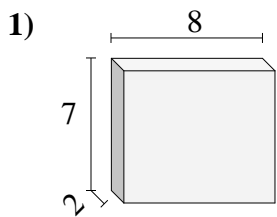


Answers

- 1. 20
- 2. 147
- 3. 210
- 4. 60
- 5. 24
- 6. 60
- 7. 504
- 8. 567
- 9. 36
- 10. 30



Find the volume of each of the rectangular prisms. Measured in cm (not to scale).

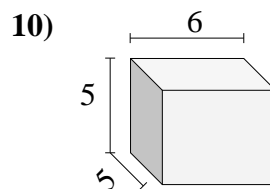
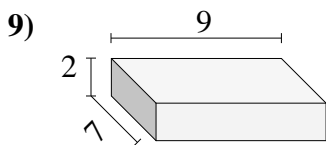
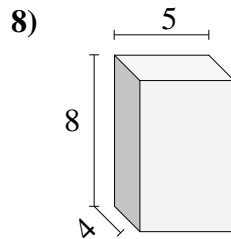
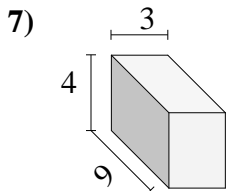
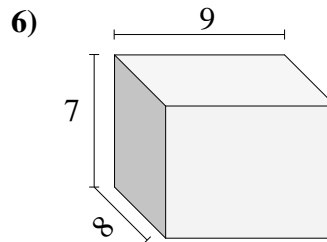
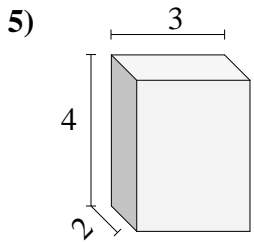
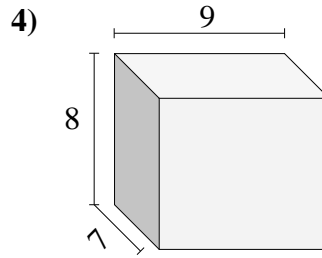
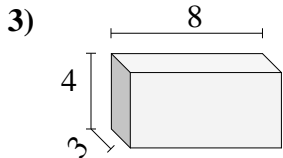
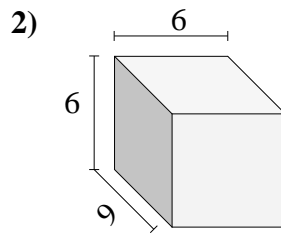
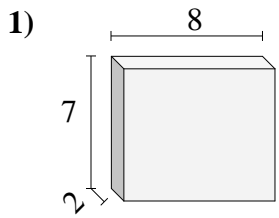


Answers

- 1. _____
- 2. _____
- 3. _____
- 4. _____
- 5. _____
- 6. _____
- 7. _____
- 8. _____
- 9. _____
- 10. _____

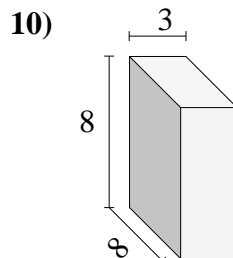
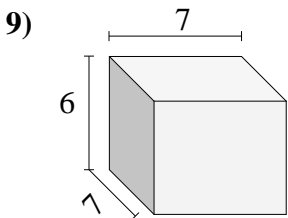
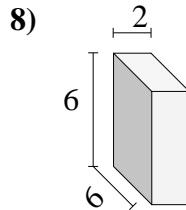
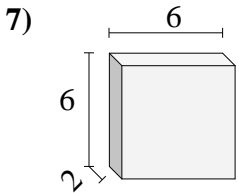
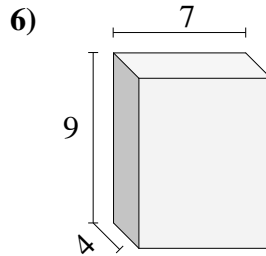
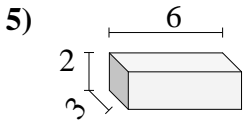
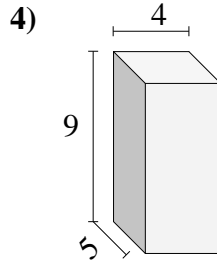
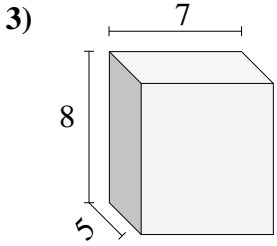
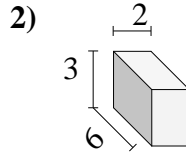
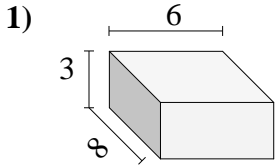


Find the volume of each of the rectangular prisms. Measured in cm (not to scale).

Answers1. 1122. 3243. 964. 5045. 246. 5047. 1088. 1609. 12610. 150



Find the volume of each of the rectangular prisms. Measured in cm (not to scale).

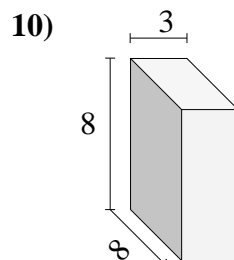
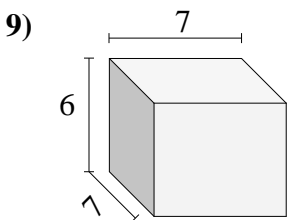
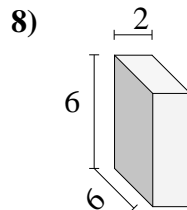
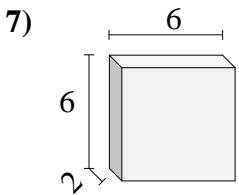
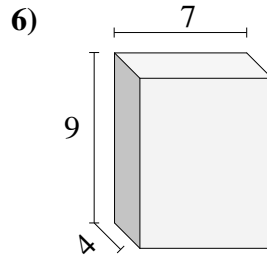
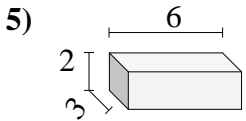
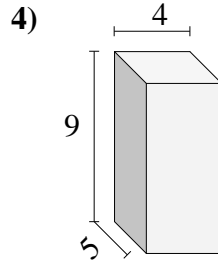
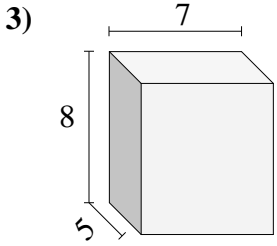
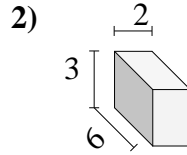
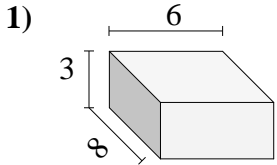


Answers

- 1. _____
- 2. _____
- 3. _____
- 4. _____
- 5. _____
- 6. _____
- 7. _____
- 8. _____
- 9. _____
- 10. _____

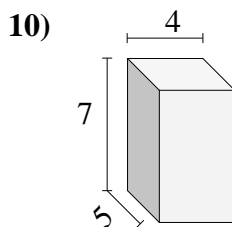
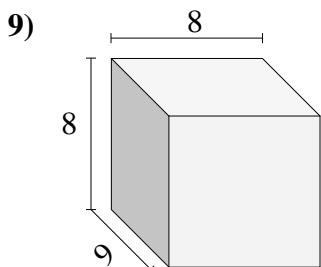
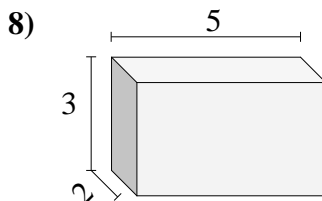
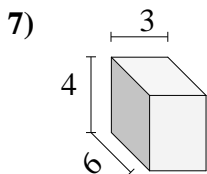
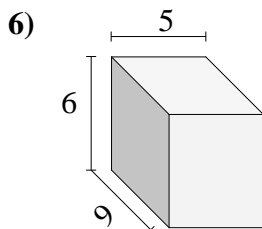
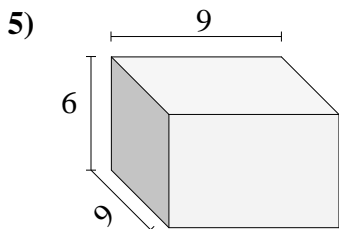
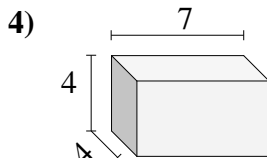
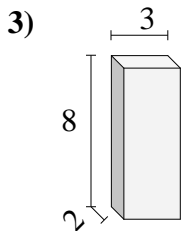
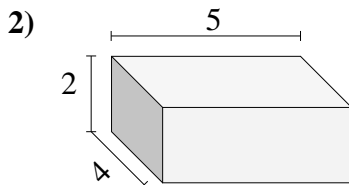
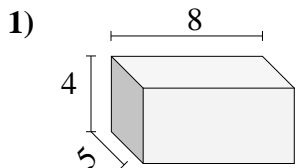


Find the volume of each of the rectangular prisms. Measured in cm (not to scale).

Answers1. 1442. 363. 2804. 1805. 366. 2527. 728. 729. 29410. 192



Find the volume of each of the rectangular prisms. Measured in cm (not to scale).

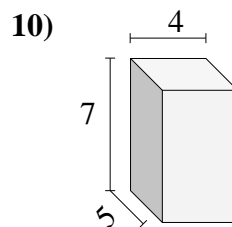
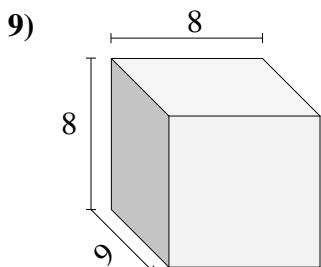
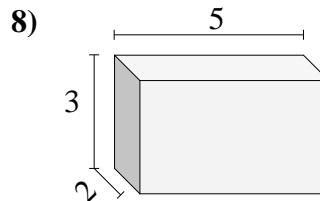
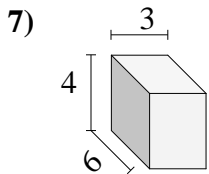
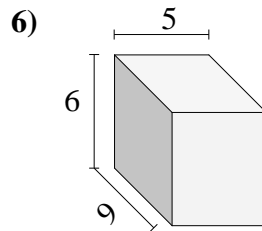
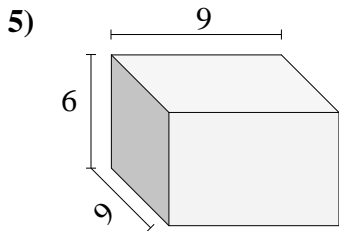
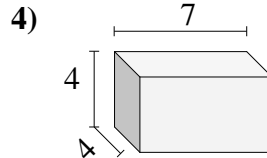
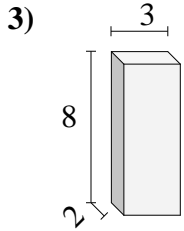
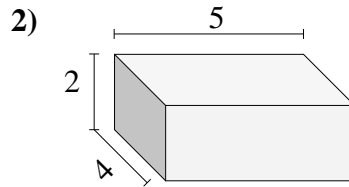
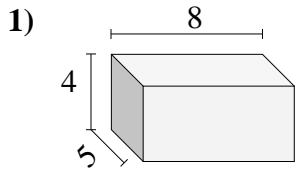


Answers

- 1. _____
- 2. _____
- 3. _____
- 4. _____
- 5. _____
- 6. _____
- 7. _____
- 8. _____
- 9. _____
- 10. _____

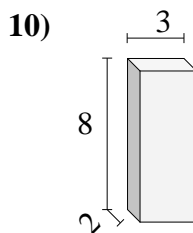
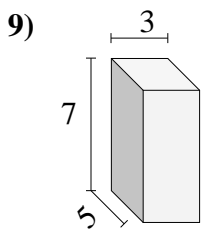
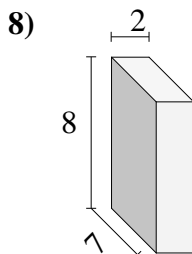
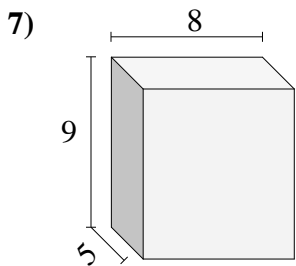
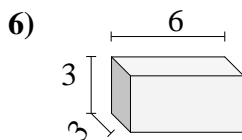
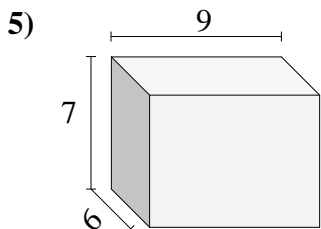
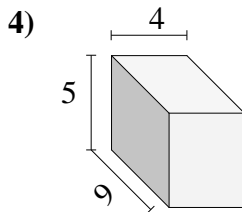
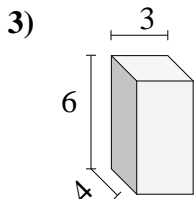
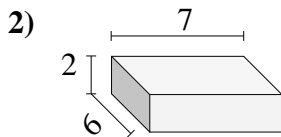
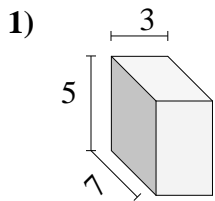


Find the volume of each of the rectangular prisms. Measured in cm (not to scale).

**Answers**1. **160**2. **40**3. **48**4. **112**5. **486**6. **270**7. **72**8. **30**9. **576**10. **140**



Find the volume of each of the rectangular prisms. Measured in cm (not to scale).

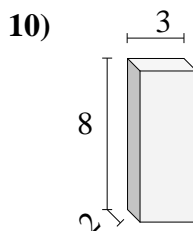
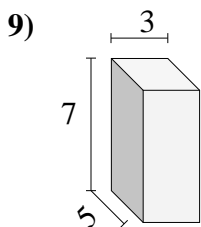
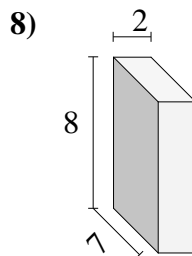
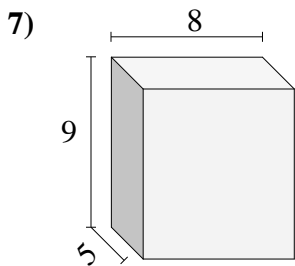
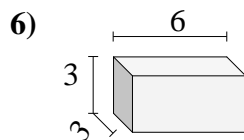
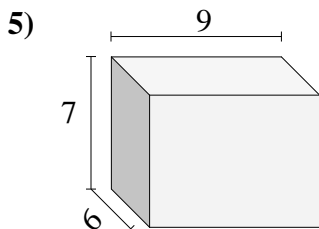
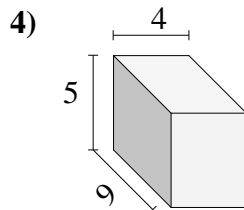
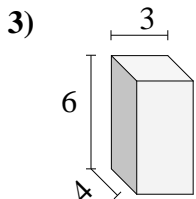
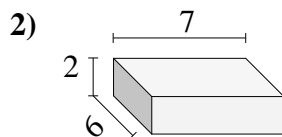
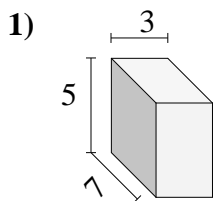


Answers

- 1. _____
- 2. _____
- 3. _____
- 4. _____
- 5. _____
- 6. _____
- 7. _____
- 8. _____
- 9. _____
- 10. _____

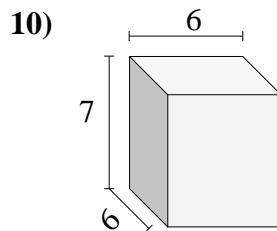
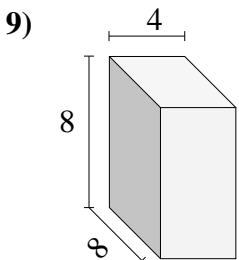
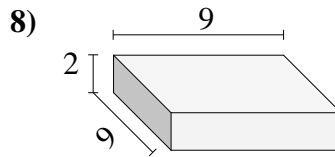
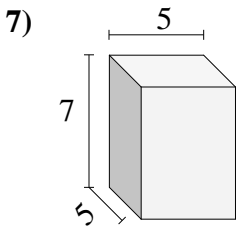
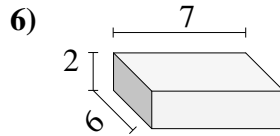
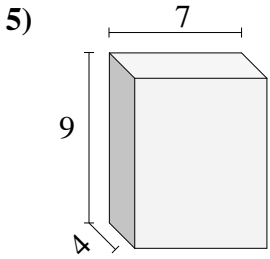
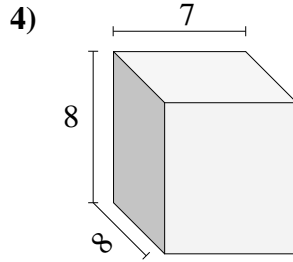
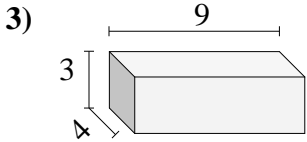
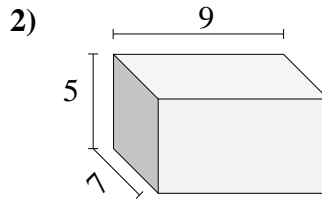
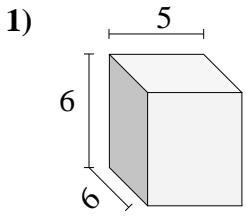


Find the volume of each of the rectangular prisms. Measured in cm (not to scale).

Answers1. **105**2. **84**3. **72**4. **180**5. **378**6. **54**7. **360**8. **112**9. **105**10. **48**



Find the volume of each of the rectangular prisms. Measured in cm (not to scale).

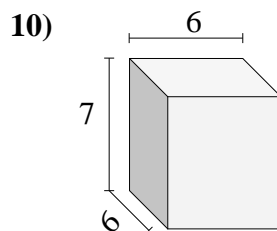
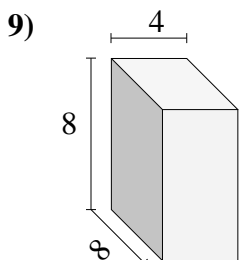
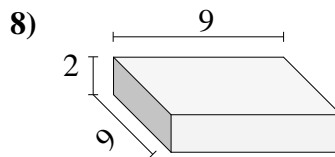
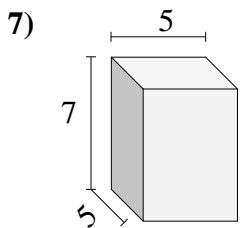
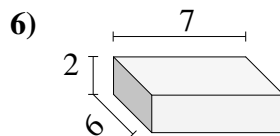
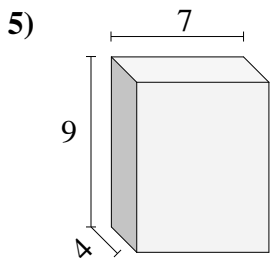
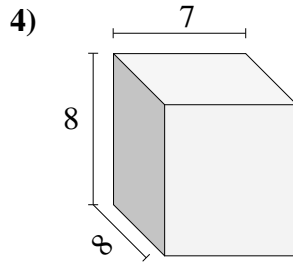
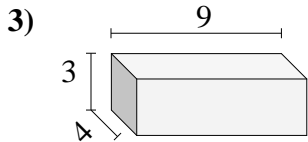
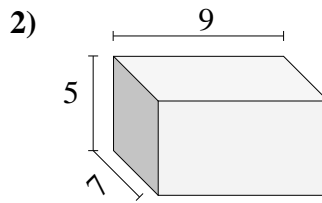
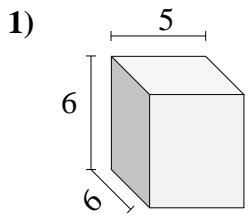


Answers

- 1. _____
- 2. _____
- 3. _____
- 4. _____
- 5. _____
- 6. _____
- 7. _____
- 8. _____
- 9. _____
- 10. _____



Find the volume of each of the rectangular prisms. Measured in cm (not to scale).

Answers1. 1802. 3153. 1084. 4485. 2526. 847. 1758. 1629. 25610. 252