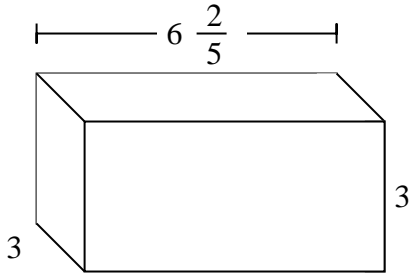


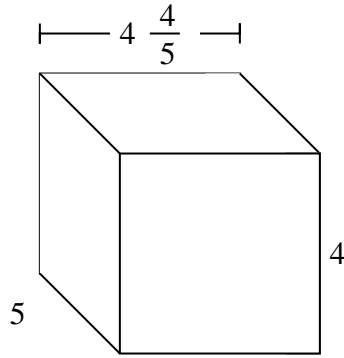


Fill each rectangular prism with cubes to determine the volume. Each prism's unit is measured in cm (not to scale).

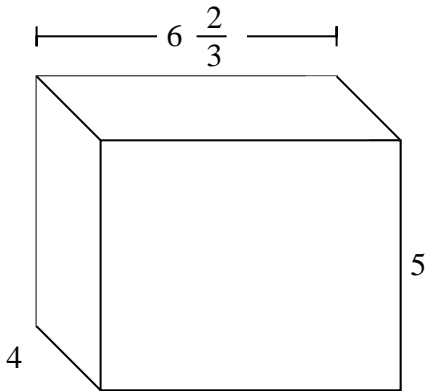
Ex)



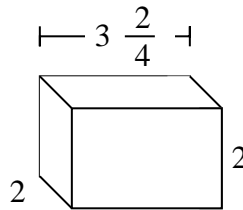
1)



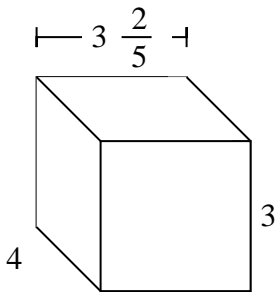
2)



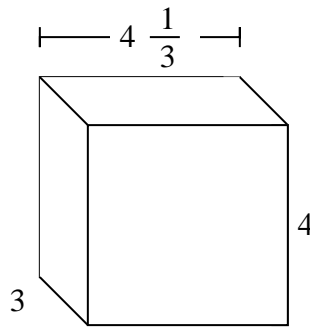
3)



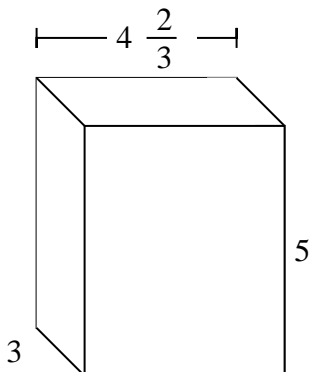
4)



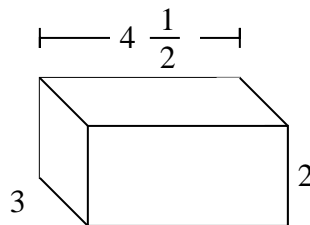
5)



6)



7)

AnswersEx.  $57\frac{3}{5}$  cm

1. \_\_\_\_\_

2. \_\_\_\_\_

3. \_\_\_\_\_

4. \_\_\_\_\_

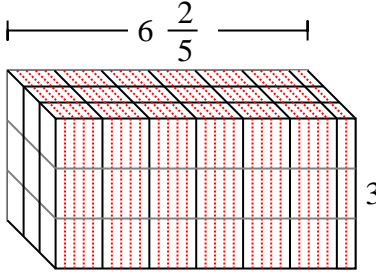
5. \_\_\_\_\_

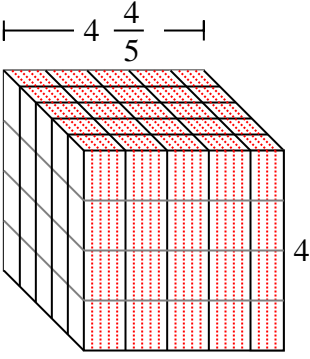
6. \_\_\_\_\_

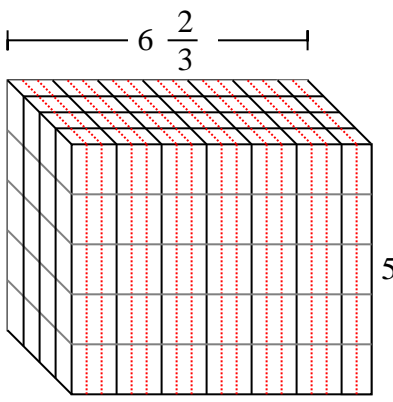
7. \_\_\_\_\_

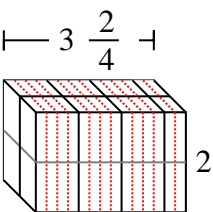


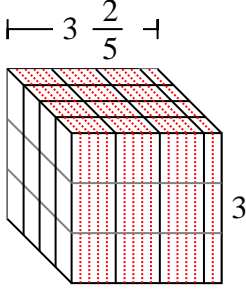
Fill each rectangular prism with cubes to determine the volume. Each prism's unit is measured in cm (not to scale).

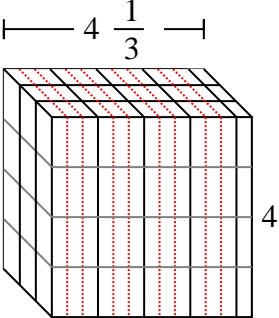
Ex) 

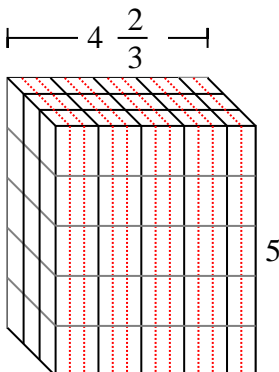
1) 

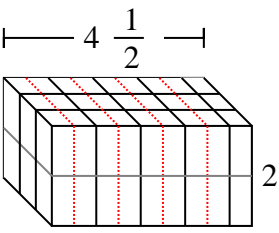
2) 

3) 

4) 

5) 

6) 

7) 

Answers

- Ex. 57 <sup>3</sup>/<sub>5</sub> cm
1. 96 cm
2. 133 <sup>1</sup>/<sub>3</sub> cm
3. 14 cm
4. 40 <sup>4</sup>/<sub>5</sub> cm
5. 52 cm
6. 70 cm
7. 27 cm