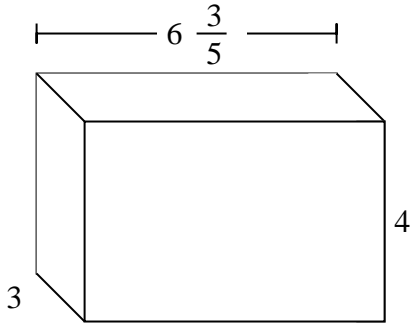


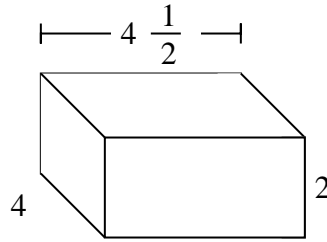


Fill each rectangular prism with cubes to determine the volume. Each prism's unit is measured in cm (not to scale).

Ex)



1)

Ex. $79\frac{1}{5}$ cm

1. _____

2. _____

3. _____

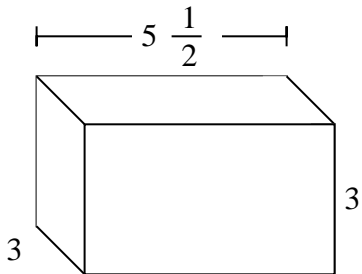
4. _____

5. _____

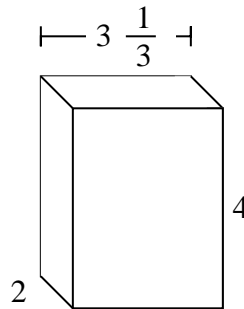
6. _____

7. _____

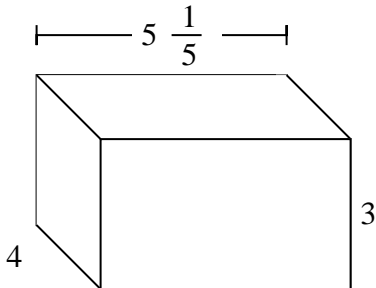
2)



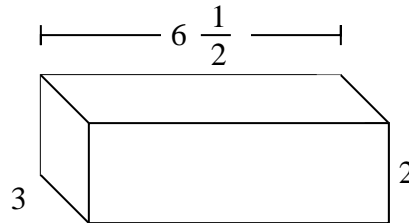
3)



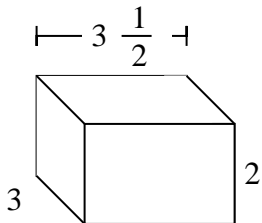
4)



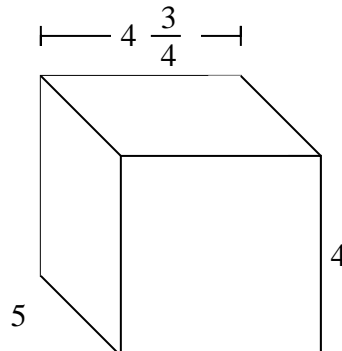
5)



6)



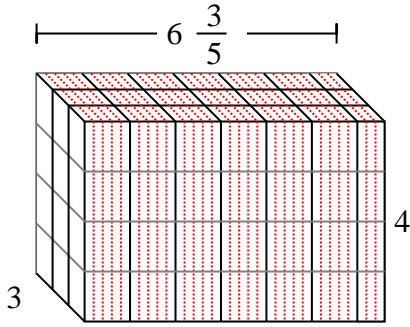
7)



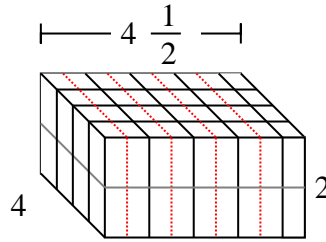


Fill each rectangular prism with cubes to determine the volume. Each prism's unit is measured in cm (not to scale).

Ex)



1)



Ex.

$79 \frac{1}{5} \text{ cm}$

1.

36 cm

2.

$49 \frac{1}{2} \text{ cm}$

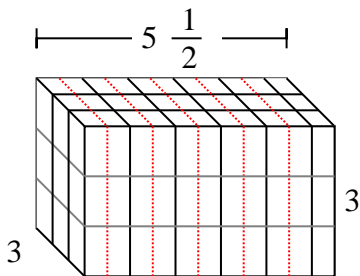
3.

$26 \frac{2}{3} \text{ cm}$

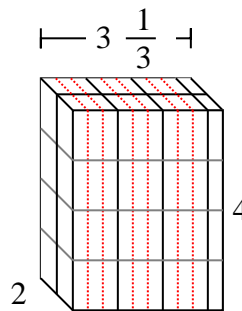
4.

$62 \frac{2}{5} \text{ cm}$

2)



3)



5.

39 cm

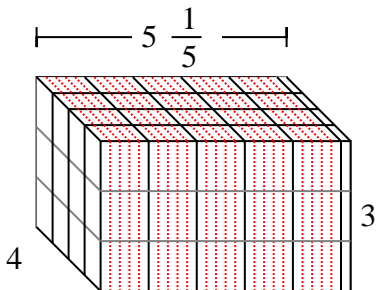
6.

21 cm

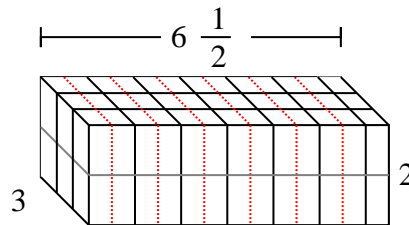
7.

95 cm

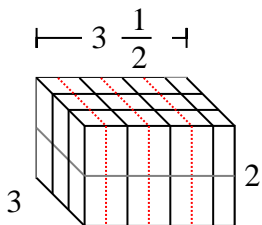
4)



5)



6)



7)

