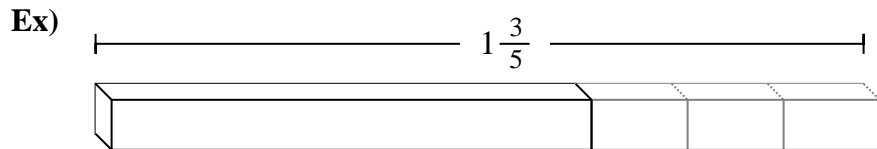




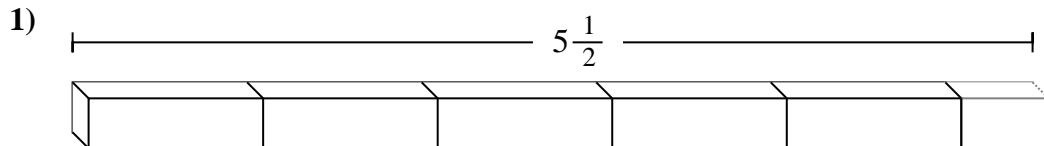
Determine the number of smaller fractional pieces that can be made from the larger piece.

Answers

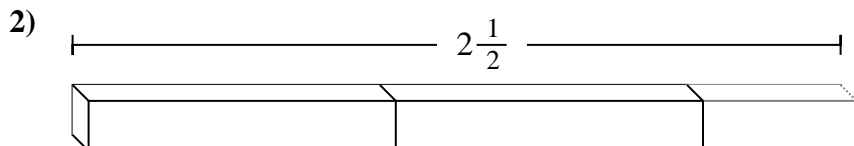


Ex. 8

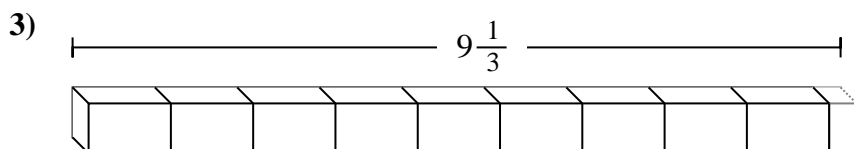
1. _____



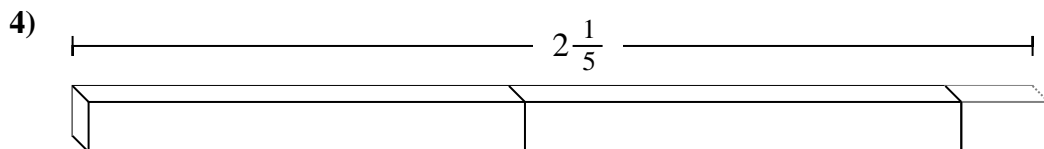
2. _____



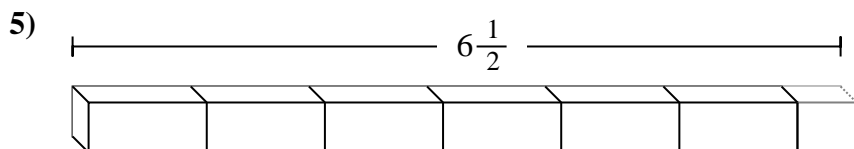
3. _____



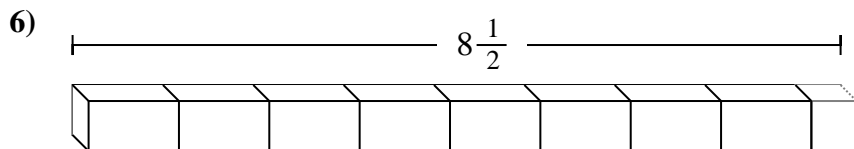
4. _____



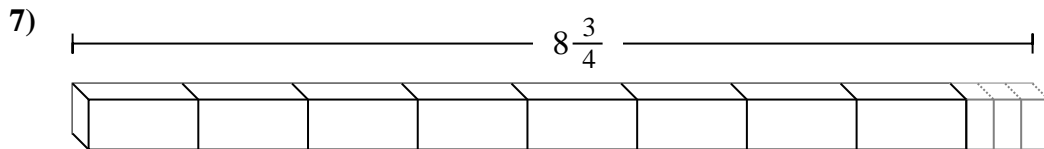
5. _____



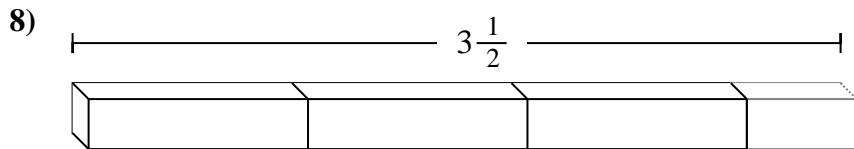
6. _____



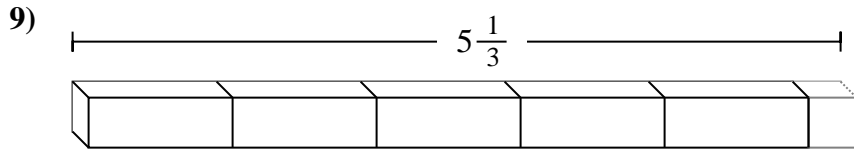
7. _____



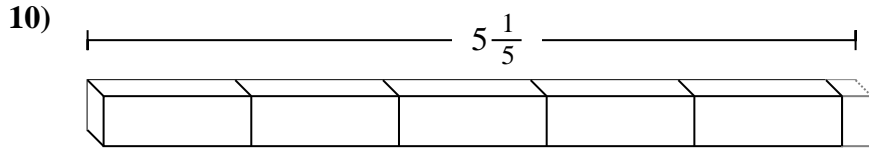
8. _____



9. _____



10. _____





Determine the number of smaller fractional pieces that can be made from the larger piece.

Answers

Ex) $1\frac{3}{5}$

1) $5\frac{1}{2}$

2) $2\frac{1}{2}$

3) $9\frac{1}{3}$

4) $2\frac{1}{5}$

5) $6\frac{1}{2}$

6) $8\frac{1}{2}$

7) $8\frac{3}{4}$

8) $3\frac{1}{2}$

9) $5\frac{1}{3}$

10) $5\frac{1}{5}$

- Ex. 8
1. 11
2. 5
3. 28
4. 11
5. 13
6. 17
7. 35
8. 7
9. 16
10. 26