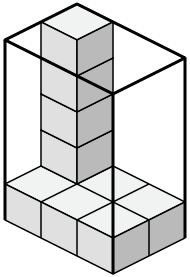


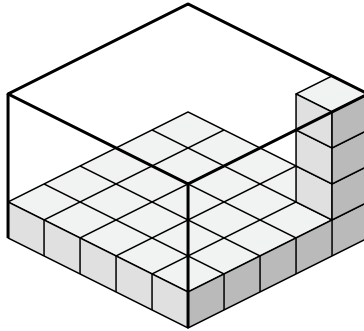


Create an expression to determine the volume of each box.

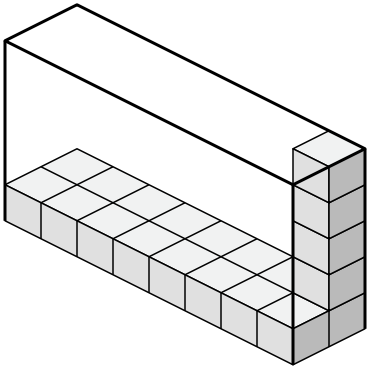
1)



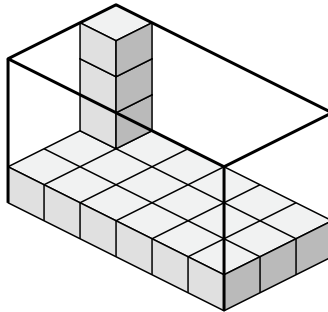
2)



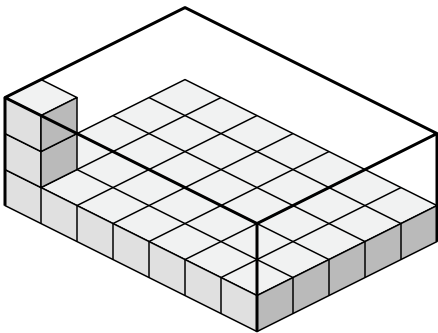
3)



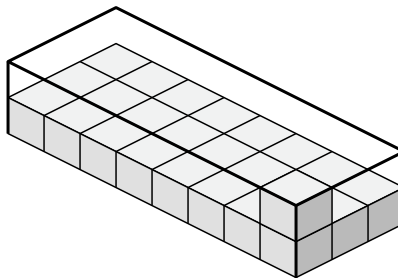
4)



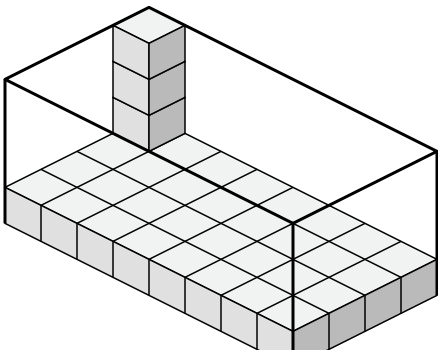
5)



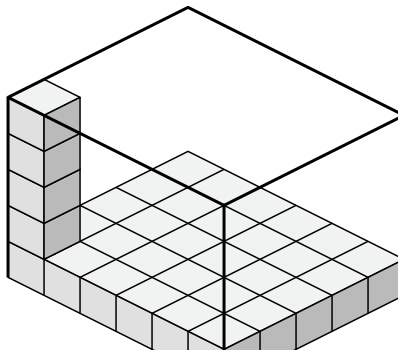
6)



7)



8)



Answers

1. \_\_\_\_\_

2. \_\_\_\_\_

3. \_\_\_\_\_

4. \_\_\_\_\_

5. \_\_\_\_\_

6. \_\_\_\_\_

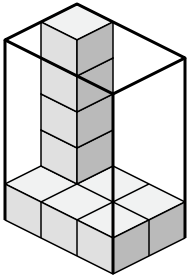
7. \_\_\_\_\_

8. \_\_\_\_\_

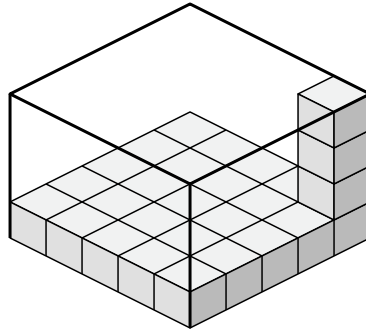


Create an expression to determine the volume of each box.

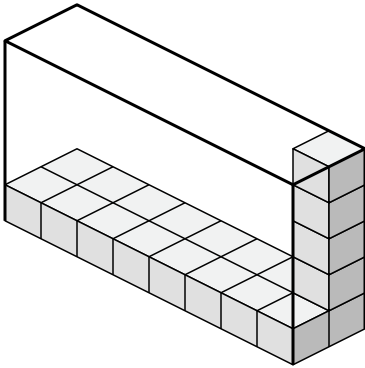
1)



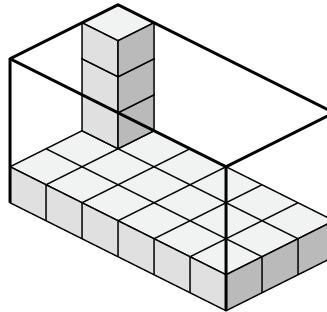
2)



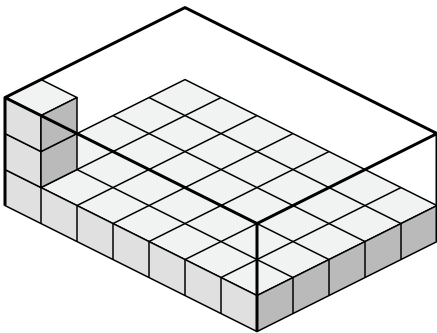
3)



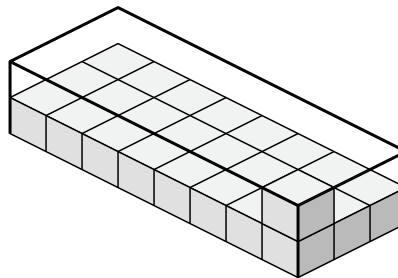
4)



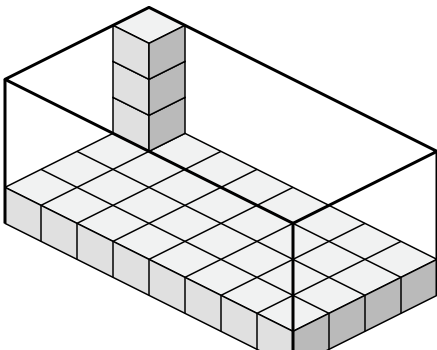
5)



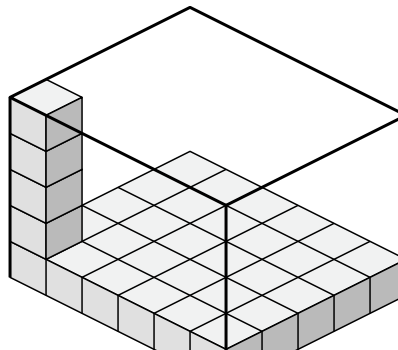
6)



7)



8)



Answers

1.  $3 \times 2 \times 5$

2.  $5 \times 5 \times 4$

3.  $8 \times 2 \times 5$

4.  $6 \times 3 \times 4$

5.  $7 \times 5 \times 3$

6.  $8 \times 3 \times 2$

7.  $8 \times 4 \times 4$

8.  $6 \times 5 \times 5$