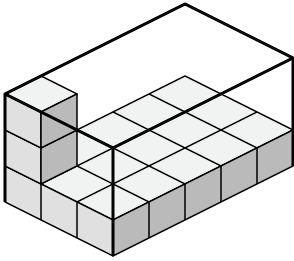




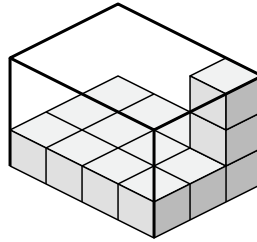
Create an expression to determine the volume of each box.

Answers

1)



2)



1. \_\_\_\_\_

2. \_\_\_\_\_

3. \_\_\_\_\_

4. \_\_\_\_\_

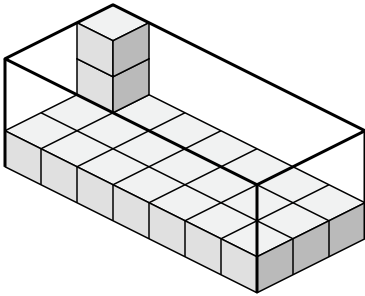
5. \_\_\_\_\_

6. \_\_\_\_\_

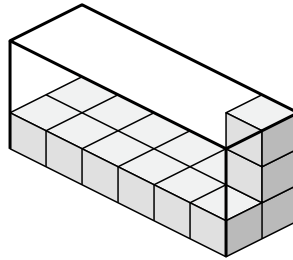
7. \_\_\_\_\_

8. \_\_\_\_\_

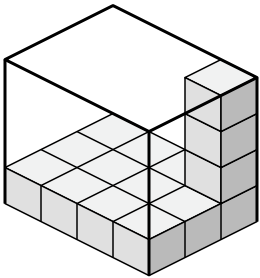
3)



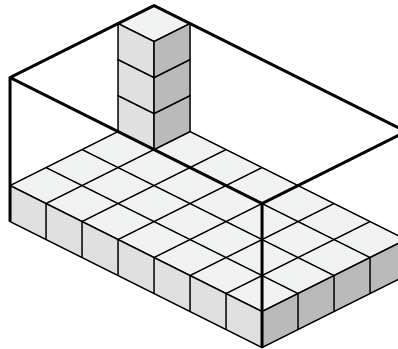
4)



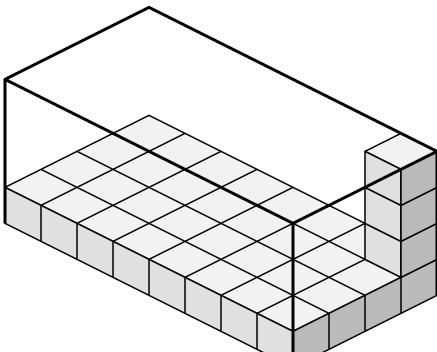
5)



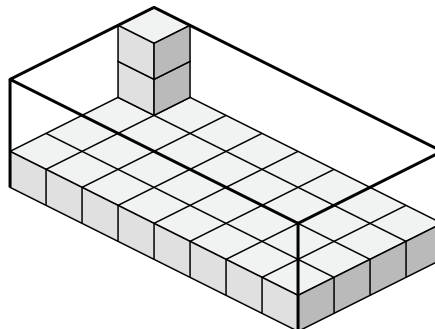
6)



7)



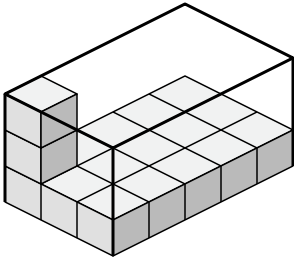
8)



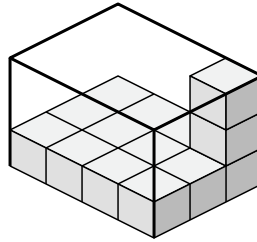


Create an expression to determine the volume of each box.

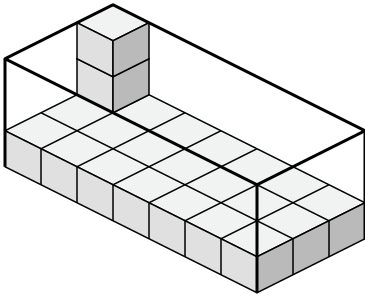
1)



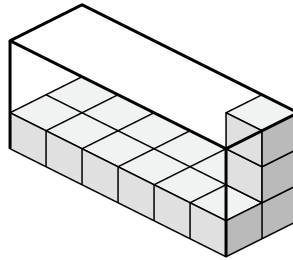
2)



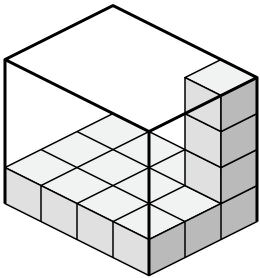
3)



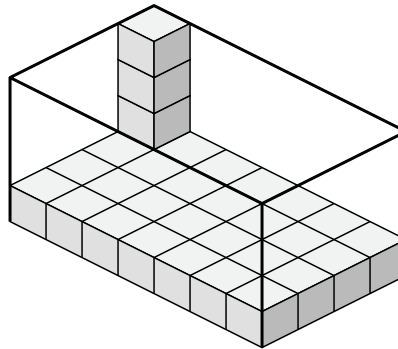
4)



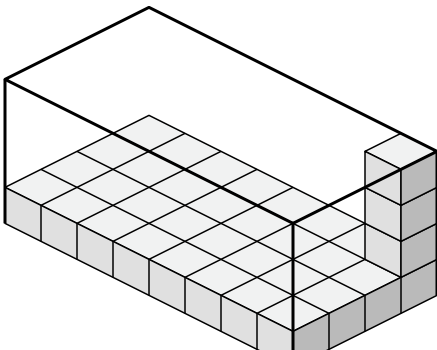
5)



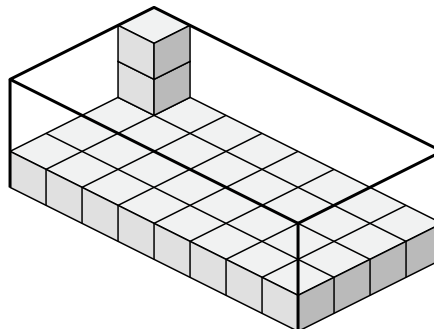
6)



7)



8)



Answers

1. 3×5×3

2. 4×3×3

3. 7×3×3

4. 6×2×3

5. 4×3×4

6. 7×4×4

7. 8×4×4

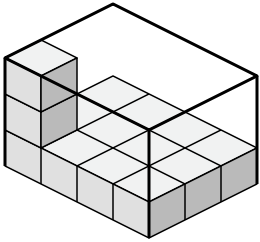
8. 8×4×3



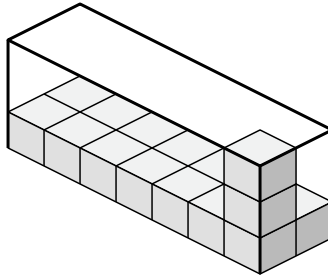
Create an expression to determine the volume of each box.

Answers

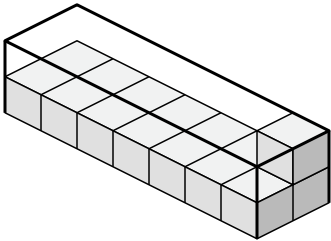
1)



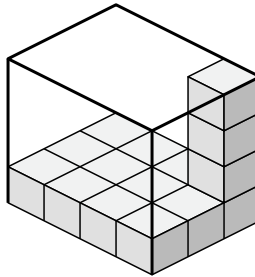
2)



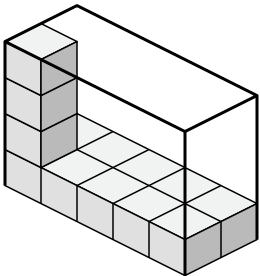
3)



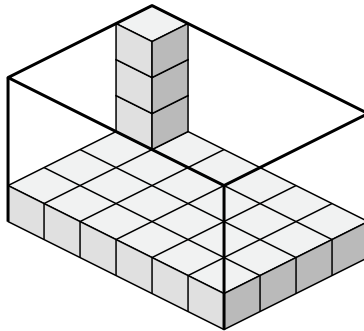
4)



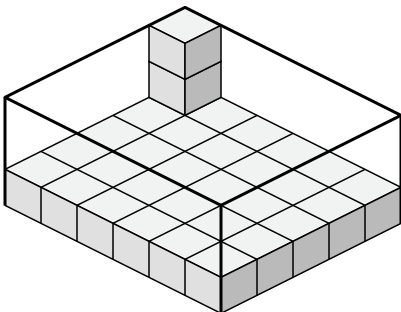
5)



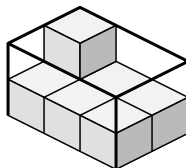
6)



7)



8)



1. \_\_\_\_\_

2. \_\_\_\_\_

3. \_\_\_\_\_

4. \_\_\_\_\_

5. \_\_\_\_\_

6. \_\_\_\_\_

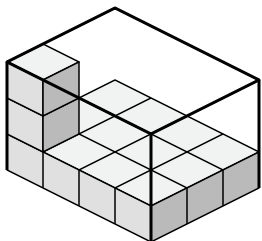
7. \_\_\_\_\_

8. \_\_\_\_\_

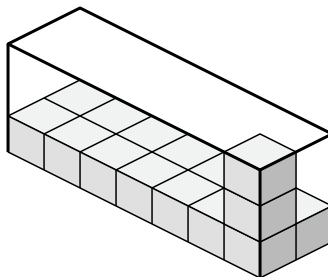


Create an expression to determine the volume of each box.

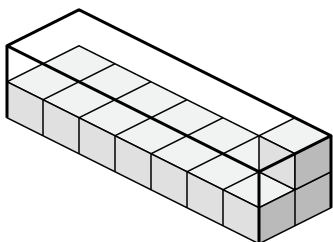
1)



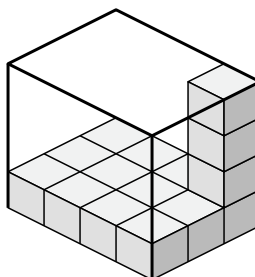
2)



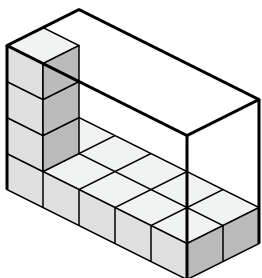
3)



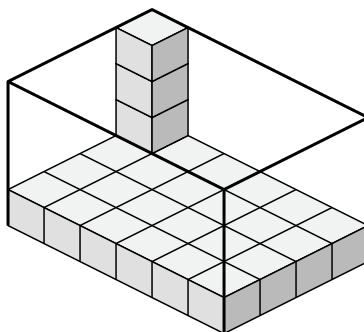
4)



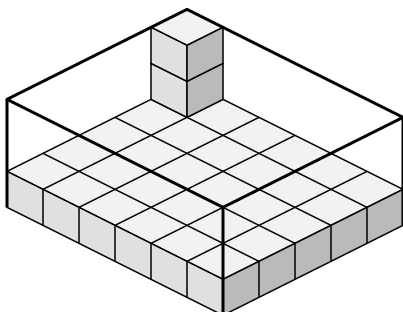
5)



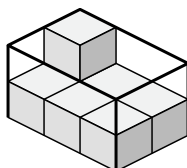
6)



7)



8)



Answers

1.  $4 \times 3 \times 3$

2.  $7 \times 2 \times 3$

3.  $7 \times 2 \times 2$

4.  $4 \times 3 \times 4$

5.  $5 \times 2 \times 4$

6.  $6 \times 4 \times 4$

7.  $6 \times 5 \times 3$

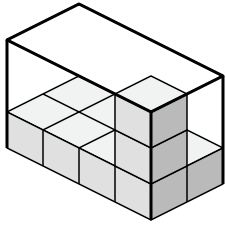
8.  $3 \times 2 \times 2$



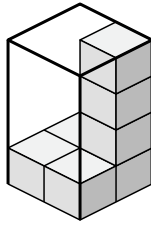
Create an expression to determine the volume of each box.

Answers

1)



2)



1. \_\_\_\_\_

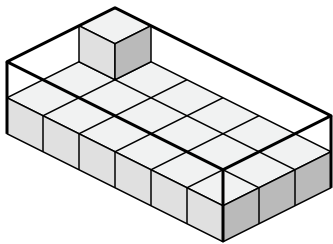
2. \_\_\_\_\_

3. \_\_\_\_\_

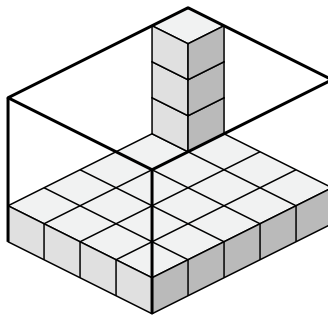
4. \_\_\_\_\_

5. \_\_\_\_\_

3)



4)

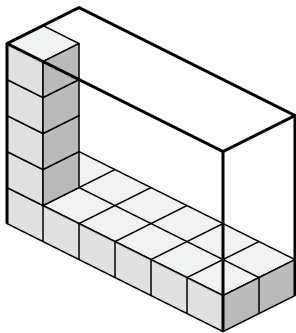


6. \_\_\_\_\_

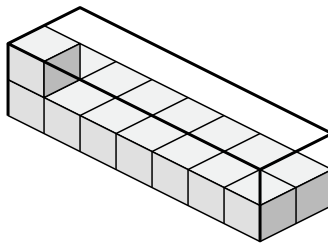
7. \_\_\_\_\_

8. \_\_\_\_\_

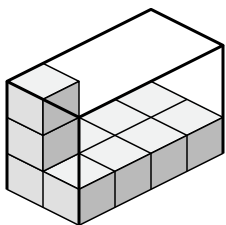
5)



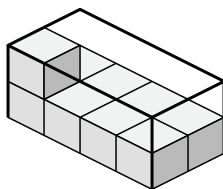
6)



7)



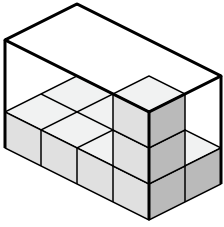
8)



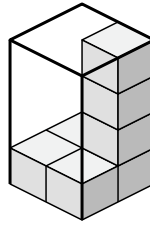


Create an expression to determine the volume of each box.

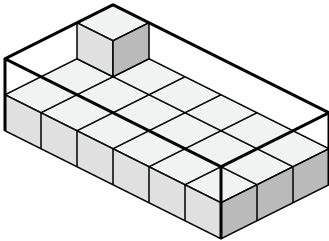
1)



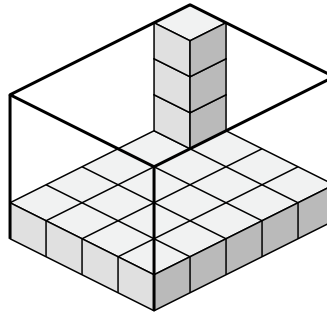
2)



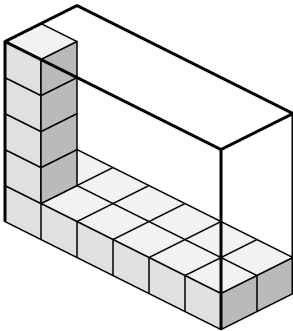
3)



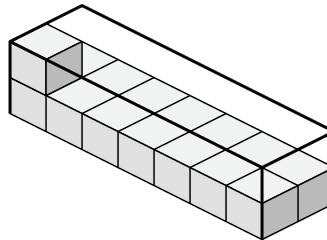
4)



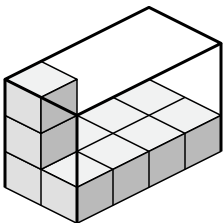
5)



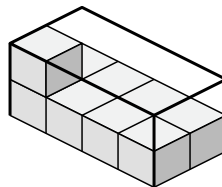
6)



7)



8)



Answers

1. 4×2×3

2. 2×2×4

3. 6×3×2

4. 4×5×4

5. 6×2×5

6. 7×2×2

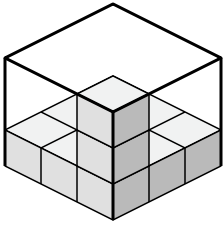
7. 2×4×3

8. 4×2×2

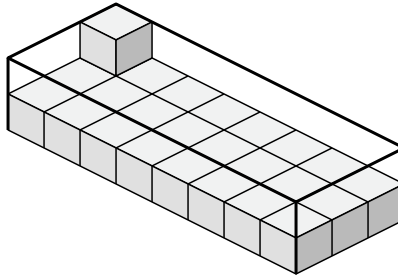


Create an expression to determine the volume of each box.

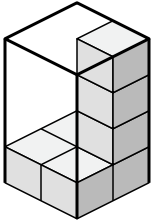
1)



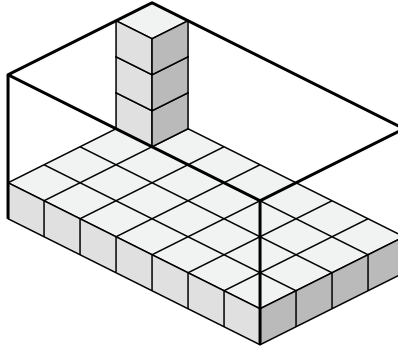
2)



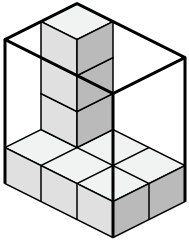
3)



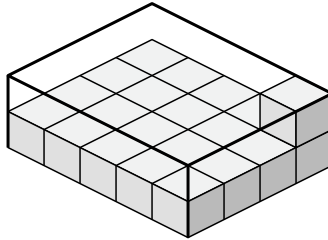
4)



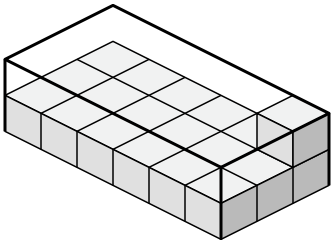
5)



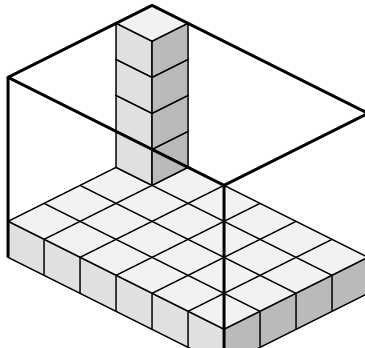
6)



7)



8)



Answers

1. \_\_\_\_\_

2. \_\_\_\_\_

3. \_\_\_\_\_

4. \_\_\_\_\_

5. \_\_\_\_\_

6. \_\_\_\_\_

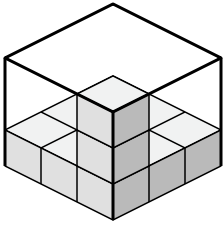
7. \_\_\_\_\_

8. \_\_\_\_\_

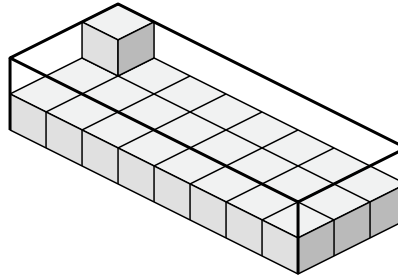


Create an expression to determine the volume of each box.

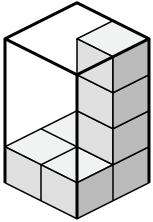
1)



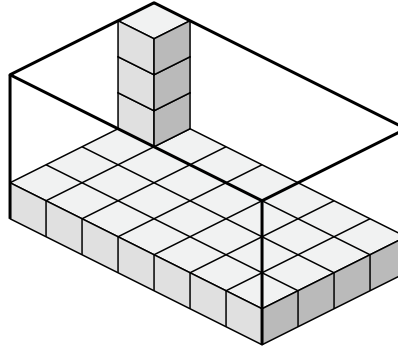
2)



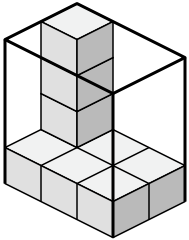
3)



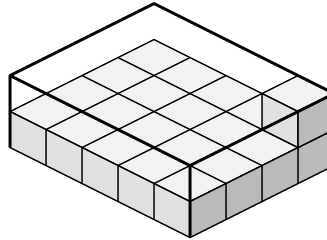
4)



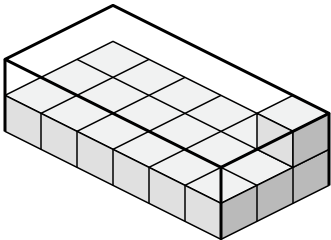
5)



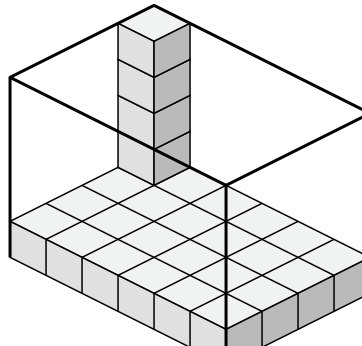
6)



7)



8)



Answers

1. 3x3x3

2. 8x3x2

3. 2x2x4

4. 7x4x4

5. 3x2x4

6. 5x4x2

7. 6x3x2

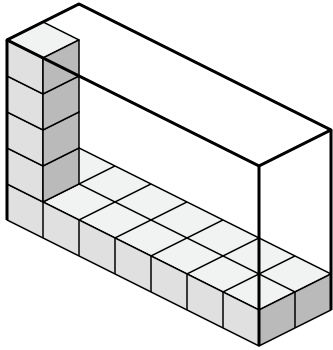
8. 6x4x5



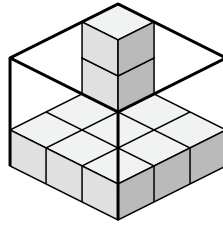


Create an expression to determine the volume of each box.

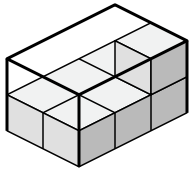
1)



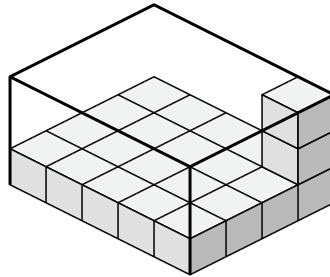
2)



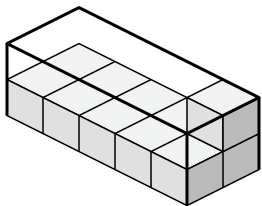
3)



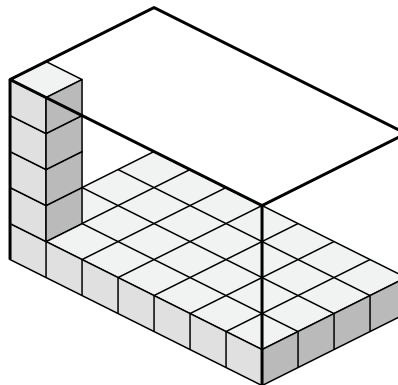
4)



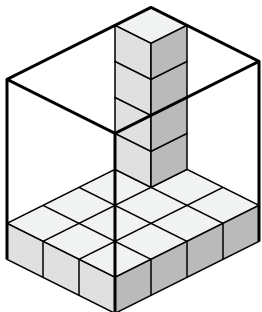
5)



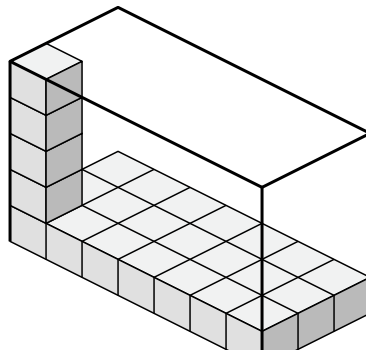
6)



7)



8)



Answers

1. \_\_\_\_\_

2. \_\_\_\_\_

3. \_\_\_\_\_

4. \_\_\_\_\_

5. \_\_\_\_\_

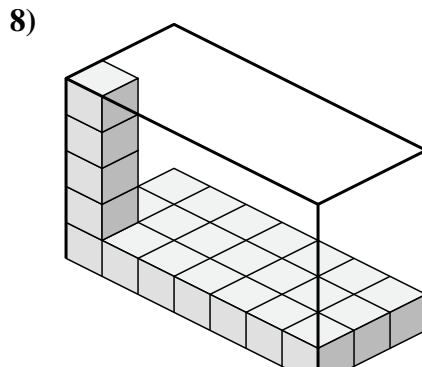
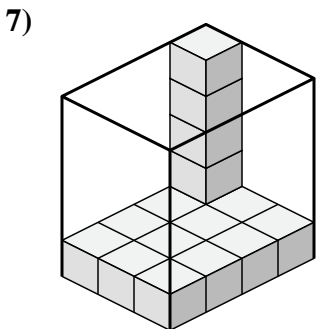
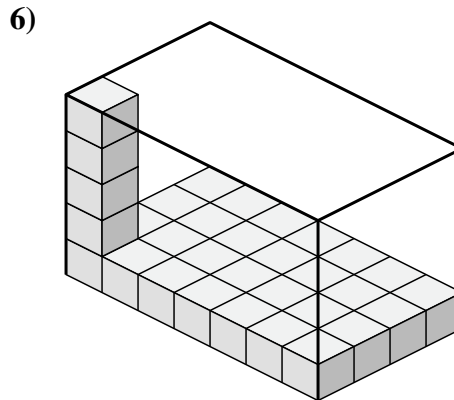
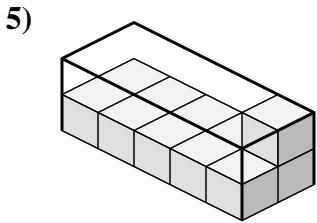
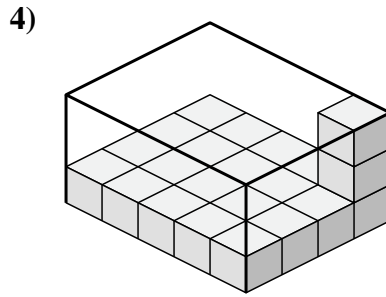
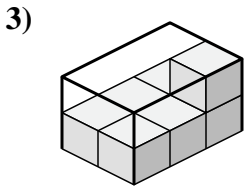
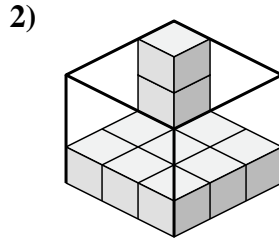
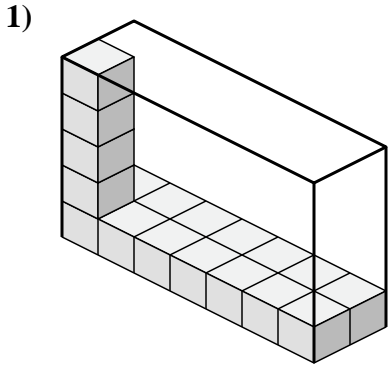
6. \_\_\_\_\_

7. \_\_\_\_\_

8. \_\_\_\_\_



Create an expression to determine the volume of each box.



Answers

1.  $7 \times 2 \times 5$

2.  $3 \times 3 \times 3$

3.  $2 \times 3 \times 2$

4.  $5 \times 4 \times 3$

5.  $5 \times 2 \times 2$

6.  $7 \times 4 \times 5$

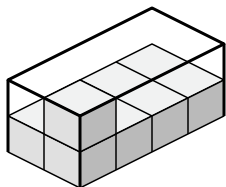
7.  $3 \times 4 \times 5$

8.  $7 \times 3 \times 5$

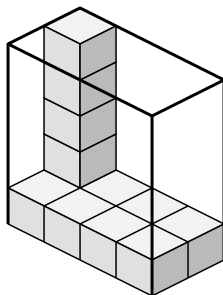


Create an expression to determine the volume of each box.

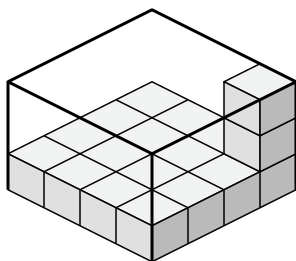
1)



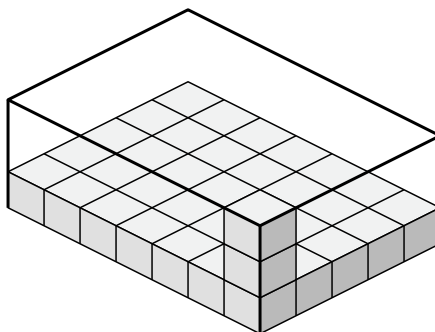
2)



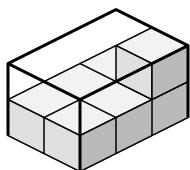
3)



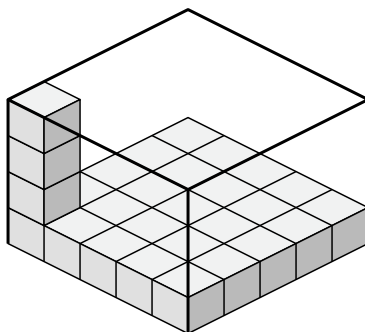
4)



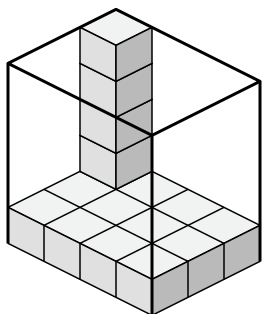
5)



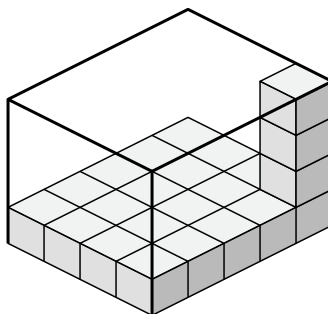
6)



7)



8)



Answers

1. \_\_\_\_\_

2. \_\_\_\_\_

3. \_\_\_\_\_

4. \_\_\_\_\_

5. \_\_\_\_\_

6. \_\_\_\_\_

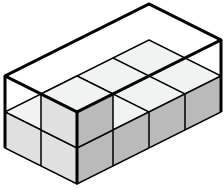
7. \_\_\_\_\_

8. \_\_\_\_\_

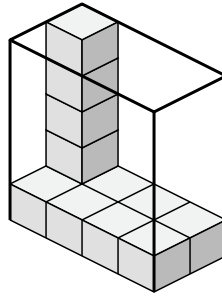


Create an expression to determine the volume of each box.

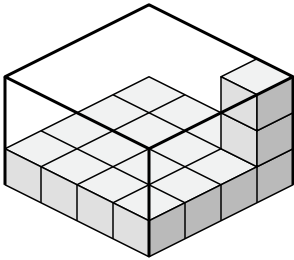
1)



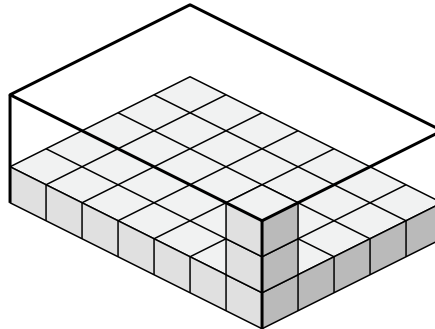
2)



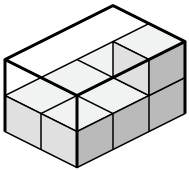
3)



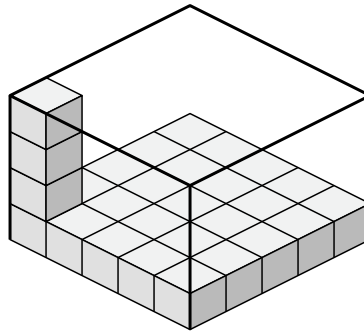
4)



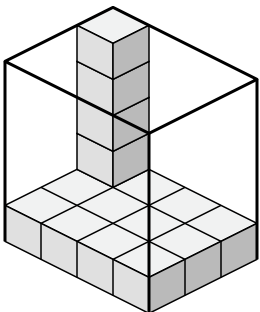
5)



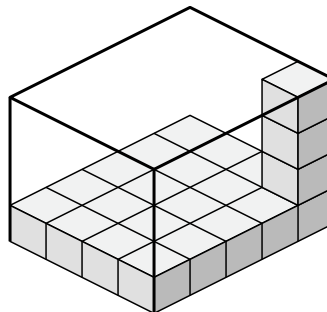
6)



7)



8)



Answers

1. 2×4×2

2. 4×2×5

3. 4×4×3

4. 7×5×3

5. 2×3×2

6. 5×5×4

7. 4×3×5

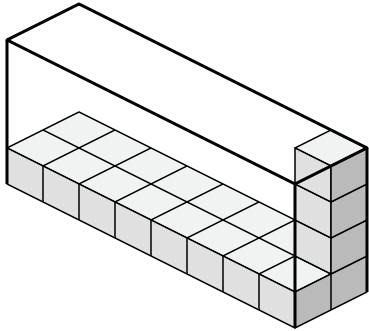
8. 4×5×4



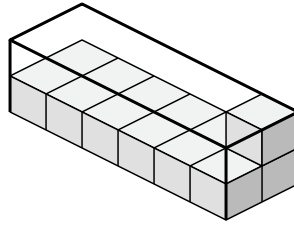
Create an expression to determine the volume of each box.

Answers

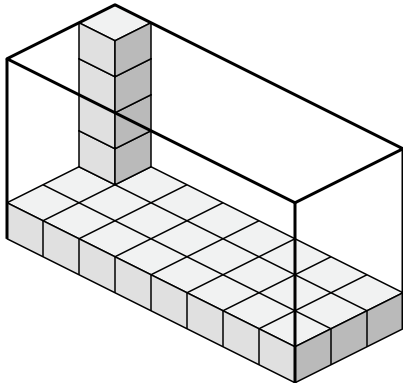
1)



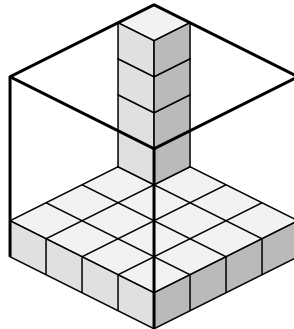
2)



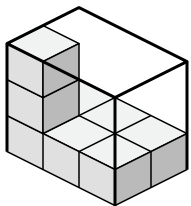
3)



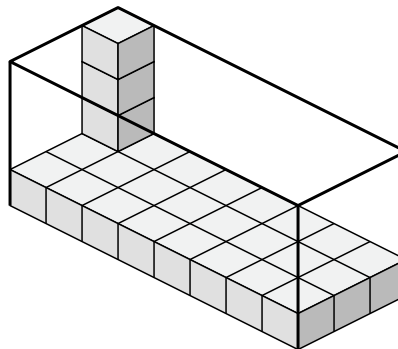
4)



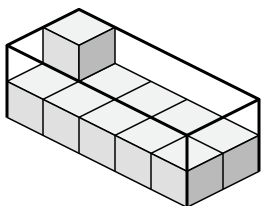
5)



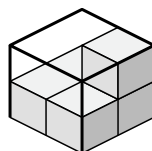
6)



7)



8)

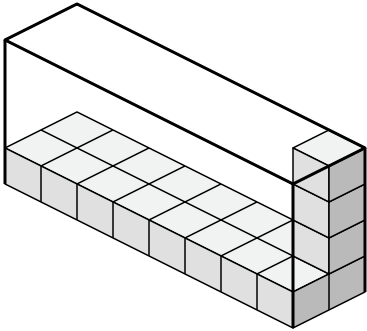


- 1. \_\_\_\_\_
- 2. \_\_\_\_\_
- 3. \_\_\_\_\_
- 4. \_\_\_\_\_
- 5. \_\_\_\_\_
- 6. \_\_\_\_\_
- 7. \_\_\_\_\_
- 8. \_\_\_\_\_

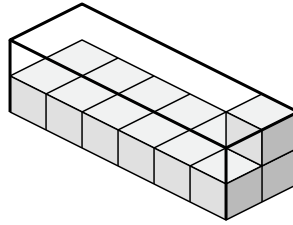


Create an expression to determine the volume of each box.

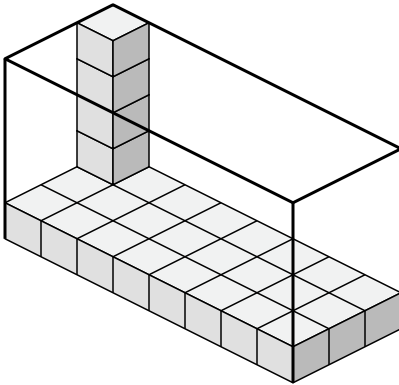
1)



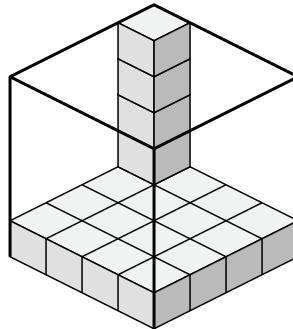
2)



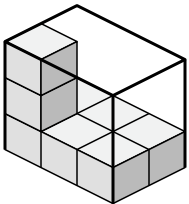
3)



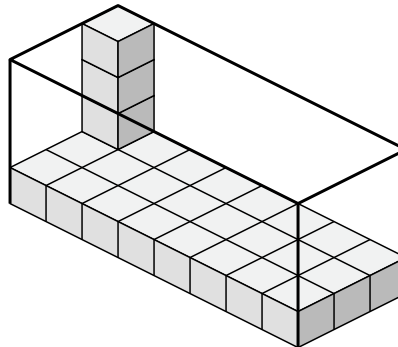
4)



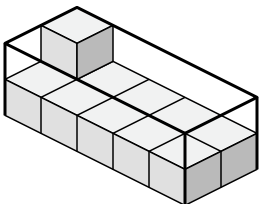
5)



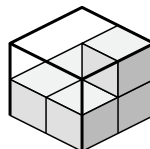
6)



7)



8)



Answers

1.  $8 \times 2 \times 4$

2.  $6 \times 2 \times 2$

3.  $8 \times 3 \times 5$

4.  $4 \times 4 \times 5$

5.  $3 \times 2 \times 3$

6.  $8 \times 3 \times 4$

7.  $5 \times 2 \times 2$

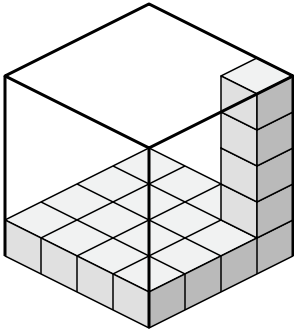
8.  $2 \times 2 \times 2$



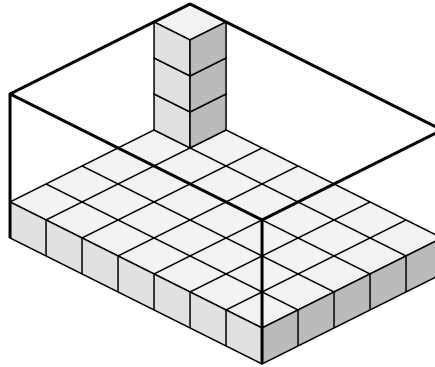
Create an expression to determine the volume of each box.

Answers

1)



2)



1. \_\_\_\_\_

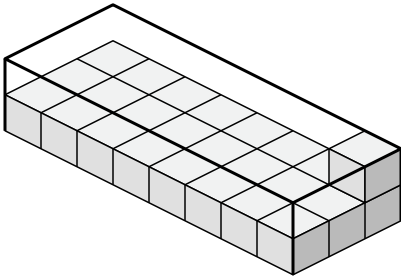
2. \_\_\_\_\_

3. \_\_\_\_\_

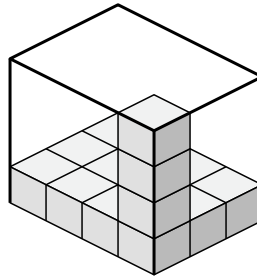
4. \_\_\_\_\_

5. \_\_\_\_\_

3)



4)

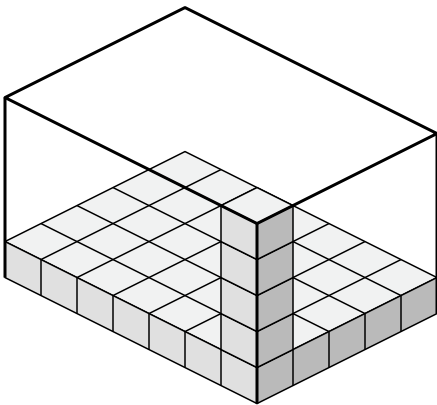


6. \_\_\_\_\_

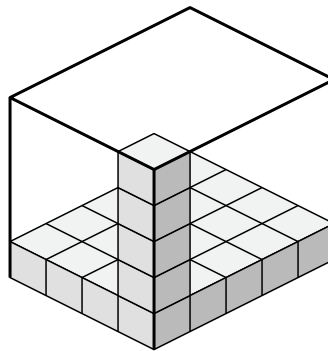
7. \_\_\_\_\_

8. \_\_\_\_\_

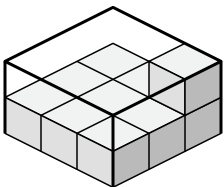
5)



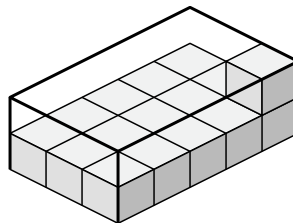
6)



7)



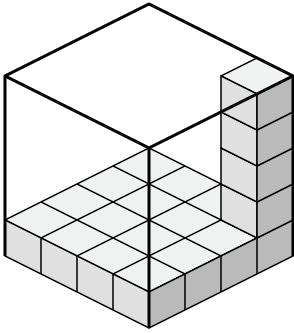
8)



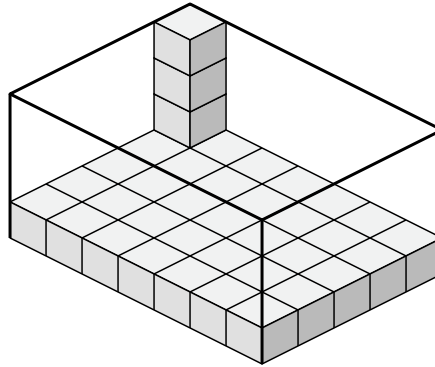


Create an expression to determine the volume of each box.

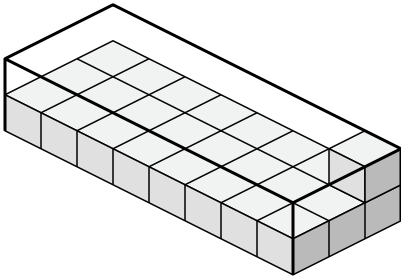
1)



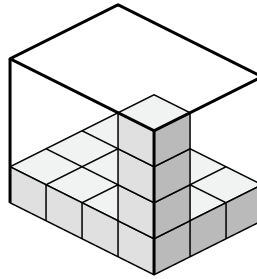
2)



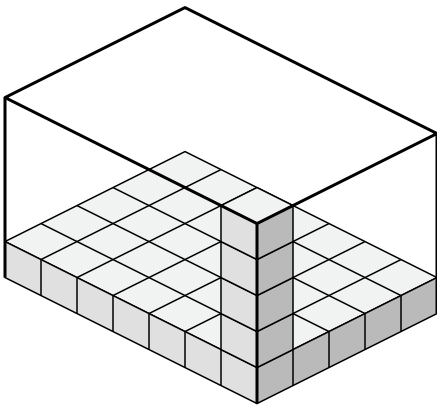
3)



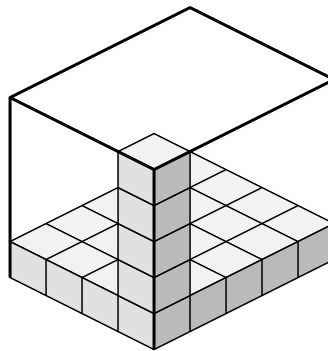
4)



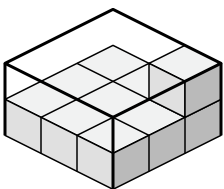
5)



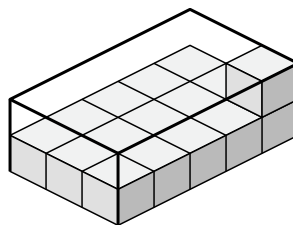
6)



7)



8)



Answers

1.  $4 \times 4 \times 5$

2.  $7 \times 5 \times 4$

3.  $8 \times 3 \times 2$

4.  $4 \times 3 \times 4$

5.  $7 \times 5 \times 5$

6.  $4 \times 5 \times 5$

7.  $3 \times 3 \times 2$

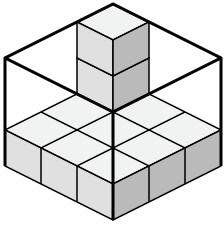
8.  $3 \times 5 \times 2$



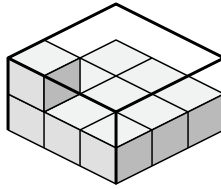


Create an expression to determine the volume of each box.

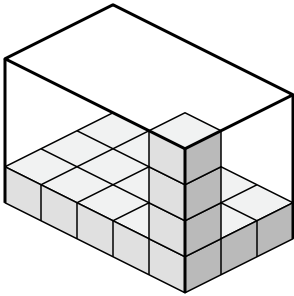
1)



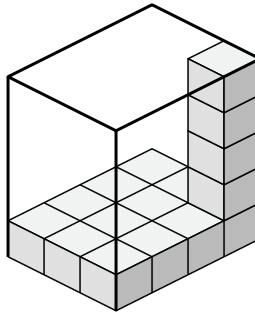
2)



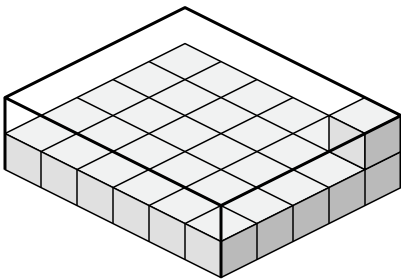
3)



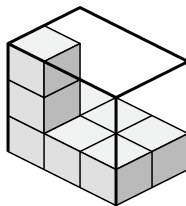
4)



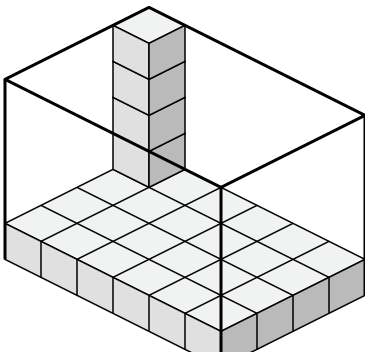
5)



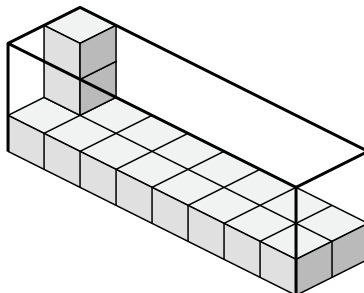
6)



7)



8)



Answers

1. \_\_\_\_\_

2. \_\_\_\_\_

3. \_\_\_\_\_

4. \_\_\_\_\_

5. \_\_\_\_\_

6. \_\_\_\_\_

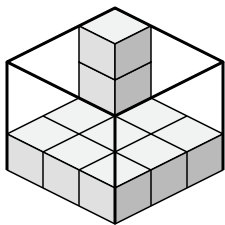
7. \_\_\_\_\_

8. \_\_\_\_\_

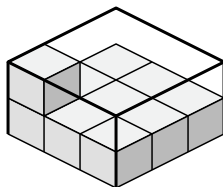


Create an expression to determine the volume of each box.

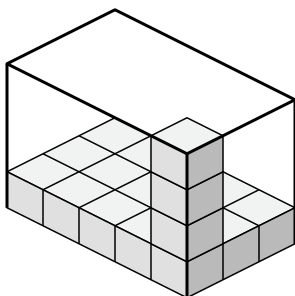
1)



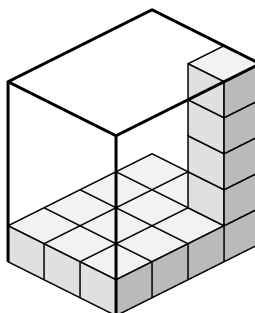
2)



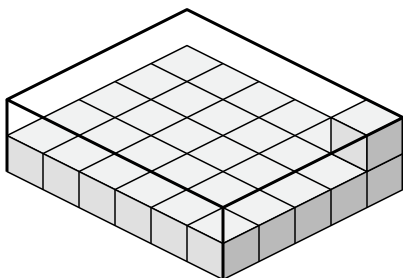
3)



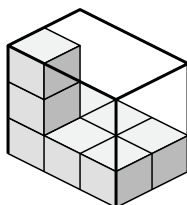
4)



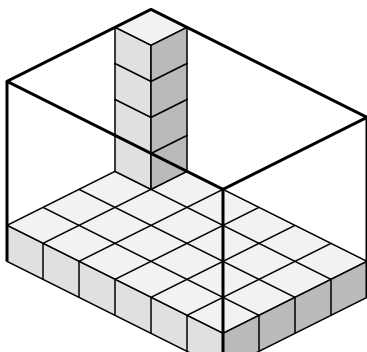
5)



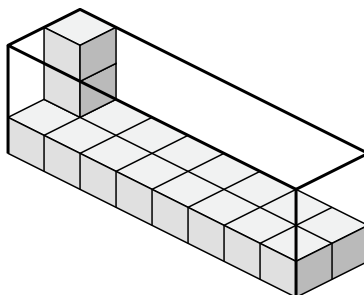
6)



7)



8)



Answers

1. 3x3x3

2. 3x3x2

3. 5x3x4

4. 3x4x5

5. 6x5x2

6. 3x2x3

7. 6x4x5

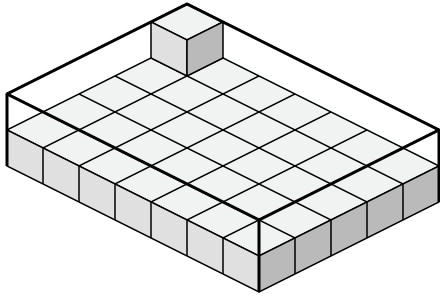
8. 8x2x3



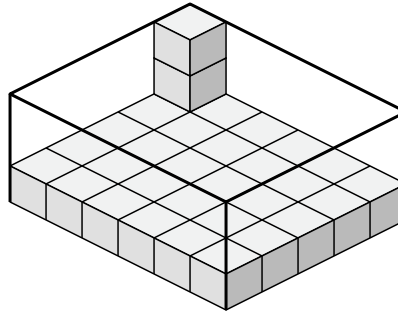
Create an expression to determine the volume of each box.

Answers

1)



2)



1. \_\_\_\_\_

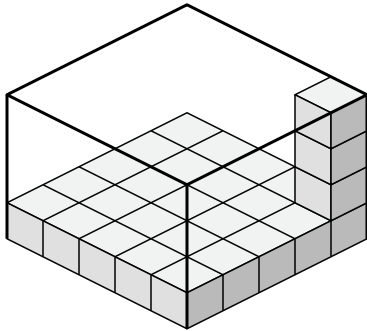
2. \_\_\_\_\_

3. \_\_\_\_\_

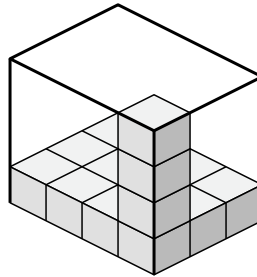
4. \_\_\_\_\_

5. \_\_\_\_\_

3)



4)

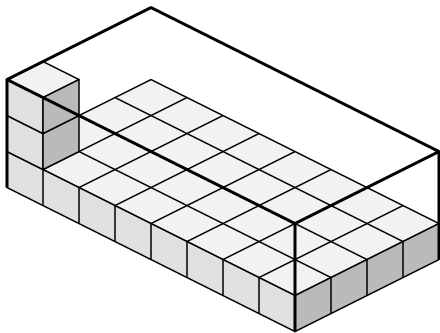


6. \_\_\_\_\_

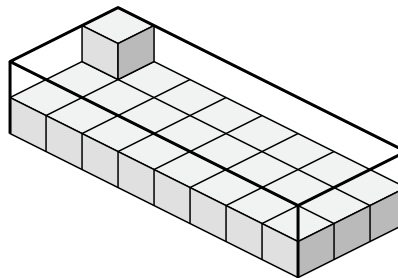
7. \_\_\_\_\_

8. \_\_\_\_\_

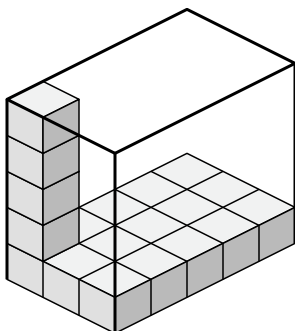
5)



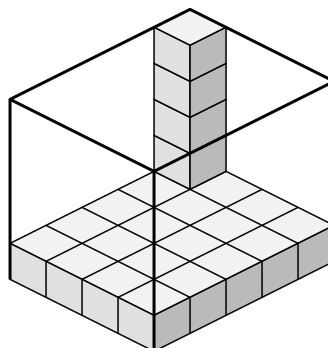
6)



7)



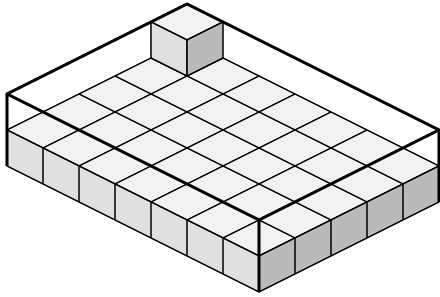
8)



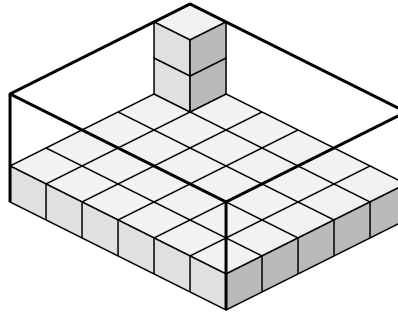


Create an expression to determine the volume of each box.

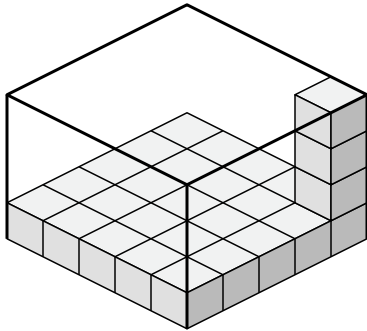
1)



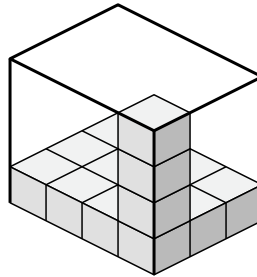
2)



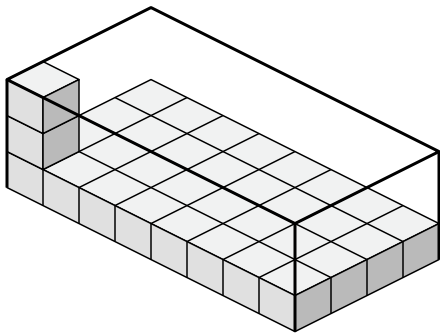
3)



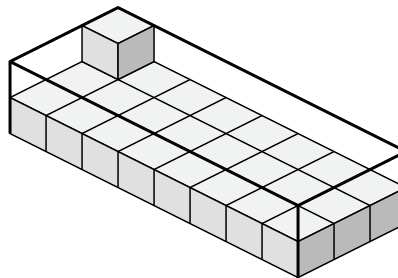
4)



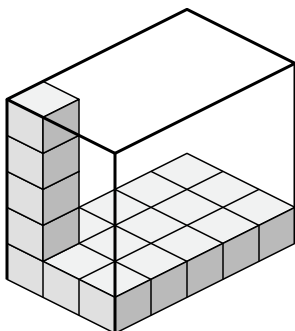
5)



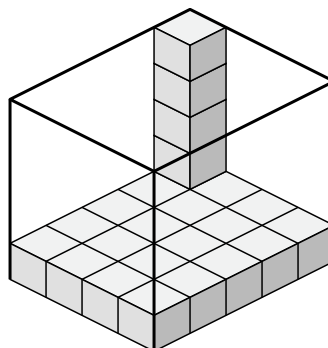
6)



7)



8)



Answers

1.  $7 \times 5 \times 2$

2.  $6 \times 5 \times 3$

3.  $5 \times 5 \times 4$

4.  $4 \times 3 \times 4$

5.  $8 \times 4 \times 3$

6.  $8 \times 3 \times 2$

7.  $3 \times 5 \times 5$

8.  $4 \times 5 \times 5$