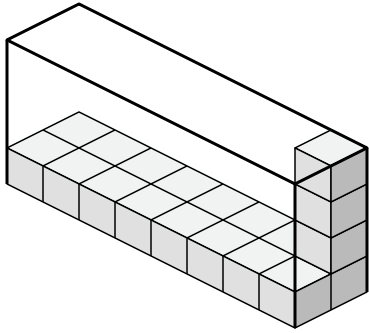




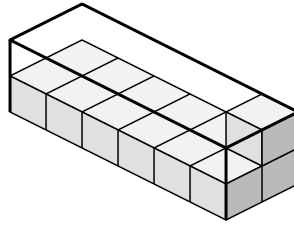
Create an expression to determine the volume of each box.

Answers

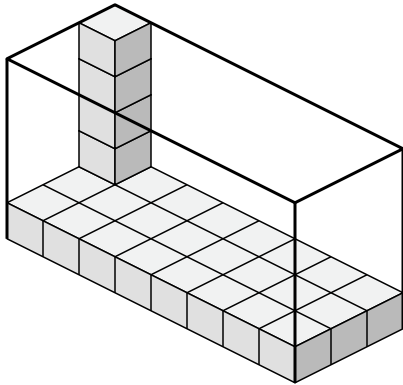
1)



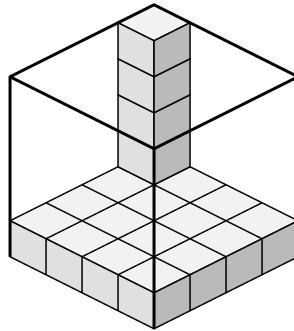
2)



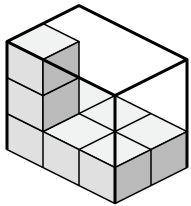
3)



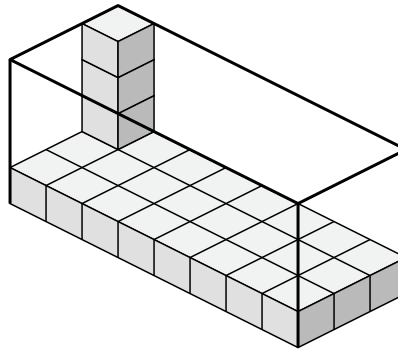
4)



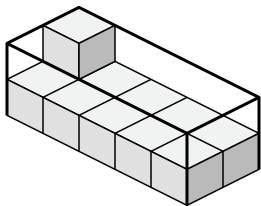
5)



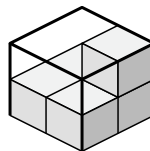
6)



7)



8)



1. _____

2. _____

3. _____

4. _____

5. _____

6. _____

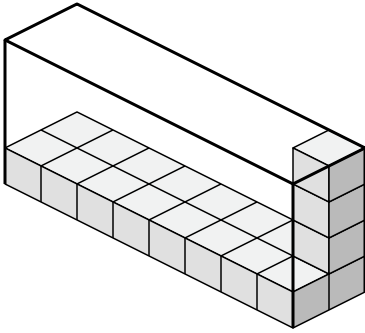
7. _____

8. _____

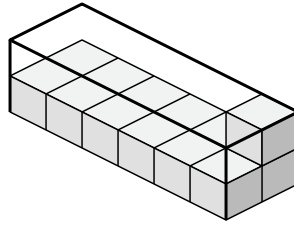


Create an expression to determine the volume of each box.

1)



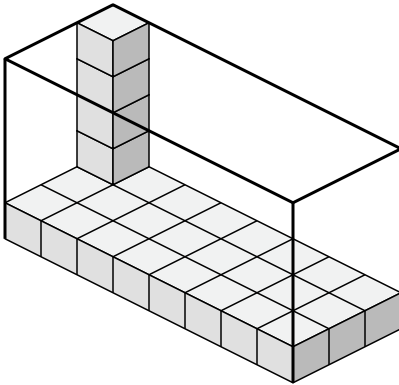
2)



1. **$8 \times 2 \times 4$**

2. **$6 \times 2 \times 2$**

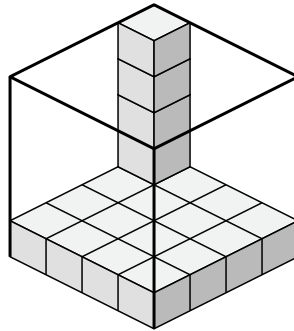
3)



3. **$8 \times 3 \times 5$**

4. **$4 \times 4 \times 5$**

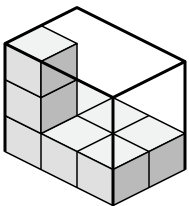
4)



5. **$3 \times 2 \times 3$**

6. **$8 \times 3 \times 4$**

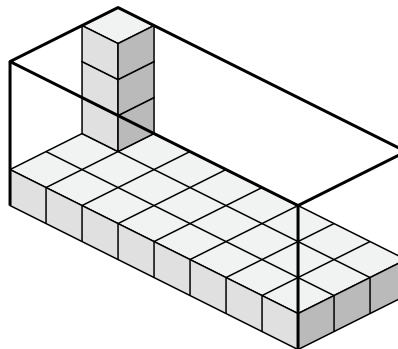
5)



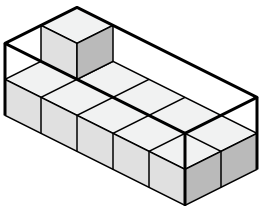
7. **$5 \times 2 \times 2$**

8. **$2 \times 2 \times 2$**

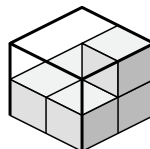
6)



7)



8)



Answers

1. **$8 \times 2 \times 4$**

2. **$6 \times 2 \times 2$**

3. **$8 \times 3 \times 5$**

4. **$4 \times 4 \times 5$**

5. **$3 \times 2 \times 3$**

6. **$8 \times 3 \times 4$**

7. **$5 \times 2 \times 2$**

8. **$2 \times 2 \times 2$**