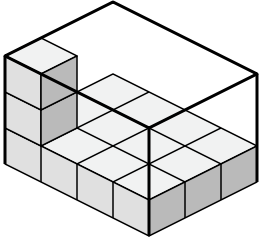




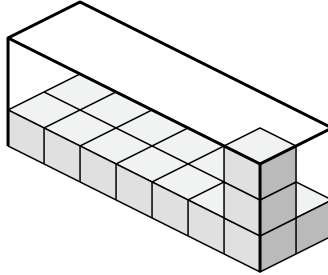
Create an expression to determine the volume of each box.

Answers

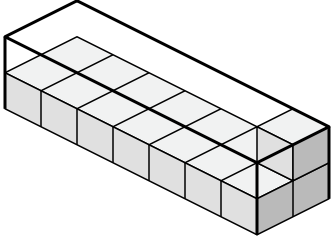
1)



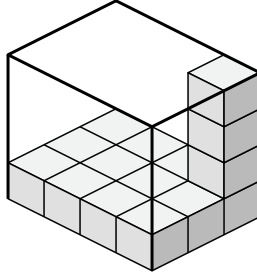
2)



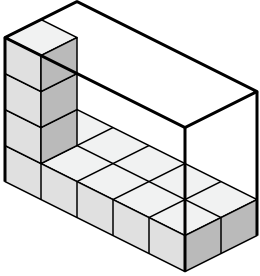
3)



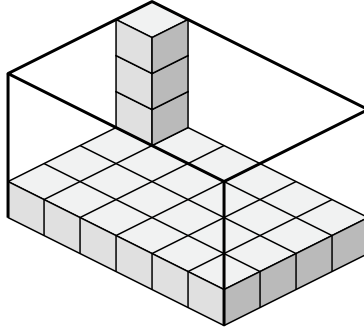
4)



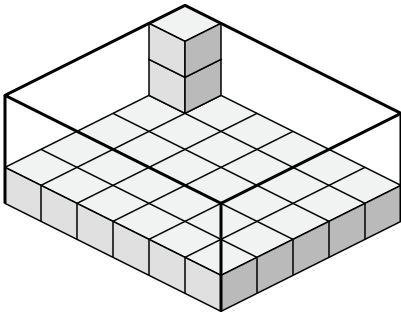
5)



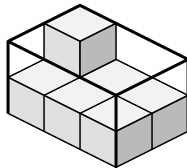
6)



7)



8)

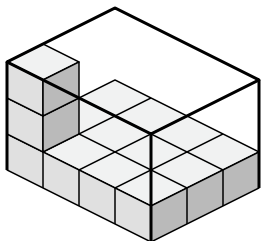


- 1. _____
- 2. _____
- 3. _____
- 4. _____
- 5. _____
- 6. _____
- 7. _____
- 8. _____

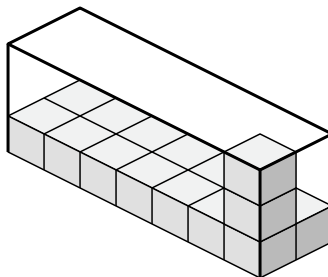


Create an expression to determine the volume of each box.

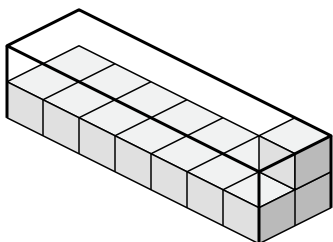
1)



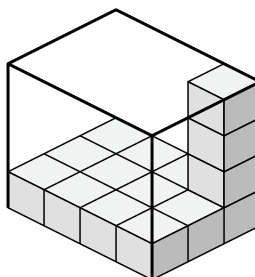
2)



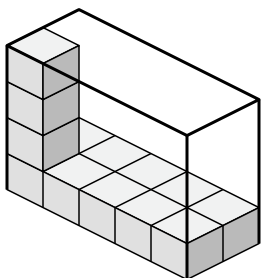
3)



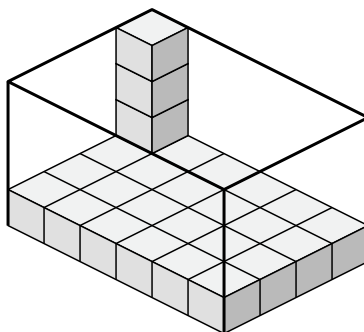
4)



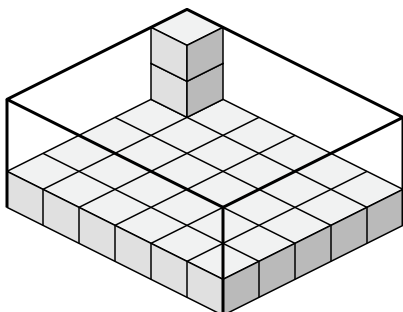
5)



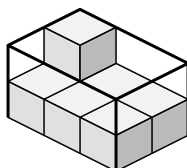
6)



7)



8)



Answers

1. 4×3×3

2. 7×2×3

3. 7×2×2

4. 4×3×4

5. 5×2×4

6. 6×4×4

7. 6×5×3

8. 3×2×2