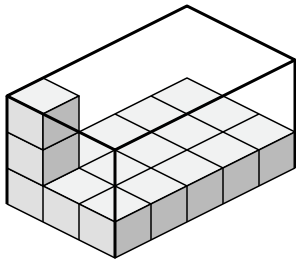




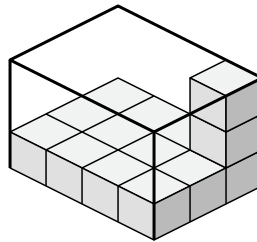
Create an expression to determine the volume of each box.

Answers

1)



2)



1. \_\_\_\_\_

2. \_\_\_\_\_

3. \_\_\_\_\_

4. \_\_\_\_\_

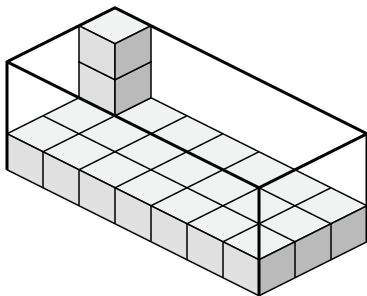
5. \_\_\_\_\_

6. \_\_\_\_\_

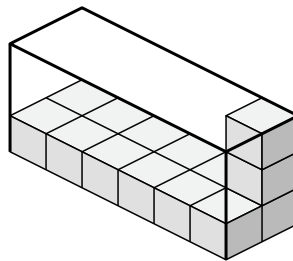
7. \_\_\_\_\_

8. \_\_\_\_\_

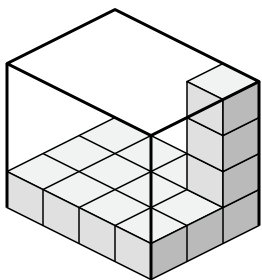
3)



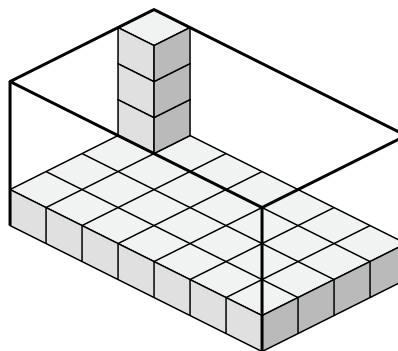
4)



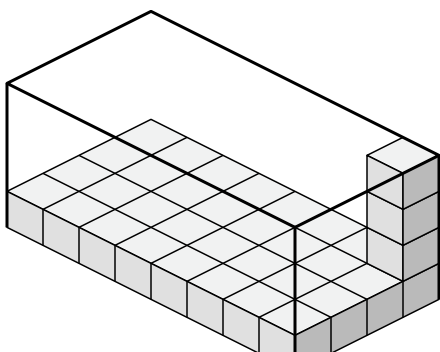
5)



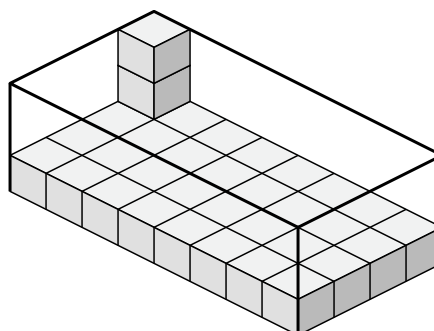
6)



7)



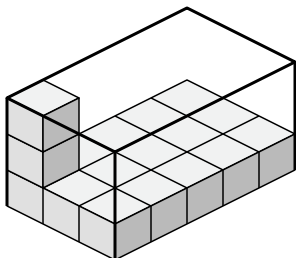
8)



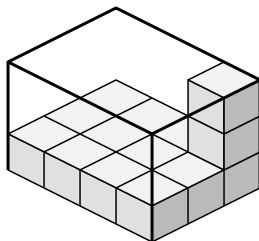


Create an expression to determine the volume of each box.

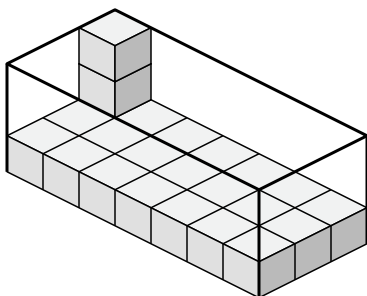
1)



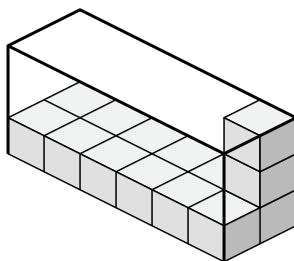
2)



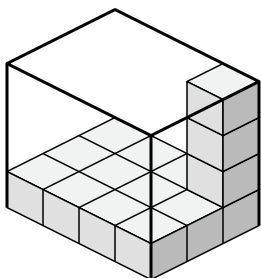
3)



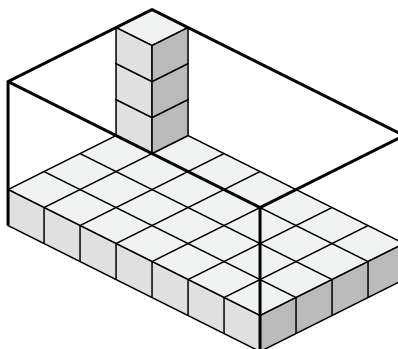
4)



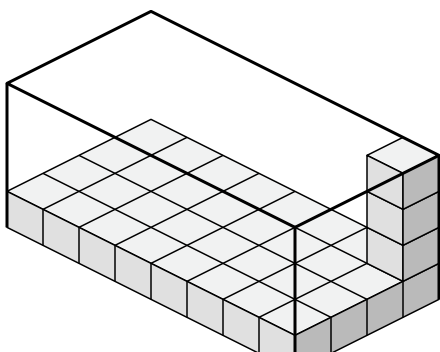
5)



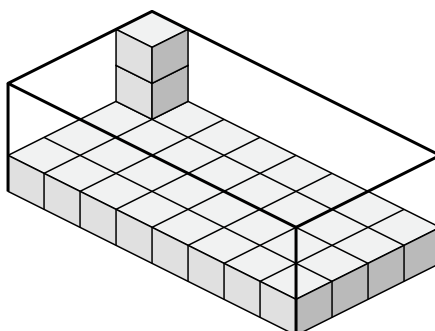
6)



7)



8)



Answers

1.  $3 \times 5 \times 3$

2.  $4 \times 3 \times 3$

3.  $7 \times 3 \times 3$

4.  $6 \times 2 \times 3$

5.  $4 \times 3 \times 4$

6.  $7 \times 4 \times 4$

7.  $8 \times 4 \times 4$

8.  $8 \times 4 \times 3$