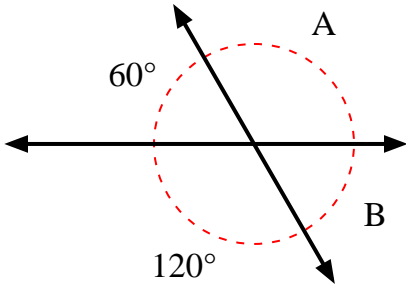


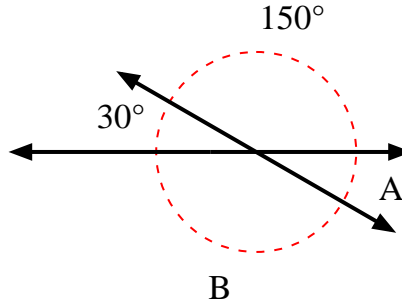


Find the value of angle 'A' and angle 'B'.

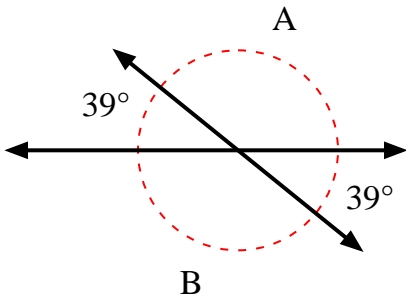
1)



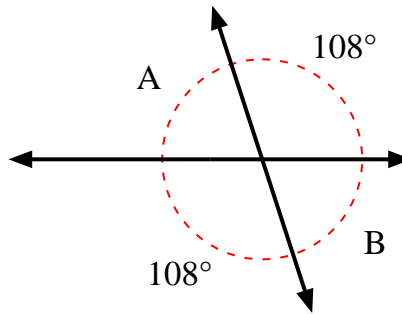
2)



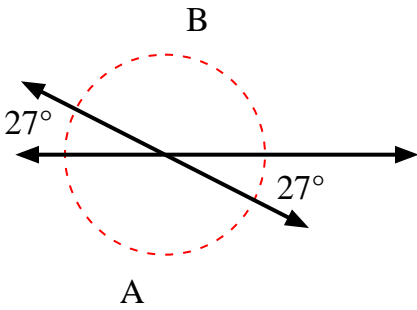
3)



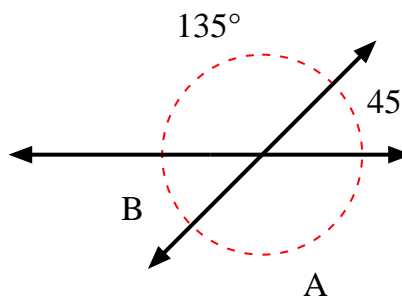
4)



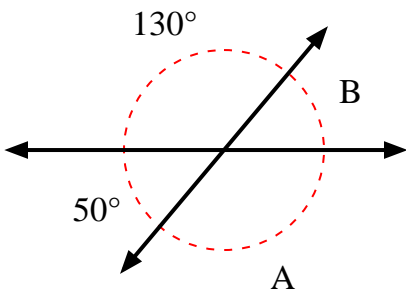
5)



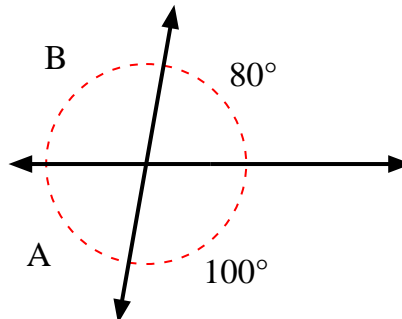
6)



7)



8)



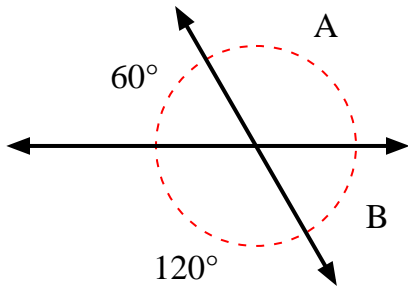
Answers

1. \_\_\_\_\_
2. \_\_\_\_\_
3. \_\_\_\_\_
4. \_\_\_\_\_
5. \_\_\_\_\_
6. \_\_\_\_\_
7. \_\_\_\_\_
8. \_\_\_\_\_

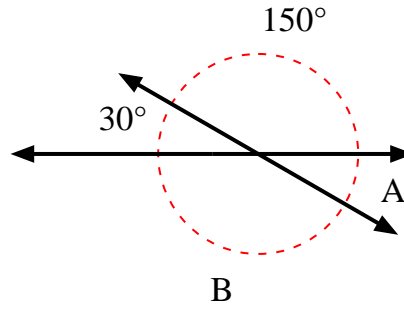


Find the value of angle 'A' and angle 'B'.

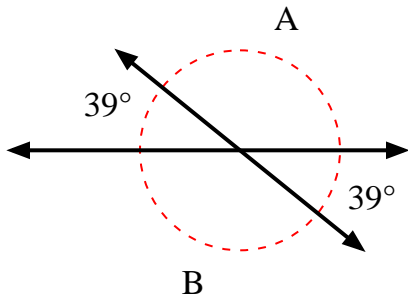
1)



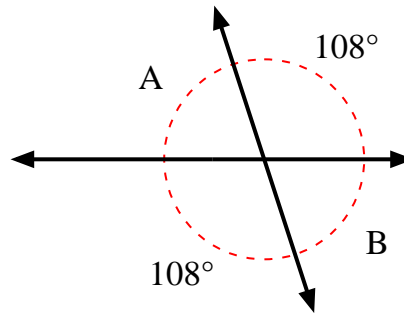
2)



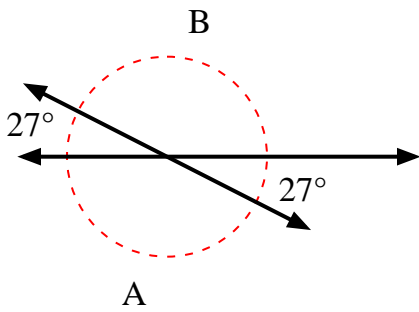
3)



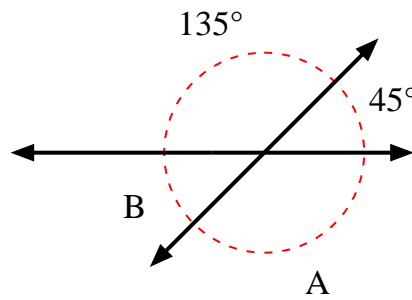
4)



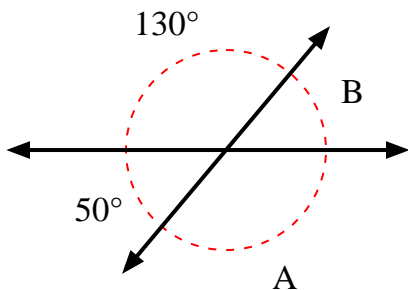
5)



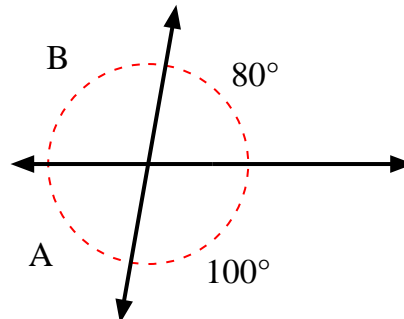
6)



7)



8)



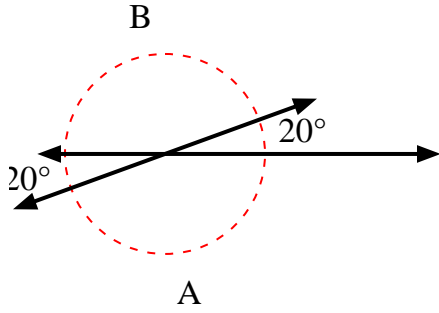
Answers

1.	<b>120°</b>	<b>60°</b>
2.	<b>30°</b>	<b>150°</b>
3.	<b>141°</b>	<b>141°</b>
4.	<b>72°</b>	<b>72°</b>
5.	<b>153°</b>	<b>153°</b>
6.	<b>135°</b>	<b>45°</b>
7.	<b>130°</b>	<b>50°</b>
8.	<b>80°</b>	<b>100°</b>

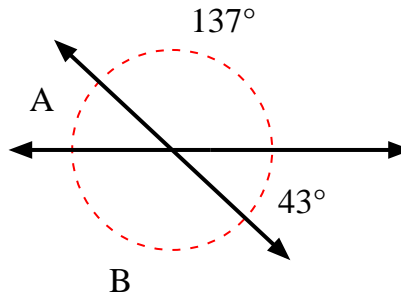


Find the value of angle 'A' and angle 'B'.

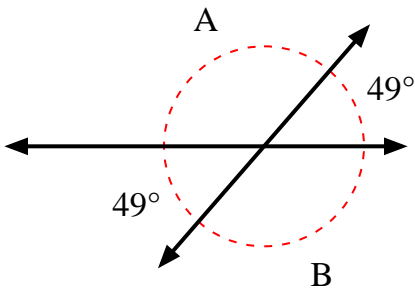
1)



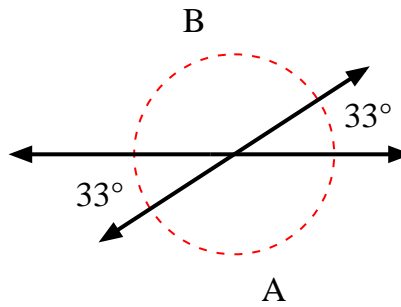
2)



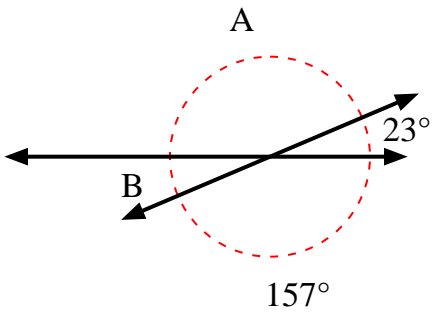
3)



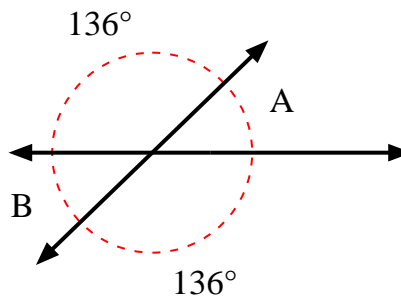
4)



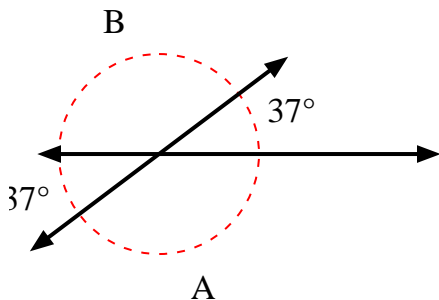
5)



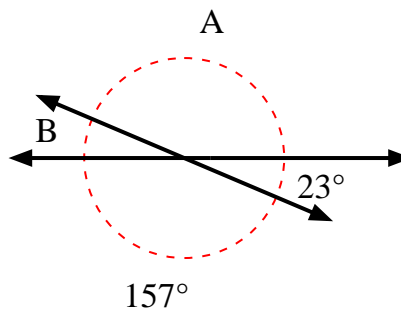
6)



7)



8)



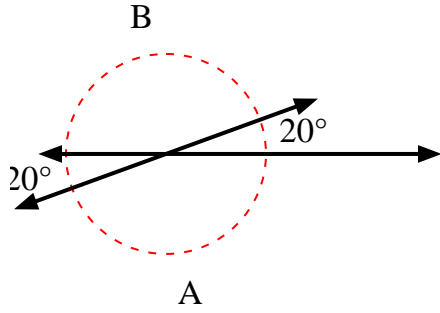
Answers

1. \_\_\_\_\_
2. \_\_\_\_\_
3. \_\_\_\_\_
4. \_\_\_\_\_
5. \_\_\_\_\_
6. \_\_\_\_\_
7. \_\_\_\_\_
8. \_\_\_\_\_

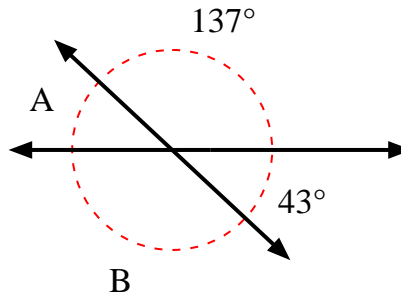


Find the value of angle 'A' and angle 'B'.

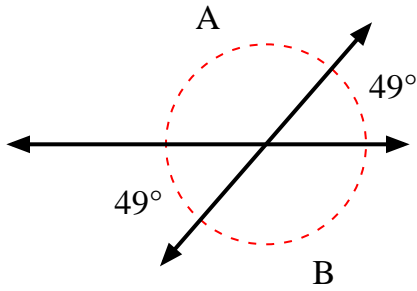
1)



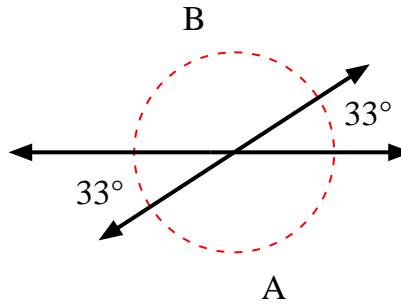
2)



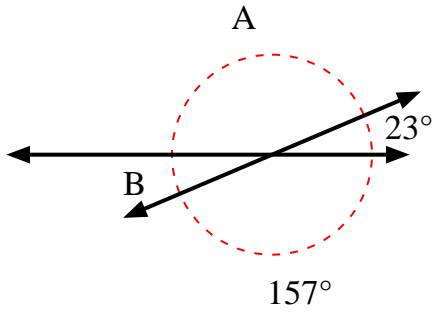
3)



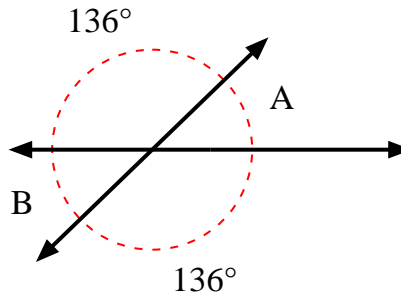
4)



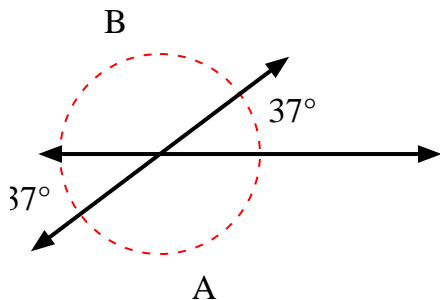
5)



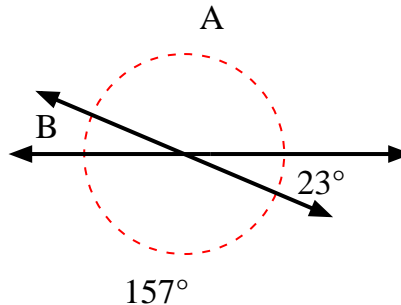
6)



7)



8)



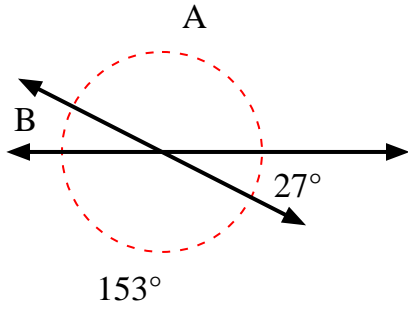
Answers

1.	<b>160°</b>	<b>160°</b>
2.	<b>43°</b>	<b>137°</b>
3.	<b>131°</b>	<b>131°</b>
4.	<b>147°</b>	<b>147°</b>
5.	<b>157°</b>	<b>23°</b>
6.	<b>44°</b>	<b>44°</b>
7.	<b>143°</b>	<b>143°</b>
8.	<b>157°</b>	<b>23°</b>

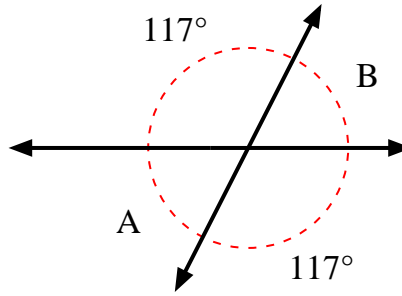


Find the value of angle 'A' and angle 'B'.

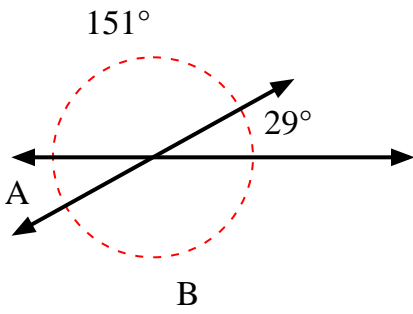
1)



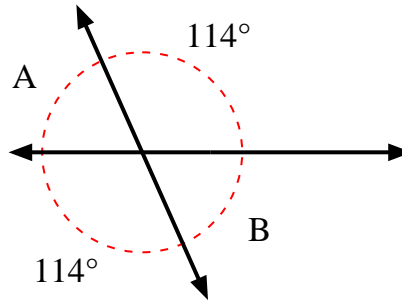
2)



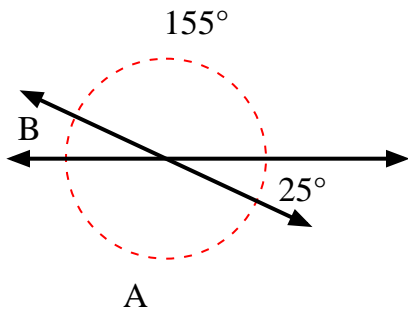
3)



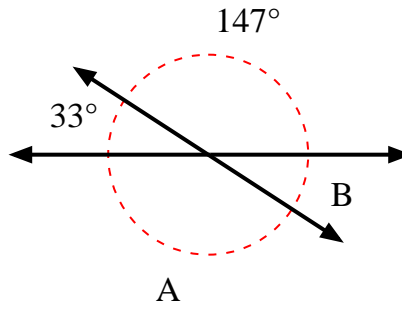
4)



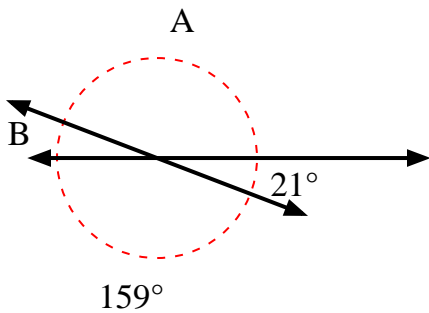
5)



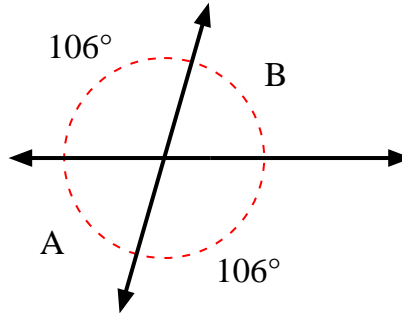
6)



7)



8)



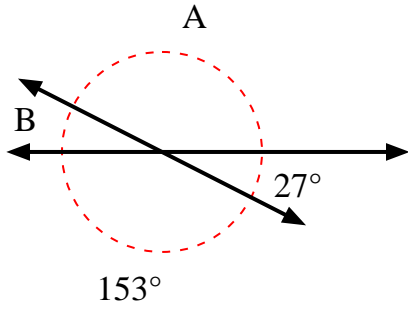
Answers

1. \_\_\_\_\_
2. \_\_\_\_\_
3. \_\_\_\_\_
4. \_\_\_\_\_
5. \_\_\_\_\_
6. \_\_\_\_\_
7. \_\_\_\_\_
8. \_\_\_\_\_

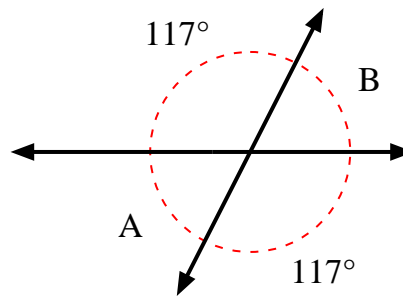


Find the value of angle 'A' and angle 'B'.

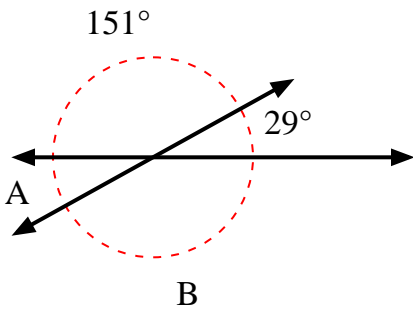
1)



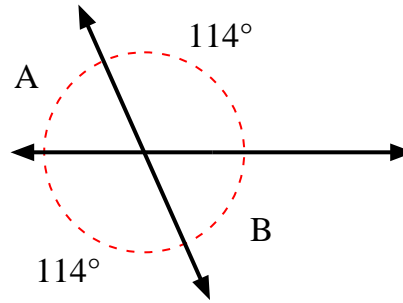
2)



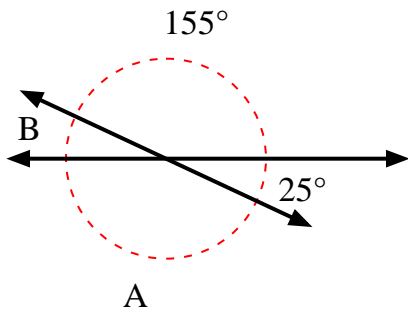
3)



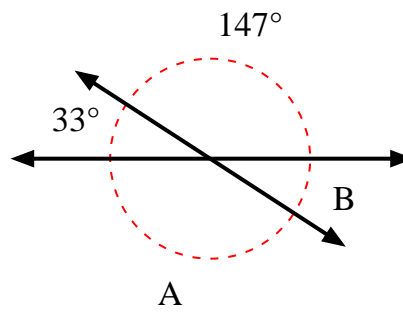
4)



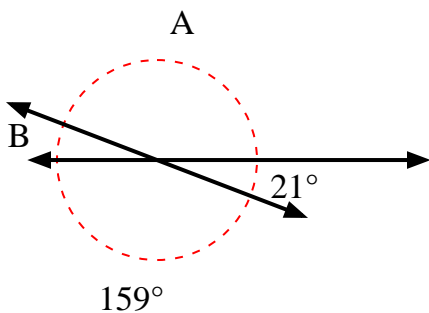
5)



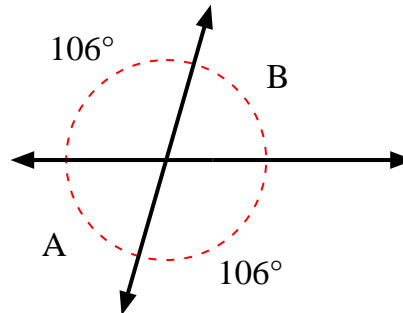
6)



7)



8)



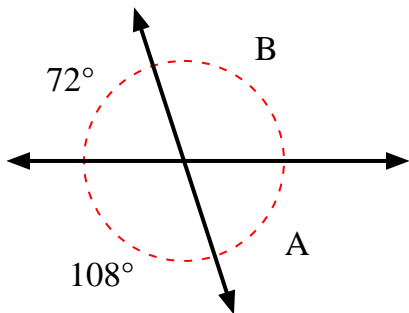
Answers

1.	<b>153°</b>	<b>27°</b>
2.	<b>63°</b>	<b>63°</b>
3.	<b>29°</b>	<b>151°</b>
4.	<b>66°</b>	<b>66°</b>
5.	<b>155°</b>	<b>25°</b>
6.	<b>147°</b>	<b>33°</b>
7.	<b>159°</b>	<b>21°</b>
8.	<b>74°</b>	<b>74°</b>

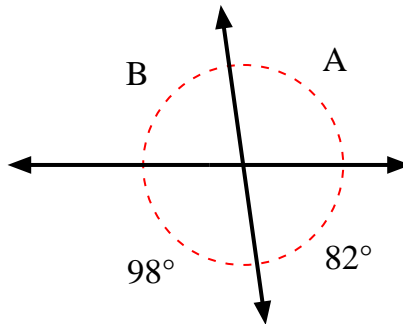


Find the value of angle 'A' and angle 'B'.

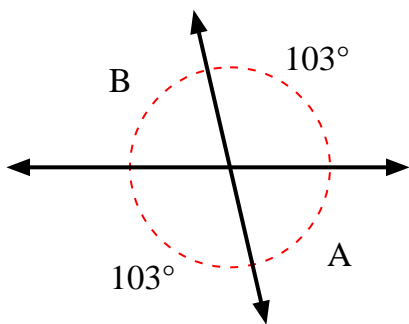
1)



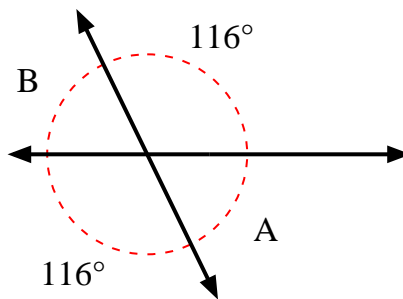
2)



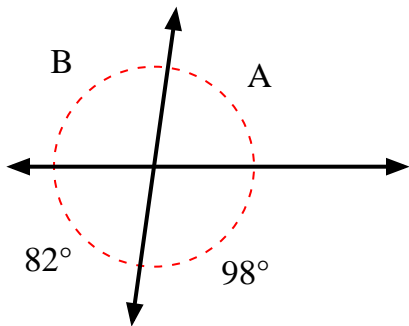
3)



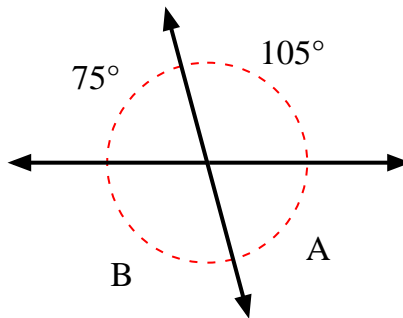
4)



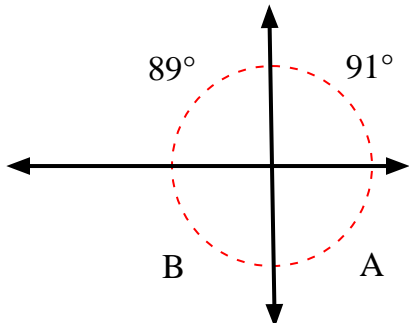
5)



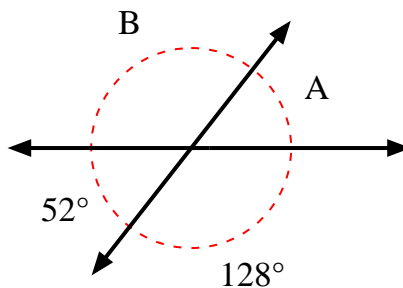
6)



7)



8)



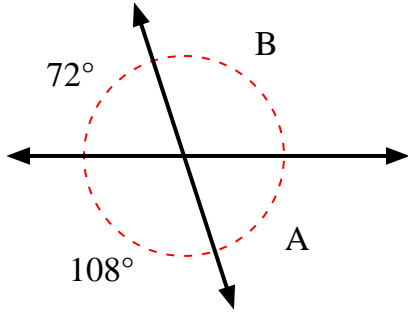
Answers

1. \_\_\_\_\_
2. \_\_\_\_\_
3. \_\_\_\_\_
4. \_\_\_\_\_
5. \_\_\_\_\_
6. \_\_\_\_\_
7. \_\_\_\_\_
8. \_\_\_\_\_

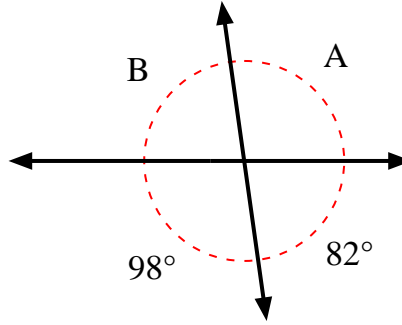


Find the value of angle 'A' and angle 'B'.

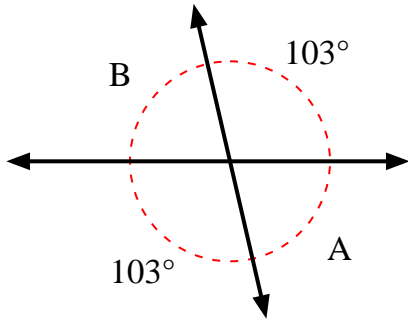
1)



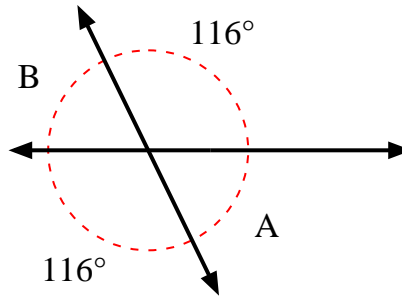
2)



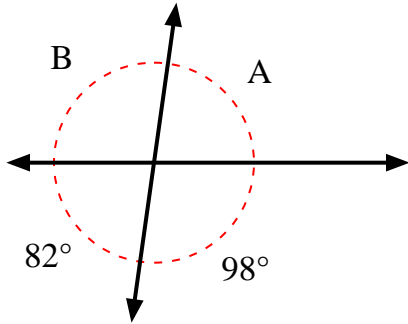
3)



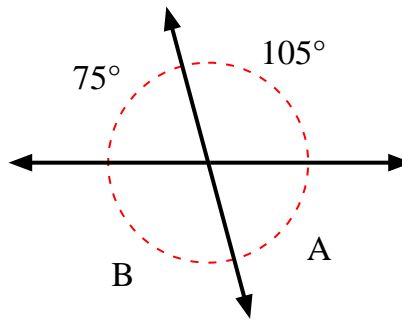
4)



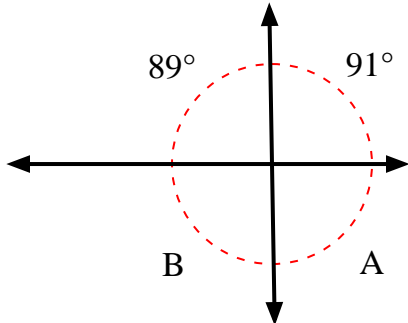
5)



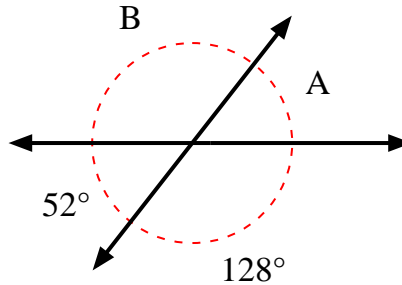
6)



7)



8)



Answers

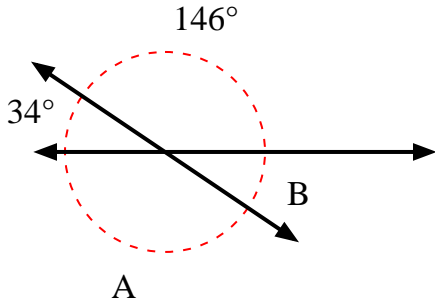
1.	<b>72°</b>	<b>108°</b>
2.	<b>98°</b>	<b>82°</b>
3.	<b>77°</b>	<b>77°</b>
4.	<b>64°</b>	<b>64°</b>
5.	<b>82°</b>	<b>98°</b>
6.	<b>75°</b>	<b>105°</b>
7.	<b>89°</b>	<b>91°</b>
8.	<b>52°</b>	<b>128°</b>



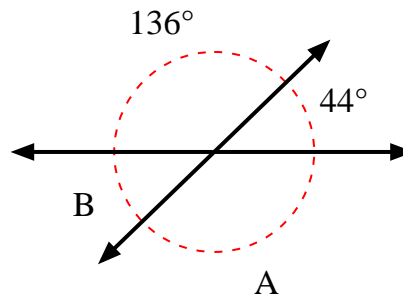


Find the value of angle 'A' and angle 'B'.

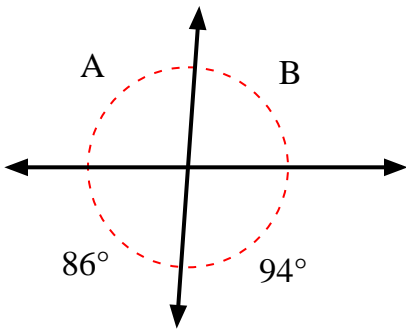
1)



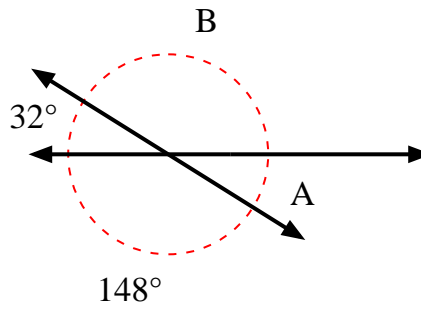
2)



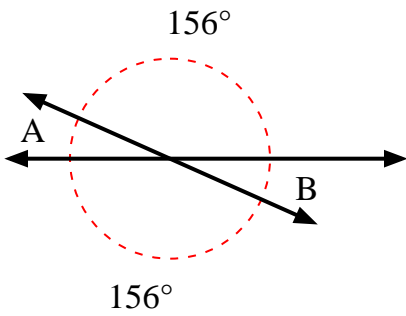
3)



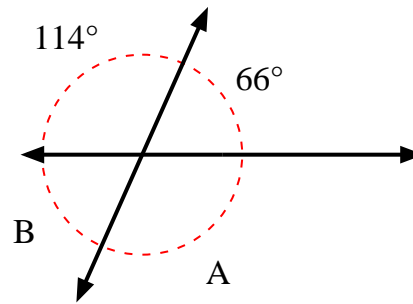
4)



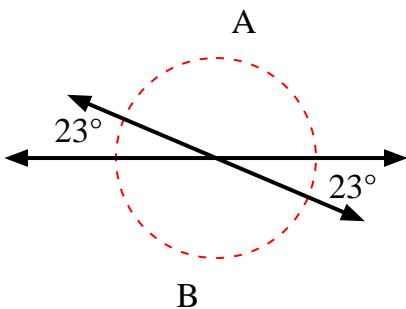
5)



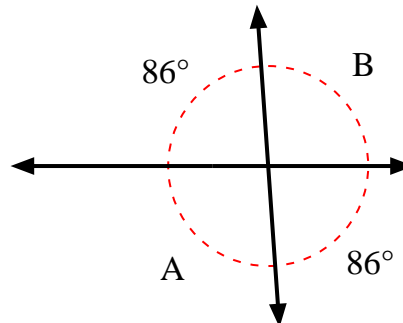
6)



7)



8)



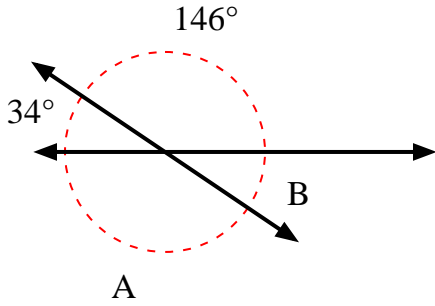
Answers

1. \_\_\_\_\_
2. \_\_\_\_\_
3. \_\_\_\_\_
4. \_\_\_\_\_
5. \_\_\_\_\_
6. \_\_\_\_\_
7. \_\_\_\_\_
8. \_\_\_\_\_

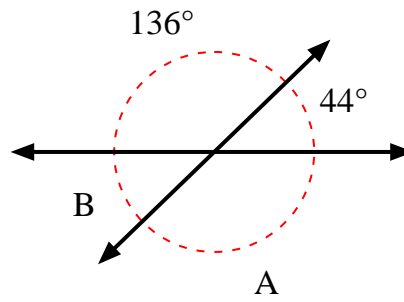


Find the value of angle 'A' and angle 'B'.

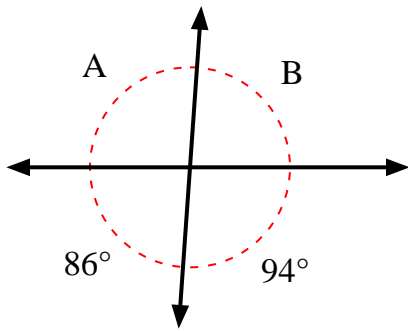
1)



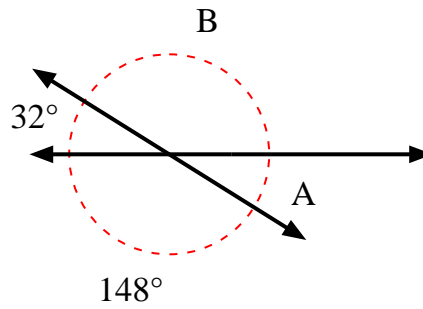
2)



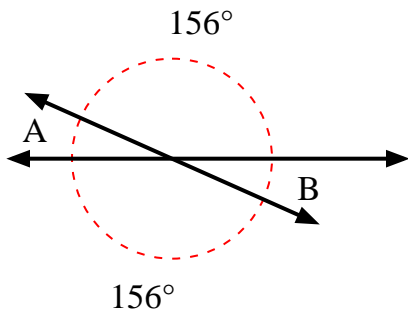
3)



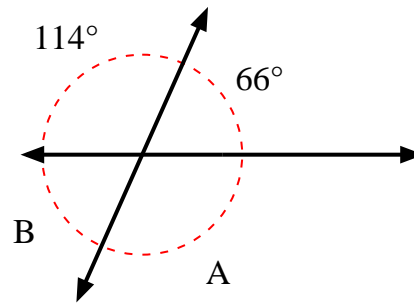
4)



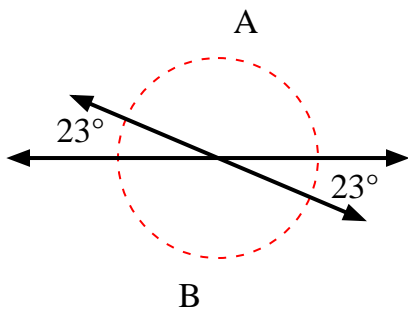
5)



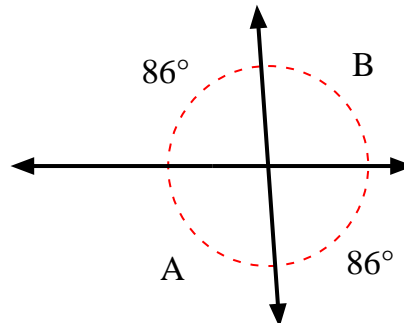
6)



7)



8)



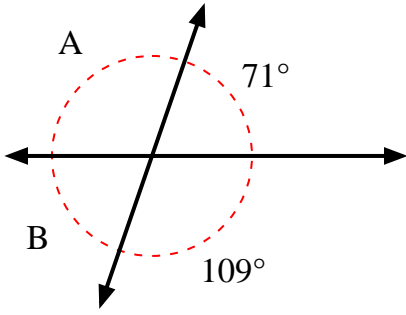
Answers

1. 146°    34°
2. 136°    44°
3. 94°    86°
4. 32°    148°
5. 24°    24°
6. 114°    66°
7. 157°    157°
8. 94°    94°

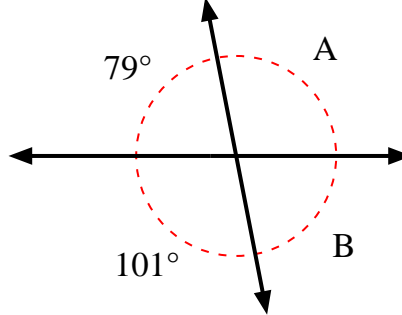


Find the value of angle 'A' and angle 'B'.

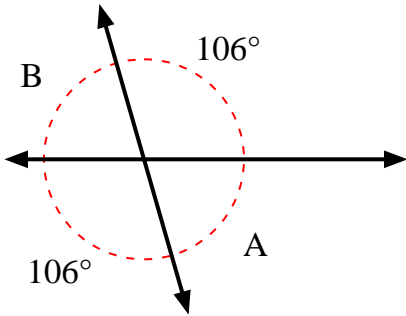
1)



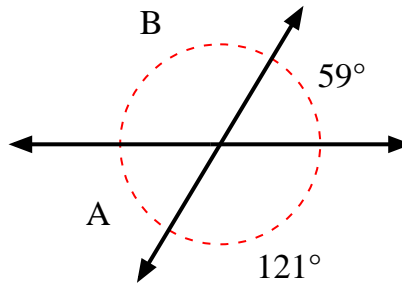
2)



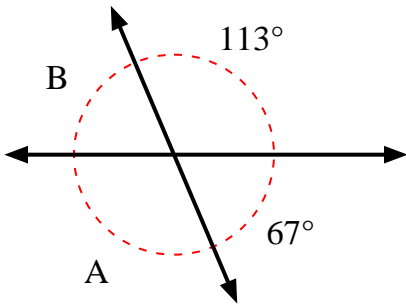
3)



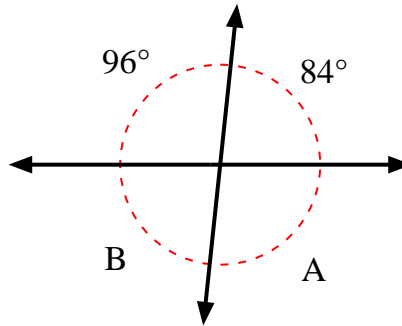
4)



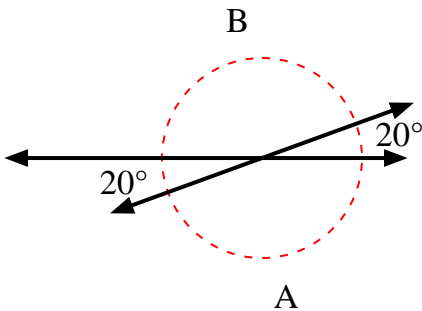
5)



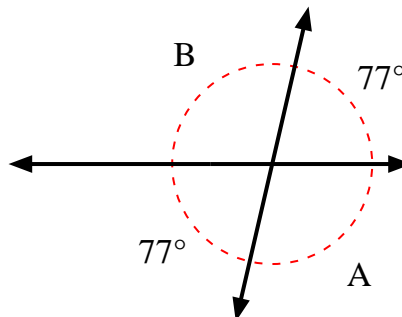
6)



7)



8)



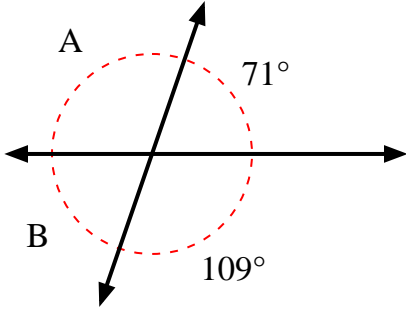
Answers

1. \_\_\_\_\_
2. \_\_\_\_\_
3. \_\_\_\_\_
4. \_\_\_\_\_
5. \_\_\_\_\_
6. \_\_\_\_\_
7. \_\_\_\_\_
8. \_\_\_\_\_

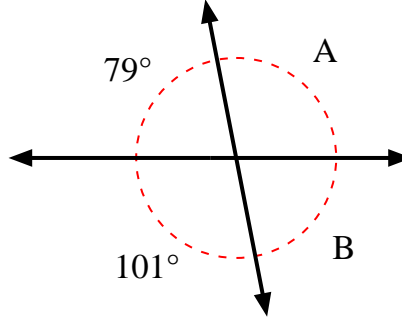


Find the value of angle 'A' and angle 'B'.

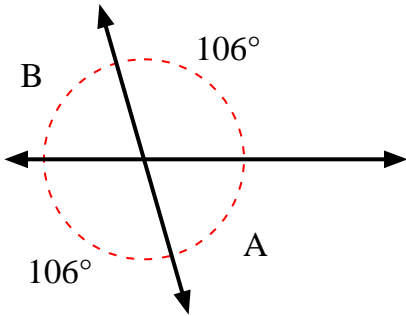
1)



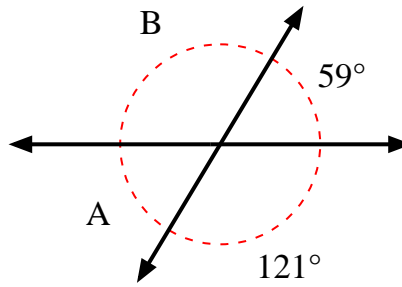
2)



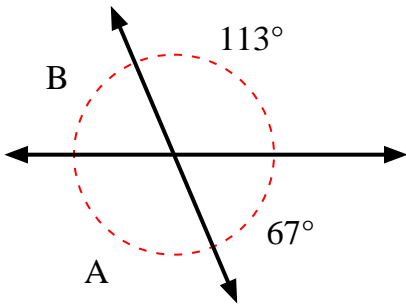
3)



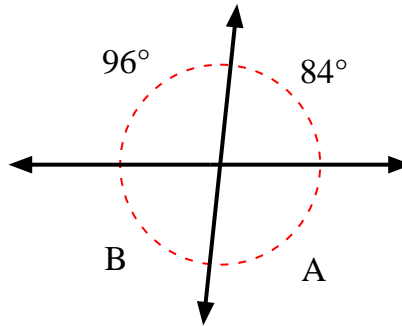
4)



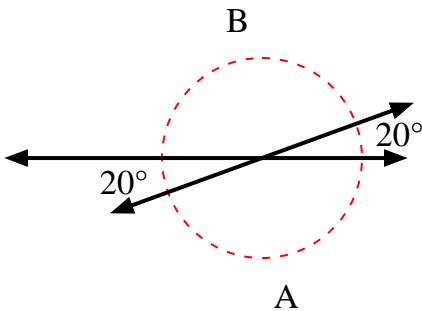
5)



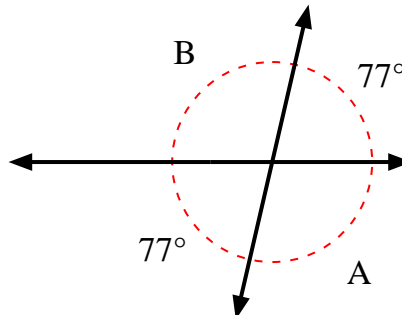
6)



7)



8)



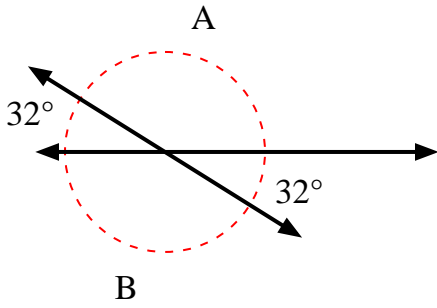
Answers

1.	<b>109°</b>	<b>71°</b>
2.	<b>101°</b>	<b>79°</b>
3.	<b>74°</b>	<b>74°</b>
4.	<b>59°</b>	<b>121°</b>
5.	<b>113°</b>	<b>67°</b>
6.	<b>96°</b>	<b>84°</b>
7.	<b>160°</b>	<b>160°</b>
8.	<b>103°</b>	<b>103°</b>

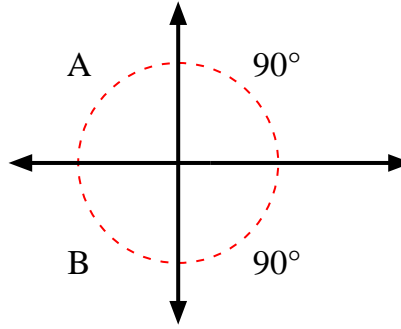


Find the value of angle 'A' and angle 'B'.

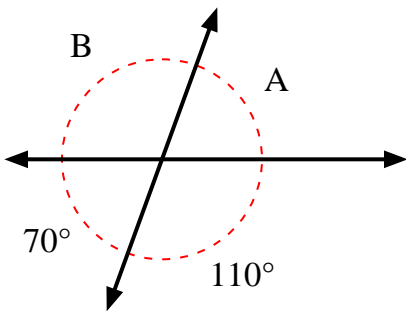
1)



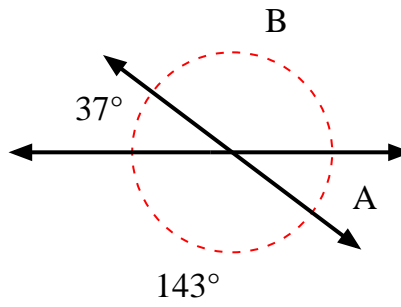
2)



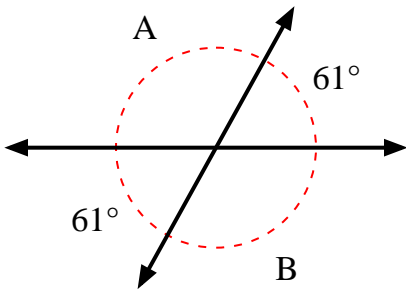
3)



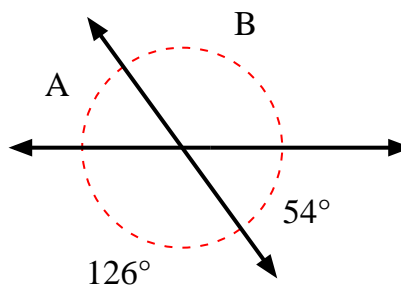
4)



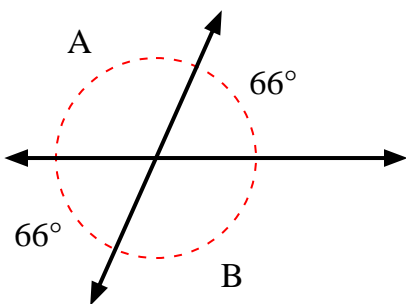
5)



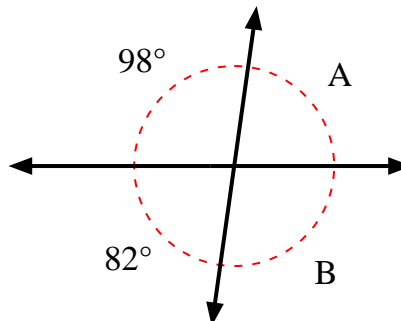
6)



7)



8)



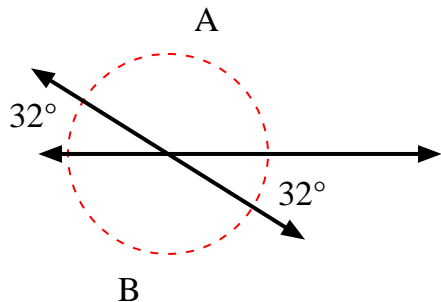
Answers

1. \_\_\_\_\_
2. \_\_\_\_\_
3. \_\_\_\_\_
4. \_\_\_\_\_
5. \_\_\_\_\_
6. \_\_\_\_\_
7. \_\_\_\_\_
8. \_\_\_\_\_

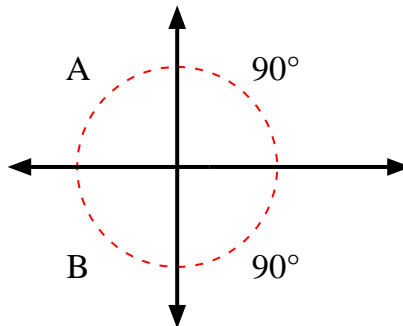


Find the value of angle 'A' and angle 'B'.

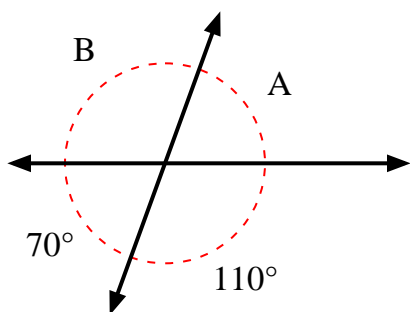
1)



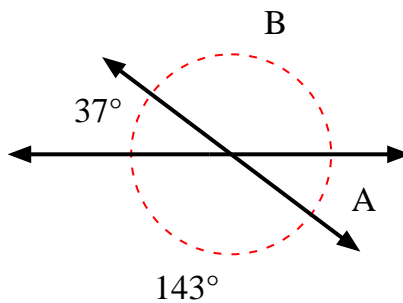
2)



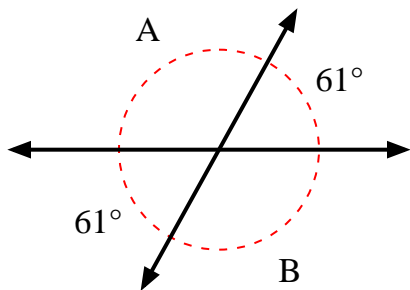
3)



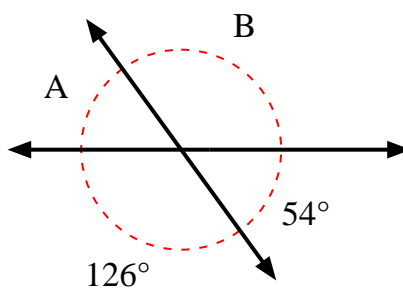
4)



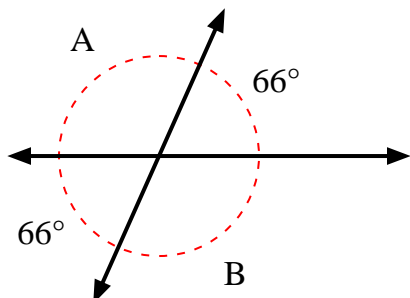
5)



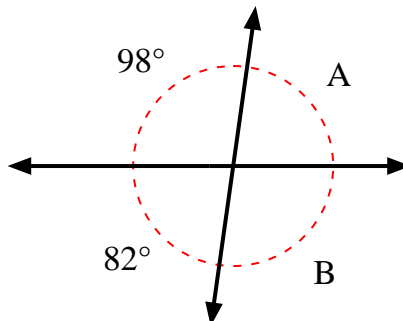
6)



7)



8)



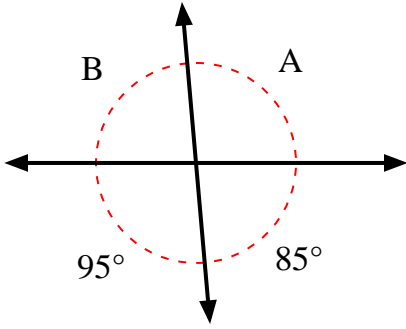
Answers

1.	<b>148°</b>	<b>148°</b>
2.	<b>90°</b>	<b>90°</b>
3.	<b>70°</b>	<b>110°</b>
4.	<b>37°</b>	<b>143°</b>
5.	<b>119°</b>	<b>119°</b>
6.	<b>54°</b>	<b>126°</b>
7.	<b>114°</b>	<b>114°</b>
8.	<b>82°</b>	<b>98°</b>

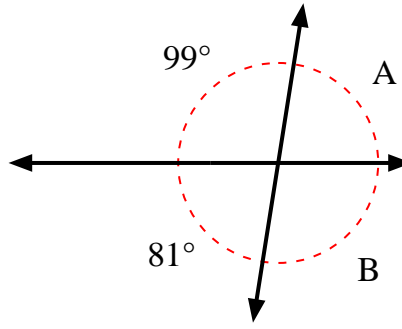


Find the value of angle 'A' and angle 'B'.

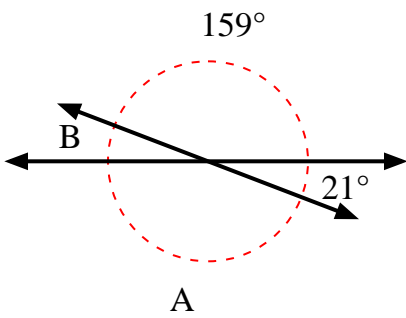
1)



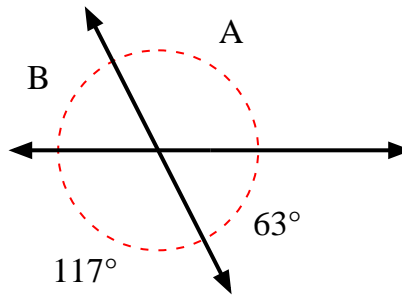
2)



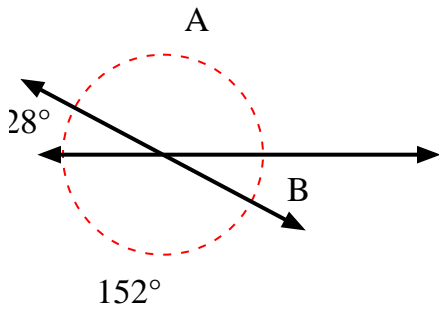
3)



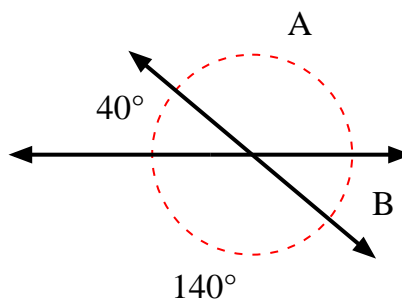
4)



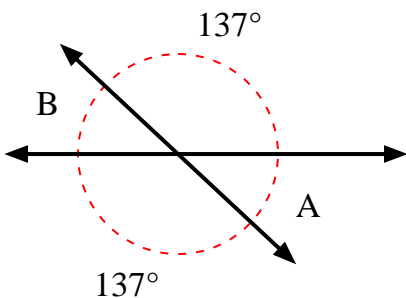
5)



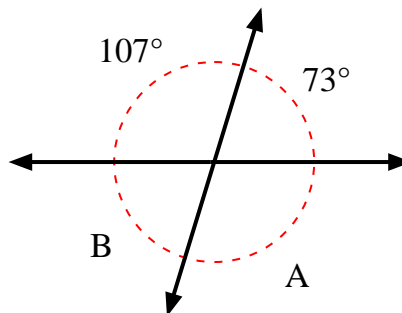
6)



7)



8)



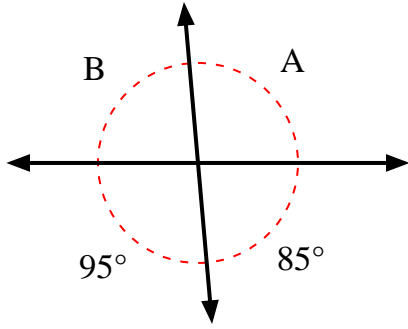
Answers

1. \_\_\_\_\_
2. \_\_\_\_\_
3. \_\_\_\_\_
4. \_\_\_\_\_
5. \_\_\_\_\_
6. \_\_\_\_\_
7. \_\_\_\_\_
8. \_\_\_\_\_

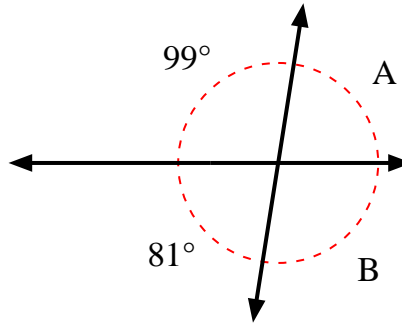


Find the value of angle 'A' and angle 'B'.

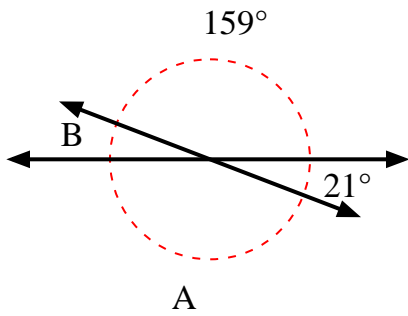
1)



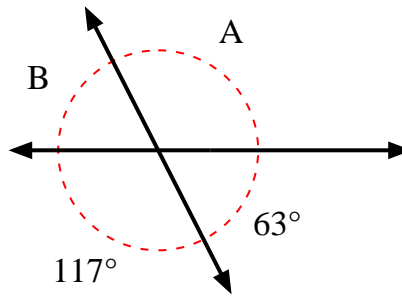
2)



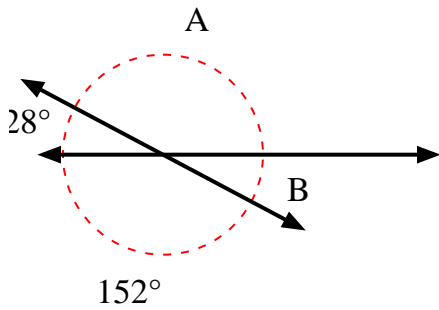
3)



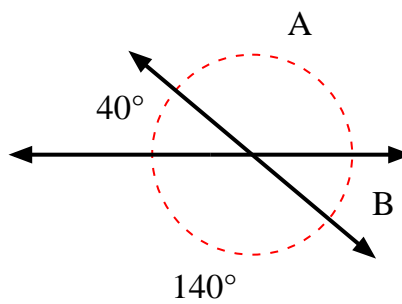
4)



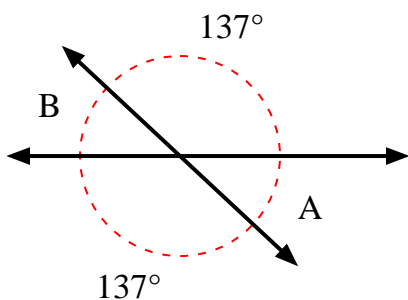
5)



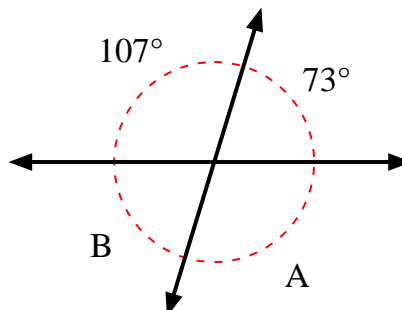
6)



7)



8)



Answers

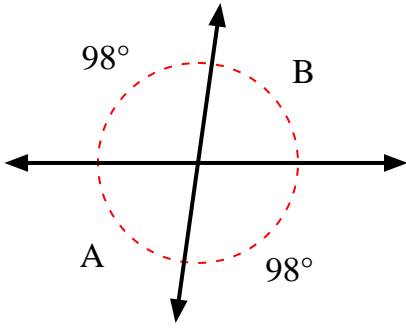
1.	<b>95°</b>	<b>85°</b>
2.	<b>81°</b>	<b>99°</b>
3.	<b>159°</b>	<b>21°</b>
4.	<b>117°</b>	<b>63°</b>
5.	<b>152°</b>	<b>28°</b>
6.	<b>140°</b>	<b>40°</b>
7.	<b>43°</b>	<b>43°</b>
8.	<b>107°</b>	<b>73°</b>



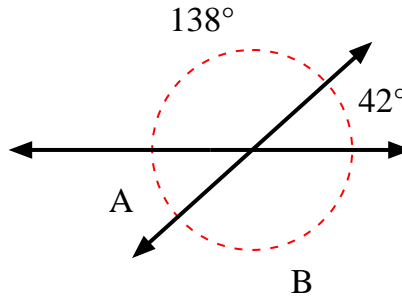


Find the value of angle 'A' and angle 'B'.

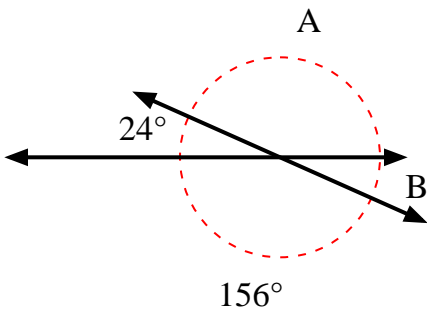
1)



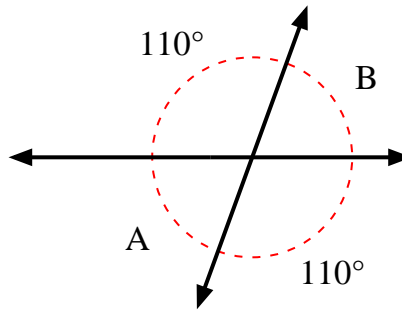
2)



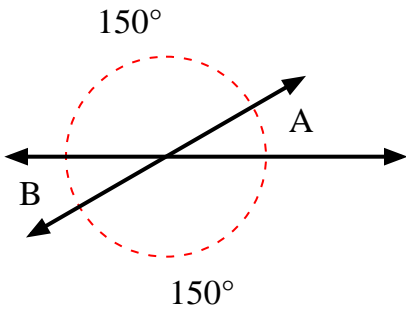
3)



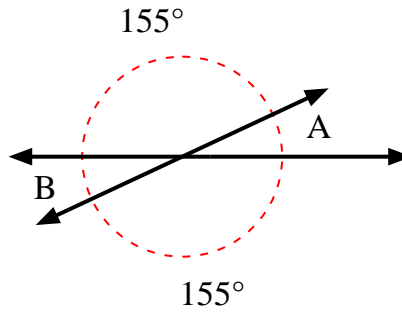
4)



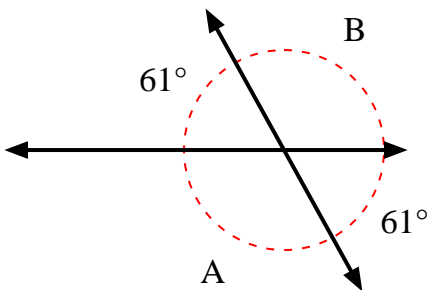
5)



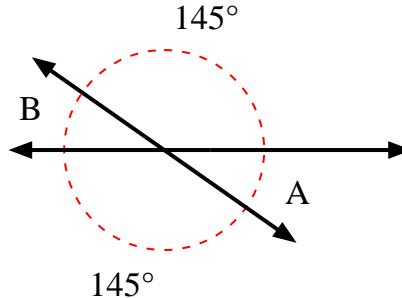
6)



7)



8)



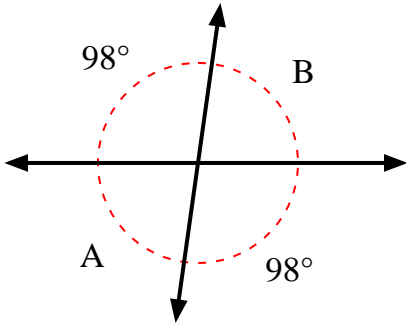
Answers

1. \_\_\_\_\_
2. \_\_\_\_\_
3. \_\_\_\_\_
4. \_\_\_\_\_
5. \_\_\_\_\_
6. \_\_\_\_\_
7. \_\_\_\_\_
8. \_\_\_\_\_

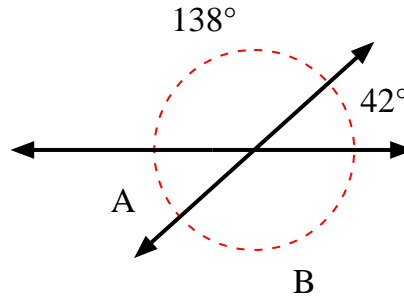


Find the value of angle 'A' and angle 'B'.

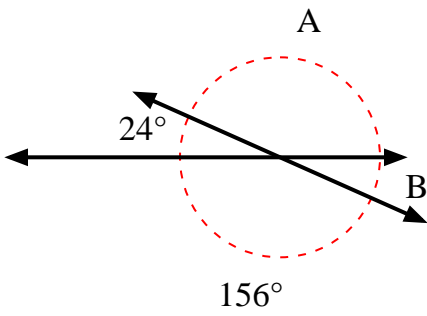
1)



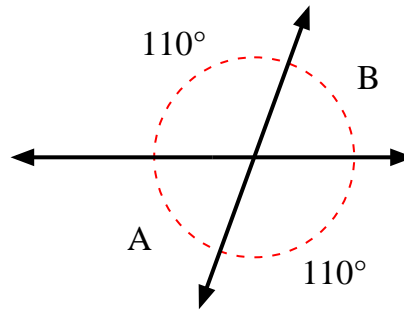
2)



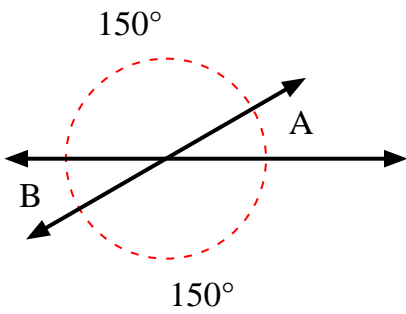
3)



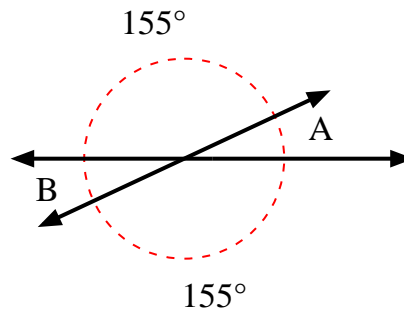
4)



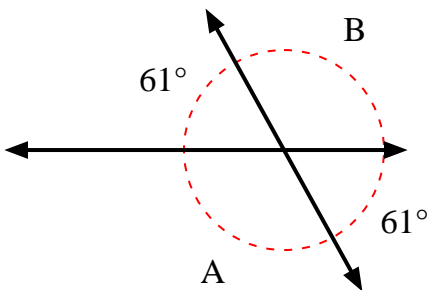
5)



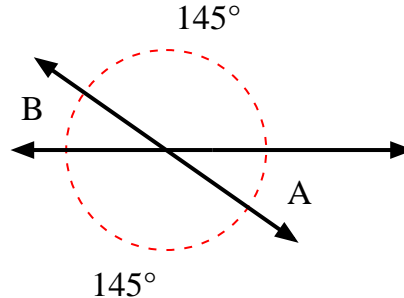
6)



7)



8)



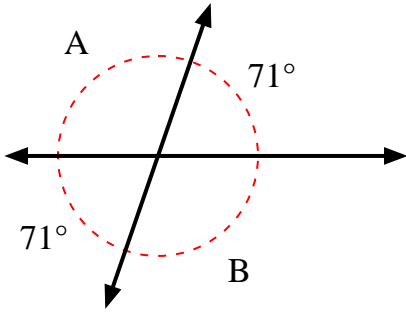
Answers

1.	<b>82°</b>	<b>82°</b>
2.	<b>42°</b>	<b>138°</b>
3.	<b>156°</b>	<b>24°</b>
4.	<b>70°</b>	<b>70°</b>
5.	<b>30°</b>	<b>30°</b>
6.	<b>25°</b>	<b>25°</b>
7.	<b>119°</b>	<b>119°</b>
8.	<b>35°</b>	<b>35°</b>

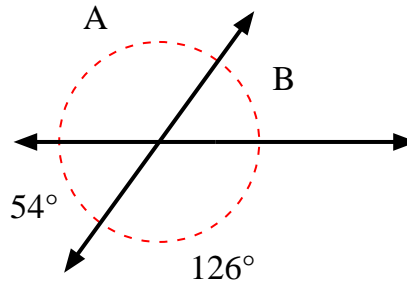


Find the value of angle 'A' and angle 'B'.

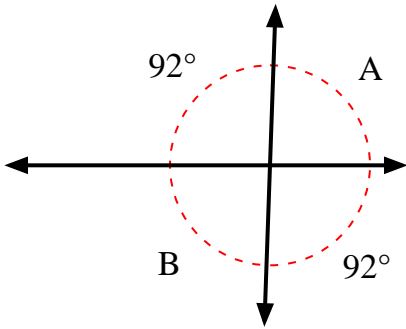
1)



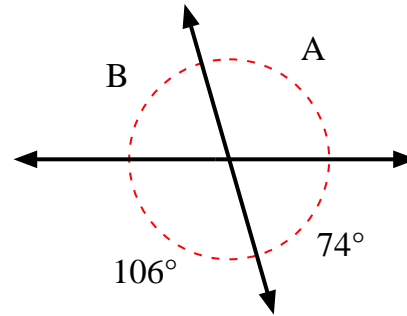
2)



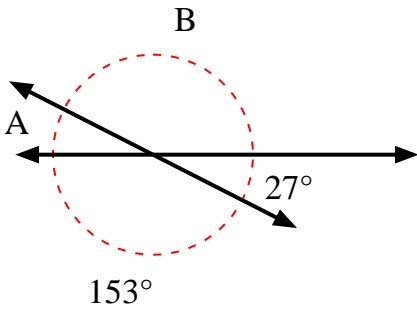
3)



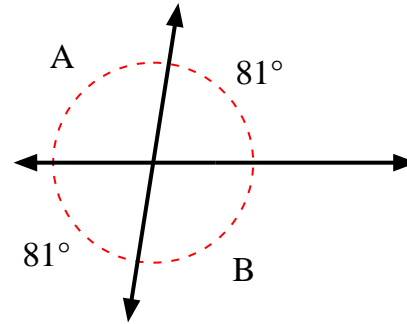
4)



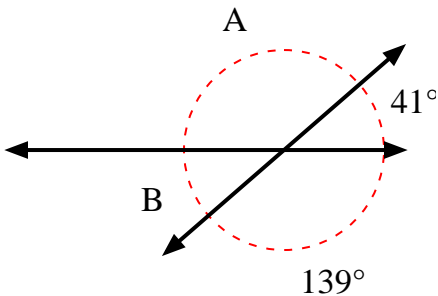
5)



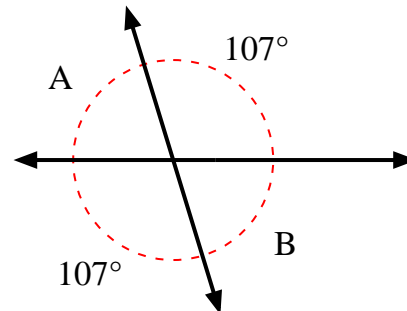
6)



7)



8)



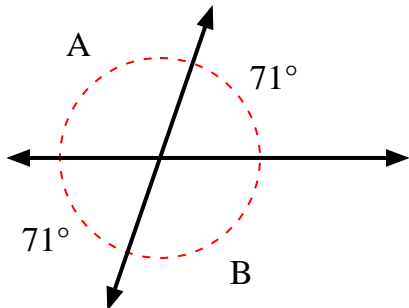
Answers

1. \_\_\_\_\_
2. \_\_\_\_\_
3. \_\_\_\_\_
4. \_\_\_\_\_
5. \_\_\_\_\_
6. \_\_\_\_\_
7. \_\_\_\_\_
8. \_\_\_\_\_

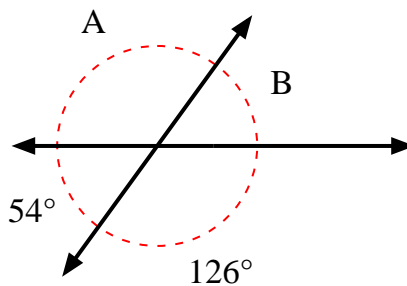


Find the value of angle 'A' and angle 'B'.

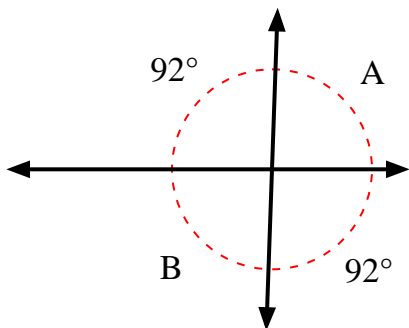
1)



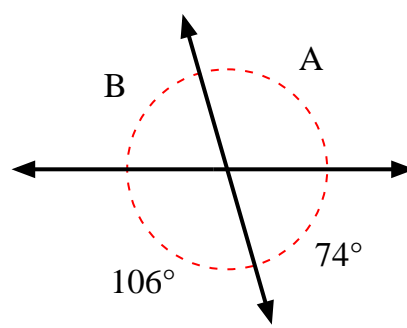
2)



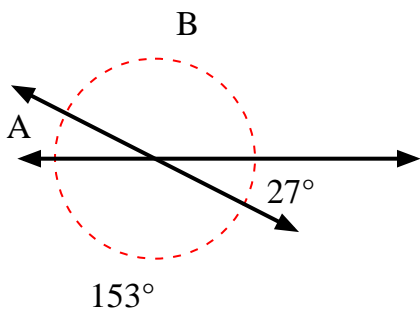
3)



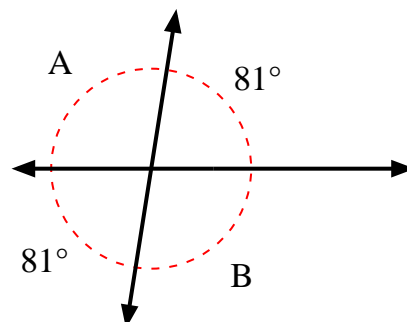
4)



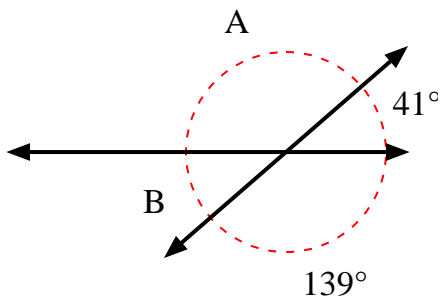
5)



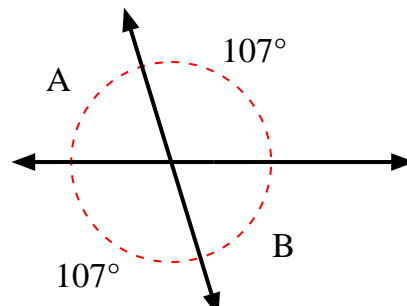
6)



7)



8)



Answers

1.	<b>109°</b>	<b>109°</b>
2.	<b>126°</b>	<b>54°</b>
3.	<b>88°</b>	<b>88°</b>
4.	<b>106°</b>	<b>74°</b>
5.	<b>27°</b>	<b>153°</b>
6.	<b>99°</b>	<b>99°</b>
7.	<b>139°</b>	<b>41°</b>
8.	<b>73°</b>	<b>73°</b>