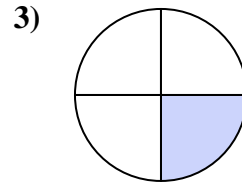
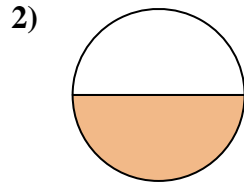
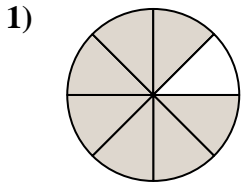




Find the angle (in degrees) of the shaded portion of the circle.

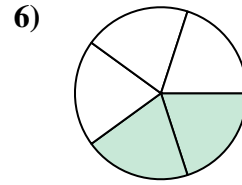
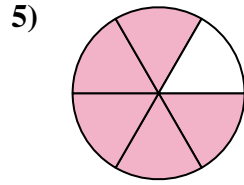
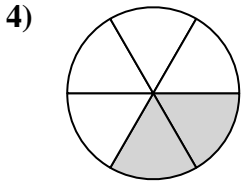
Answers



1. \_\_\_\_\_

2. \_\_\_\_\_

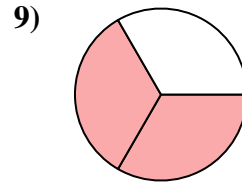
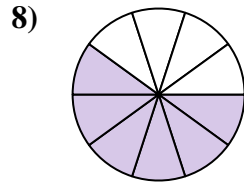
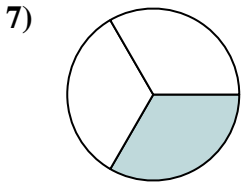
3. \_\_\_\_\_



4. \_\_\_\_\_

5. \_\_\_\_\_

6. \_\_\_\_\_

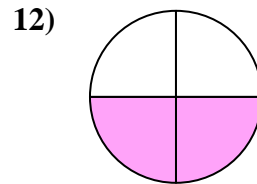
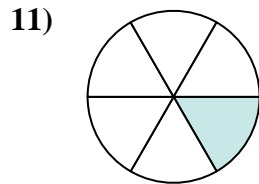
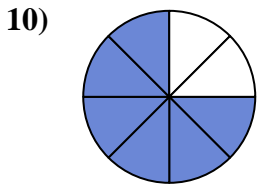


7. \_\_\_\_\_

8. \_\_\_\_\_

9. \_\_\_\_\_

10. \_\_\_\_\_



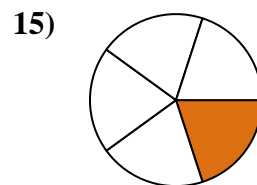
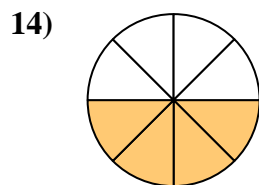
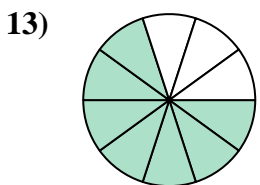
11. \_\_\_\_\_

12. \_\_\_\_\_

13. \_\_\_\_\_

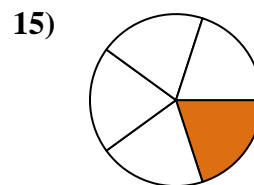
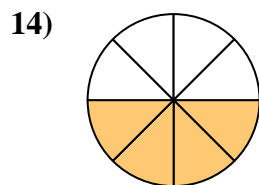
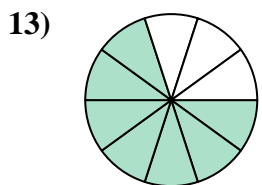
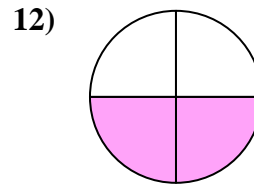
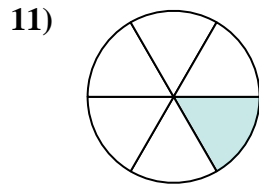
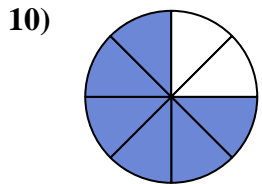
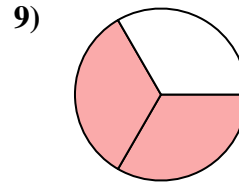
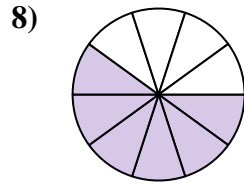
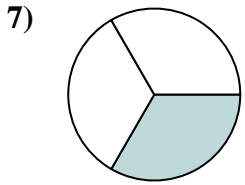
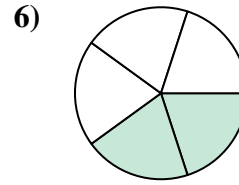
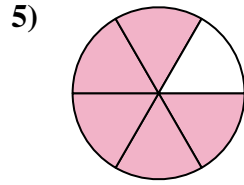
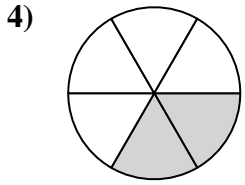
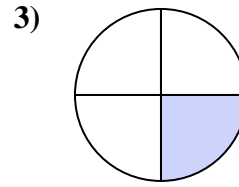
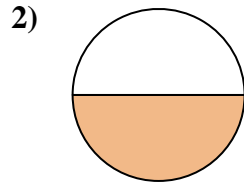
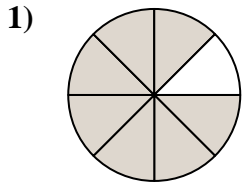
14. \_\_\_\_\_

15. \_\_\_\_\_





Find the angle (in degrees) of the shaded portion of the circle.



Answers

1. 315

2. 180

3. 90

4. 120

5. 300

6. 144

7. 120

8. 216

9. 240

10. 270

11. 60

12. 180

13. 252

14. 180

15. 72



Find the angle (in degrees) of the shaded portion of the circle.

Answers

120

270

90

216

315

180

180

144

240

300

120

60

1. \_\_\_\_\_

2. \_\_\_\_\_

3. \_\_\_\_\_

4. \_\_\_\_\_

5. \_\_\_\_\_

6. \_\_\_\_\_

7. \_\_\_\_\_

8. \_\_\_\_\_

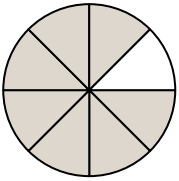
9. \_\_\_\_\_

10. \_\_\_\_\_

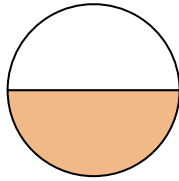
11. \_\_\_\_\_

12. \_\_\_\_\_

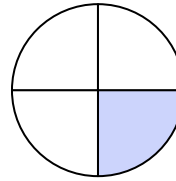
1)



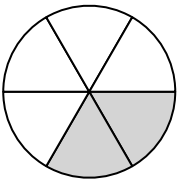
2)



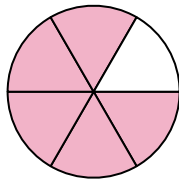
3)



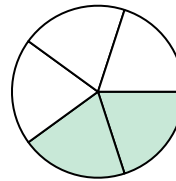
4)



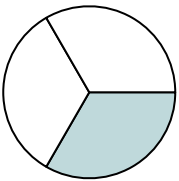
5)



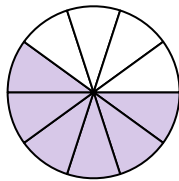
6)



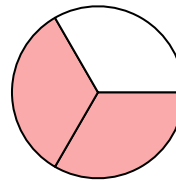
7)



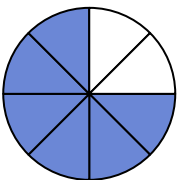
8)



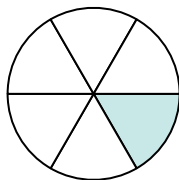
9)



10)



11)



12)

