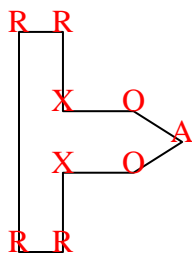


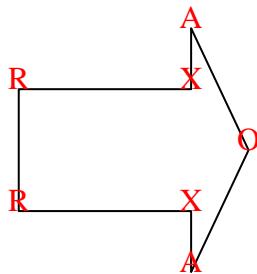


Count the number of Acute, Obtuse, Right and Reflex angles in each shape.

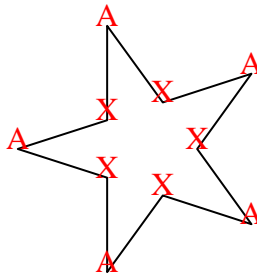
Ex)



1)



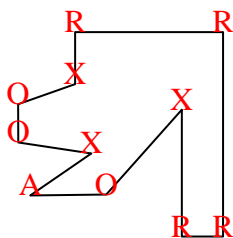
2)



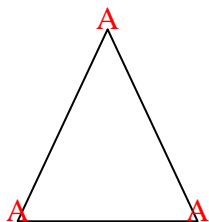
Answers

| | | | | |
|-----|----------|----------|----------|----------|
| Ex. | <u>1</u> | <u>2</u> | <u>4</u> | <u>2</u> |
| 1. | <u>2</u> | <u>1</u> | <u>2</u> | <u>2</u> |
| 2. | <u>5</u> | <u>0</u> | <u>0</u> | <u>5</u> |
| 3. | <u>1</u> | <u>3</u> | <u>4</u> | <u>3</u> |
| 4. | <u>3</u> | <u>0</u> | <u>0</u> | <u>0</u> |
| 5. | <u>2</u> | <u>1</u> | <u>4</u> | <u>4</u> |
| 6. | <u>2</u> | <u>2</u> | <u>0</u> | <u>0</u> |
| 7. | <u>2</u> | <u>4</u> | <u>1</u> | <u>2</u> |
| 8. | <u>2</u> | <u>2</u> | <u>1</u> | <u>1</u> |
| 9. | <u>1</u> | <u>2</u> | <u>1</u> | <u>0</u> |
| 10. | <u>0</u> | <u>0</u> | <u>8</u> | <u>4</u> |
| 11. | <u>0</u> | <u>8</u> | <u>0</u> | <u>0</u> |

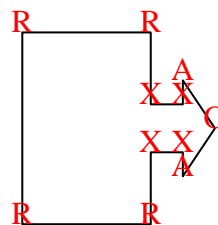
3)



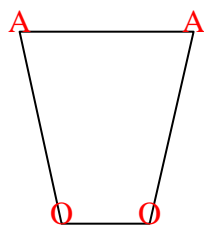
4)



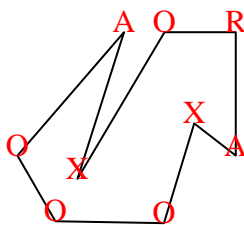
5)



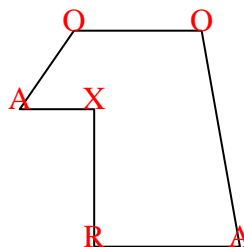
6)



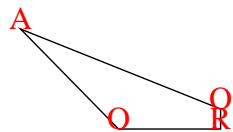
7)



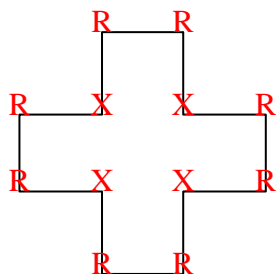
8)



9)



10)



11)

