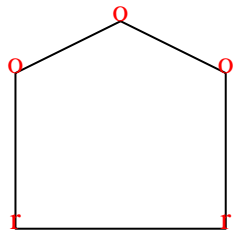




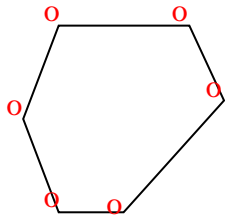


Count the number of Acute, Obtuse and Right angles inside each shape.

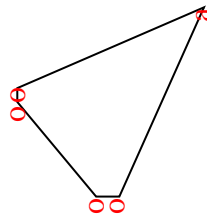
Ex)



1)



2)



Answers

Ex. 0 3 2

1. 0 6 0

2. 1 4 0

3. 1 2 1

4. 3 0 0

5. 0 2 3

6. 2 0 1

7. 0 4 2

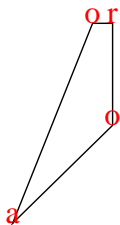
8. 0 6 0

9. 0 7 0

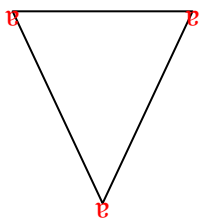
10. 0 2 3

11. 2 2 0

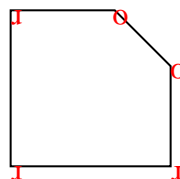
3)



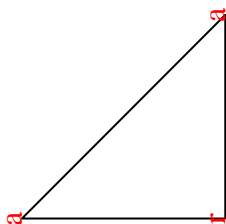
4)



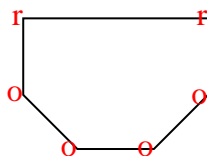
5)



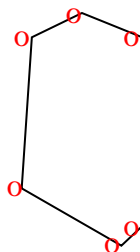
6)



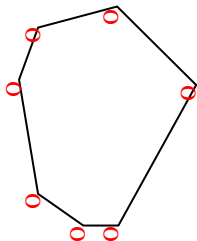
7)



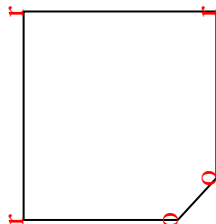
8)



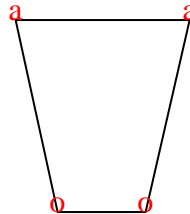
9)



10)



11)























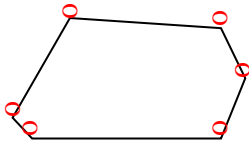




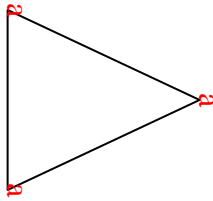


Count the number of Acute, Obtuse and Right angles inside each shape.

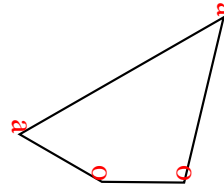
Ex)



1)



2)



Answers

Ex. 0 6 0

1. 3 0 0

2. 2 2 0

3. 0 2 3

4. 1 3 1

5. 1 1 2

6. 0 3 2

7. 1 2 1

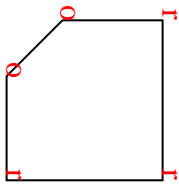
8. 0 7 0

9. 0 0 4

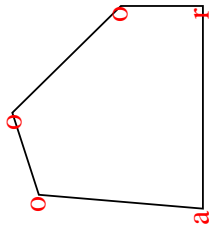
10. 1 4 0

11. 2 2 0


3)



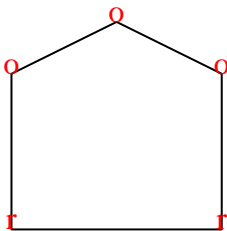
4)



5)



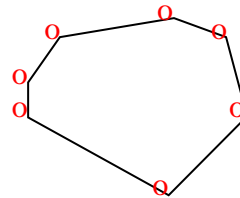
6)




7)



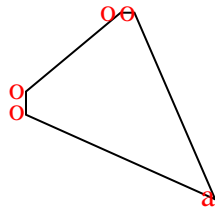
8)



9)



10)



11)

