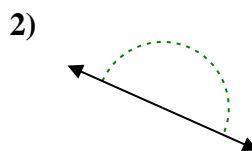
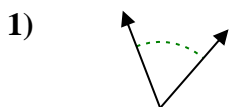




Determine if the angle shown is acute, obtuse, right or straight.

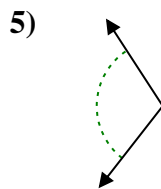
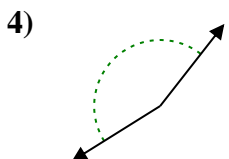
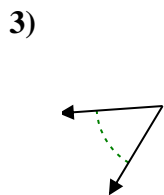
Answers



Ex. acute

1. _____

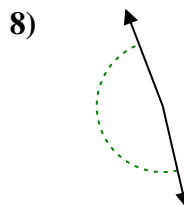
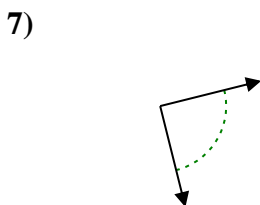
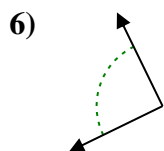
2. _____



3. _____

4. _____

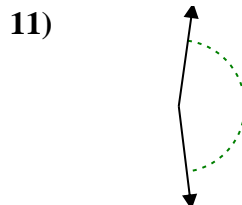
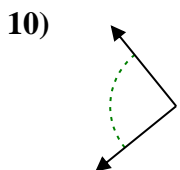
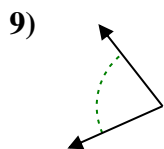
5. _____



6. _____

7. _____

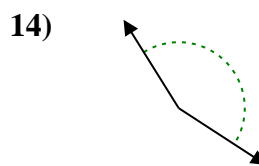
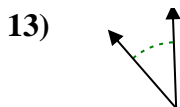
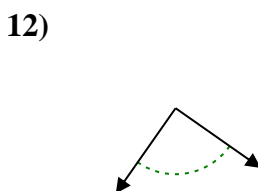
8. _____



9. _____

10. _____

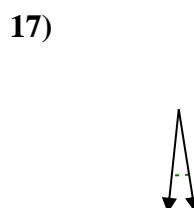
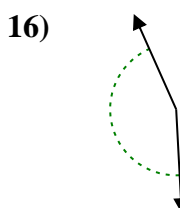
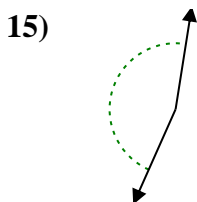
11. _____



12. _____

13. _____

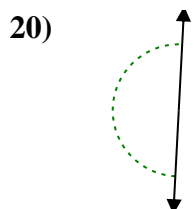
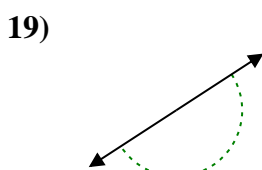
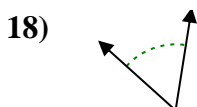
14. _____



15. _____

16. _____

17. _____



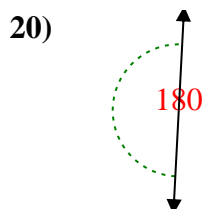
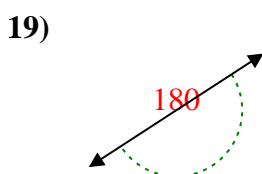
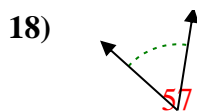
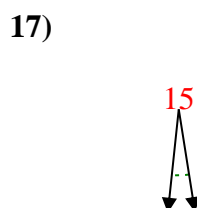
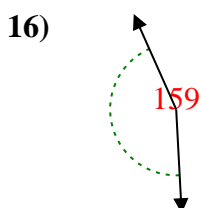
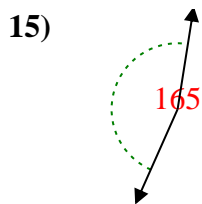
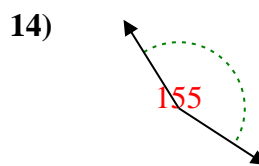
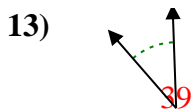
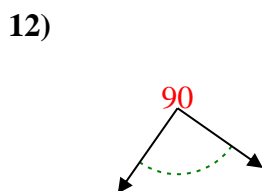
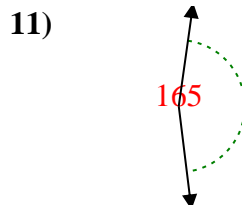
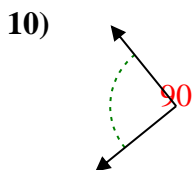
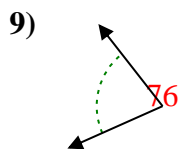
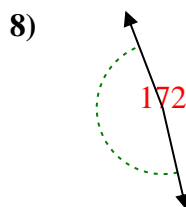
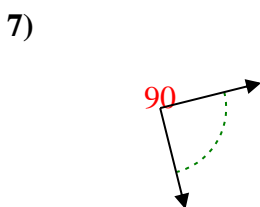
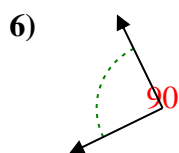
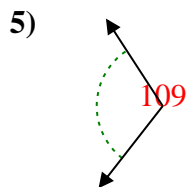
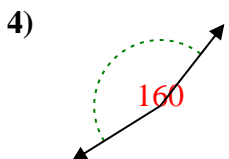
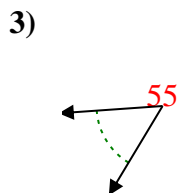
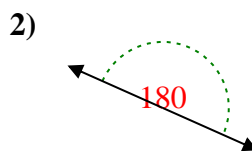
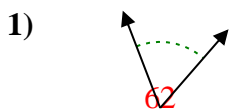
18. _____

19. _____

20. _____



Determine if the angle shown is acute, obtuse, right or straight.



Answers

Ex. **acute**

1. **acute**

2. **straight**

3. **acute**

4. **obtuse**

5. **obtuse**

6. **right**

7. **right**

8. **obtuse**

9. **acute**

10. **right**

11. **obtuse**

12. **right**

13. **acute**

14. **obtuse**

15. **obtuse**

16. **obtuse**

17. **acute**

18. **acute**

19. **straight**

20. **straight**