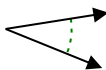




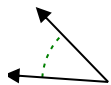
Determine if the angle shown is acute, obtuse, right or straight.

Answers

Ex)



1)



2)

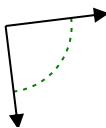


Ex. **acute**

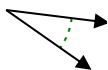
1. _____

2. _____

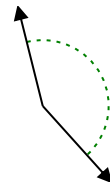
3)



4)



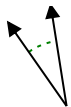
5)



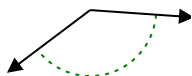
3. _____

4. _____

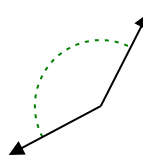
6)



7)



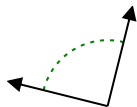
8)



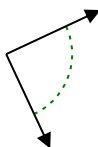
5. _____

6. _____

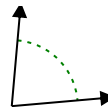
9)



10)



11)



7. _____

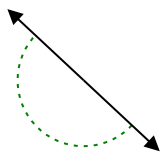
8. _____

9. _____

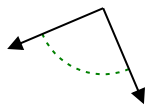
10. _____

11. _____

12)



13)



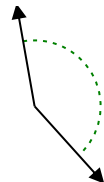
14)



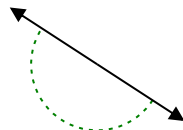
12. _____

13. _____

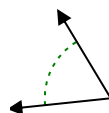
15)



16)



17)

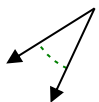


14. _____

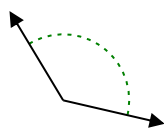
15. _____

16. _____

18)



19)



20)



17. _____

18. _____

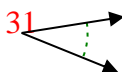
19. _____

20. _____

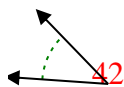


Determine if the angle shown is acute, obtuse, right or straight.

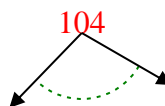
Ex)



1)



2)



Ex. **acute**

1. **acute**

2. **obtuse**

3. **right**

4. **acute**

5. **obtuse**

6. **acute**

7. **obtuse**

8. **obtuse**

9. **right**

10. **right**

11. **acute**

12. **straight**

13. **right**

14. **obtuse**

15. **obtuse**

16. **straight**

17. **acute**

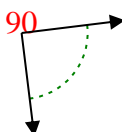
18. **acute**

19. **obtuse**

20. **obtuse**

20. **obtuse**

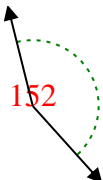
3)



4)



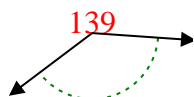
5)



6)



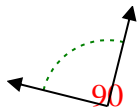
7)



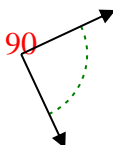
8)



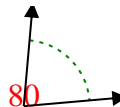
9)



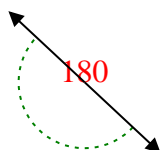
10)



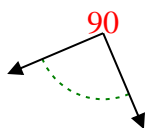
11)



12)



13)



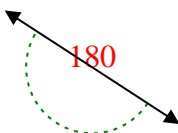
14)



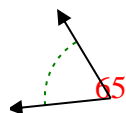
15)



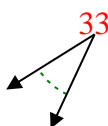
16)



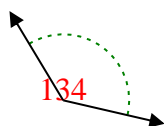
17)



18)



19)



20)

