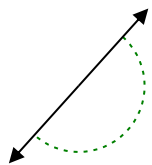




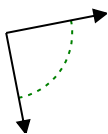
Determine if the angle shown is acute, obtuse, right or straight.

Answers

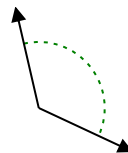
Ex)



1)



2)

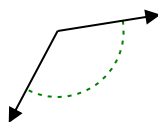


Ex. **straight**

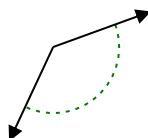
1. \_\_\_\_\_

2. \_\_\_\_\_

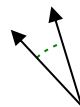
3)



4)



5)



3. \_\_\_\_\_

4. \_\_\_\_\_

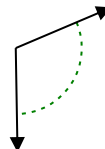
6)



7)



8)

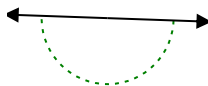


5. \_\_\_\_\_

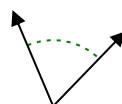
6. \_\_\_\_\_

7. \_\_\_\_\_

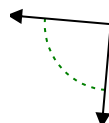
9)



10)



11)

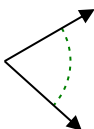


8. \_\_\_\_\_

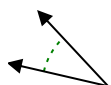
9. \_\_\_\_\_

10. \_\_\_\_\_

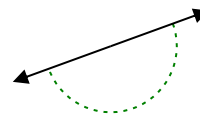
12)



13)



14)

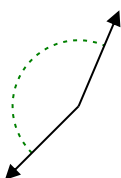


11. \_\_\_\_\_

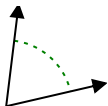
12. \_\_\_\_\_

13. \_\_\_\_\_

15)



16)



17)

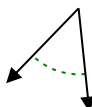


14. \_\_\_\_\_

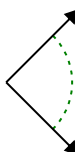
15. \_\_\_\_\_

16. \_\_\_\_\_

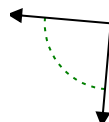
18)



19)



20)



17. \_\_\_\_\_

18. \_\_\_\_\_

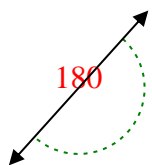
19. \_\_\_\_\_

20. \_\_\_\_\_

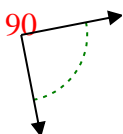


Determine if the angle shown is acute, obtuse, right or straight.

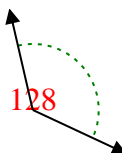
Ex)



1)



2)



Answers

Ex. **straight**

1. **right**

2. **obtuse**

3. **obtuse**

4. **obtuse**

5. **acute**

6. **obtuse**

7. **obtuse**

8. **obtuse**

9. **straight**

10. **acute**

11. **right**

12. **acute**

13. **acute**

14. **straight**

15. **obtuse**

16. **acute**

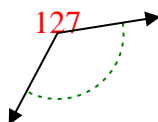
17. **acute**

18. **acute**

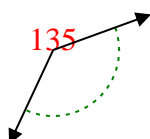
19. **right**

20. **right**

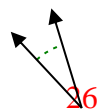
3)



4)



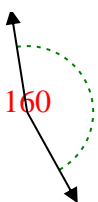
5)



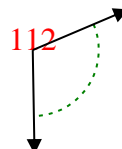
6)



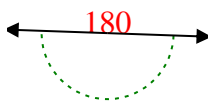
7)



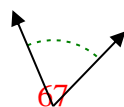
8)



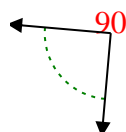
9)



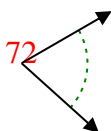
10)



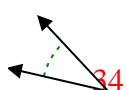
11)



12)



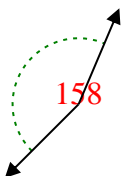
13)



14)



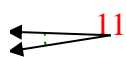
15)



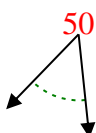
16)



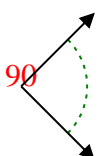
17)



18)



19)



20)

