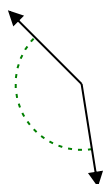




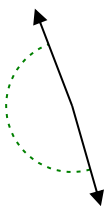
Determine if the angle shown is acute, obtuse, right or straight.

Answers

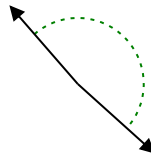
Ex)



1)



2)

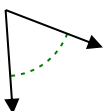


Ex. **obtuse**

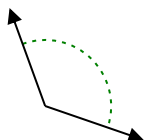
1. \_\_\_\_\_

2. \_\_\_\_\_

3)



4)



5)

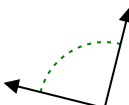


3. \_\_\_\_\_

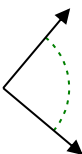
4. \_\_\_\_\_

5. \_\_\_\_\_

6)



7)



8)

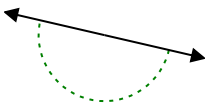


6. \_\_\_\_\_

7. \_\_\_\_\_

8. \_\_\_\_\_

9)



10)



11)

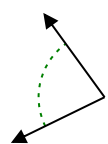


9. \_\_\_\_\_

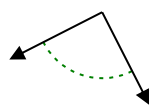
10. \_\_\_\_\_

11. \_\_\_\_\_

12)



13)



14)

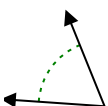


12. \_\_\_\_\_

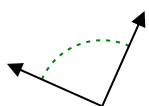
13. \_\_\_\_\_

14. \_\_\_\_\_

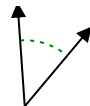
15)



16)



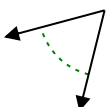
17)



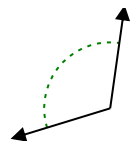
15. \_\_\_\_\_

16. \_\_\_\_\_

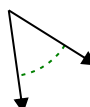
18)



19)



20)



17. \_\_\_\_\_

18. \_\_\_\_\_

19. \_\_\_\_\_

20. \_\_\_\_\_

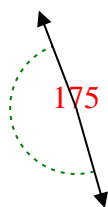


Determine if the angle shown is acute, obtuse, right or straight.

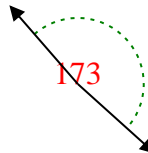
Ex)



1)



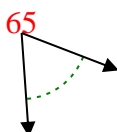
2)



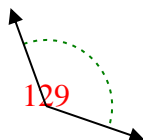
Answers

Ex. **obtuse**

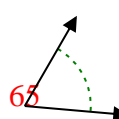
3)



4)



5)



1. **obtuse**

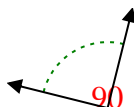
2. **obtuse**

3. **acute**

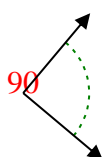
4. **obtuse**

5. **acute**

6)



7)



8)

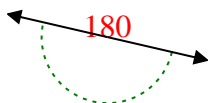


6. **right**

7. **right**

8. **obtuse**

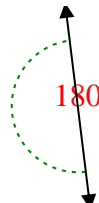
9)



10)



11)

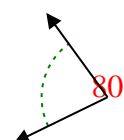


9. **straight**

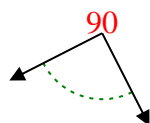
10. **acute**

11. **straight**

12)



13)



14)

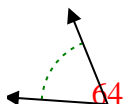


12. **acute**

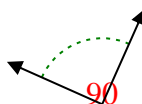
13. **right**

14. **obtuse**

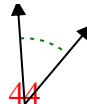
15)



16)



17)

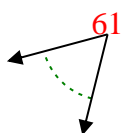


15. **acute**

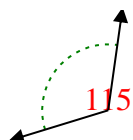
16. **right**

17. **acute**

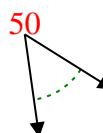
18)



19)



20)



18. **acute**

19. **obtuse**

20. **acute**