




Write the shaded amount as a fraction.

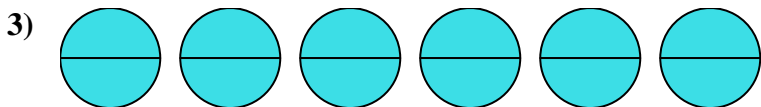
Answers



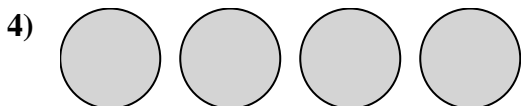
1. _____



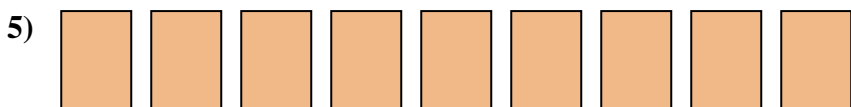
2. _____



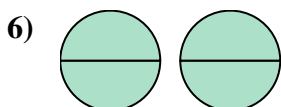
3. _____



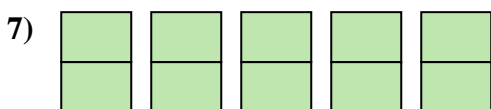
4. _____



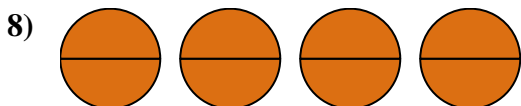
5. _____



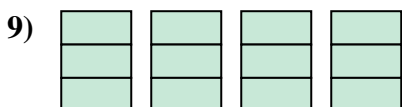
6. _____



7. _____



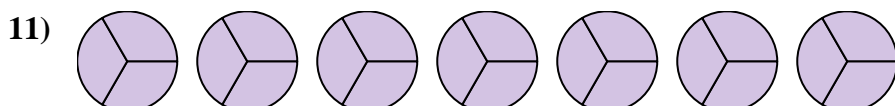
8. _____



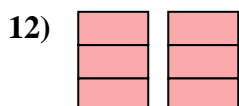
9. _____



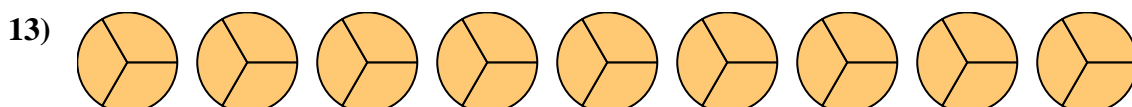
10. _____



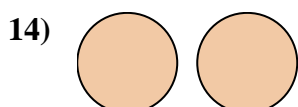
11. _____



12. _____



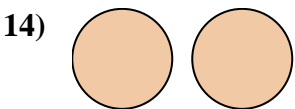
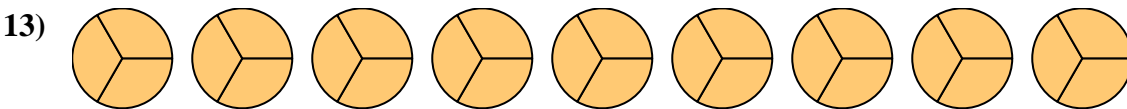
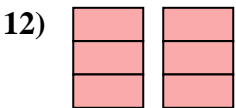
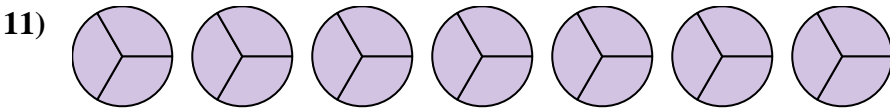
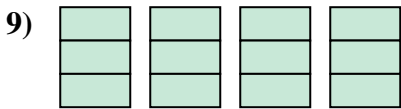
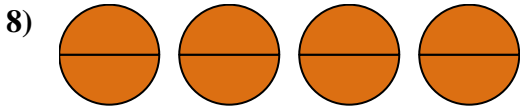
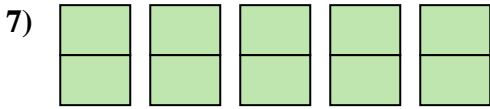
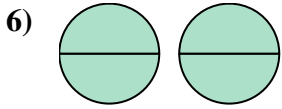
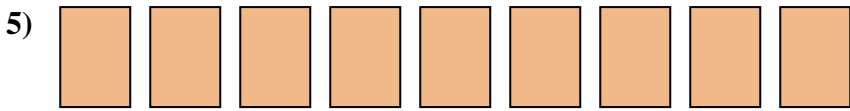
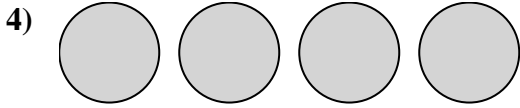
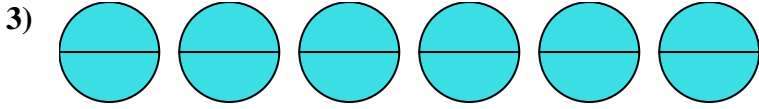

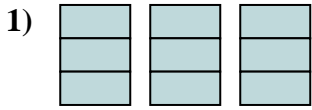
13. _____



14. _____



Write the shaded amount as a fraction.



Answers

1. $\frac{9}{3}$

2. $\frac{7}{1}$

3. $\frac{12}{2}$

4. $\frac{4}{1}$

5. $\frac{9}{1}$

6. $\frac{4}{2}$

7. $\frac{10}{2}$

8. $\frac{8}{2}$

9. $\frac{12}{3}$

10. $\frac{5}{1}$

11. $\frac{21}{3}$

12. $\frac{6}{3}$

13. $\frac{27}{3}$

14. $\frac{2}{1}$