



Solve each problem using a tape diagram.

Answers

- 1) Amy was organizing her pictures on her computer. In folder 1 she had 18 pictures. In folder 2 she had 10 more pictures than folder 1. And in folder 3 she had 4 times as many pictures as folder 1. How many pictures does she have total?

- 2) Alice, Bobby and Charles were collecting cans. Charles collected 5 times as many cans as Alice. Alice collected 15 cans. And Bobby collected 6 more cans than Alice. How many cans did they collect total?

- 3) The school book fair sold 21 books on Wednesday. On Friday they sold 3 fewer than Thursday. On Thursday they sold 8 times as many as on Wednesday. How many books did they sell in those three days?

- 4) Amy, Billy and Carl were working on a school project. Amy spent 20 minutes on her portion. Billy spent 8 times as long on his portion. And Carl spent 2 minutes fewer than Billy did. How many minutes total were they working?

- 5) On Friday a game store sold 17 copies of the new Mario game. On Saturday they sold 3 times as many as on Friday. And then on Sunday they sold 10 less than the amount on Friday. How many did they sell total?

1. _____

2. _____

3. _____

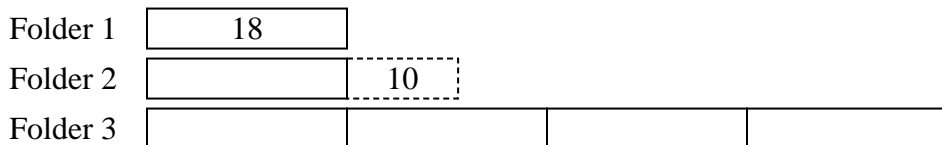
4. _____

5. _____




Solve each problem using a tape diagram.

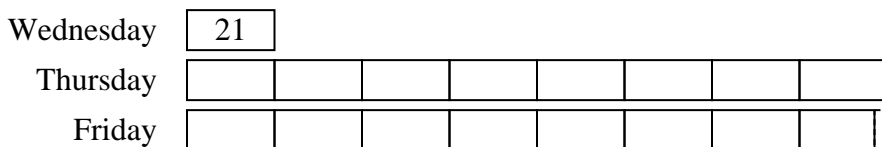
- 1) Amy was organizing her pictures on her computer. In folder 1 she had 18 pictures. In folder 2 she had 10 more pictures than folder 1. And in folder 3 she had 4 times as many pictures as folder 1. How many pictures does she have total?



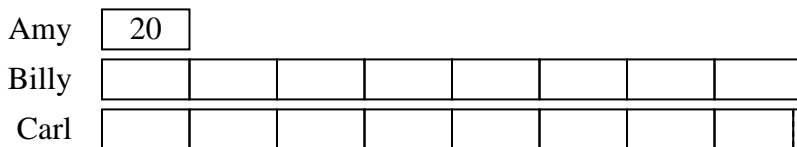
- 2) Alice, Bobby and Charles were collecting cans. Charles collected 5 times as many cans as Alice. Alice collected 15 cans. And Bobby collected 6 more cans than Alice. How many cans did they collect total?



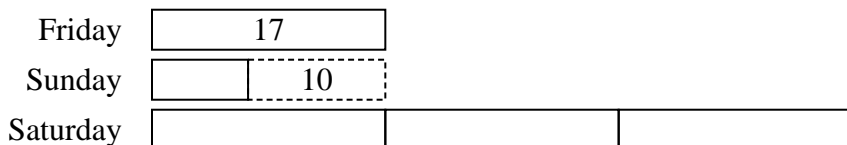
- 3) The school book fair sold 21 books on Wednesday. On Friday they sold 3 fewer than Thursday. On Thursday they sold 8 times as many as on Wednesday. How many books did they sell in those three days?



- 4) Amy, Billy and Carl were working on a school project. Amy spent 20 minutes on her portion. Billy spent 8 times as long on his portion. And Carl spent 2 minutes fewer than Billy did. How many minutes total were they working?



- 5) On Friday a game store sold 17 copies of the new Mario game. On Saturday they sold 3 times as many as on Friday. And then on Sunday they sold 10 less than the amount on Friday. How many did they sell total?



Answers

1. 118
2. 111
3. 354
4. 338
5. 75