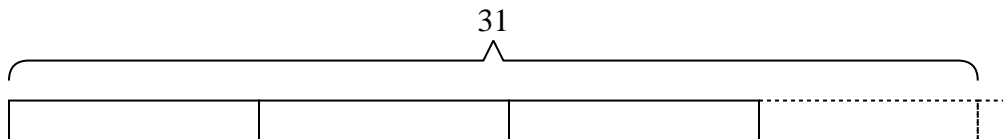




Solve each problem.

Answers

- 1) A movie store had {thirty-one} movies they were putting on {eight} shelves. If the owner wanted to make sure each shelf had the same number of movies how many more movies would he need?

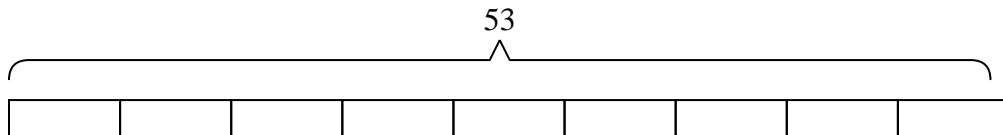


1. _____

2. _____

3. _____

- 2) There are {fifty-three} students going to a trivia competition. If each school van can hold {six} students, how many vans will they need?

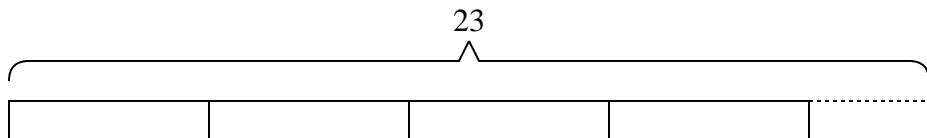


4. _____

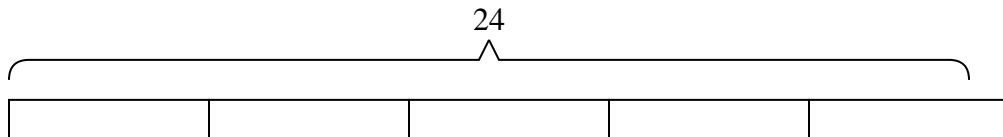
5. _____

6. _____

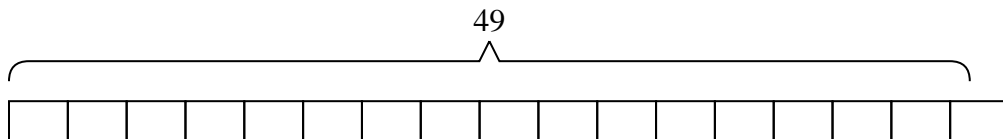
- 3) A baker had {five} boxes for donuts. He ended up making {twenty-three} donuts and splitting them evenly between the boxes. How many extra donuts did he end up with?



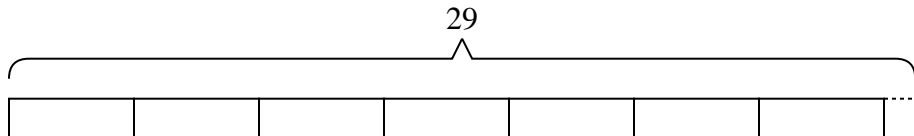
- 4) A clown needed {twenty-four} balloons for a party he was going to, but the balloons only came in packs of {five}. How many packs of balloons would he need to buy?



- 5) Adam was trying to beat his old score of {forty-nine} points in a video game. If he scores exactly {three} points each round, how many rounds would he need to play to beat his old score?



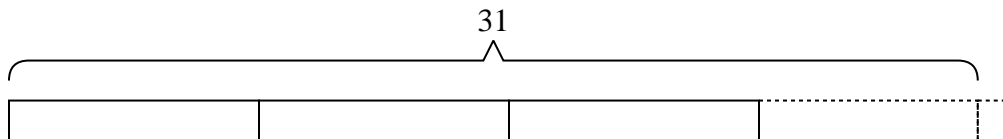
- 6) Olivia had {twenty-nine} songs on her mp3 player. If she wanted to put the songs equally into {four} different playlists, how many songs would she have left over?



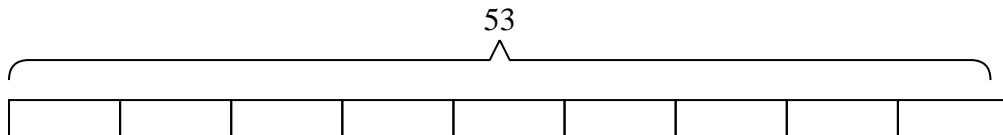


Solve each problem.

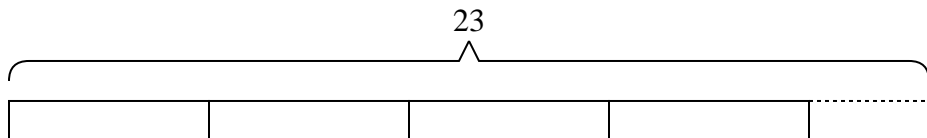
- 1) A movie store had {thirty-one} movies they were putting on {eight} shelves. If the owner wanted to make sure each shelf had the same number of movies how many more movies would he need?



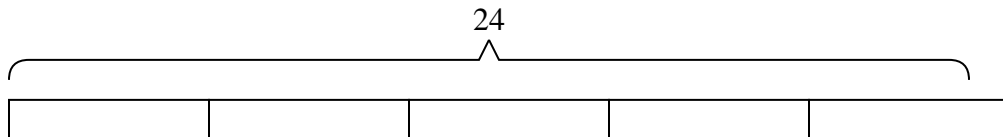
- 2) There are {fifty-three} students going to a trivia competition. If each school van can hold {six} students, how many vans will they need?



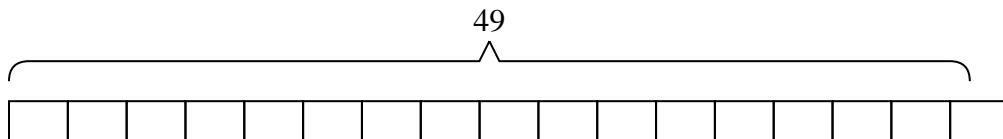
- 3) A baker had {five} boxes for donuts. He ended up making {twenty-three} donuts and splitting them evenly between the boxes. How many extra donuts did he end up with?



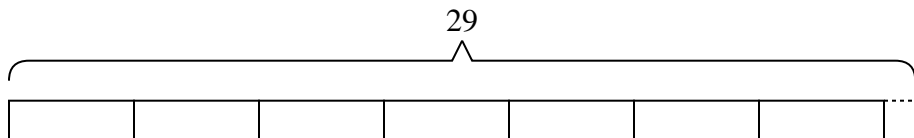
- 4) A clown needed {twenty-four} balloons for a party he was going to, but the balloons only came in packs of {five}. How many packs of balloons would he need to buy?



- 5) Adam was trying to beat his old score of {forty-nine} points in a video game. If he scores exactly {three} points each round, how many rounds would he need to play to beat his old score?



- 6) Olivia had {twenty-nine} songs on her mp3 player. If she wanted to put the songs equally into {four} different playlists, how many songs would she have left over?



Answers

1. 1

2. 9

3. 3

4. 5

5. 17

6. 1