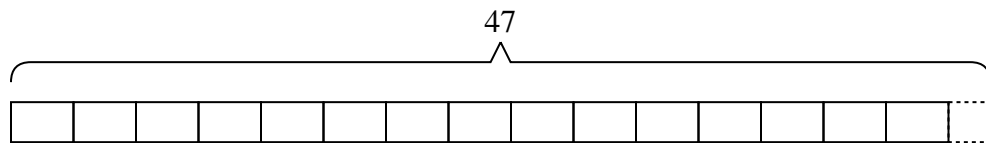




Solve each problem.

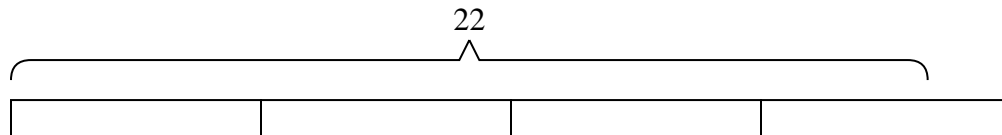
**Answers**

- 1) A coat factory had {forty-seven} coats. If they wanted to put them into {three} boxes, with the same number of coats in each box, how many extra coats would they have left over?



1. \_\_\_\_\_

- 2) A truck can hold {six} boxes. If you needed to move {twenty-two} boxes across town, how many trips would you need to make?



2. \_\_\_\_\_

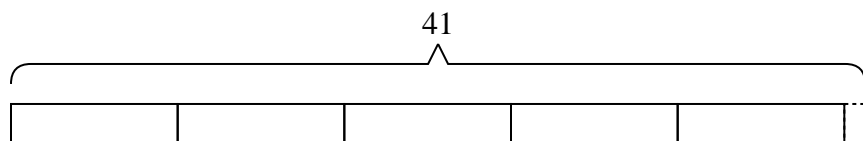
3. \_\_\_\_\_

4. \_\_\_\_\_

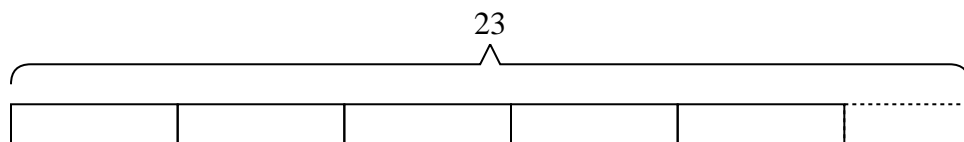
5. \_\_\_\_\_

6. \_\_\_\_\_


- 3) Janet had {forty-one} songs on her mp3 player. If she wanted to put the songs equally into {eight} different playlists, how many songs would she have left over?



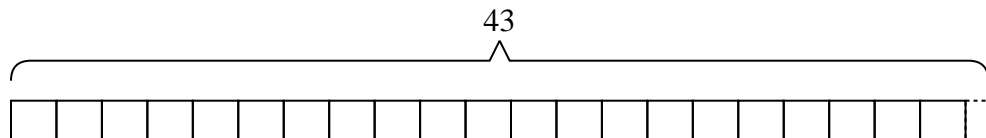
- 4) A cafeteria was putting milk cartons into stacks. They had {twenty-three} cartons and were putting them into stacks with {four} cartons in each stack. How many full stacks could they make?



- 5) Adam is trying to earn {twenty-six} dollars for some new toys. If he charges {eight} dollars to mow a lawn, how many lawns will he need to mow to earn the money?



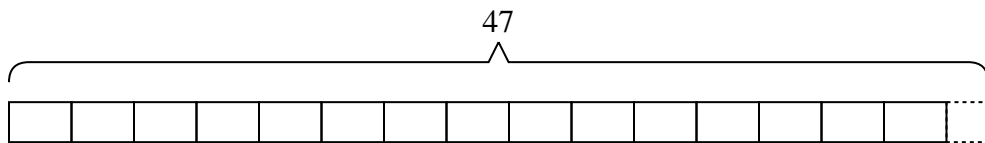
- 6) The roller coaster at the state fair costs {two} tickets per ride. If you had {forty-three} tickets, how many tickets would you have left if you rode it as many times as you could?



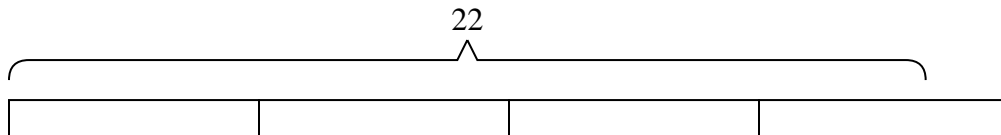


Solve each problem.

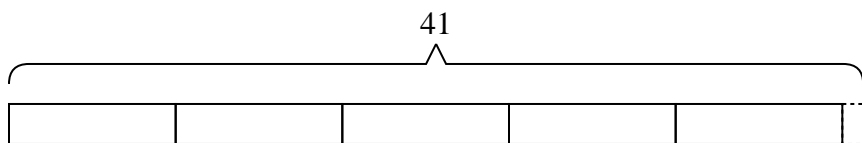
- 1) A coat factory had {forty-seven} coats. If they wanted to put them into {three} boxes, with the same number of coats in each box, how many extra coats would they have left over?



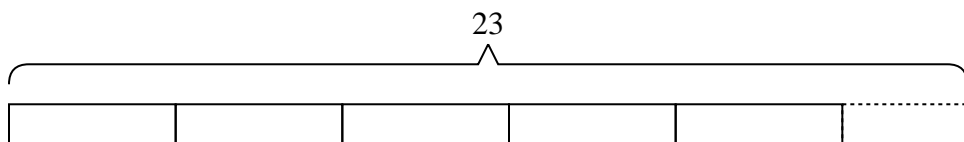
- 2) A truck can hold {six} boxes. If you needed to move {twenty-two} boxes across town, how many trips would you need to make?




- 3) Janet had {forty-one} songs on her mp3 player. If she wanted to put the songs equally into {eight} different playlists, how many songs would she have left over?



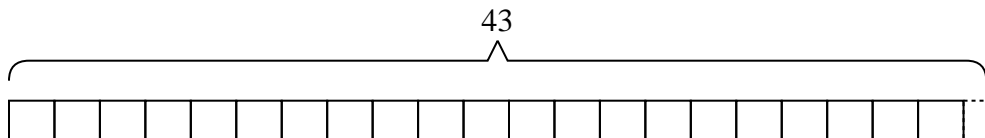
- 4) A cafeteria was putting milk cartons into stacks. They had {twenty-three} cartons and were putting them into stacks with {four} cartons in each stack. How many full stacks could they make?



- 5) Adam is trying to earn {twenty-six} dollars for some new toys. If he charges {eight} dollars to mow a lawn, how many lawns will he need to mow to earn the money?



- 6) The roller coaster at the state fair costs {two} tickets per ride. If you had {forty-three} tickets, how many tickets would you have left if you rode it as many times as you could?



Answers

1. 2

2. 4

3. 1

4. 5

5. 4

6. 1