



Solve each problem using a tape diagram.

**Answers**

- 1) Rachel sent 426 text messages over the summer. In July she sent 6 times as many as she did in August. And in June she sent 16 fewer than in July. How many texts did she send in June?
- 2) The elementary, middle and high schools were competing to see who could earn the most money fund raising. Together they earned \$217. The middle school ended up earning twice as much as the high school and the elementary earned \$18 fewer than the high school. How much money did the high school earn?
- 3) At the fair a vendor counted the number of balloons he gave away to kids, teens and adults. To teens he handed out 4 times as many as he had given to adults. To kids he gave out 4 fewer than he gave to teens. How many balloons did he give to teens, if he gave out 265 balloons all together?
- 4) Amanda, Bianca and Cathy bake 328 muffins. Bianca bakes 7 times as many muffins as Cathy. Amanda bakes 17 fewer muffins than Bianca. How many muffins did Cathy bake?
- 5) A theater owner was looking at how many sodas they sold of different sizes in a day. Total they sold 630 sodas. They sold  $\frac{1}{7}$  as many small sodas as they did large sodas. And they sold 15 fewer medium sodas as they did large sodas. How many large sodas did they sell?

1. \_\_\_\_\_

2. \_\_\_\_\_

3. \_\_\_\_\_

4. \_\_\_\_\_

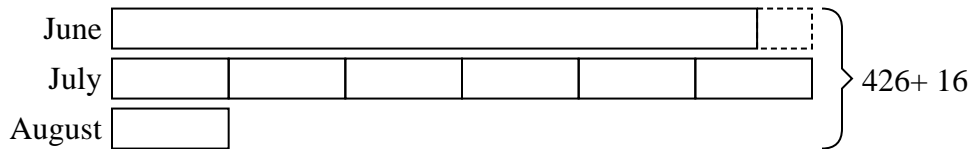
5. \_\_\_\_\_



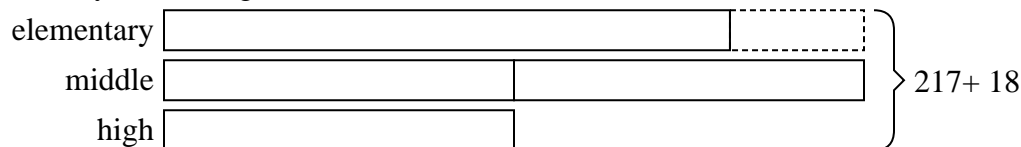
Solve each problem using a tape diagram.

**Answers**

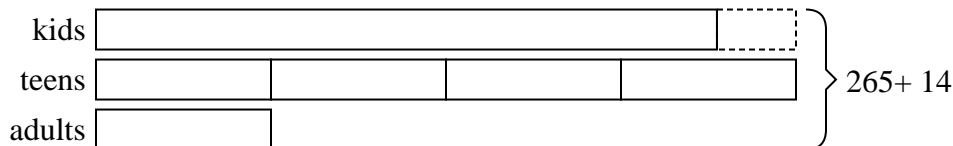
- 1) Rachel sent 426 text messages over the summer. In July she sent 6 times as many as she did in August. And in June she sent 16 fewer than in July. How many texts did she send in June?

1. **188**2. **47**3. **124**4. **23**5. **301**

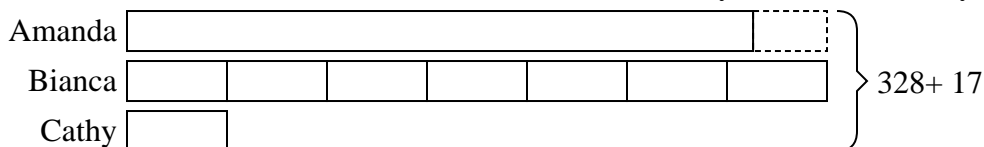
- 2) The elementary, middle and high schools were competing to see who could earn the most money fund raising. Together they earned \$217. The middle school ended up earning twice as much as the high school and the elementary earned \$18 fewer than the high school. How much money did the high school earn?



- 3) At the fair a vendor counted the number of balloons he gave away to kids, teens and adults. To teens he handed out 4 times as many as he had given to adults. To kids he gave out 4 fewer than he gave to teens. How many balloons did he give to teens, if he gave out 265 balloons all together?



- 4) Amanda, Bianca and Cathy bake 328 muffins. Bianca bakes 7 times as many muffins as Cathy. Amanda bakes 17 fewer muffins than Bianca. How many muffins did Cathy bake?



- 5) A theater owner was looking at how many sodas they sold of different sizes in a day. Total they sold 630 sodas. They sold 1/7 as many small sodas as they did large sodas. And they sold 15 fewer medium sodas as they did large sodas. How many large sodas did they sell?

