



Solve each problem.

Answers

1) A clown gave away 20 balloons to girls and 27 balloons to boys. How many balloons did he give away total?

1. _____

2) On Facebook Robin had 26 photos of her friends and 48 photos of her family. How many photos did she have total?

2. _____

3) A pet store had 22 birds that talked and 17 that didn't. How many birds did the pet store have total?

3. _____

4. _____

4) Carol had 29 DS games and her friend had 42 games. How many do they have total?

5. _____

5) A restaurant sold 41 sodas in the morning and 50 in the afternoon. How many sodas did they sell total?

6. _____

6) For Halloween Tom got 35 ounces of candy and Vanessa got 12 ounces of candy. What is the combined weight they received?

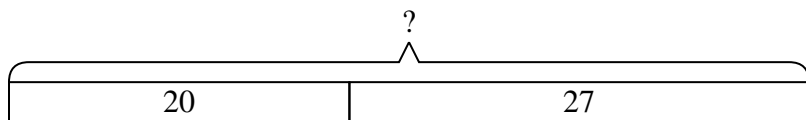
7. _____

7) A store sold 43 cold drinks and 33 hot drinks. How many drinks did they sell total?

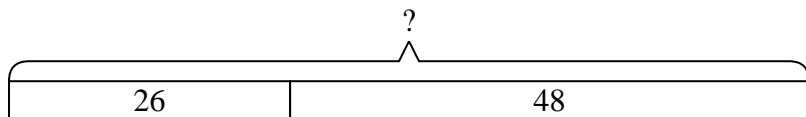


Solve each problem.

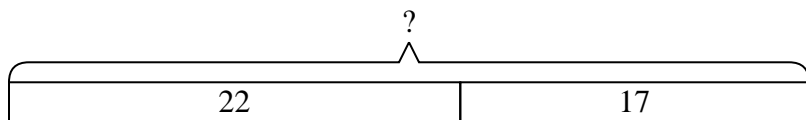
- 1) A clown gave away 20 balloons to girls and 27 balloons to boys. How many balloons did he give away total?



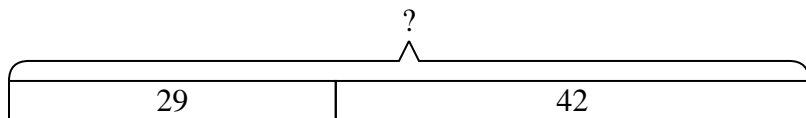
- 2) On Facebook Robin had 26 photos of her friends and 48 photos of her family. How many photos did she have total?



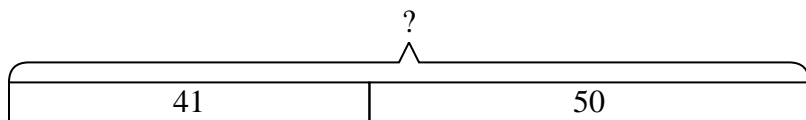
- 3) A pet store had 22 birds that talked and 17 that didn't. How many birds did the pet store have total?



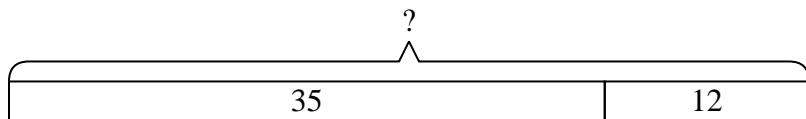
- 4) Carol had 29 DS games and her friend had 42 games. How many do they have total?



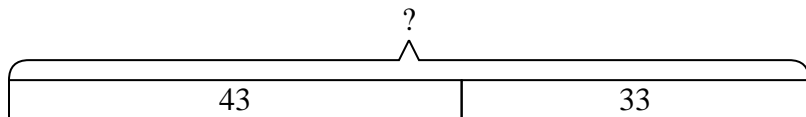
- 5) A restaurant sold 41 sodas in the morning and 50 in the afternoon. How many sodas did they sell total?



- 6) For Halloween Tom got 35 ounces of candy and Vanessa got 12 ounces of candy. What is the combined weight they received?



- 7) A store sold 43 cold drinks and 33 hot drinks. How many drinks did they sell total?



Answers

1. 47

2. 74

3. 39

4. 71

5. 91

6. 47

7. 76



Solve each problem.

Answers

- 1) A farmer planted 27 seeds on Wednesday and another 44 seeds on Thursday. How many seeds did he plant total?

- 2) Carol spent 38 minutes drawing at school and 22 minutes drawing at home. How many minutes total did she spend drawing?

- 3) A fast food restaurant sold 35 small hotdogs and 45 large hotdogs. How many hotdogs did they sell total?

- 4) Will had 18 books. During the book fair he bought 50 more. How many books did Will have total?

- 5) A store has 12 shirts. Later they got in 41 more shirts. How many shirts does the store have now?

- 6) Vanessa went to the movies 44 times last year and 36 times this year. How many times did Vanessa go to the movies total?

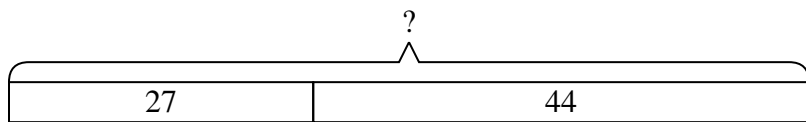
- 7) For Halloween Ned got 33 ounces of candy and Olivia got 46 ounces of candy. What is the combined weight they received?

1. _____
2. _____
3. _____
4. _____
5. _____
6. _____
7. _____

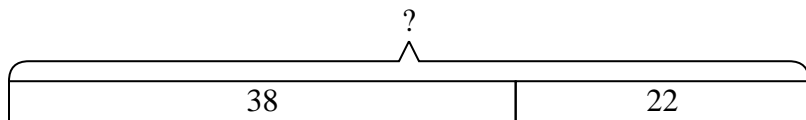


Solve each problem.

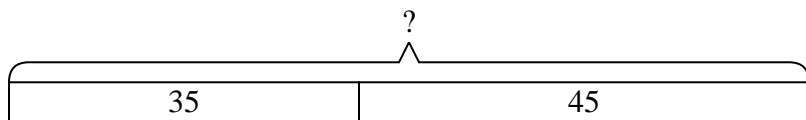
- 1) A farmer planted 27 seeds on Wednesday and another 44 seeds on Thursday. How many seeds did he plant total?



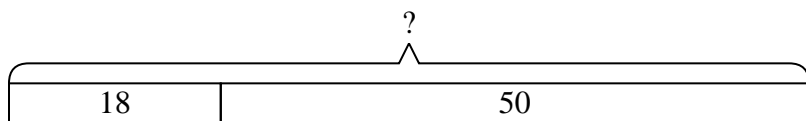
- 2) Carol spent 38 minutes drawing at school and 22 minutes drawing at home. How many minutes total did she spend drawing?



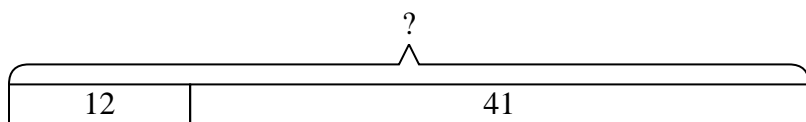
- 3) A fast food restaurant sold 35 small hotdogs and 45 large hotdogs. How many hotdogs did they sell total?



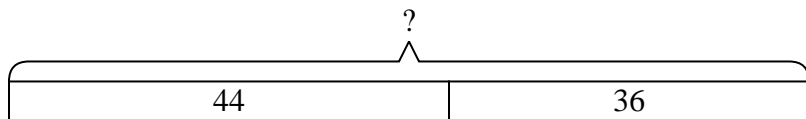
- 4) Will had 18 books. During the book fair he bought 50 more. How many books did Will have total?



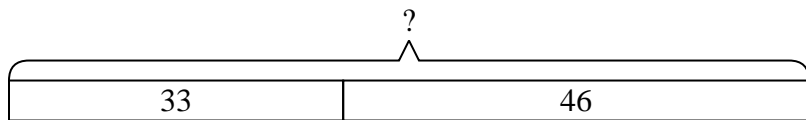
- 5) A store has 12 shirts. Later they got in 41 more shirts. How many shirts does the store have now?



- 6) Vanessa went to the movies 44 times last year and 36 times this year. How many times did Vanessa go to the movies total?



- 7) For Halloween Ned got 33 ounces of candy and Olivia got 46 ounces of candy. What is the combined weight they received?



Answers

1. 71

2. 60

3. 80

4. 68

5. 53

6. 80

7. 79



Solve each problem.

Answers

- 1) In the first half of a trivia game John scored 26 points. In the second half he scored 28 points. How many points did he score total?

- 2) Kristine had \$25 and Tiffany had \$30. If they combined their money, how much would they have?

- 3) A fast food restaurant sold 22 small hotdogs and 42 large hotdogs. How many hotdogs did they sell total?

- 4) A pet store had 36 birds that talked and 50 that didn't. How many birds did the pet store have total?

- 5) Cody owned 29 baseball cards. For his birthday he got 39 more. How many cards does Cody have total?

- 6) Kaleb had 36 dollars saved up. After doing some chores his mother gave him another 23 dollars. How much money does he have total?

- 7) Maria had 19 books. If she bought 39 more at a yard sale how many would she have total?

1. _____

2. _____

3. _____

4. _____

5. _____

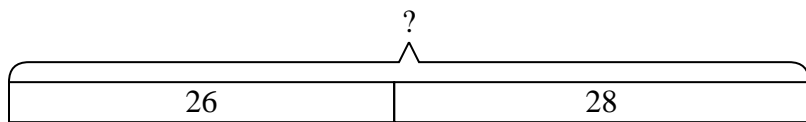
6. _____

7. _____

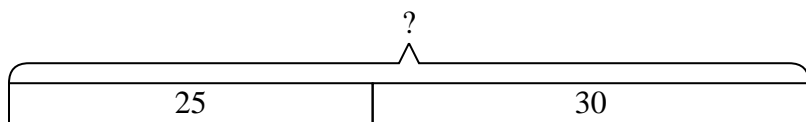


Solve each problem.

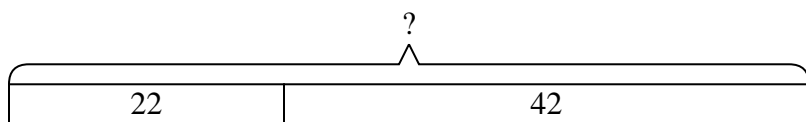
- 1) In the first half of a trivia game John scored 26 points. In the second half he scored 28 points. How many points did he score total?



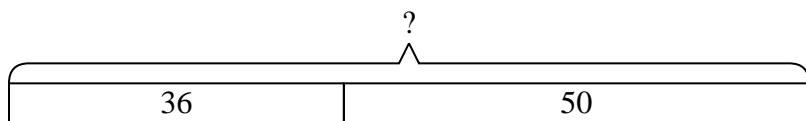
- 2) Kristine had \$25 and Tiffany had \$30. If they combined their money, how much would they have?



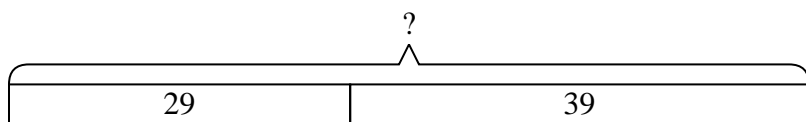
- 3) A fast food restaurant sold 22 small hotdogs and 42 large hotdogs. How many hotdogs did they sell total?



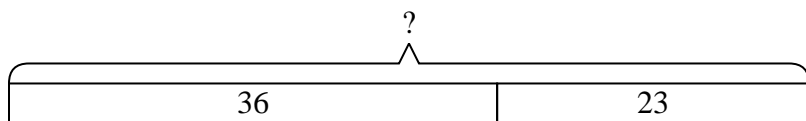
- 4) A pet store had 36 birds that talked and 50 that didn't. How many birds did the pet store have total?



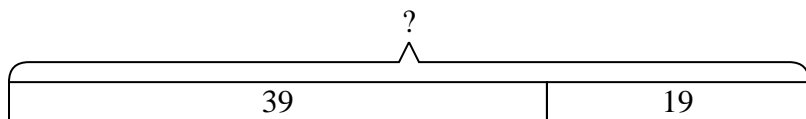
- 5) Cody owned 29 baseball cards. For his birthday he got 39 more. How many cards does Cody have total?



- 6) Kaleb had 36 dollars saved up. After doing some chores his mother gave him another 23 dollars. How much money does he have total?



- 7) Maria had 19 books. If she bought 39 more at a yard sale how many would she have total?



Answers

1. 54

2. 55

3. 64

4. 86

5. 68

6. 59

7. 58



Solve each problem.

Answers

1) A grocery store had 42 bottles of regular soda and 39 bottles of diet soda. How many bottles did they have total?

1. _____

2) A restaurant sold 50 sodas in the morning and 14 in the afternoon. How many sodas did they sell total?

2. _____

3) A fast food restaurant sold 42 small hotdogs and 38 large hotdogs. How many hotdogs did they sell total?

3. _____

4) George had 13 dollars saved up. After doing some chores his mother gave him another 45 dollars. How much money does he have total?

4. _____

5) At the fair Carol started with 36 tickets and then bought 40 more. How many tickets did Carol have total?

5. _____

6) Edward had \$41. Later he sold some of his old toys and got another \$48. How much money does he have total?

6. _____

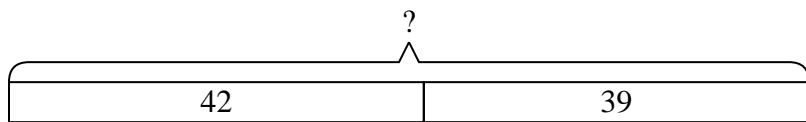
7) In the first half of a trivia game Cody scored 22 points. In the second half he scored 32 points. How many points did he score total?

7. _____

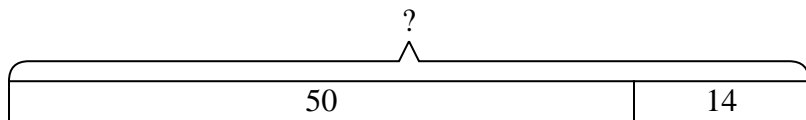


Solve each problem.

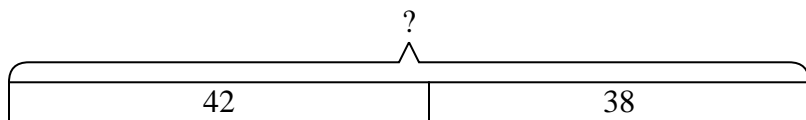
- 1) A grocery store had 42 bottles of regular soda and 39 bottles of diet soda. How many bottles did they have total?



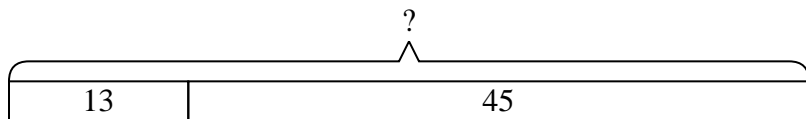
- 2) A restaurant sold 50 sodas in the morning and 14 in the afternoon. How many sodas did they sell total?



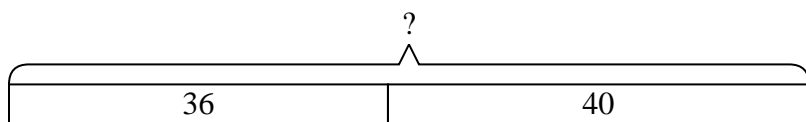
- 3) A fast food restaurant sold 42 small hotdogs and 38 large hotdogs. How many hotdogs did they sell total?



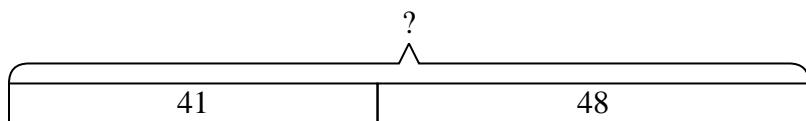
- 4) George had 13 dollars saved up. After doing some chores his mother gave him another 45 dollars. How much money does he have total?



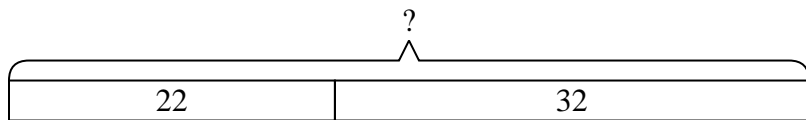
- 5) At the fair Carol started with 36 tickets and then bought 40 more. How many tickets did Carol have total?



- 6) Edward had \$41. Later he sold some of his old toys and got another \$48. How much money does he have total?



- 7) In the first half of a trivia game Cody scored 22 points. In the second half he scored 32 points. How many points did he score total?



Answers

1. 81

2. 64

3. 80

4. 58

5. 76

6. 89

7. 54



Solve each problem.

Answers

- 1) Amy picked up 46 pieces of paper from the floor. If Dave picked up 30 pieces, how many did they pick up total?

- 2) Sam had 16 books. During the book fair he bought 19 more. How many books did Sam have total?

- 3) For a party George spent 19 dollars on food and 47 dollars on drinks. How much did George spend total?

- 4) Paige had 20 pieces of candy. Her friend gave her 38 more pieces. How many pieces of candy did Paige have total?

- 5) Tom had \$14. Later he sold some of his old toys and got another \$34. How much money does he have total?

- 6) Janet spent 47 minutes drawing at school and 20 minutes drawing at home. How many minutes total did she spend drawing?

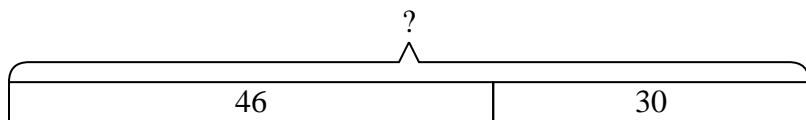
- 7) Frank had 31 dollars saved up. After doing some chores his mother gave him another 43 dollars. How much money does he have total?

- 1. _____
- 2. _____
- 3. _____
- 4. _____
- 5. _____
- 6. _____
- 7. _____

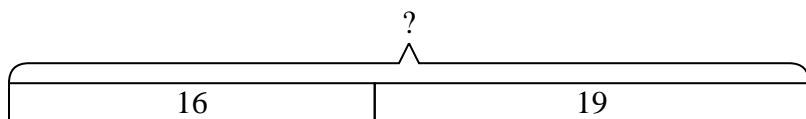


Solve each problem.

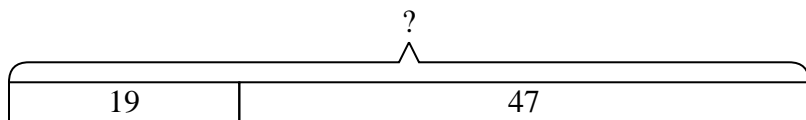
- 1) Amy picked up 46 pieces of paper from the floor. If Dave picked up 30 pieces, how many did they pick up total?



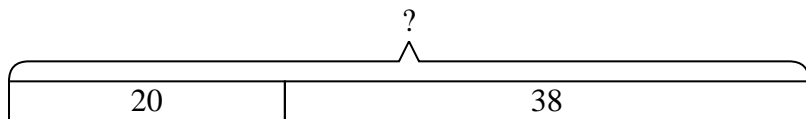
- 2) Sam had 16 books. During the book fair he bought 19 more. How many books did Sam have total?



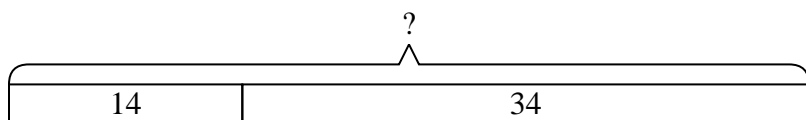
- 3) For a party George spent 19 dollars on food and 47 dollars on drinks. How much did George spend total?



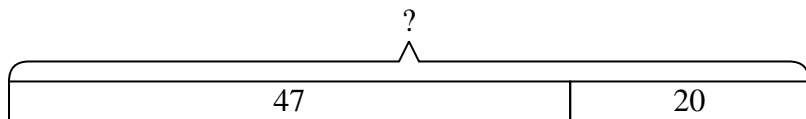
- 4) Paige had 20 pieces of candy. Her friend gave her 38 more pieces. How many pieces of candy did Paige have total?



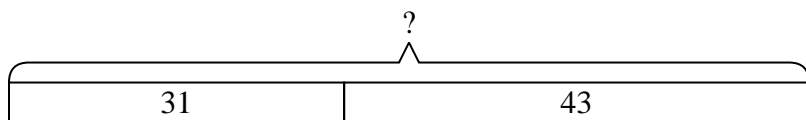
- 5) Tom had \$14. Later he sold some of his old toys and got another \$34. How much money does he have total?



- 6) Janet spent 47 minutes drawing at school and 20 minutes drawing at home. How many minutes total did she spend drawing?



- 7) Frank had 31 dollars saved up. After doing some chores his mother gave him another 43 dollars. How much money does he have total?



Answers

1. 76

2. 35

3. 66

4. 58

5. 48

6. 67

7. 74



Solve each problem.

Answers

1) There were 32 people in line at lunch when 15 more got in line. How many people were there total in line?

1. _____

2) Olivia spent 22 minutes drawing at school and 49 minutes drawing at home. How many minutes total did she spend drawing?

2. _____

3) Vanessa received 43 text messages before noon and another 37 after noon. How many text messages did Vanessa receive total?

3. _____

4) For a party George spent 14 dollars on food and 47 dollars on drinks. How much did George spend total?

4. _____

5) On Facebook Janet had 41 photos of her friends and 11 photos of her family. How many photos did she have total?

5. _____

6) A store sold 41 cold drinks and 27 hot drinks. How many drinks did they sell total?

6. _____

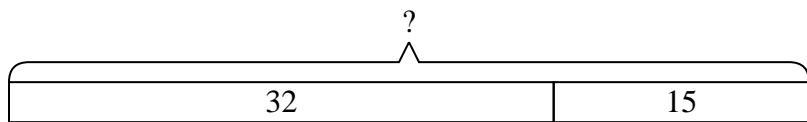
7) A clown gave away 21 balloons to girls and 34 balloons to boys. How many balloons did he give away total?

7. _____

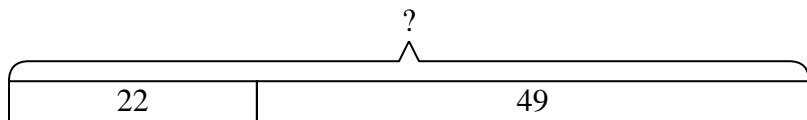


Solve each problem.

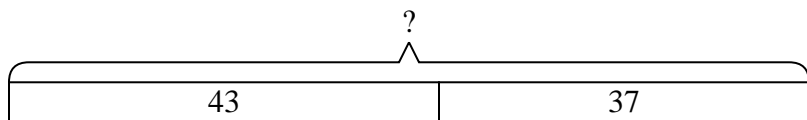
- 1) There were 32 people in line at lunch when 15 more got in line. How many people were there total in line?



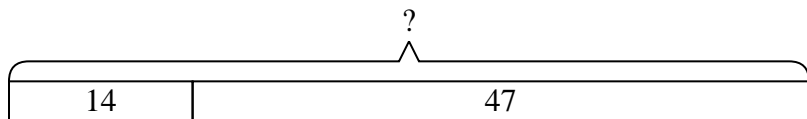
- 2) Olivia spent 22 minutes drawing at school and 49 minutes drawing at home. How many minutes total did she spend drawing?



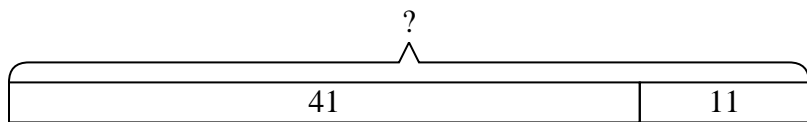
- 3) Vanessa received 43 text messages before noon and another 37 after noon. How many text messages did Vanessa receive total?



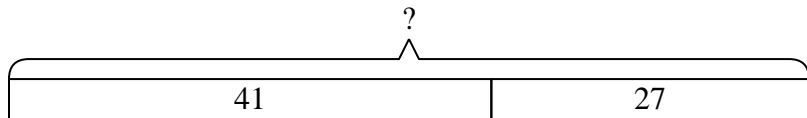
- 4) For a party George spent 14 dollars on food and 47 dollars on drinks. How much did George spend total?



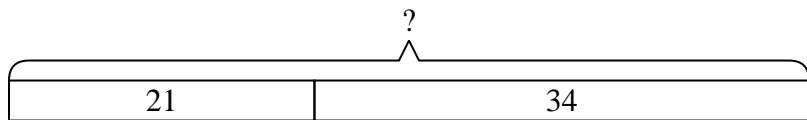
- 5) On Facebook Janet had 41 photos of her friends and 11 photos of her family. How many photos did she have total?



- 6) A store sold 41 cold drinks and 27 hot drinks. How many drinks did they sell total?



- 7) A clown gave away 21 balloons to girls and 34 balloons to boys. How many balloons did he give away total?



Answers

1. 47

2. 71

3. 80

4. 61

5. 52

6. 68

7. 55



Solve each problem.

Answers

- 1) A pet store had 32 kittens. If they got another 35 kittens, how many would they have total?

- 2) Lana received 37 text messages before noon and another 19 after noon. How many text messages did Lana receive total?

- 3) Bianca has 44 Playstation games and 41 Xbox games. How many games does she have total?

- 4) Emily spent 39 minutes drawing at school and 43 minutes drawing at home. How many minutes total did she spend drawing?

- 5) A store sold 16 cold drinks and 27 hot drinks. How many drinks did they sell total?

- 6) A clown gave away 31 balloons to girls and 40 balloons to boys. How many balloons did he give away total?

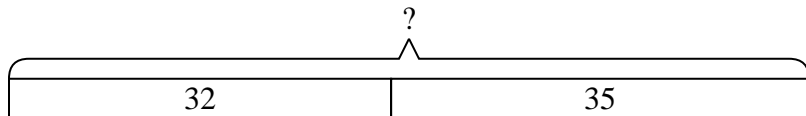
- 7) A baker already had 46 cakes but made 45 extra. How many cakes did the baker have total?

- 1. _____
- 2. _____
- 3. _____
- 4. _____
- 5. _____
- 6. _____
- 7. _____

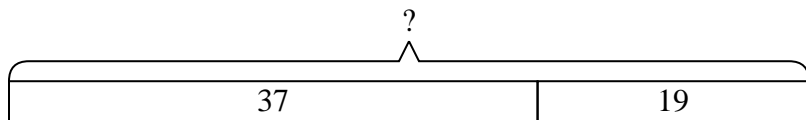


Solve each problem.

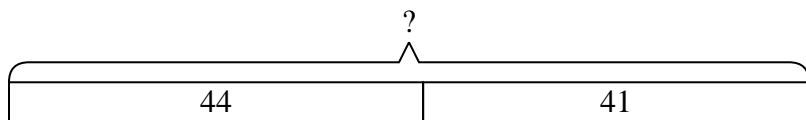
- 1) A pet store had 32 kittens. If they got another 35 kittens, how many would they have total?



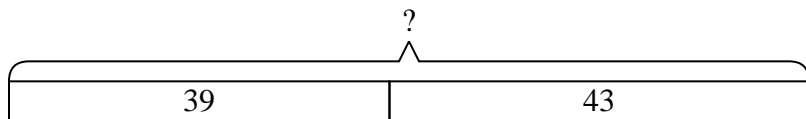
- 2) Lana received 37 text messages before noon and another 19 after noon. How many text messages did Lana receive total?



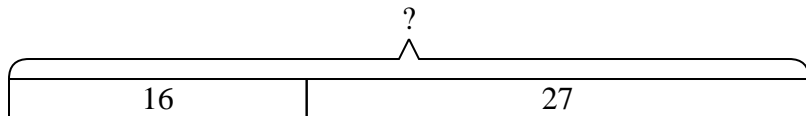
- 3) Bianca has 44 Playstation games and 41 Xbox games. How many games does she have total?



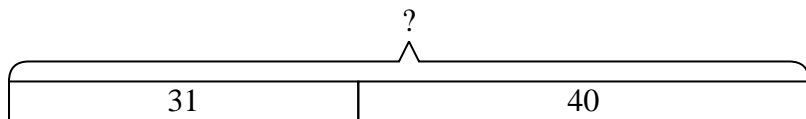
- 4) Emily spent 39 minutes drawing at school and 43 minutes drawing at home. How many minutes total did she spend drawing?



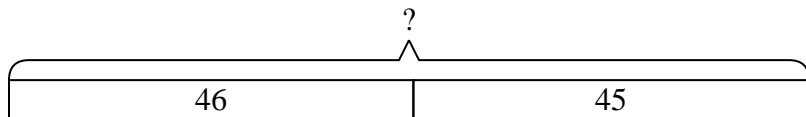
- 5) A store sold 16 cold drinks and 27 hot drinks. How many drinks did they sell total?



- 6) A clown gave away 31 balloons to girls and 40 balloons to boys. How many balloons did he give away total?



- 7) A baker already had 46 cakes but made 45 extra. How many cakes did the baker have total?



Answers

1. 67

2. 56

3. 85

4. 82

5. 43

6. 71

7. 91



Solve each problem.

Answers

1) Kristine had \$41 and Tiffany had \$28. If they combined their money, how much would they have?

1. _____

2) For Halloween Edward got 42 ounces of candy and Rachel got 39 ounces of candy. What is the combined weight they received?

2. _____

3) Oliver had \$50. Later he sold some of his old toys and got another \$37. How much money does he have total?

3. _____

4) A grocery store had 19 bottles of regular soda and 25 bottles of diet soda. How many bottles did they have total?

4. _____

5) Amy had 27 DS games and her friend had 16 games. How many do they have total?

5. _____

6) A farmer planted 35 seeds on Wednesday and another 10 seeds on Thursday. How many seeds did he plant total?

6. _____

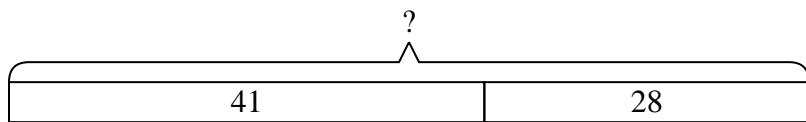
7) While playing a game George had 38 points. If he scored another 47 points, how many points would he have total?

7. _____

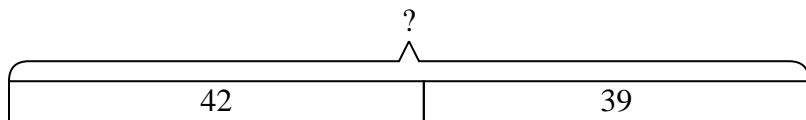


Solve each problem.

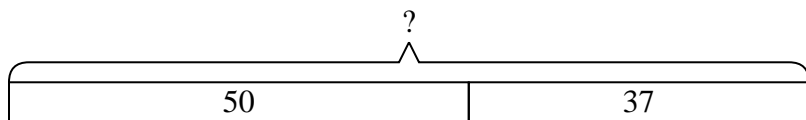
- 1) Kristine had \$41 and Tiffany had \$28. If they combined their money, how much would they have?



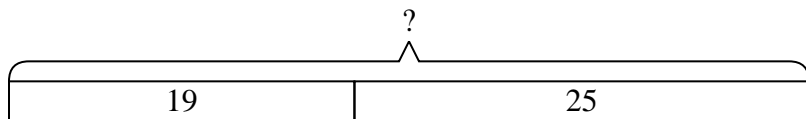
- 2) For Halloween Edward got 42 ounces of candy and Rachel got 39 ounces of candy. What is the combined weight they received?



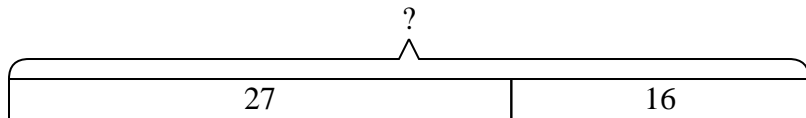
- 3) Oliver had \$50. Later he sold some of his old toys and got another \$37. How much money does he have total?



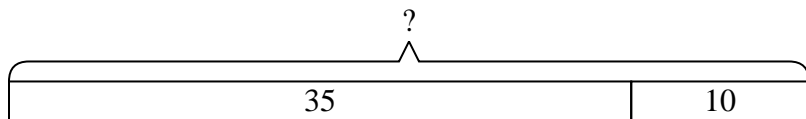
- 4) A grocery store had 19 bottles of regular soda and 25 bottles of diet soda. How many bottles did they have total?



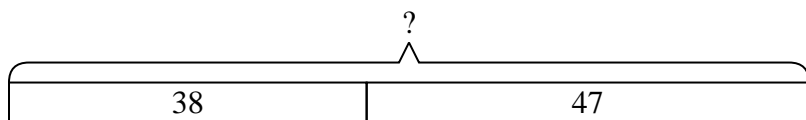
- 5) Amy had 27 DS games and her friend had 16 games. How many do they have total?



- 6) A farmer planted 35 seeds on Wednesday and another 10 seeds on Thursday. How many seeds did he plant total?



- 7) While playing a game George had 38 points. If he scored another 47 points, how many points would he have total?



Answers

1. 69

2. 81

3. 87

4. 44

5. 43

6. 45

7. 85



Solve each problem.

Answers

- 1) Bianca had 49 sheets of paper in her desk and 23 more in her backpack. How many did she have total?

- 2) Luke collected 14 cans to recycle on Monday and 47 more on Tuesday. How many cans did Luke collect all together?

- 3) Katie received 24 text messages before noon and another 28 after noon. How many text messages did Katie receive total?

- 4) Carol had 18 DS games and her friend had 44 games. How many do they have total?

- 5) A restaurant sold 25 sodas in the morning and 42 in the afternoon. How many sodas did they sell total?

- 6) On Facebook Olivia had 20 photos of her friends and 32 photos of her family. How many photos did she have total?

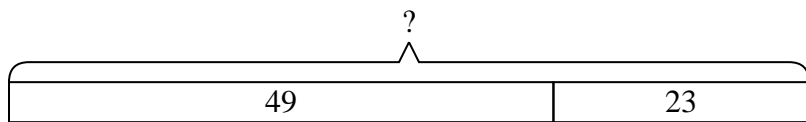
- 7) A clown gave away 43 balloons to girls and 45 balloons to boys. How many balloons did he give away total?

- 1. _____
- 2. _____
- 3. _____
- 4. _____
- 5. _____
- 6. _____
- 7. _____

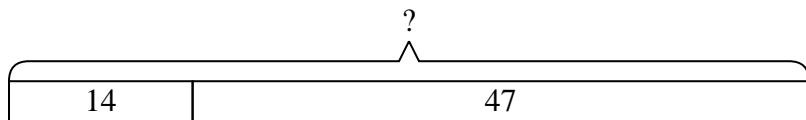


Solve each problem.

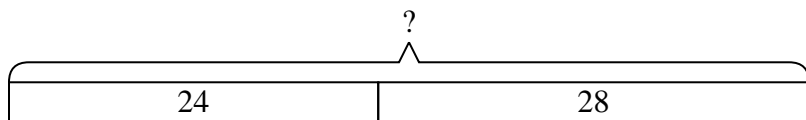
- 1) Bianca had 49 sheets of paper in her desk and 23 more in her backpack. How many did she have total?



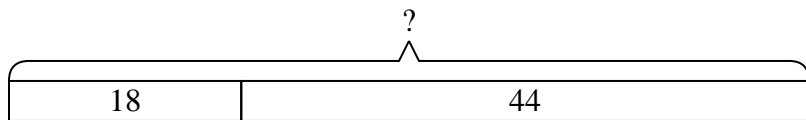
- 2) Luke collected 14 cans to recycle on Monday and 47 more on Tuesday. How many cans did Luke collect all together?



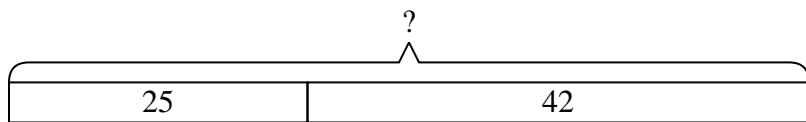
- 3) Katie received 24 text messages before noon and another 28 after noon. How many text messages did Katie receive total?



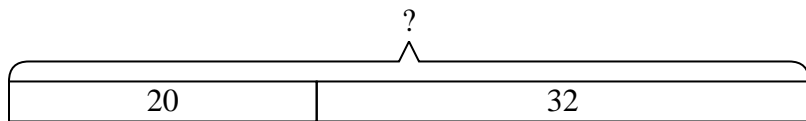
- 4) Carol had 18 DS games and her friend had 44 games. How many do they have total?



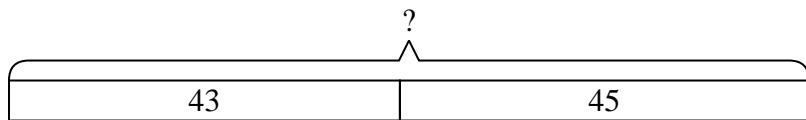
- 5) A restaurant sold 25 sodas in the morning and 42 in the afternoon. How many sodas did they sell total?



- 6) On Facebook Olivia had 20 photos of her friends and 32 photos of her family. How many photos did she have total?



- 7) A clown gave away 43 balloons to girls and 45 balloons to boys. How many balloons did he give away total?



Answers

1. 72

2. 61

3. 52

4. 62

5. 67

6. 52

7. 88



Solve each problem.

Answers

- 1) A restaurant sold 20 sodas in the morning and 47 in the afternoon. How many sodas did they sell total?

- 2) While playing a game Jerry had 11 points. If he scored another 47 points, how many points would he have total?

- 3) There were 41 people in line at lunch when 10 more got in line. How many people were there total in line?

- 4) A farmer planted 26 seeds on Wednesday and another 18 seeds on Thursday. How many seeds did he plant total?

- 5) Emily went to the movies 29 times last year and 47 times this year. How many times did Emily go to the movies total?

- 6) Kristine had \$27 and Tiffany had \$11. If they combined their money, how much would they have?

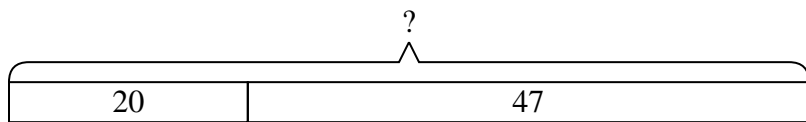
- 7) Amy has 11 Playstation games and 38 Xbox games. How many games does she have total?

1. _____
2. _____
3. _____
4. _____
5. _____
6. _____
7. _____

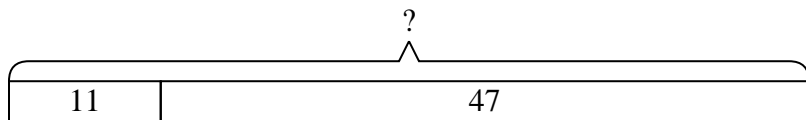


Solve each problem.

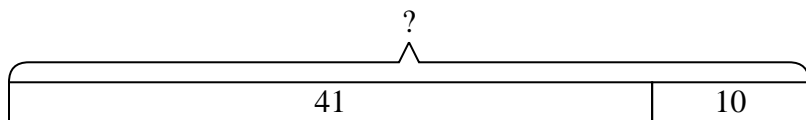
- 1) A restaurant sold 20 sodas in the morning and 47 in the afternoon. How many sodas did they sell total?



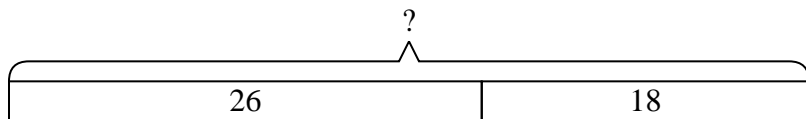
- 2) While playing a game Jerry had 11 points. If he scored another 47 points, how many points would he have total?



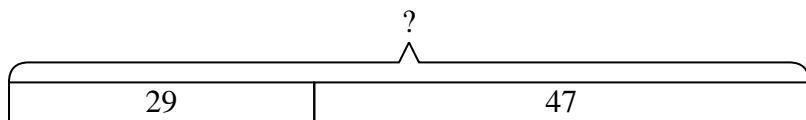
- 3) There were 41 people in line at lunch when 10 more got in line. How many people were there total in line?



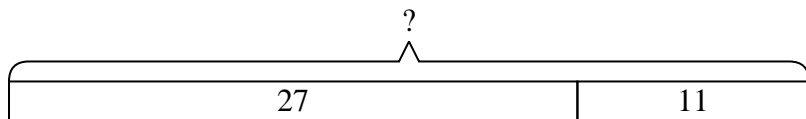
- 4) A farmer planted 26 seeds on Wednesday and another 18 seeds on Thursday. How many seeds did he plant total?



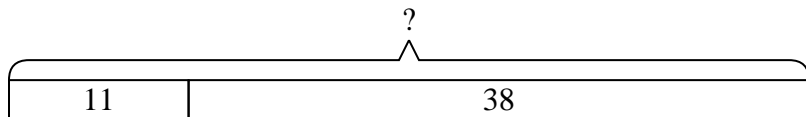
- 5) Emily went to the movies 29 times last year and 47 times this year. How many times did Emily go to the movies total?



- 6) Kristine had \$27 and Tiffany had \$11. If they combined their money, how much would they have?



- 7) Amy has 11 Playstation games and 38 Xbox games. How many games does she have total?



Answers

1. 67

2. 58

3. 51

4. 44

5. 76

6. 38

7. 49