



Solve each problem.

Answers

1) There were 32 people in line at lunch when 15 more got in line. How many people were there total in line?

1. _____

2) Olivia spent 22 minutes drawing at school and 49 minutes drawing at home. How many minutes total did she spend drawing?

2. _____

3) Vanessa received 43 text messages before noon and another 37 after noon. How many text messages did Vanessa receive total?

3. _____

4) For a party George spent 14 dollars on food and 47 dollars on drinks. How much did George spend total?

4. _____

5) On Facebook Janet had 41 photos of her friends and 11 photos of her family. How many photos did she have total?

5. _____

6) A store sold 41 cold drinks and 27 hot drinks. How many drinks did they sell total?

6. _____

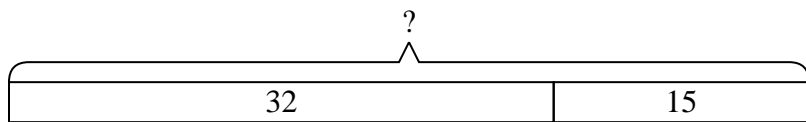
7) A clown gave away 21 balloons to girls and 34 balloons to boys. How many balloons did he give away total?

7. _____

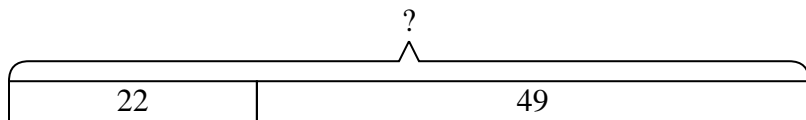


Solve each problem.

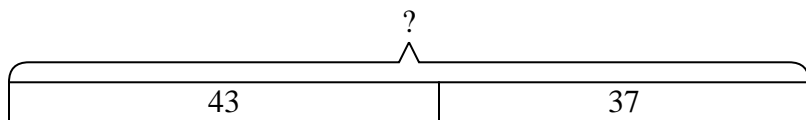
- 1) There were 32 people in line at lunch when 15 more got in line. How many people were there total in line?



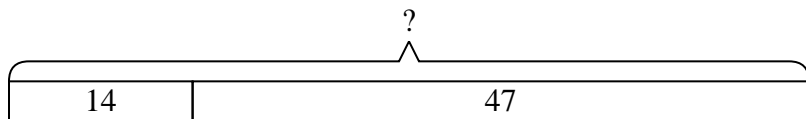
- 2) Olivia spent 22 minutes drawing at school and 49 minutes drawing at home. How many minutes total did she spend drawing?



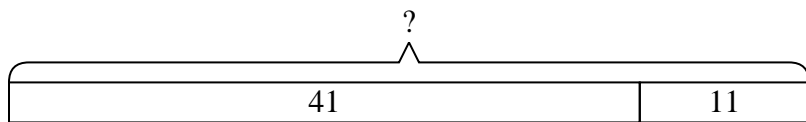
- 3) Vanessa received 43 text messages before noon and another 37 after noon. How many text messages did Vanessa receive total?



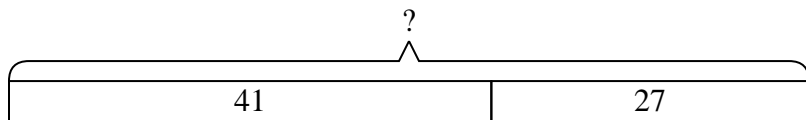
- 4) For a party George spent 14 dollars on food and 47 dollars on drinks. How much did George spend total?



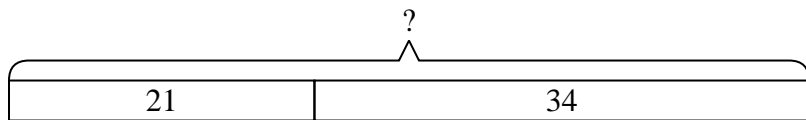
- 5) On Facebook Janet had 41 photos of her friends and 11 photos of her family. How many photos did she have total?



- 6) A store sold 41 cold drinks and 27 hot drinks. How many drinks did they sell total?



- 7) A clown gave away 21 balloons to girls and 34 balloons to boys. How many balloons did he give away total?



Answers

1. 47

2. 71

3. 80

4. 61

5. 52

6. 68

7. 55