



Solve each problem.

Answers

- 1) A restaurant sold 20 sodas in the morning and 47 in the afternoon. How many sodas did they sell total?

- 2) While playing a game Jerry had 11 points. If he scored another 47 points, how many points would he have total?

- 3) There were 41 people in line at lunch when 10 more got in line. How many people were there total in line?

- 4) A farmer planted 26 seeds on Wednesday and another 18 seeds on Thursday. How many seeds did he plant total?

- 5) Emily went to the movies 29 times last year and 47 times this year. How many times did Emily go to the movies total?

- 6) Kristine had \$27 and Tiffany had \$11. If they combined their money, how much would they have?

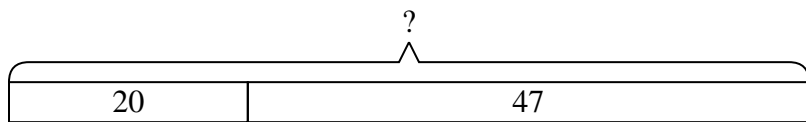
- 7) Amy has 11 Playstation games and 38 Xbox games. How many games does she have total?

1. _____
2. _____
3. _____
4. _____
5. _____
6. _____
7. _____

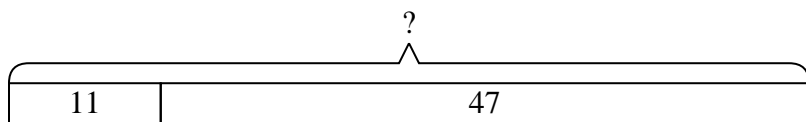


Solve each problem.

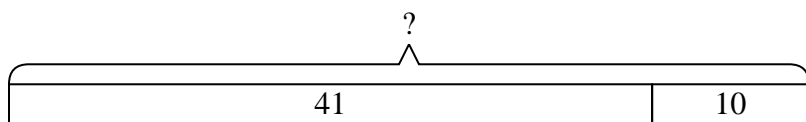
- 1) A restaurant sold 20 sodas in the morning and 47 in the afternoon. How many sodas did they sell total?



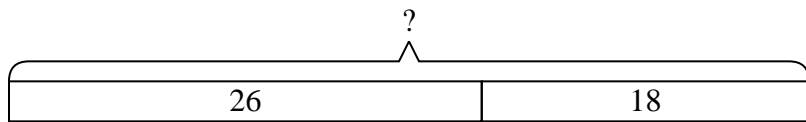
- 2) While playing a game Jerry had 11 points. If he scored another 47 points, how many points would he have total?



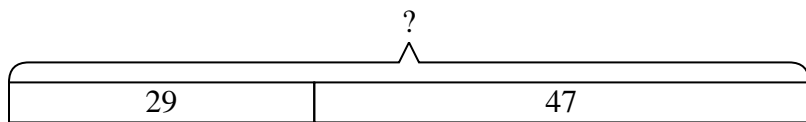
- 3) There were 41 people in line at lunch when 10 more got in line. How many people were there total in line?



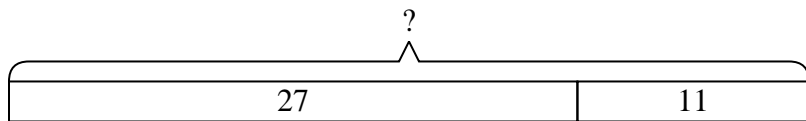
- 4) A farmer planted 26 seeds on Wednesday and another 18 seeds on Thursday. How many seeds did he plant total?



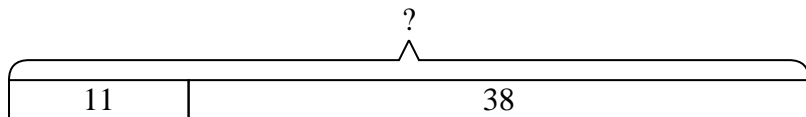
- 5) Emily went to the movies 29 times last year and 47 times this year. How many times did Emily go to the movies total?



- 6) Kristine had \$27 and Tiffany had \$11. If they combined their money, how much would they have?



- 7) Amy has 11 Playstation games and 38 Xbox games. How many games does she have total?



Answers

1. 67

2. 58

3. 51

4. 44

5. 76

6. 38

7. 49