



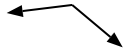
Determine if the angle shown is 'less', 'more' or 'equal' to 90°.

Answers

Ex)



1)



2)



Ex. **equal**

1. \_\_\_\_\_

2. \_\_\_\_\_

3)



4)



5)



3. \_\_\_\_\_

4. \_\_\_\_\_

6)



7)



8)



5. \_\_\_\_\_

6. \_\_\_\_\_

7. \_\_\_\_\_

9)



10)



11)



8. \_\_\_\_\_

9. \_\_\_\_\_

10. \_\_\_\_\_

12)



13)



14)



11. \_\_\_\_\_

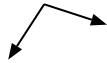
12. \_\_\_\_\_

13. \_\_\_\_\_

15)



16)



17)



14. \_\_\_\_\_

15. \_\_\_\_\_

16. \_\_\_\_\_

18)



19)



20)



17. \_\_\_\_\_

18. \_\_\_\_\_

19. \_\_\_\_\_

20. \_\_\_\_\_

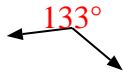


Determine if the angle shown is 'less', 'more' or 'equal' to 90°.

Ex)



1)



2)



Ex. equal

1. more

2. equal

3. less

4. equal

5. less

6. less

7. more

8. less

9. less

10. less

11. equal

12. more

13. equal

14. more

15. equal

16. more

17. equal

18. less

19. equal

20. less

3)



4)



5)



6)



7)



8)



9)



10)



11)



12)



13)



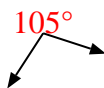
14)



15)



16)



17)



18)



19)



20)

